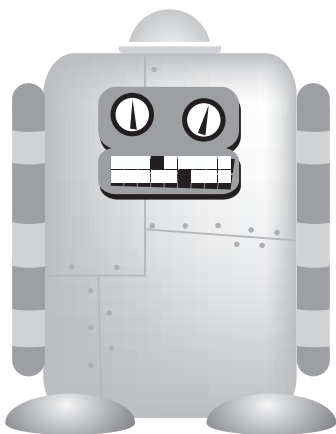




# Mata go Deo! Naíonáin Sinsir!

Florence Gavin



Aisling Ní Fharachtáin & Áine Ní Fhlatharta  
a d'aistrigh

 AN GÚM  
Baile Átha Cliath

Ba iad Mulberry Publications a chéadfhoilsigh  
faoin teideal *MakeSure Maths Senior Infants*

© Florence Gavin, 2006

An leagan Gaeilge  
© Foras na Gaeilge, 2012

ISBN 978-1-85791-820-5

Gach ceart ar cosaint. Ní ceadmhach aon chuid  
den fhoilseachán seo a atáirgeadh,  
gan cead a fháil roimh ré ón bhfoilsitheoir.

Susan Meaney a dhear agus a chuir suas an cló  
[www.smeaney.com](http://www.smeaney.com)

PB Print a chlóbhuail in Éirinn

*Le fáil ar an bpost uathu seo:*

An Siopa Leabhar  
6 Sráid Fhearchair  
Baile Átha Cliath 2  
[siopa@cnag.ie](mailto:siopa@cnag.ie)

*nó*

An Ceathrú Póilí  
Cultúrlann Mac Adam–Ó Fiaich  
216 Bóthar na bhFál  
Béal Feirste BT12 6AH  
[leabhair@an4poili.com](mailto:leabhair@an4poili.com)

*Orduithe ó leabhardhíoltóirí chuig:*

Áis  
31 Sráid na bhFíníní  
Baile Átha Cliath 2  
[eolas@forasnagaeilge.ie](mailto:eolas@forasnagaeilge.ie)



# Mata go Deo! Naíonáin Sinsir!

SNÁITHE






SNÁITHAONAD

LEATHANACH

Luathghníomhaíochtaí Matamaitice	Sortáil & Rangú	2
Luathghníomhaíochtaí Matamaitice	Meitseáil	5
Uimhreas	Cé mhéad?	7
Uimhreas	Meitseáil ceann le ceann	11
Uimhreas	Comhcheangal	12
Uimhreas	Suimiú	15
Uimhreas	Cé mhéad san iomlán?	16
Uimhreas	Tomhais cé mhéad atá ann	17
Uimhreas	Comhaireamh & Meitseáil	18
Uimhreas	Comhair siar go dtí a náid	20
Uimhreas	Tomhais cé mhéad atá ann	22
Uimhreas	Inis an scéilín	23
	<b>Measúnú 1</b>	<b>24</b>
Ailgéabar	Céard é an chéad rud eile?	26
Uimhreas	Comhair siar	27
Cruth agus Spás	Foclóirín	28
Cruth agus Spás	Cé mhéad triantán a fheiceann tú?	30
Cruth agus Spás	Cé mhéad leath-thriantán a fheiceann tú?	31
Cruth agus Spás	Cé mhéad leathchiorcal a fheiceann tú?	32
Tomhais	Fad	33
Uimhreas	Orduimhreacha	35
Tomhais	An tAm	36
Tomhais	Meáchan	37
Tomhais	Toilleadh	38
Tomhais	An tAm	39
Tomhais	Aois	40
Tomhais	An tAm: Uaireanta an Chloig	42
	<b>Measúnú 2</b>	<b>46</b>
Tomhais	Airgead	48
Tomhais	Fad	54
Uimhreas	Scéilíní Uimhris	55
	<b>Measúnú 3</b>	<b>57</b>

# Sórtáil agus Rangú

Cén gaol atá ag na rudaí seo thíos le chéile? Labhair faoi seo.



Labhair faoi seo.

Cé mhéad mála?

Cé mhéad bróg?



Cé mhéad buidéal?

Cé mhéad puball?

# Sortáil agus Rangú

Labhair faoi seo.








## Ainmhithe éagsúla

Ainmhithe Fiáine

Ainmhithe Feirme

Cé mhéad díobh atá ann?


Cé mhéad díobh atá ann?



# Meaitseáil

Meaitseáil na pinn luaidhe lena chéile. Labhair faoi seo.





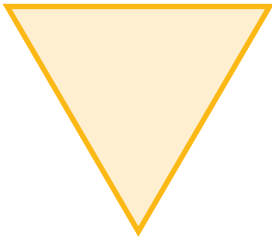
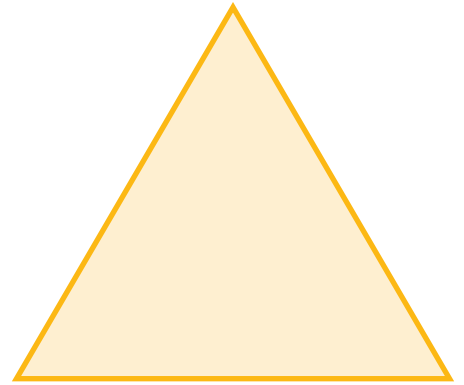
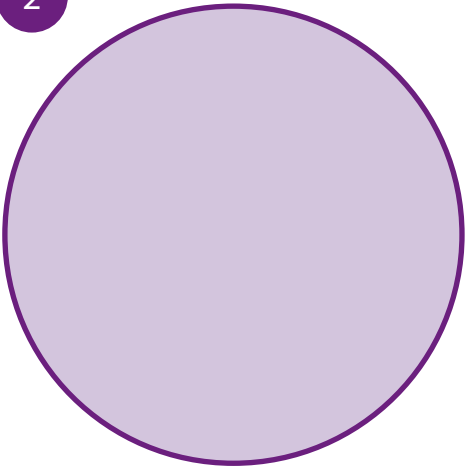
1



# Meaitseáil

Labhair faoi na cruthanna thíos.

2





















# Cé mhéad?

Labhair faoi seo.

1









Ciorcail Cé mhéad ciorcal atá i ngach bosca thíos?










# Cé mhéad?

Labhair faoi seo.

1 Triantáin Cé mhéad triantán atá i ngach bosca thíos?



2 Cearnóga Cé mhéad cearnóg atá i ngach bosca thíos?



Tosaigh ag pointe éagsúil gach uair.

Tosaigh

1



Tosaigh

2



An athraíonn an freagra má thosnaíonn tú ag comhaireamh ag pointe nua gach uair?

Athraíonn

Ní athraíonn

3



Tosaigh

4



Tosaigh

# Cé mhéad?

Cé mhéad spota?

1

a)



b)



c)



d)



e)



2

A



B



Tá níos mó spotaí ar bhóin Dé   
ná ar bhóin Dé

3

A



B



Tá níos mó spotaí ar bhóin Dé   
ná ar bhóin Dé

4

A



B



Tá níos mó spotaí ar bhóin Dé   
ná ar bhóin Dé

5

A



B



Tá níos mó spotaí ar bhóin Dé   
ná ar bhóin Dé

# Meaitseáil ceann le ceann

An bhfuil níos mó cailíní



ná cístí



n?

Tá

Níl



# Comhcheangal

Aon (1) a chur leis na huimhreacha 1-19

## Nóta don mhúinteoir



Inis do na daltaí faoi Aon (1) a chur le.  
An bhfuil an dalta in ann  
Aon (1) a chur le figiúr ina cheann?

1



Cuir ceann eile leis. Sin:

2



Cuir ceann eile leis. Sin:

3



Cuir ceann eile leis. Sin:

4




Cuir ceann eile leis. Sin:

5




Cuir ceann eile leis. Sin:

6




Cuir ceann eile leis. Sin:

7




Cuir ceann eile leis. Sin:

# Comhcheangal

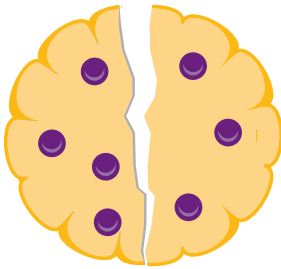
Cé mhéad spota?



Nóta don mhúinteoir

Labhair faoin gcoincheap 'cothrom le'.  
Úsáid an tsiombail '='.

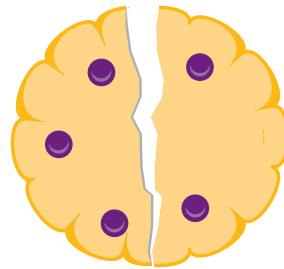
1



=



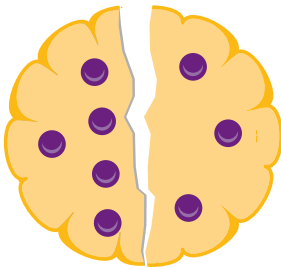
2



=



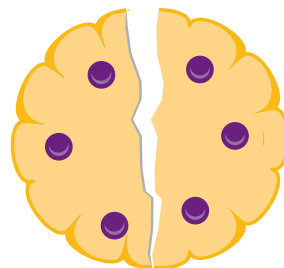
3



=



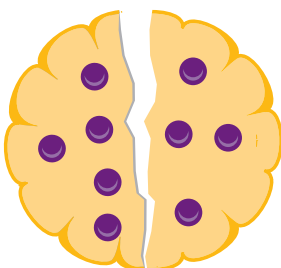
4



=



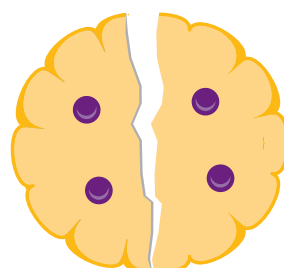
5



=



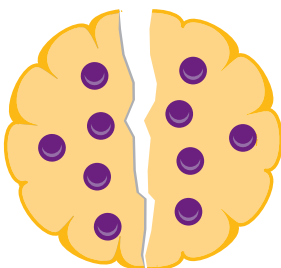
6



=



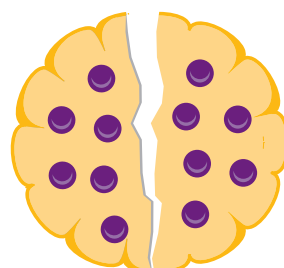
7



=



8




=



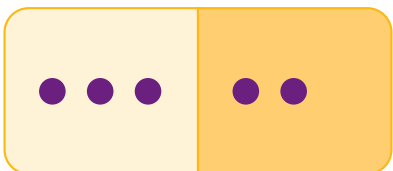


## Nóta don mhúinteoir

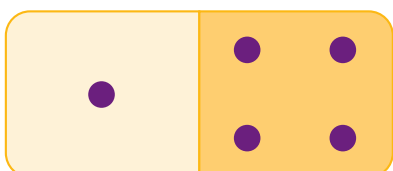
Tabhair an múnla 'agus a haon (+1)' do na daltaí.



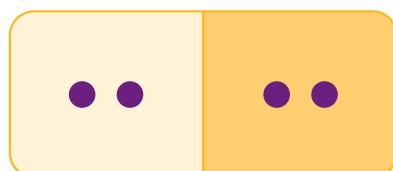
1



$$\square + \square = \square$$




$$\square + \square = \square$$




$$\square + \square = \square$$


2



$$\square + \square = \square$$

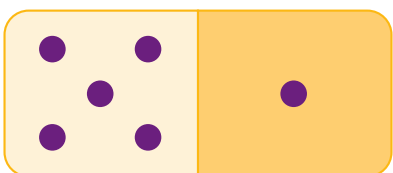


$$\square + \square = \square$$

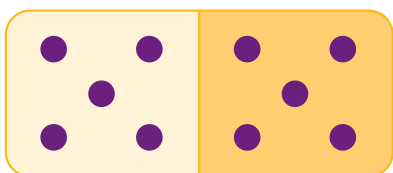


$$\square + \square = \square$$

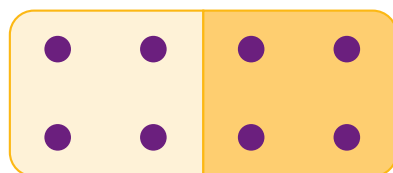
3



$$\square + \square = \square$$




$$\square + \square = \square$$




$$\square + \square = \square$$


4



$$\square + \square = \square$$

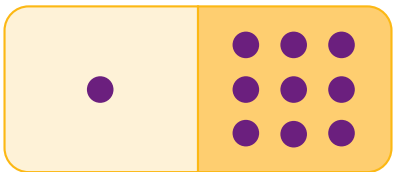


$$\square + \square = \square$$




$$\square + \square = \square$$


5



$$\square + \square = \square$$



$$\square + \square = \square$$



$$\square + \square = \square$$

# Cé mhéad san iomlán?

Inis an scéilín i ngach cás.

## 1 Am Lóin



2

+



2

+



2

=

## 2 Sa chlós



1

+



1

=

## 3 Lá Spóirt



1

+



3

+



1

=

## 4 Lá breithe



1

+

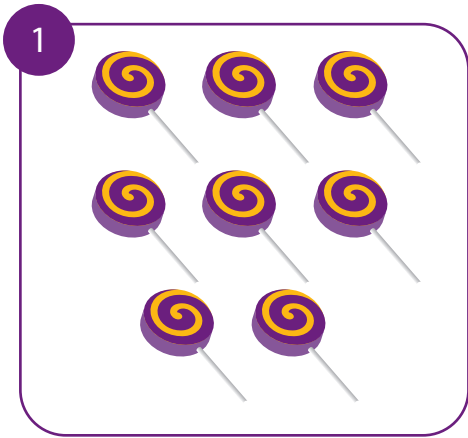


2

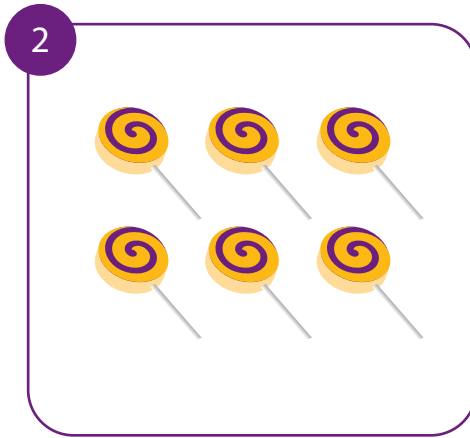
=

# Tomhais cé mhéad atá ann.

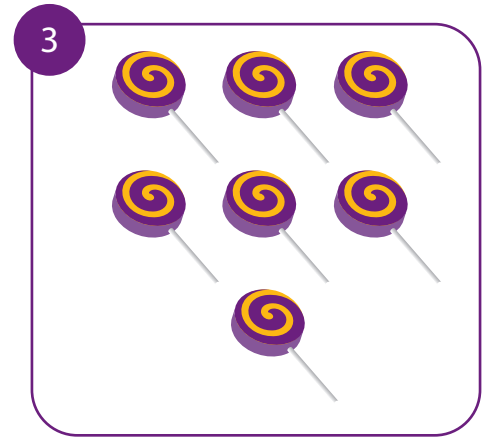
Ar dtús, tomhais cé mhéad líreacán atá i ngach mbosca. Ansin, seiceáil do fhreagra.



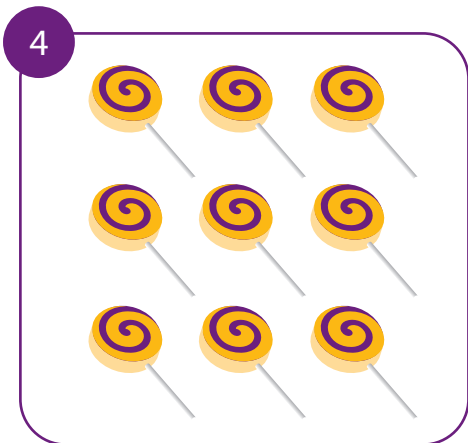
Tomhais  Seiceáil



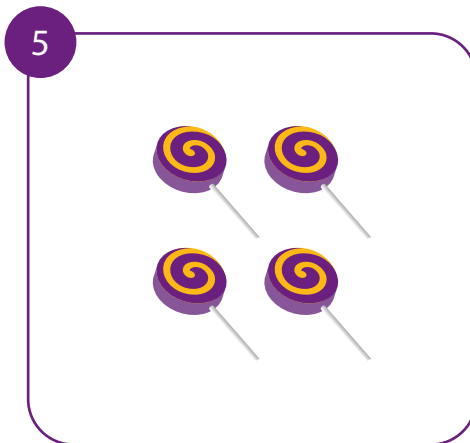
Tomhais  Seiceáil



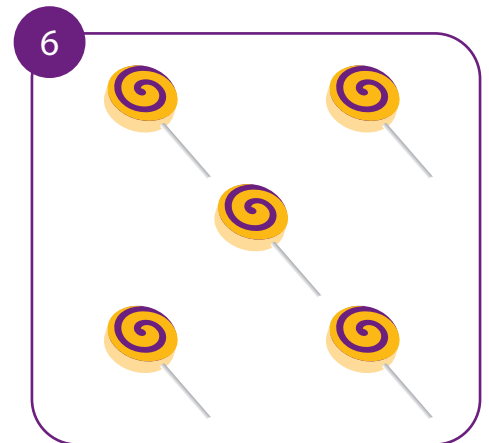
Tomhais  Seiceáil



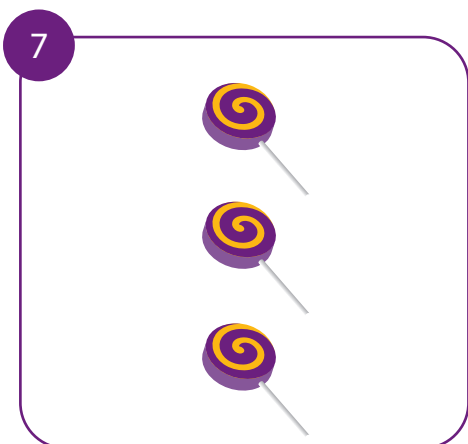
Tomhais  Seiceáil



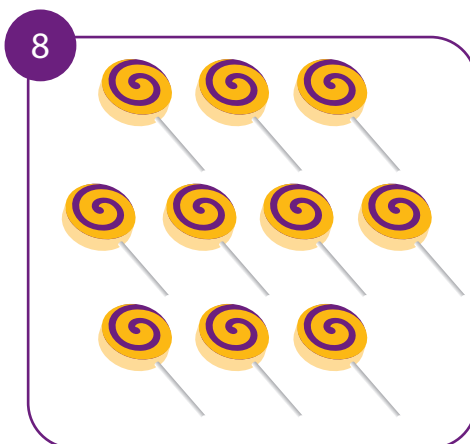
Tomhais  Seiceáil



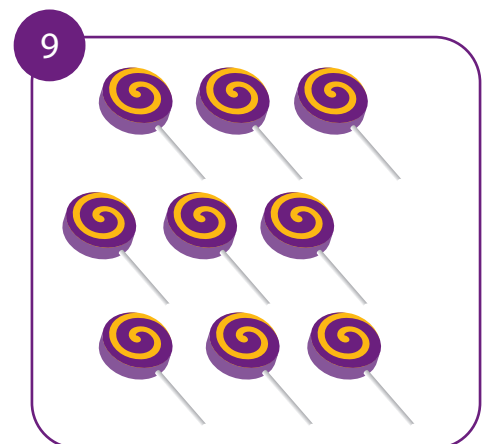
Tomhais  Seiceáil



Tomhais  Seiceáil



Tomhais  Seiceáil





Tomhais  Seiceáil

# Comhaireamh agus Meaitseáil

Ar dtús, scríobh an freagra sa bhosca. Ansin, ceangail an freagra leis an bhfigiúr ceart ar an imeall.

10





7

9





9



19





12



11

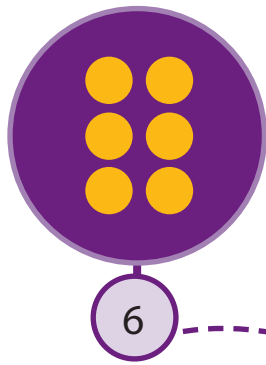



8




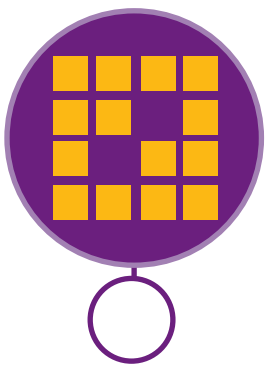
18







17

13





15



16

14




12

11

# Comhair siar go dtí a náid.

Cén uimhir atá in easnamh?

<b>1</b>	<b>2</b>		<b>3</b>	<b>4</b>
10	10		10	10
9	9		9	9
8	8		8	8
7	7		7	7
6	6		6	6
5	5		5	5
4	4		4	4
3	3		3	3
2	2		2	2
1	1		1	1
0	0		0	0

5




An bhfuil tú in ann comhaireamh siar ó a deich ar do mhéara?

Tá  Níl


6 Cuir isteach na sceallaí seacláide.

a)




8

b)




6

c)




0

d)




4

e)




5

f)




9

g)




7

h)




10

i)




2

j)



1

k)



3

# Tomhais cé mhéad atá ann?

Tomhais cé mhéad císte atá i ngach bosca. Seiceáil do fhreagra ansin.

1



Tomhais

Seiceáil

2



Tomhais

Seiceáil

3



Tomhais

Seiceáil


4



Tomhais

Seiceáil

5



Tomhais

Seiceáil

6



Tomhais

Seiceáil

7



Tomhais

Seiceáil

8



Tomhais

Seiceáil

9



Tomhais

Seiceáil



## Nóta don mhúinteoir


Cuir tús le dealú.

Ní bhaineann páistí usáid as an tsiombail ( - ) go foirmiúil go dtí Rang 1, ach múinteoir an choincheap 'tóg... ó'.


Usáid scéilín le lúide, bain ó, imigh le, a léiriú i.e.


'9 mbeach atá againn agus an ceann a d'imigh leis.'


'8 mbalún atá againn agus phléasc 2 bhalún.'  
Cé mhéad balún atá fágtha? Labhair faoi seo.

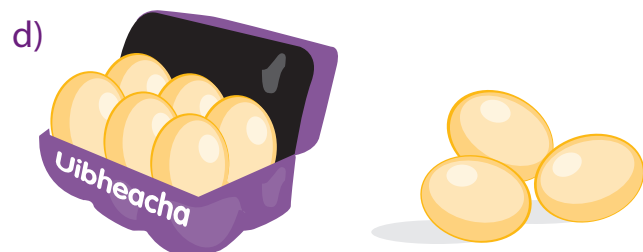


1

a)   
 $3 + 3 = \square$


b)   
 $4 + 4 = \square$

c)   
 $8 + 2 = \square$

d)   
 $6 + 3 = \square$

2

a) Labhair faoi 'tóg...ó'.







b) Labhair faoi 'tóg...ó'.



# Measúnú 1

1 Cé mhéad?




2 Cé mhéad?




Tosaigh anseo 

3

A




B



Tá níos mó sceallaí seacláide ar bhriosca  ná ar bhriosca

4



Cuir na sceallaí seacláide isteach.

7

5



Cuir ceann eile leis. Sin:



b)




Cuir ceann eile leis. Sin:




6 Comhair siar go dtí náid.



7 Cé mhéad?





Tomhais  Seiceáil




Tomhais  Seiceáil

8 Cé mhéad spota?



+  =




+  =



+  =


10 Meaitseáil an figiúir leis an mbosca ceart.




11



13



15




12

11 Inis an scéilín.



1

+



2

+



3


=

An Scór


# Céard é an chéad rud eile?

Lean den phatrún.


1



2



3



4



5



# Comhair siar

Líon isteach na huimhreacha atá in easnamh.

1

10

8

6

4

2

0

2

10


9

8

7

6

0



3

10

5

4

3

2

1

0

4

10

0

5

10

Tosaigh anseo

6

1

Tosaigh anseo

7

2


Tosaigh anseo

# Foclóirín


Labhair faoi seo.

Os cionn Ar Faoi Gar do In aice le I bhfad ó Ar dheis Ar chlé

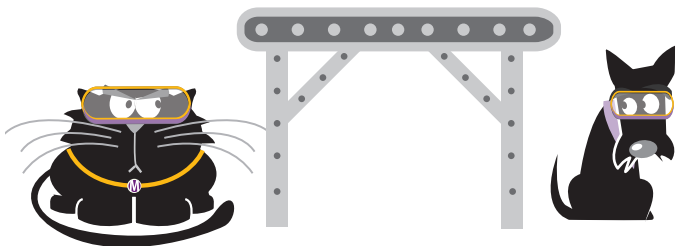
Tá an cat **ar** an mbord.  
Tá an madra **faoi** mbord.




Tá an cat **os cionn** an bhoird.




**Ar chlé** atá an cat.  
**Ar dheis** atá an madra.




Tá an cat **gar don** mhadra.



Tá an cat **i bhfad ón** madra.






Tá an cat ar an taobh clé den leathanach agus tá an madra ar an taobh deas den leathanach.



Leag do lámh chlé ar an taobh clé den leathanach agus leag do lámh dheas ar an taobh deas den leathanach.

Ar mhaith leat an rann beag seo a fhoghlaim?

1, 2 Muc is bó



3, 4 Bróga leathair



5, 6 Cupán tae




7, 8 Seanbhean bhocht



9, 10

Císte te.




# Cé mhéad triantán a fheiceann tú?



Dathaigh na triantáin le dathanna éagsula.







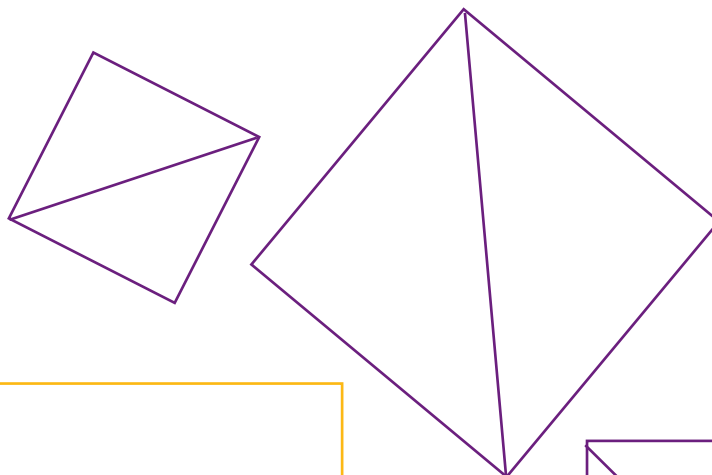

## Nóta don mhúinteoir

Is i Rang 1 a mhúintear 'a leath ( $\frac{1}{2}$ ).

D'fhéadfaí labhairt faoi anseo, dá mba mhian leat.




Déan gníomhaíochtaí foroinnte anseo. Bíodh leathchiorcail ( $\frac{1}{2}$  ) agus leath-thriantáin ( $\frac{1}{2}$  ) ina measc.









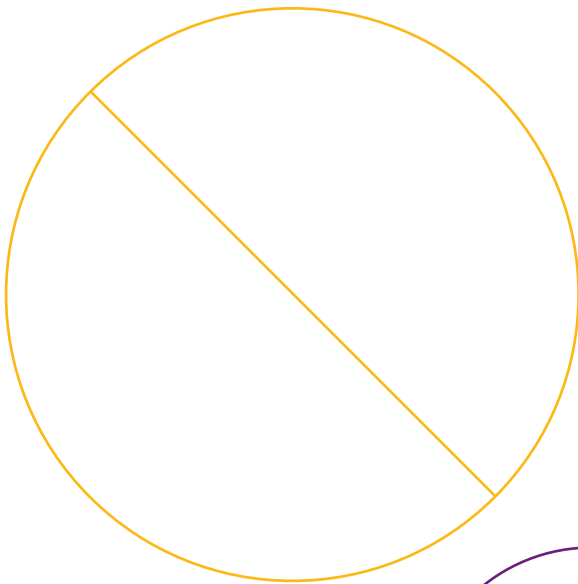



# Cé mhéad leath-thriantán a fheiceann tú?

Dathaigh na leath-thriantáin le dathana éagsúla.



# Cé mhéad leathchiorcail a fheiceann tú?

Dathaigh na leathchiorcail le dathanna éagsúla.



# Fad


Labhair faoi seo. Úsáid cnaipí nó licíní agus tomhais gach sreang.

## Nóta don mhúinteoir


Bíodh taithí phraiticiúil ag na daltaí ar rudaí a thomhas sula dtugann siad faoin leathanach seo. Úsáid rudaí ón mbaile nó ón scoil.

1

a) Tá an sreang seo chomh fada le trí (3) chrián.



b) Tá an sreang seo chomh fada le cúig (5) chrián.



2

a) Tarraing líne atá níos faide ná an líne seo.

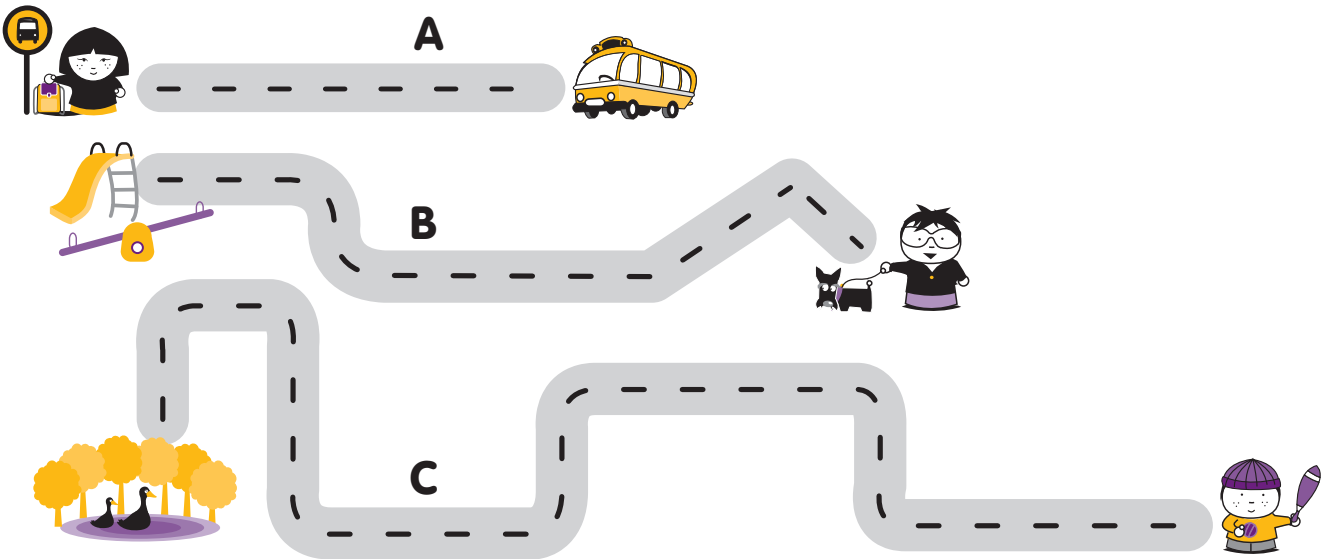


b) Tarraing peann luaidhe atá níos giorra ná an ceann seo.



3

Labhair faoi na bóithre thíos.



a) Cé acu bóthar is faide? Is é  an bóthar is faide.


b) Cé acu bóthar is giorra? Is é  an bóthar is giorra.

# Fad

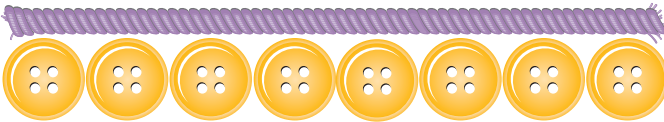
Cén fad atá sa sreang? Labhair faoi seo.

1

Úsáid cnaipí nó licíní agus tomhais gach sreang.



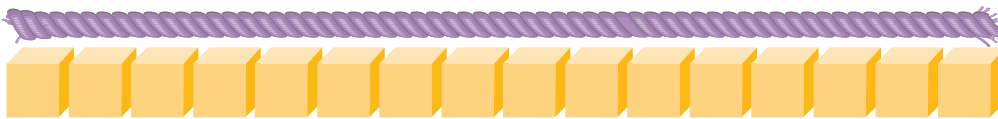
a) Fad   atá sa sreang.



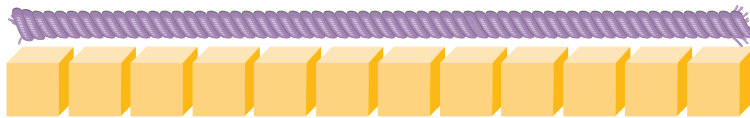
b) Fad   atá sa sreang.

2

Úsáid ciúbanna agus tomhais gach sreang le ciúbanna.



a) Fad   atá sa sreang.



b) Fad   atá sa sreang.

3


Úsáid boinn 5 cent agus tomhais gach sreang.



a) Fad   atá sa sreang.



b) Fad   atá sa sreang.



## Capall

1

An chéad chapall



## Duine

1

An chéad duine



## Áit

1

Sa chéad áit



1 An chéad chapall

2 An dara chapall

3 An tríú chapall

4 An ceathrú chapall

5 An cúigiú chapall

6 An séú chapall

7 An seachtú chapall

8 An t-ochtú chapall

9 An naoú chapall

10 An deichiú chapall

1 An chéad duine

2 An dara duine

3 An tríú duine

4 An ceathrú duine

5 An cúigiú duine

6 An séú duine

7 An seachtú duine

8 An t-ochtú duine

9 An naoú duine

10 An deichiú duine

1 Sa chéad áit

2 Sa dara háit

3 Sa tríú háit

4 Sa cheathrú háit

5 Sa chúigiú háit

6 Sa séú háit

7 Sa seachtú háit

8 San ochtú háit


9 Sa naoú háit

10 Sa deichiú háit

# An tAm


Tarraing an lámh bheag ar gach clog. Inis an scéilín.

a)




Éirím ar

b)





Ansin .....

c)



Ansin .....

d)




Ansin .....

e)




Ansin .....

f)




Ansin .....

g)



Ansin .....

h)



Téim a chodladh ar

# Meáchan

Labhair faoi seo.

1



2



3




4



5

- a) Cé acu is troime? Cuir tic sa bhosca ceart.  
b) Cé acu is éadroime. Cuir sa bhosca ceart.



# Toilleadh

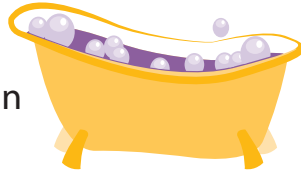
Labhair faoi seo.

## Nóta don mhúinteoir

Bíodh taithí ag na daltaí ar leachtanna de mhéideanna ar leith a chur isteach i soithigh de mhéideanna éagsúla sula dtugann siad faoin leathanach seo.

1

Coinníonn an folcadán



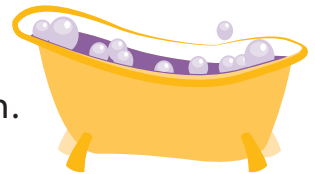
níos mó uisce ná an citeal.



Coinníonn an citeal



níos lú uisce ná an folcadán.



Coinníonn an citeal



níos mó uisce ná an gloine.



Coinníonn an gloine



níos lú uisce ná an citeal.



2

a) Cuir leis an soitheach ar féidir an méid is mó uisce a chur ann.

b) Cuir leis an soitheach ar féidir an méid is lú uisce a chur ann.





# An tAm

Pléigh

1 Cén lá inniu é? Cuir tic sa bhosca.

An Luan	An Mháirt	An Chéadaoin	An Déardaoin	An Aoine	An Satharn	An Domhnach
<input type="checkbox"/>	<input type="checkbox"/>	<input type="checkbox"/>	<input type="checkbox"/>	<input type="checkbox"/>	<input type="checkbox"/>	<input type="checkbox"/>

Inniu an \_\_\_\_\_

2 Cén mhí í seo? Cuir tic sa bhosca.

Mí Eanáir	Mí Feabhra	Mí an Mhárta	Mí Aibreáin	Mí na Bealtaine	Mí an Mheithimh
<input type="checkbox"/>	<input type="checkbox"/>	<input type="checkbox"/>	<input type="checkbox"/>	<input type="checkbox"/>	<input type="checkbox"/>
Mí Iúil	Mí Lúnasa	Mí Mheán Fómhair	Mí Dheireadh Fómhair	Mí na Samhna	Mí na Nollag
<input type="checkbox"/>	<input type="checkbox"/>	<input type="checkbox"/>	<input type="checkbox"/>	<input type="checkbox"/>	<input type="checkbox"/>

Seo \_\_\_\_\_

3 Dáta an lae inniu ná

- 4
- Cé mhéad lá sa tseachtain?
  - Comhair ar aghaidh go dtí a seacht (7).
  - Léim ar feadh seacht (7) soicind.
  - Léim ar leathchois ar feadh seacht (7) soicind.
  - An féidir leat a bheith ag léim ar feadh breis is seacht (7) soicind?



# 1

Aon bhliain d'aois



# 2

Dhá bhliain d'aois



# 3

Trí bliana d'aois



# 4

Ceithre bliana d'aois



# 5

Cúig bliana d'aois



# 6

Sé bliana d'aois



# 7

Seacht mbliana d'aois



# 8

Ocht mbliana d'aois



# 9

Naoi mbliana d'aois



# 10

Deich mbliana d'aois



## Nóta don mhúinteoir


Bíodh taithí ag na daltaí ar aoiseanna a chur in iúl sula dtugann siad faoin leathanach seo.

Úsáid a leithéid seo d'abairt:

'Táim 7 mbliana d'aois'

nó

'5 bliana d'aois atáim'



### Míonna na Bliana

Mí Eanáir	Mí Feabhra	Mí an Mhárta	Mí Aibreáin	Mí na Bealtaine	Mí an Mheithimh
Mí Iúil	Mí Lúnasa	Mí Mheán Fómhair	Mí Dheireadh Fómhair	Mí na Samhna	Mí na Nollag

1 a) I mí  bhíonn lá breithe ag mo mhúinteoir.

b) I mí  bhíonn lá breithe ag mo Mham.

2 a) I mí  bhíonn lá breithe agamsa.

Beidh mé  liana d'aois.

b) I mí  bhíonn lá breithe ag mo chara.

Beidh sé / sí  liana d'aois.



# An tAm

## Uaireanta an chloig



### An Clog

- 1 A hAon a Chlog
- 2 A Dó a Chlog
- 3 A Trí a Chlog
- 4 A Ceathair a Chlog
- 5 A Cúig a Chlog
- 6 A Sé a Chlog
- 7 A Seacht a Chlog
- 8 A hOcht a Chlog
- 9 A Naoi a Chlog
- 10 A Deich a Chlog
- 11 A hAon Déag a Chlog
- 12 A Dó Dhéag a Chlog



### Comhaireamh

- Uair an chloig 1
- Dhá uair an chloig 2
- Trí uair an chloig 3
- Ceithre uair an chloig 4
- Cúig uair an chloig 5
- Sé uair an chloig 6
- Seacht n-uair an chloig 7
- Ocht n-uair an chloig 8
- Naoi n-uair an chloig 9
- Deich n-uair an chloig 10
- Aon uair an chloig déag 11
- Dhá uair an chloig déag 12

## Nóta don mhúinteoir

Bíodh taithí ag na daltaí ar uaireanta an chloig a chur in iúl sula dtugann siad faoi na trí leathanach a leanas.

Úsáid a leithéid seo d'abairt:

‘Cén t-am atá ann?’

‘Tá sé a trí a chlog.’

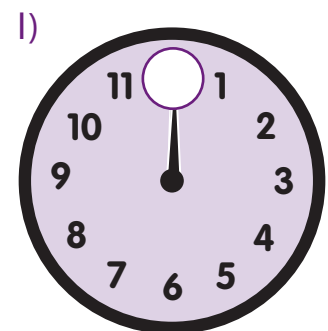
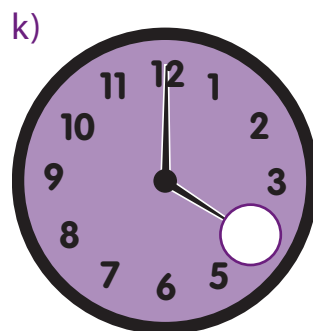
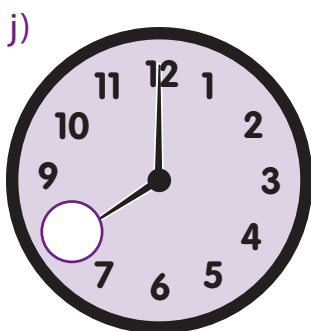
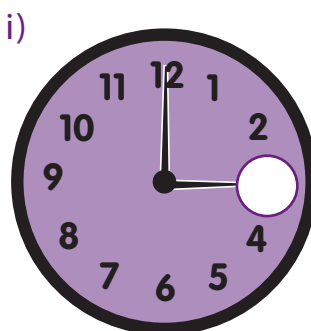
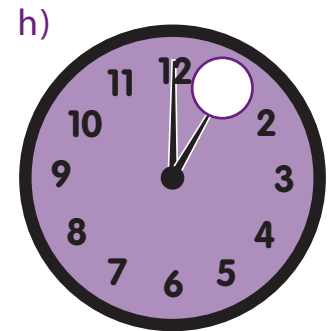
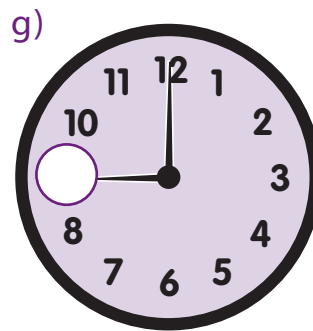
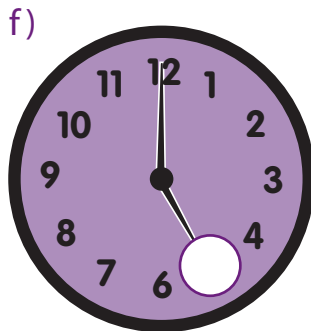
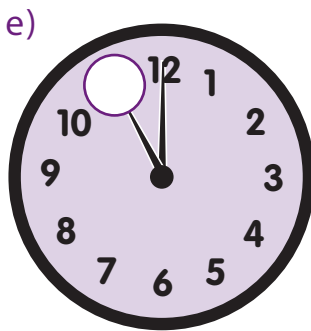
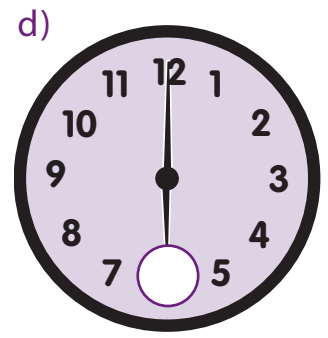
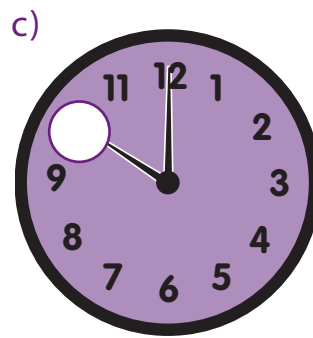
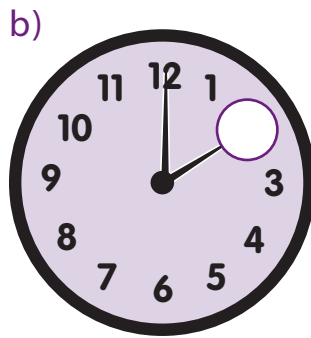
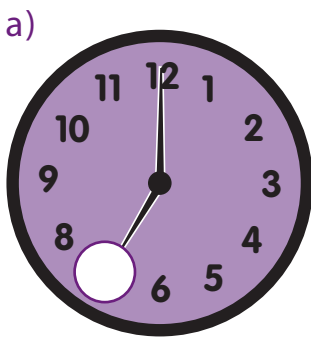
*nó*

‘Cén t-am é?’

‘Tá sé a cúig a chlog.’



1 Léirigh an t-am. Lión isteach an uimhir cheart sa bhearna.



a)




luath



mall *nó* déanach

b)



roimh



tar éis *nó*i ndiaidh

c)



meán lae



meán oíche

d)



maidin



tráthnóna

e)




lá



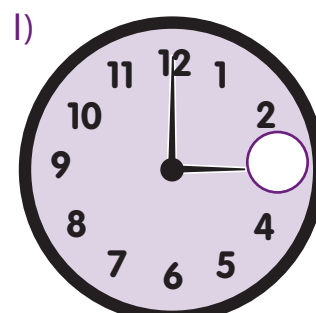
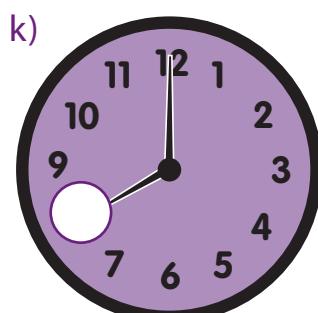
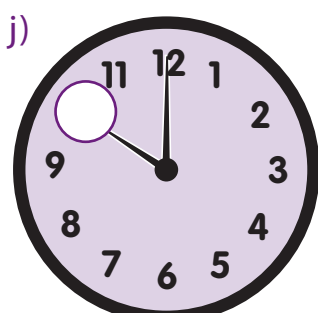
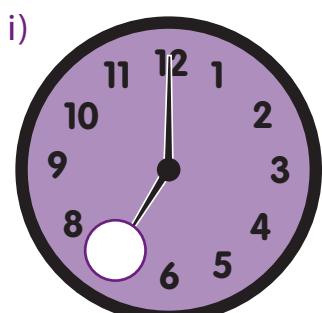
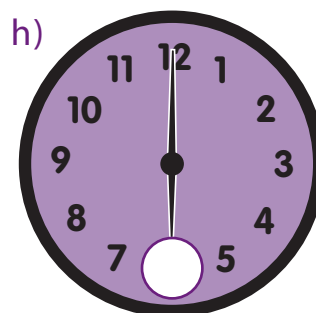
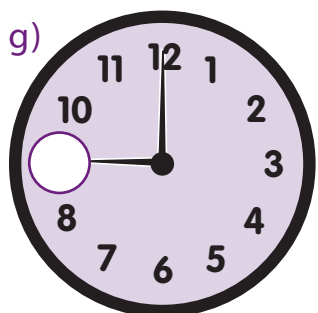
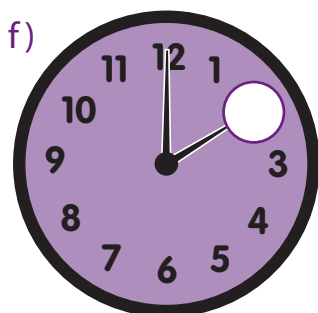
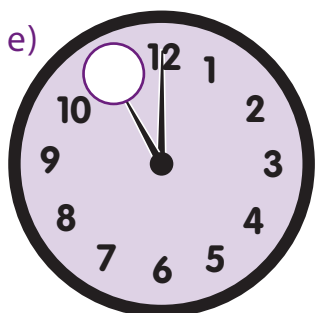
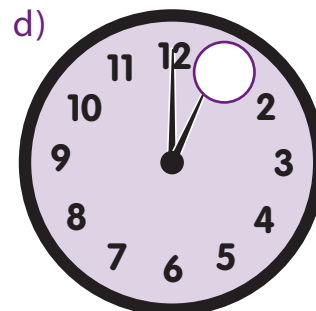
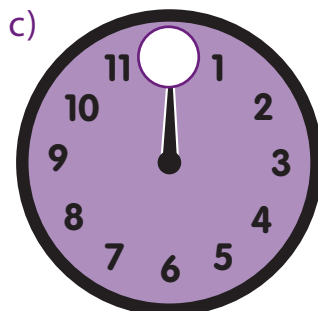
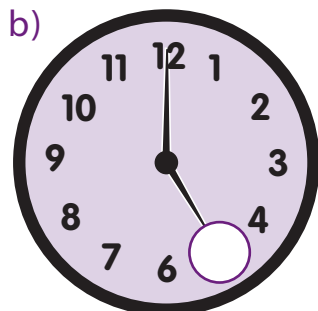
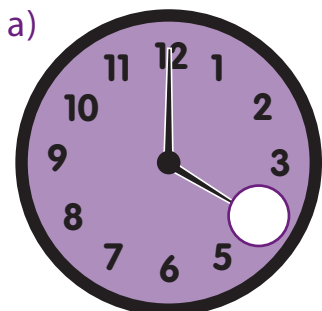
oíche

### Nóta don mhúinteoir

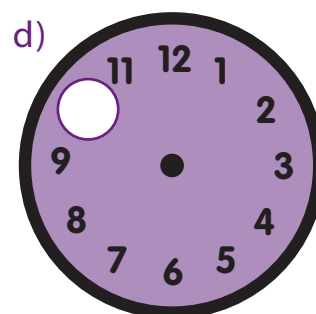
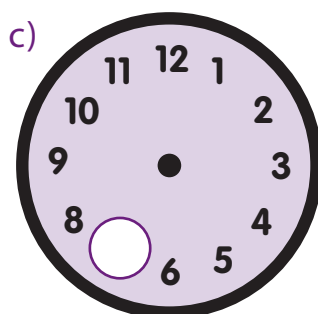
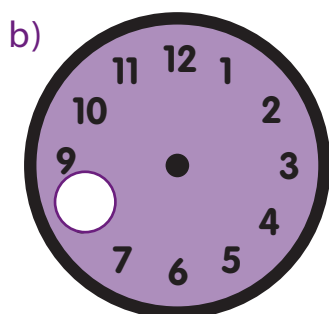
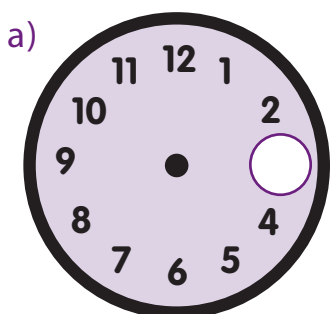
Pléigh leis na daltaí na coincheapeanna a bhaineann leis an bhfoclóirín ar chlé. Úsáid uaireanta an chloig, mar atá thíos, le cur le tuiscint na ndaltaí ar na focail.



1 Léirigh an t-am. Líon isteach an uimhir cheart sa bhosca.

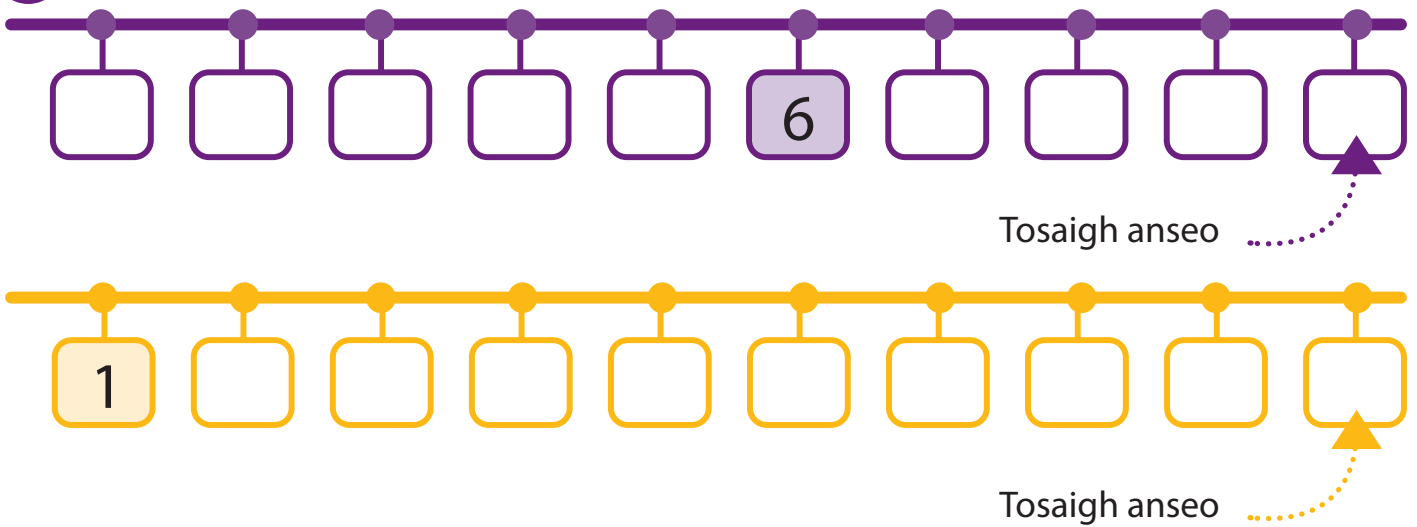


2 Tarraing lámha an chloig. Líon isteach an uimhir cheart sa bhearná.


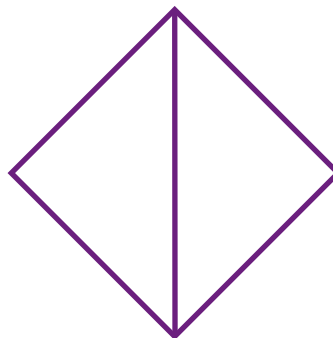




# Measúnú 2


1



2 Comhair na triantáin.



3 Leag do lámh chlé ar an gciorcál atá ar an taobh clé den leathanach.  
Leag do lámh dheas ar an gciorcál atá ar an taobh deas den leathanach.






4 Cé acu peann luaidhe is faide? Cuir tic sa bhosca.



5 Cé acu soitheach a choinníonn an méid is mó uisce.



6 Líon isteach an uair.



7 Cén lá inniu é? Cuir tic sa bhosca.

An Luan

An Mháirt

An Chéadaoin

An Déardaoin

An Aoine

An Satharn

An Domhnach

8 Cén mhí í seo? Cuir tic sa bhosca.

Mí Eanáir

Mí Feabhra

Mí an Mhárta

Mí Aibreáin

Mí na Bealtaine

Mí an Mheithimh

Mí Iúil

Mí Lúnasa

Mí Mheán Fómhair

Mí Dheireadh Fómhair

Mí na Samhna

Mí na Nollag

An Scór

# Airgead

Suas go dtí deich (10) cent.



## Nóta don mhúinteoir

Bíodh taithí ag na daltaí ar bhoinn airgid a úsáid, suas go dtí 10 cent, sula dtugann siad faoin leathanach seo. Nótáil: Ní fíorphraghasanna iad seo.

1

Caithim  ar



Cé mhéad a chaith mé?

2

Caithim  ar



Cé mhéad a chaith mé?

3

Caithim  ar



Cé mhéad a chaith mé?

4

Caithim  ar



Cé mhéad a chaith mé?

5

Caithim  ar



Cé mhéad a chaith mé?


6

Caithim  ar




Cé mhéad a chaith mé?

An aithníonn tú na boinn thíos?



7

Caithim  ar



Cé mhéad a chaith mé?

8


Caithim  ar



Cé mhéad a chaith mé?

9

Caithim  ar



Cé mhéad a chaith mé?

10

Caithim  ar



Cé mhéad a chaith mé?

11

Caithim  ar



Cé mhéad a chaith mé?

12

Caithim  ar



Cé mhéad a chaith mé?


# Airgead

Cén méid airgid atá fágtha agat?

## Nóta don mhúinteoir

Bíodh taithí ag na daltaí ar chluichí siopadóireachta a imirt agus ar bhoinn airgid a úsáid, suas go dtí 10 cent sula dtugann siad faoin leathanach seo.

Nótáil: Ní fíorphraghasanna iad seo.

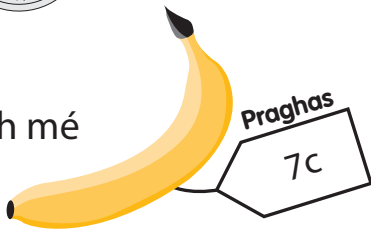


1



atá agam.

Cheannaigh mé



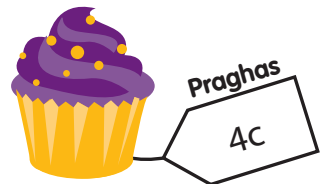
Cén méid airgid atá fágtha?

2



atá agam.

Cheannaigh mé



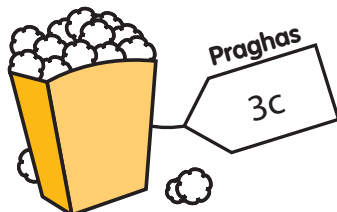
Cén méid airgid atá fágtha?

3



atá agam.

Cheannaigh mé



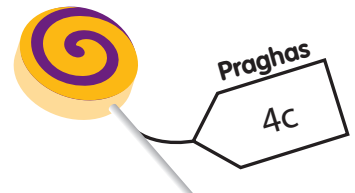
Cén méid airgid atá fágtha?

4



atá agam.

Cheannaigh mé

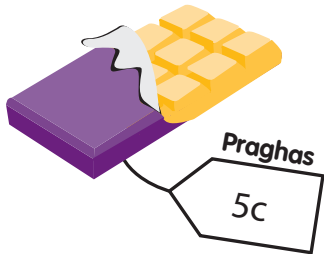


Cén méid airgid atá fágtha?

5



atá agam.




Cheannaigh mé

Cén méid airgid atá fágtha?

6



atá agam.



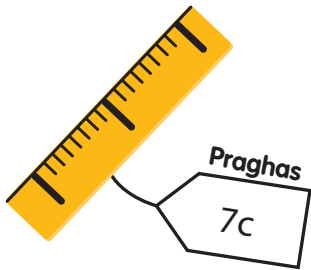
Cheannaigh mé

Cén méid airgid atá fágtha?

7



atá agam.




Cheannaigh mé

Cén méid airgid atá fágtha?

8



atá agam.



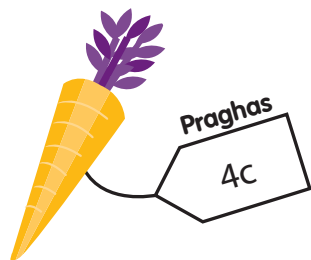
Cheannaigh mé

Cén méid airgid atá fágtha?

9



atá agam.



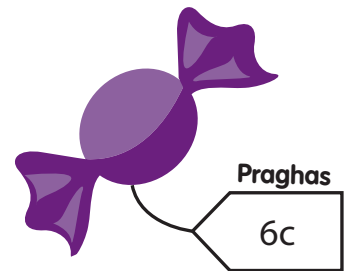
Cheannaigh mé

Cén méid airgid atá fágtha?

10



atá agam.




Cheannaigh mé

Cén méid airgid atá fágtha?



## Nóta don mhúinteoir



Bíodh taithí ag na daltaí ar bhoinn suas go dtí 10 cent a úsáid sula dtugann siad faoin leathanach seo. Bain úsáid roimh ré as tascanna praiticiúla.



Ba cheart, freisin, go mbeidís in ann bonn 20 cent a aithint.

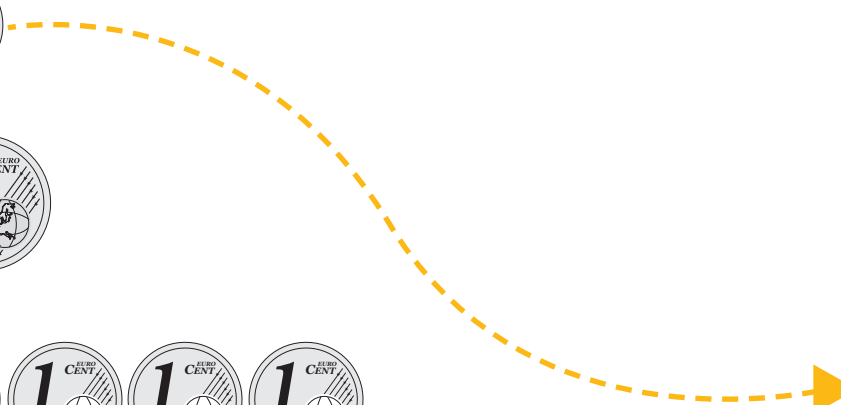


1 Malartaigh le chéile na boinn arb ionann suim a luacha.



a)  



b)  



c)  



2 Malartaigh le chéile na boinn arb ionann suim a luacha.

a)  

b)  

c)  

3

Meaitseáil na suimeanna airgid ar dheis agus ar chlé.

An Siopadóir

An Banc

a)



b)



c)



d)



e)



f)



g)



1 Tarraing peann luaidhe atá níos giorra ná an peann luaidhe seo.



2 Tarraing nathair nimhe atá níos giorra ná an nathair nimhe seo.



3 Tarraing scaif atá níos giorra ná an scaif seo.



4 Tarraing téad atá níos giorra ná an téad seo.





# Scéilíní Uimhris

Labhair faoi seo.

1




a) Cé mhéad lá atá grianmhar?

b) Cé mhéad lá atá scamallach?

c) Cé mhéad lá san iomlán?

2



Deich (10) n-úll a bhí ag Síle.

D'ith sí ceithre (4) úll.

Cé mhéad úll atá fágtha aici?



3

Cuir tic in aice leis an madra a bhfuil hata air.



1ú

An chéad mhadra



2ú

An dara madra




3ú

An tríú madra


4

Cuir tic in aice leis an altán a bhfuil trí (3) shúil aige.



1ú

An chéad altán



2ú

An dara haltán




3ú

An tríú haltán

5

Féach ar na fíoracha sinséir.




a) Cé mhéad cos a fheiceann tú sa léaráid?

b) Cé mhéad lámh a fheiceann tú sa léaráid?

6

Féach ar na róbait.




a) Cé mhéad súil a fheiceann tú sa léaráid?

b) Cé mhéad lámh a fheiceann tú sa léaráid?

# Scéilíní Uimhris

Labhair faoi seo.

1



Cé mhéad crián a fheiceann tú?

Labhair faoi seo:

$$4 + 0$$


$$3 + 1$$

$$1 + 3$$

$$2 + 2$$


$$0 + 4$$

2




Cé mhéad iasc órga atá sa bhabhla?

3



$$3 + 3 = \text{  }$$

4



$$3 + 1 + 2 = \text{  }$$

5



$$5 + 1 = \text{  }$$

6



$$6 + 5 = \text{  }$$

# Measúnú 3

1 10c atá agam. Cheannaigh mé císte.



Cén méid airgid atá fágtha agam?

Tá  ágtha agam.

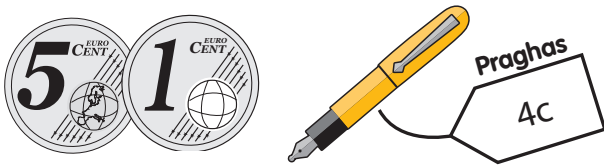
2 4c atá agam. Cheannaigh mé úll.



Cén méid airgid atá fágtha agam?

Tá  ágtha agam.

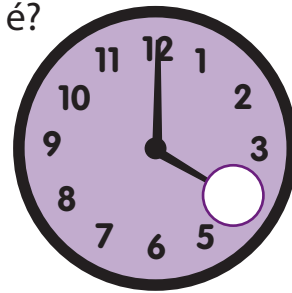
3 6c atá agam. Cheannaigh mé peann.



Cén méid airgid atá fágtha agam?

Tá  ágtha agam.

4 Cén t-am é?



Tá sé  chlog.

5 Tarraing peann luaidhe atá níos giorra ná an peann luaidhe seo.



6



$$\square + \square = \square$$

7 Meaitseáil na suimeanna airgid ar dheis agus ar chlé.

An Siopadóir

An Banc



8 Féach ar na fíoracha sinséir.



a) Cé mhéad lámh a fheiceann tú?

b) Cé mhéad cos a fheiceann tú?

c) Cé mhéad súil a fheiceann tú?

An Scór

# Measúnú: a bhfuil i gceist

Measúnú 1	Tuairim an mhúinteora.
Tuiscint	
Cruinneas	
Luas	
Buanna	
Laigí	

Measúnú 2	Tuairim an mhúinteora.
Tuiscint	
Cruinneas	
Luas	
Buanna	
Laigí	

Measúnú 3	Tuairim an mhúinteora.
Tuiscint	
Cruinneas	
Luas	
Buanna	
Laigí	

Nótaí

Nótaí