


Mata go Deo!



Florence Gavin



Florence Gavin



Aisling Ní Fharachtáin & Áine Ní Fhlatharta
a d'aistrigh

AN GÚM
Baile Átha Cliath

Ba iad Mulberry Publications a chéadfhoilsigh
faoin teideal *MakeSure Maths 1*

© Florence Gavin, 2006

An leagan Gaeilge

© Foras na Gaeilge, 2011

ISBN 978-1-85791-807-6

Gach ceart ar cosaint. Ní ceadmhach aon chuid
den fhoilseachán seo a atáirgeadh,
gan cead a fháil roimh ré ón bhfoilsitheoir.

Susan Meaney a dhear agus a chuir suas an cló
www.smeaney.com

PB Print a chlóbhuail in Éirinn

Le fáil ar an bpost uathu seo:

An Siopa Leabhar
6 Sráid Fhearchair
Baile Átha Cliath 2
ansiopaleabhar@eircom.net

nó

An Ceathrú Póilí
Cultúrlann Mac Adam–Ó Fiaich
216 Bóthar na bhFál
Béal Feirste BT12 6AH
leabhair@an4poili.com

Orduithe ó leabhardhíoltóirí chuig:

Áis
31 Sráid na bhFiníní
Baile Átha Cliath 2
eolas@forasnagaeilge.ie



Mata go Deo!

SNÁITHE	SNÁITHAONAD	LEATHANACH
Uimhreas	Comhaireamh & Dathú	2
Uimhreas	Suimiú	3
Uimhreas	Orduimhreacha	8
Ailgéabar	Péirí & Péireáil	9
Uimhreas	Tacair de Dheicheanna (10)	10
Uimhreas	Dúbailtí	11
Uimhreas	Corruimhreacha	12
MEASÚNÚ 1		13
Uimhreas	Scéilíní faoi Uimhreacha	14
Uimhreas	Cé Mhéad?	15
Uimhreas	Codáin	16
Uimhreas	Dealú	17
Uimhreas	Grúpaí a Chomhaireamh	18
Uimhreas	Patrúin a úsáid agus a fhorbairt	19
Uimhreas	Rudaí a Chomhaireamh	20
Uimhreas	Athghrúpáil	22
Uimhreas	Suimiú	25
Ailgéabar	Patrúin a úsáid & a fhorbairt	26
Uimhreas	Orduimhreacha	28
Uimhreas	Suimiú & Athghrúpáil	29
Uimhreas	Suimiú	30
MEASÚNÚ 2		31
Uimhreas	Dealú & Athghrúpáil	32
Tomhais	An tAm	35
Tomhais	Airgead: Cén méid?	36
Tomhais	Cruthanna 2-T & 3-T	38
Tomhais	Fad	39
Tomhais	Toilleadh	40
Tomhais	Meáchan	41
Sonraí	Picteagraim	42
Uimhreas	Suimiú	43
MEASÚNÚ 3		44

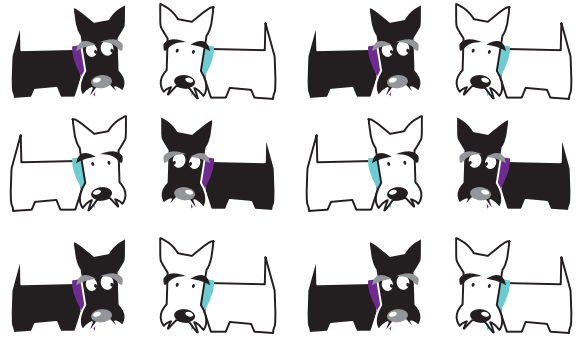
Comhaireamh agus Dathú




1




2



3




4



5






6






Suimiú

Labhair faoin tsiombail '='. Casadh an coincheap 'cothrom le' ar na daltaí roimhe seo.




1

		
<input type="text"/> + <input type="text"/> = <input type="text"/>	<input type="text"/> + <input type="text"/> = <input type="text"/>	<input type="text"/> + <input type="text"/> = <input type="text"/>

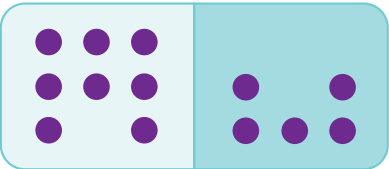


2

		
<input type="text"/> + <input type="text"/> = <input type="text"/>	<input type="text"/> + <input type="text"/> = <input type="text"/>	<input type="text"/> + <input type="text"/> = <input type="text"/>


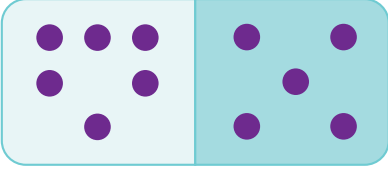

3

		
<input type="text"/> + <input type="text"/> = <input type="text"/>	<input type="text"/> + <input type="text"/> = <input type="text"/>	<input type="text"/> + <input type="text"/> = <input type="text"/>

4

		
<input type="text"/> + <input type="text"/> = <input type="text"/>	<input type="text"/> + <input type="text"/> = <input type="text"/>	<input type="text"/> + <input type="text"/> = <input type="text"/>


5

		
<input type="text"/> + <input type="text"/> = <input type="text"/>	<input type="text"/> + <input type="text"/> = <input type="text"/>	<input type="text"/> + <input type="text"/> = <input type="text"/>



Suimigh agus Dathaigh. Labhair faoi seo.

1




$$4 + 4 = \square$$

2




$$3 + 7 = \square$$

3




$$1 + 9 = \square$$

4




$$5 + 5 = \square$$

5




$$6 + 7 = \square$$

6



$$8 + 2 = \square$$

7



$$6 + 4 = \square$$

8



$$5 + 5 = \square$$

Déan 10 ar dtús agus suimigh ansin. Úsáid licíní más maith leat. Labhair faoi seo.

1 $4 + 6 + 9 =$

10 $8 + 2 + 8 =$

2 $5 + 3 + 5 =$

11 $7 + 3 + 6 =$

3 $7 + 4 + 3 =$

12 $0 + 9 + 1 =$

4 $9 + 6 + 1 =$

13 $8 + 3 + 2 =$

5 $8 + 5 + 2 =$

14 $1 + 5 + 9 =$

6 $2 + 8 + 9 =$

15 $4 + 2 + 6 =$

7 $9 + 3 + 1 =$

16 $9 + 9 + 1 =$

8 $6 + 2 + 4 =$

17 $5 + 5 + 3 =$

9 $5 + 5 + 4 =$

18 $6 + 4 + 3 =$



Déan 10 ar dtús agus suimigh ansin. Úsáid licíní más maith leat. Labhair faoi seo.

1

$$\begin{array}{r} 9 \\ 9 \\ + 1 \\ \hline \end{array}$$

$$\begin{array}{r} 5 \\ 5 \\ + 3 \\ \hline \end{array}$$

$$\begin{array}{r} 6 \\ 4 \\ + 2 \\ \hline \end{array}$$

$$\begin{array}{r} 1 \\ 9 \\ + 4 \\ \hline \end{array}$$

$$\begin{array}{r} 8 \\ 6 \\ + 2 \\ \hline \end{array}$$

2

$$\begin{array}{r} 6 \\ 4 \\ + 9 \\ \hline \end{array}$$

$$\begin{array}{r} 7 \\ 3 \\ + 4 \\ \hline \end{array}$$

$$\begin{array}{r} 5 \\ 5 \\ + 6 \\ \hline \end{array}$$

$$\begin{array}{r} 8 \\ 4 \\ + 2 \\ \hline \end{array}$$

$$\begin{array}{r} 9 \\ 1 \\ + 0 \\ \hline \end{array}$$

3

$$\begin{array}{r} 8 \\ 3 \\ + 2 \\ \hline \end{array}$$

$$\begin{array}{r} 1 \\ 5 \\ + 9 \\ \hline \end{array}$$

$$\begin{array}{r} 4 \\ 2 \\ + 6 \\ \hline \end{array}$$

$$\begin{array}{r} 7 \\ 2 \\ + 3 \\ \hline \end{array}$$

$$\begin{array}{r} 5 \\ 5 \\ + 1 \\ \hline \end{array}$$

4

$$\begin{array}{r} 6 \\ 4 \\ + 8 \\ \hline \end{array}$$

$$\begin{array}{r} 5 \\ 4 \\ + 5 \\ \hline \end{array}$$

$$\begin{array}{r} 0 \\ 9 \\ + 1 \\ \hline \end{array}$$

$$\begin{array}{r} 7 \\ 3 \\ + 6 \\ \hline \end{array}$$

$$\begin{array}{r} 8 \\ 2 \\ + 9 \\ \hline \end{array}$$

5

$$\begin{array}{r} 3 \\ 4 \\ + 7 \\ \hline \end{array}$$

$$\begin{array}{r} 5 \\ 4 \\ + 5 \\ \hline \end{array}$$

$$\begin{array}{r} 6 \\ 2 \\ + 4 \\ \hline \end{array}$$

$$\begin{array}{r} 9 \\ 3 \\ + 1 \\ \hline \end{array}$$

$$\begin{array}{r} 2 \\ 8 \\ + 9 \\ \hline \end{array}$$

Suimiú

Labhair faoi seo.

1

$$\begin{array}{r} 3 \\ 8 \\ + 5 \\ \hline \end{array}$$

$$\begin{array}{r} 4 \\ 2 \\ + 4 \\ \hline \end{array}$$

$$\begin{array}{r} 6 \\ 3 \\ + 3 \\ \hline \end{array}$$

$$\begin{array}{r} 8 \\ 5 \\ + 0 \\ \hline \end{array}$$

$$\begin{array}{r} 7 \\ 4 \\ + 1 \\ \hline \end{array}$$

2

$$\begin{array}{r} 1 \\ 7 \\ + 8 \\ \hline \end{array}$$

$$\begin{array}{r} 8 \\ 2 \\ + 0 \\ \hline \end{array}$$

$$\begin{array}{r} 6 \\ 1 \\ + 3 \\ \hline \end{array}$$

$$\begin{array}{r} 4 \\ 3 \\ + 4 \\ \hline \end{array}$$

$$\begin{array}{r} 2 \\ 3 \\ + 6 \\ \hline \end{array}$$

3

$$\begin{array}{r} 7 \\ 5 \\ + 8 \\ \hline \end{array}$$

$$\begin{array}{r} 6 \\ 6 \\ + 4 \\ \hline \end{array}$$

$$\begin{array}{r} 9 \\ 1 \\ + 9 \\ \hline \end{array}$$

$$\begin{array}{r} 6 \\ 2 \\ + 5 \\ \hline \end{array}$$

$$\begin{array}{r} 1 \\ 9 \\ + 1 \\ \hline \end{array}$$

4

$$\begin{array}{r} 9 \\ 2 \\ + 1 \\ \hline \end{array}$$

$$\begin{array}{r} 0 \\ 6 \\ + 9 \\ \hline \end{array}$$

$$\begin{array}{r} 3 \\ 1 \\ + 5 \\ \hline \end{array}$$

$$\begin{array}{r} 6 \\ 1 \\ + 2 \\ \hline \end{array}$$

$$\begin{array}{r} 4 \\ 4 \\ + 1 \\ \hline \end{array}$$

5

$$\begin{array}{r} 7 \\ 5 \\ + 9 \\ \hline \end{array}$$

$$\begin{array}{r} 8 \\ 3 \\ + 5 \\ \hline \end{array}$$

$$\begin{array}{r} 6 \\ 6 \\ + 7 \\ \hline \end{array}$$

$$\begin{array}{r} 8 \\ 5 \\ + 3 \\ \hline \end{array}$$

$$\begin{array}{r} 9 \\ 2 \\ + 4 \\ \hline \end{array}$$




Orduimhreacha



Labhair faoi seo.

1

Cuir hata  ar an gcúigiú (5ú) héan.



2

Cuir sciatháin  ar an naoú (9ú) beach.




3

- a) Cuir dath dearg ar an gcéad (1ú) T-léine.
- b) Cuir dath gorm ar an dara (2ú) T-léine.
- c) Cuir dath donn ar an tríú (3ú) T-léine.
- d) Cuir dath buí ar an gceathrú (4ú) T-léine.
- e) Cuir dath liath ar an gcúigiú (5ú) T-léine.
- f) Cuir dath dubh ar an séú (6ú) T-léine.
- g) Cuir dath uaine ar an seachtú (7ú) T-léine.
- h) Cuir dath oráiste ar an ochtú (8ú) T-léine.
- i) Cuir dath corcra ar an naoú (9ú) T-léine.
- j) Cuir dath bándearg ar an deichiú (10ú) T-léine.



4



- a) Cén chéim ar a bhfuil an buidéal?
- b) Cén chéim ar a bhfuil an planda?
- c) Cén chéim ar a bhfuil an liathróid?

Péirí agus Péireáil

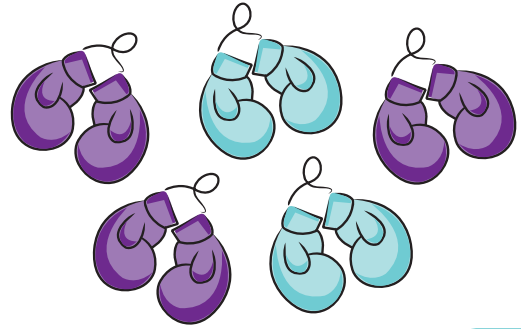
Tacair de dhónna (2). Labhair faoi seo.

1



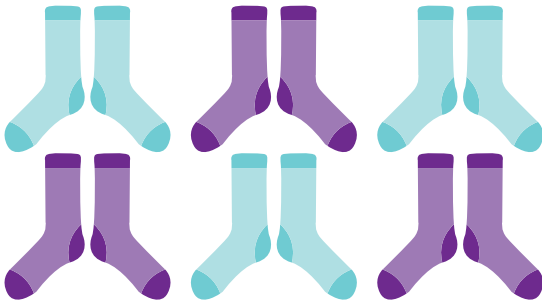
Cé mhéad péire?

2




Cé mhéad péire?

3




Cé mhéad péire?

4




Cé mhéad péire?

5



Cé mhéad péire?

6



Cé mhéad péire?

7



Cé mhéad péire?

8



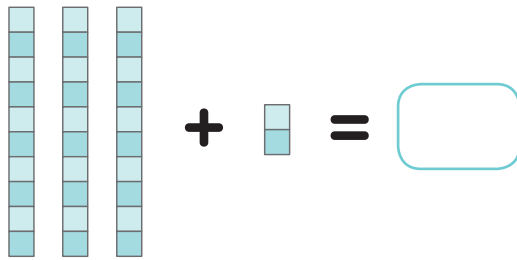
Cé mhéad péire?

Tacair de Dheicheanna (10)

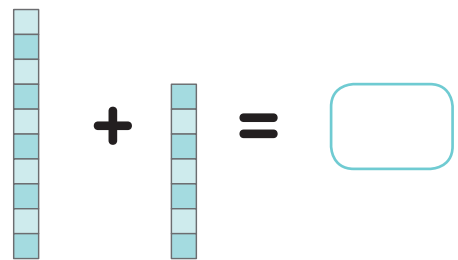


Deicheanna móide 1,2,3, etc. Labhair faoi seo.

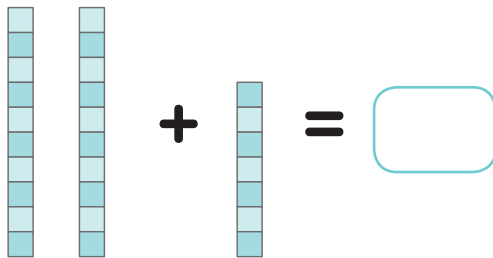
1



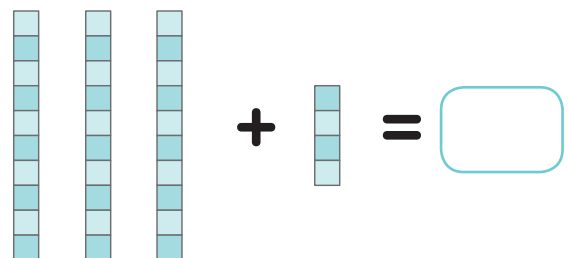
2



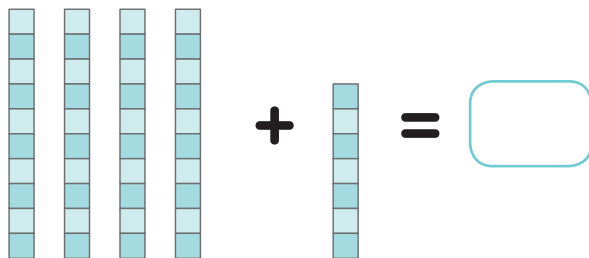
3



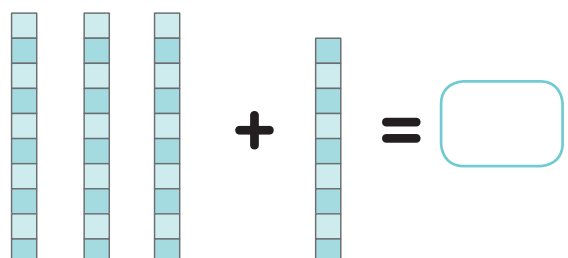
4



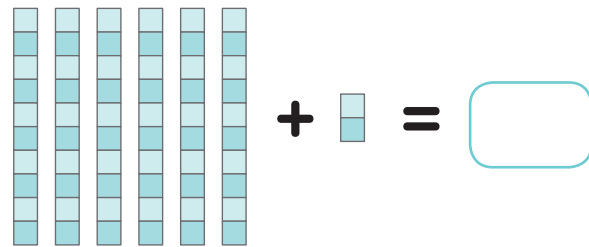
5



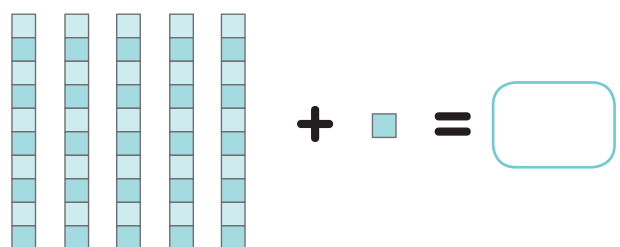
6



7




8



Dúbailtí


Labhair faoi seo.

1



$$3 + 3 = \square$$

2




$$2 + 2 = \square$$

3



$$5 + 5 = \square$$

4




$$7 + 7 = \square$$

5



$$6 + 6 = \square$$

6



$$4 + 4 = \square$$

7 Úsáid licíní más maith leat.

$$8 + 8 = \square$$

$$9 + 9 = \square$$

$$10 + 10 = \square$$

$$6 + \square = 12$$

$$4 + \square = 8$$

$$\square + 9 = 18$$

$$\square + 5 = 10$$

$$\square + 8 = 16$$

$$7 + \square = 14$$


$$8 + \square = 16$$

Corruimhreacha




Is corruimhreacha iad neasdúbailtí. Labhair faoi seo.

1




$$3 + 4 = \square$$

2




$$2 + 3 = \square$$

3




$$5 + 6 = \square$$

4



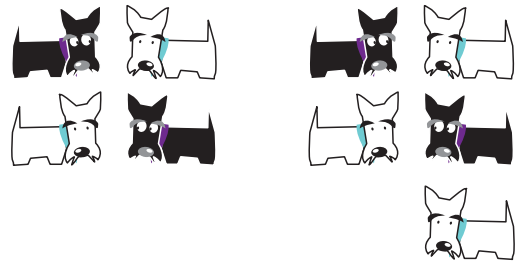
$$7 + 8 = \square$$

5




$$6 + 7 = \square$$

6




$$4 + 5 = \square$$

7




$$8 + 9 = \square$$

8




$$9 + 10 = \square$$


Measúnú 1



$$\square + \square = \square$$



$$\square + \square = \square$$



$$\square + \square = \square$$

4 $4 + 6 + 7 = \square$

5 $8 + 2 + 8 = \square$

6

$$\begin{array}{r} 8 \\ 9 \\ + 1 \\ \hline \square \end{array}$$

$$\begin{array}{r} 5 \\ 5 \\ + 4 \\ \hline \square \end{array}$$

$$\begin{array}{r} 6 \\ 4 \\ + 3 \\ \hline \square \end{array}$$

$$\begin{array}{r} 1 \\ 9 \\ + 7 \\ \hline \square \end{array}$$

$$\begin{array}{r} 8 \\ 5 \\ + 2 \\ \hline \square \end{array}$$

7

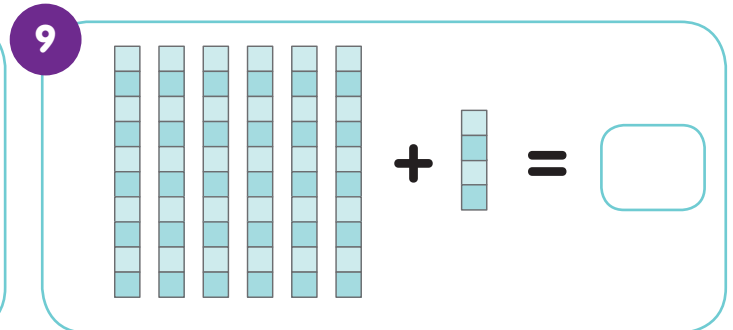
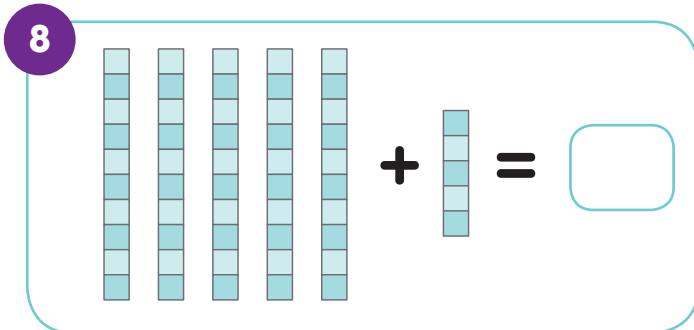
$$\begin{array}{r} 6 \\ 4 \\ + 7 \\ \hline \square \end{array}$$

$$\begin{array}{r} 7 \\ 3 \\ + 6 \\ \hline \square \end{array}$$

$$\begin{array}{r} 5 \\ 5 \\ + 7 \\ \hline \square \end{array}$$

$$\begin{array}{r} 8 \\ 9 \\ + 2 \\ \hline \square \end{array}$$

$$\begin{array}{r} 8 \\ 2 \\ + 0 \\ \hline \square \end{array}$$




10 $6 + 6 = \square$

$$5 + 5 = \square$$

$8 + 8 = \square$
 $9 + 9 = \square$

$5 + 6 = \square$
 $4 + 5 = \square$

$3 + 4 = \square$
 $10 + 11 = \square$

11 Cuir coróin  ar an deichiú (10ú) leon.

An Scór


Comhlánaigh an tairisc Measúnú 1 i ndeireadh an leabhair.

Scéilíní faoi Uimhreacha




Inis an scéal agus labhair faoin scéal ansin.

1




$$\square + \square = \square$$

2



$$\square + \square = \square$$

3




$$\square + \square = \square$$

4



$$\square + \square = \square$$

5



$$\square + \square = \square$$

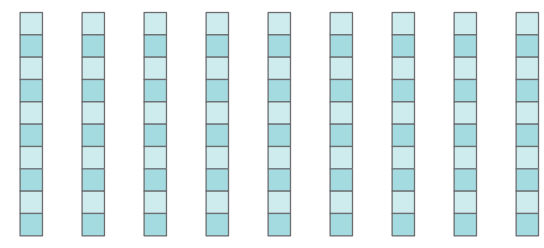
6



$$\square + \square = \square$$

Cé Mhéad?

1



Cé mhéad ciúb?

2



Cé mhéad bonn?

3



Cé mhéad lámh?

4



Cé mhéad fiacail?

5

Comhair i ndeiceanna (10).

Tosaigh anseo

1	2	3	4	5	6	7	8	9	10
11	12	13	14	15	16	17	18	19	20
21	22	23	24	25	26	27	28	29	30
31	32	33	34	35	36	37	38	39	40
41	42	43	44	45	46	47	48	49	50
51	52	53	54	55	56	57	58	59	60
61	62	63	64	65	66	67	68	69	70
71	72	73	74	75	76	77	78	79	80
81	81	83	84	85	86	87	88	89	90
91	92	93	94	95	96	97	98	99	100

10, 20... Cé mhéad deich?

6

Comhair i ndeiceanna (10).

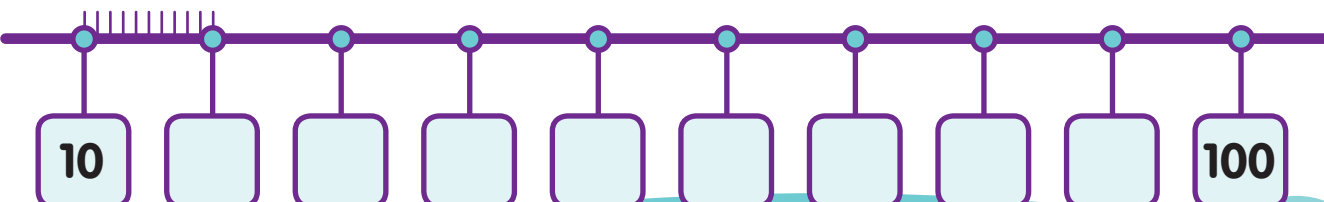
Tosaigh anseo

1	2	3	4	5	6	7	8	9	10
11	12	13	14	15	16	17	18	19	20
21	22	23	24	25	26	27	28	29	30
31	32	33	34	35	36	37	38	39	40
41	42	43	44	45	46	47	48	49	50
51	52	53	54	55	56	57	58	59	60
61	62	63	64	65	66	67	68	69	70
71	72	73	74	75	76	77	78	79	80
81	81	83	84	85	86	87	88	89	90
91	92	93	94	95	96	97	98	99	100

11, 21... Cé mhéad deich?

7

Comhair i ndeiceanna (10).




10 100



Leath tacair ($\frac{1}{2}$). Labhair faoi seo.


1



$$\frac{1}{2} \text{ de } 8 = \square$$

$$\text{Leath an tacair } \left(\frac{1}{2}\right) = \square$$

2



$$\frac{1}{2} \text{ de } 4 = \square$$

$$\text{Leath an tacair } \left(\frac{1}{2}\right) = \square$$


3



$$\frac{1}{2} \text{ de } 14 = \square$$

$$\text{Leath an tacair } \left(\frac{1}{2}\right) = \square$$


4



$$\frac{1}{2} \text{ de } 6 = \square$$

$$\text{Leath an tacair } \left(\frac{1}{2}\right) = \square$$

5



$$\frac{1}{2} \text{ de } 12 = \square$$

$$\text{Leath an tacair } \left(\frac{1}{2}\right) = \square$$


6



$$\frac{1}{2} \text{ de } 16 = \square$$

$$\text{Leath an tacair } \left(\frac{1}{2}\right) = \square$$


7



$$\frac{1}{2} \text{ de } 10 = \square$$

$$\text{Leath an tacair } \left(\frac{1}{2}\right) = \square$$

8




$$\frac{1}{2} \text{ de } 18 = \square$$

$$\text{Leath an tacair } \left(\frac{1}{2}\right) = \square$$

Dealú

Labhair faoi seo.


1



Bhí 14 úll agam. D'ith mé ceithre (4) úll.

Cé mhéad úll atá fágtha?


2



Bhí 9 n-úll agam. D'ith mé trí (3) úll.

Cé mhéad úll atá fágtha?


3



Bhí 10 n-úll agam. D'ith mé cúig (5) úll.

Cé mhéad úll atá fágtha?

4



Bhí 12 úll agam. D'ith mé dhá (2) úll.

Cé mhéad úll atá fágtha?

5



Bhí 9 mbalún agam.

D'imigh balún amháin suas san aer.

Cé mhéad atá fágtha?

6



Bhí 10 mbalún agam.

D'imigh dhá (2) bhalún suas san aer.

Cé mhéad atá fágtha?

7

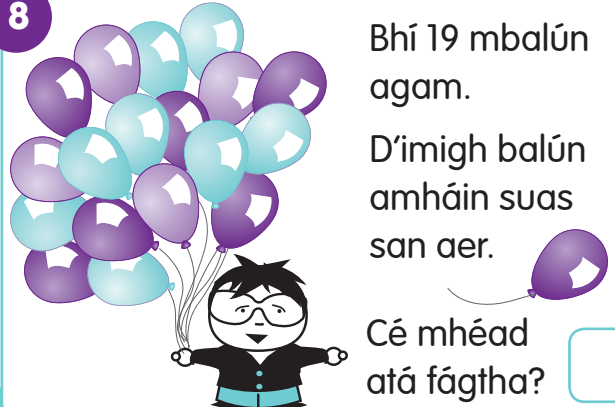


Bhí 12 bhalún agam.

D'imigh balún amháin suas san aer.

Cé mhéad atá fágtha?

8



Bhí 19 mbalún agam.

D'imigh balún amháin suas san aer.

Cé mhéad atá fágtha?

Grúpaí a Chomhaireamh



Labhair faoi seo. Tacair de chúigeanna (5) a chomhaireamh.


1



Cé mhéad méar?

35

2



Cé mhéad méar?

3



Cé mhéad méar?

Tacair de dheicheanna (10) a chomhaireamh.

4



Cé mhéad cent?

7

5



Cé mhéad cent?

9

6



Cé mhéad cent?

6

Patrúin a úsáid agus a fhorbairt

Líon isteach na céad-chearnóga (100). (Labhair faoi seo.)

1

	2								
	32								
41									50
	52								
61									70
	72								
		83							
								99	100

2

1									10
		13							
21									30
	32								
41								49	
				55					
71									
91									100

3

1									
								30	
								50	
51									
								70	
81									
									100

4

									10
									20
									30
31									40
									80
									100

5 Cé acu uimhir is mó?

39 *nó* 41

22 *nó* 19

25 *nó* 52

15 *nó* 51

74 *nó* 47

14 *nó* 41

20 *nó* 25

18 *nó* 81

90 *nó* 99

Rudaí a Chomhaireamh



Cat

1

Aon chat (amháin)




- 2 Dhá chat
- 3 Trí chat
- 4 Ceithre chat
- 5 Cúig chat
- 6 Sé chat
- 7 Seacht gcat
- 8 Ocht gcat
- 9 Naoi gcat
- 10 Deich gcat
- 11 Aon chat déag
- 12 Dhá chat déag
- 13 Trí chat déag
- 14 Ceithre chat déag
- 15 Cúig chat déag
- 16 Sé chat déag
- 17 Seacht gcat déag
- 18 Ocht gcat déag
- 19 Naoi gcat déag
- 20 Fiche cat

Gabhar

1

Aon ghabhar (amháin)




- 2 Dhá ghabhar
- 3 Trí ghabhar
- 4 Ceithre ghabhar
- 5 Cúig ghabhar
- 6 Sé ghabhar
- 7 Seacht ngabhar
- 8 Ocht ngabhar
- 9 Naoi ngabhar
- 10 Deich ngabhar
- 11 Aon ghabhar déag
- 12 Dhá ghabhar déag
- 13 Trí ghabhar déag
- 14 Ceithre ghabhar déag
- 15 Cúig ghabhar déag
- 16 Sé ghabhar déag
- 17 Seacht ngabhar déag
- 18 Ocht ngabhar déag
- 19 Naoi ngabhar déag
- 20 Fiche gabhar

Asal

1

Aon asal (amháin)




- 2 Dhá asal
- 3 Trí asal
- 4 Ceithre asal
- 5 Cúig asal
- 6 Sé asal
- 7 Seacht n-asal
- 8 Ocht n-asal
- 9 Naoi n-asal
- 10 Deich n-asal
- 11 Aon asal déag
- 12 Dhá asal déag
- 13 Trí asal déag
- 14 Ceithre asal déag
- 15 Cúig asal déag
- 16 Sé asal déag
- 17 Seacht n-asal déag
- 18 Ocht n-asal déag
- 19 Naoi n-asal déag
- 20 Fiche asal

Toirtís

1

Aon toirtís (amháin)



- 2 Dhá thoirtís
- 3 Trí thoirtís
- 4 Ceithre thoirtís
- 5 Cúig thoirtís
- 6 Sé thoirtís
- 7 Seacht dtoirtís
- 8 Ocht dtoirtís
- 9 Naoi dtoirtís
- 10 Deich dtoirtís
- 11 Aon toirtís déag
- 12 Dhá thoirtís déag
- 13 Trí thoirtís déag
- 14 Ceithre thoirtís déag
- 15 Cúig thoirtís déag
- 16 Sé thoirtís déag
- 17 Seacht dtoirtís déag
- 18 Ocht dtoirtís déag
- 19 Naoi dtoirtís déag
- 20 Fiche toirtís

Deich (10)

1

Aon deich (amháin)




- 2 Dhá dheich
- 3 Trí dheich
- 4 Ceithre dheich
- 5 Cúig dheich
- 6 Sé dheich
- 7 Seacht ndeich
- 8 Ocht ndeich
- 9 Naoi ndeich
- 10 Deich ndeich
- 11 Aon deich déag
- 12 Dhá dheich déag
- 13 Trí dheich déag
- 14 Ceithre dheich déag
- 15 Cúig dheich déag
- 16 Sé dheich déag
- 17 Seacht ndeich déag
- 18 Ocht ndeich déag
- 19 Naoi ndeich déag
- 20 Fiche deich

Aonad (1)

1

Aon aonad (amháin)



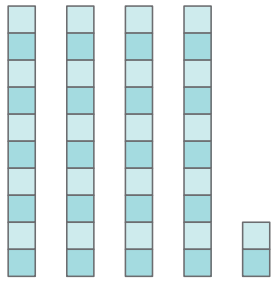
- 2 Dhá aonad
- 3 Trí aonad
- 4 Ceithre aonad
- 5 Cúig aonad
- 6 Sé aonad
- 7 Seacht n-aonad
- 8 Ocht n-aonad
- 9 Naoi n-aonad
- 10 Deich n-aonad
- 11 Aon aonad déag
- 12 Dhá aonad déag
- 13 Trí aonad déag
- 14 Ceithre aonad déag
- 15 Cúig aonad déag
- 16 Sé aonad déag
- 17 Seacht n-aonad déag
- 18 Ocht n-aonad déag
- 19 Naoi n-aonad déag
- 20 Fiche aonad

Athghrúpáil



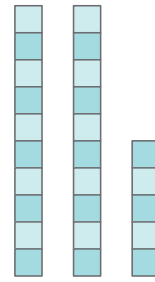
Labhair faoi seo.

1



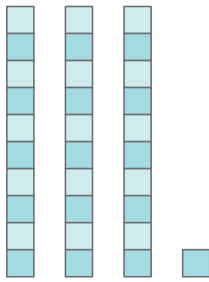
42 = dheich aonad
nó
 dheich aonad déag

2



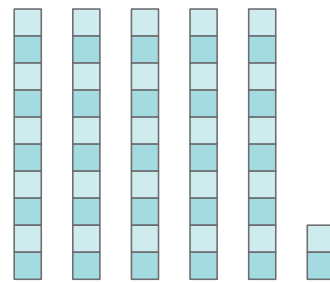
25 = dheich aonad
nó
 deich aonad déag

3



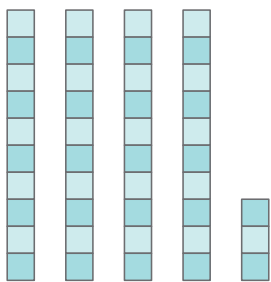
31 = dheich aonad
nó
 dheich aonad déag

4



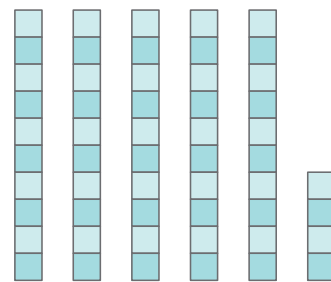
52 = dheich aonad
nó
 dheich aonad déag

5



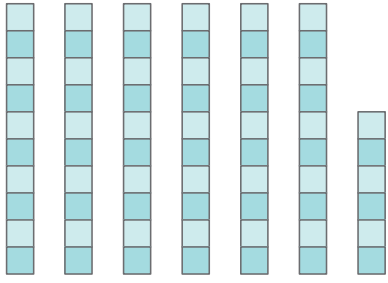
43 = dheich aonad
nó
 dheich aonad déag

6



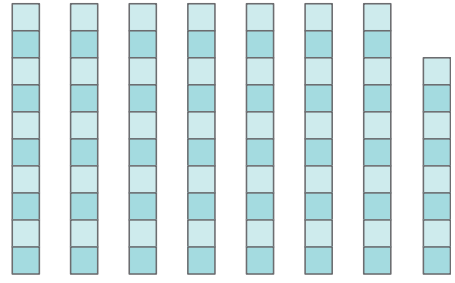
54 = dheich aonad
nó
 dheich aonad déag

7



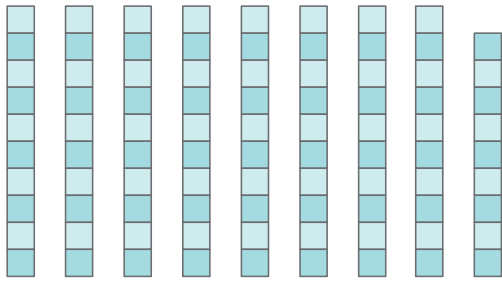
66 = dheich aonad
nó
 dheich aonad déag

8



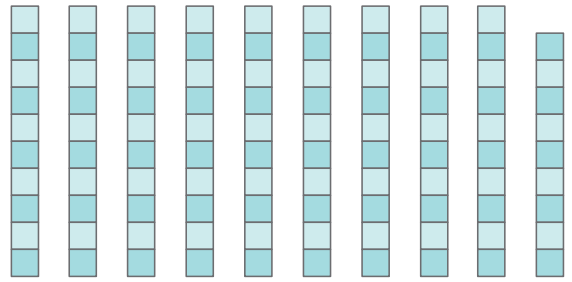
78 = ndeich n-aonad
nó
 dheich n-aonad déag

9



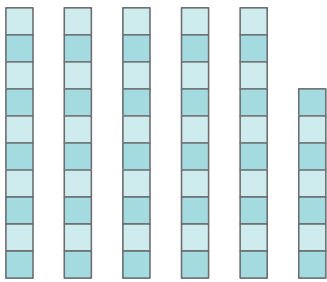
89 = ndeich n-aonad
nó
 ndeich n-aonad déag

10



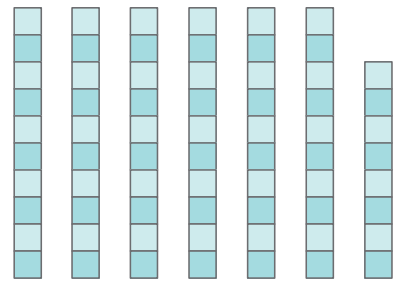
99 = ndeich n-aonad
nó
 ndeich n-aonad déag

11



57 = dheich n-aonad
nó
 dheich n-aonad déag

12



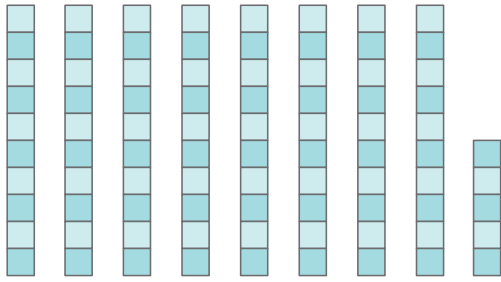
68 = dheich n-aonad
nó
 dheich n-aonad déag

Athghrúpáil



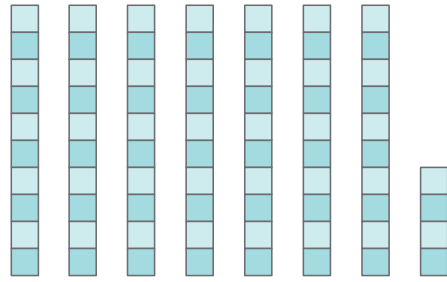
Labhair faoi seo.

1



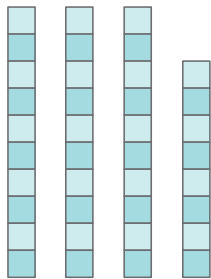
85 = ndeich aonad
nó
 ndeich aonad déag

2



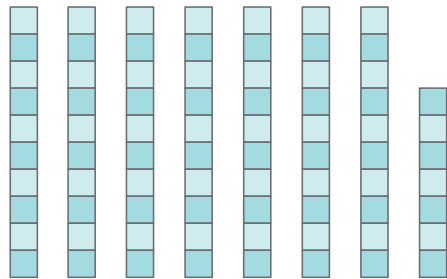
74 = ndeich aonad
nó
 dheich aonad déag

3



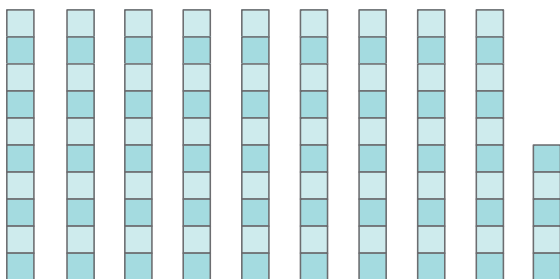
38 = dheich n-aonad
nó
 dheich n-aonad déag

4



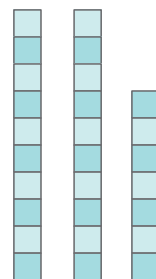
77 = ndeich n-aonad
nó
 dheich n-aonad déag

5



95 = ndeich aonad
nó
 ndeich aonad déag

6



27 = dheich n-aonad
nó
 deich n-aonad déag

Suimiú

Suimiú agus athghrúpáil. Labhair faoi seo.

1

Déan 10

0 1 2 3 4 5 6 7 8 9 10



7 5 2 9 3 4 1 0 8 6 10

2

Déan 10

10 9 8 7 6 5 4 3 2 1 0

10 1 3 9 7 4 5 0 8 6 2

3

$$\begin{array}{r} 6 \\ + \square \\ \hline 10 \end{array}$$

$$\begin{array}{r} 5 \\ + \square \\ \hline 10 \end{array}$$

$$\begin{array}{r} \square \\ + 4 \\ \hline 10 \end{array}$$

$$\begin{array}{r} \square \\ + 5 \\ \hline 10 \end{array}$$

$$\begin{array}{r} \square \\ + 7 \\ \hline 10 \end{array}$$

4

$$\begin{array}{r} 1 \\ + \square \\ \hline 10 \end{array}$$

$$\begin{array}{r} 7 \\ + \square \\ \hline 10 \end{array}$$

$$\begin{array}{r} 9 \\ + \square \\ \hline 10 \end{array}$$

$$\begin{array}{r} 8 \\ + \square \\ \hline 10 \end{array}$$

$$\begin{array}{r} 2 \\ + \square \\ \hline 10 \end{array}$$

Déan 10 ar dtús agus suimigh an figiúr eile ansin.

5

$$\begin{array}{r} 4 \\ 6 \\ + 9 \\ \hline \square \end{array}$$

$$\begin{array}{r} 5 \\ 5 \\ + 3 \\ \hline \square \end{array}$$

$$\begin{array}{r} 7 \\ 3 \\ + 3 \\ \hline \square \end{array}$$

$$\begin{array}{r} 8 \\ 2 \\ + 3 \\ \hline \square \end{array}$$

$$\begin{array}{r} 9 \\ 1 \\ + 3 \\ \hline \square \end{array}$$

6

$$\begin{array}{r} 6 \\ 2 \\ + 4 \\ \hline \square \end{array}$$

$$\begin{array}{r} 5 \\ 2 \\ + 5 \\ \hline \square \end{array}$$

$$\begin{array}{r} 3 \\ 7 \\ + 3 \\ \hline \square \end{array}$$

$$\begin{array}{r} 4 \\ 8 \\ + 6 \\ \hline \square \end{array}$$

$$\begin{array}{r} 5 \\ 4 \\ + 5 \\ \hline \square \end{array}$$



Labhair faoi seo.

1

16	22	44	59	25
$+ 24$	$+ 28$	$+ 26$	$+ 21$	$+ 65$
<input type="text"/>	<input type="text"/>	<input type="text"/>	<input type="text"/>	<input type="text"/>

2

25	34	17	63	32
$+ 34$	$+ 15$	$+ 61$	$+ 24$	$+ 46$
<input type="text"/>	<input type="text"/>	<input type="text"/>	<input type="text"/>	<input type="text"/>

Ailgéabar

1

<input type="text"/> + 4 = 10	5 + 5 = <input type="text"/>	7 + 3 = <input type="text"/>
8 + 2 = <input type="text"/>	4 + 6 = <input type="text"/>	<input type="text"/> + 9 = 10
<input type="text"/> + 8 = 10	10 + 0 = <input type="text"/>	9 + 1 = <input type="text"/>
3 + 7 = <input type="text"/>	<input type="text"/> + 7 = 10	6 + <input type="text"/> = 10

2

37	33	39	54	38
$+ 27$	$+ 49$	$+ 47$	$+ 28$	$+ 44$
<input type="text"/>	<input type="text"/>	<input type="text"/>	<input type="text"/>	<input type="text"/>

3

68	35	16	57	32
$+ 12$	$+ 55$	$+ 45$	$+ 33$	$+ 19$
<input type="text"/>	<input type="text"/>	<input type="text"/>	<input type="text"/>	<input type="text"/>

4

$\begin{array}{r} 77 \\ + 13 \\ \hline \end{array}$	$\begin{array}{r} 24 \\ + 17 \\ \hline \end{array}$	$\begin{array}{r} 48 \\ + 35 \\ \hline \end{array}$	$\begin{array}{r} 68 \\ + 14 \\ \hline \end{array}$	$\begin{array}{r} 26 \\ + 18 \\ \hline \end{array}$
---	---	---	---	---

5

$\begin{array}{r} 17 \\ + 69 \\ \hline \end{array}$	$\begin{array}{r} 61 \\ + 38 \\ \hline \end{array}$	$\begin{array}{r} 39 \\ + 46 \\ \hline \end{array}$	$\begin{array}{r} 17 \\ + 63 \\ \hline \end{array}$	$\begin{array}{r} 28 \\ + 52 \\ \hline \end{array}$
---	---	---	---	---

6

$\begin{array}{r} 24 \\ + 37 \\ \hline \end{array}$	$\begin{array}{r} 37 \\ + 46 \\ \hline \end{array}$	$\begin{array}{r} 21 \\ + 49 \\ \hline \end{array}$	$\begin{array}{r} 84 \\ + 13 \\ \hline \end{array}$	$\begin{array}{r} 35 \\ + 45 \\ \hline \end{array}$
---	---	---	---	---

7

$\begin{array}{r} 67 \\ + 27 \\ \hline \end{array}$	$\begin{array}{r} 42 \\ + 39 \\ \hline \end{array}$	$\begin{array}{r} 25 \\ + 34 \\ \hline \end{array}$	$\begin{array}{r} 70 \\ + 10 \\ \hline \end{array}$	$\begin{array}{r} 29 \\ + 40 \\ \hline \end{array}$
---	---	---	---	---

8

Déan 20


0	1	2	3	4	5	6	7	8	9	10	11	12	13	14	15	16	17	18	19	20
4	15	8	12	10	19	2	11	6	13	1	16	5	18	3	14	7	9	17	0	

Orduimhreacha





1

Tabhair banana  don ochtú (8ú) moncaí.



2

Tabhair cairéad  don chúigiú (5ú), don seachtú (7ú) agus don deichiú (10ú) coinín.



3



Madra

Cuir X ar an gcéad (1ú) litir




Teach

Cuir X ar an gceathrú (4ú) litir



Cailín

Cuir X ar an tríú (3ú) litir



Buachaill


Cuir X ar an dara (2ú) litir



An Nollaig


Cuir X ar an naoú (9ú) litir

4



Milseáin

Cuir X ar an gcúigiú (5ú) litir



An Cháisc

Cuir X ar an gceathrú (4ú) litir



Cat

Cuir X ar an tríú (3ú) litir



Oíche Shamhna

Cuir X ar an ochtú (8ú) litir



Lá Breithe

Cuir X ar an séú (6ú) litir

Suimiú



Suimiú agus Athghrúpáil; Suimiú gan Athghrúpáil. Labhair faoi seo.

1

26	35	24	52	43
$+ 11$	$+ 43$	$+ 38$	$+ 29$	$+ 27$
<input type="text"/>	<input type="text"/>	<input type="text"/>	<input type="text"/>	<input type="text"/>

2

42	34	35	62	49
$+ 29$	$+ 58$	$+ 35$	$+ 19$	$+ 17$
<input type="text"/>	<input type="text"/>	<input type="text"/>	<input type="text"/>	<input type="text"/>

3

25	32	46	69	14
$+ 26$	$+ 18$	$+ 22$	$+ 23$	$+ 54$
<input type="text"/>	<input type="text"/>	<input type="text"/>	<input type="text"/>	<input type="text"/>

4 Úsáid licíní más maith leat.

$15 + 5 = \text{input}$

$13 + 7 = \text{input}$

$10 + 10 = \text{input}$

$2 + \text{input} = 10$

$4 + \text{input} = 20$

$20 + \text{input} = 20$

$18 + \text{input} = 20$

$16 + \text{input} = 20$

$\text{input} + 16 = 20$

$\text{input} + 19 = 20$

$\text{input} + 17 = 20$

$\text{input} + 14 = 20$

$19 + \text{input} = 20$

$\text{input} + 20 = 20$

$8 + \text{input} = 10$

$10 + \text{input} = 10$

Suimiú



Suimiú agus Athghrúpáil; Suimiú gan Athghrúpáil. Labhair faoi seo.

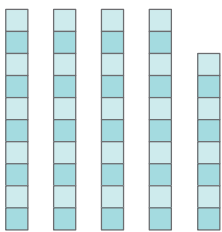
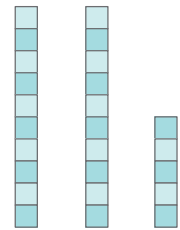
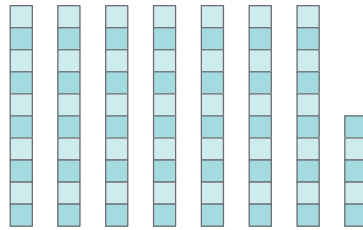
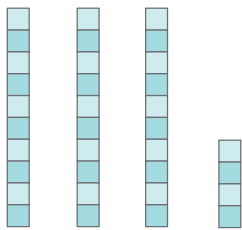
1

27	23	36	16	17
$+ 27$	$+ 27$	$+ 45$	$+ 28$	$+ 25$
<input type="text"/>	<input type="text"/>	<input type="text"/>	<input type="text"/>	<input type="text"/>

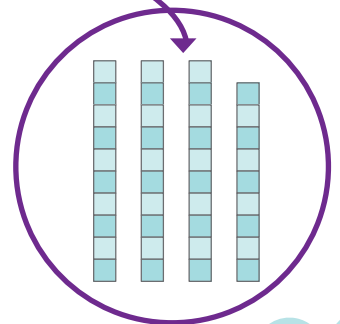
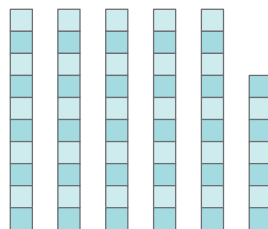

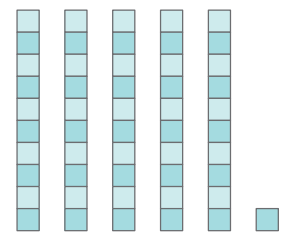
2

14	34	8	28	18
$+ 25$	$+ 19$	$+ 29$	$+ 31$	$+ 29$
<input type="text"/>	<input type="text"/>	<input type="text"/>	<input type="text"/>	<input type="text"/>

3 Faigh an uimhir



1	2	3	4	5	6	7	8	9	10
11	12	13	14	15	16	17	18	19	20
21	22	23	24	25	26	27	28	29	30
31	32	33	34	35	36	37	38	39	40
41	42	43	44	45	46	47	48	49	50
51	52	53	54	55	56	57	58	59	60
61	62	63	64	65	66	67	68	69	70
71	72	73	74	75	76	77	78	79	80
81	81	83	84	85	86	87	88	89	90
91	92	93	94	95	96	97	98	99	100




Measunú 2

1



Leath ($\frac{1}{2}$) an tacair =

2



Bhí 18 n-úll agam. D'ith mé 5 úll.
Cé mhéad úll atá fágtha?

3



Cé mhéad méar?

4



a) Cén méid airgid?

b) Cé mhéad bonn?

5

Líon isteach an chéad-chearnóg.

	2						
	32						
41							50
	52						
61							70
	72						
		83					
							99 100

6

Déan 10 ar dtús agus suimigh ansin.

$$\begin{array}{r} 6 \\ 5 \\ + 4 \\ \hline \end{array}$$

$$\begin{array}{r} 5 \\ 8 \\ + 5 \\ \hline \end{array}$$

$$\begin{array}{r} 7 \\ 7 \\ + 3 \\ \hline \end{array}$$

$$\begin{array}{r} 4 \\ 6 \\ + 6 \\ \hline \end{array}$$


7

$$\begin{array}{r} 26 \\ + 12 \\ \hline \end{array}$$

$$\begin{array}{r} 35 \\ + 44 \\ \hline \end{array}$$

8

Tabhair balún don seachtú (7ú) páiste.



An Scór

Dealú



Gan athghrúpáil.

Nóta don mhúinteoir: Úsáid licíní nó cnaipí do na suimeanna i gceist 1. Lean ort á n-úsáid go dtí go dtagann na daltaí isteach air. Is úsáideach an rud é tacair de dheiceanna (10) a dhéanamh.

1

18	20	27	16	38
$- 6$	$- 5$	$- 7$	$- 2$	$- 4$
<input type="text"/>	<input type="text"/>	<input type="text"/>	<input type="text"/>	<input type="text"/>

2

39	84	76	63	52
$- 8$	$- 4$	$- 3$	$- 2$	$- 1$
<input type="text"/>	<input type="text"/>	<input type="text"/>	<input type="text"/>	<input type="text"/>

3

96	15	28	64	79
$- 5$	$- 5$	$- 4$	$- 3$	$- 7$
<input type="text"/>	<input type="text"/>	<input type="text"/>	<input type="text"/>	<input type="text"/>

4

$$20 - \boxed{} = 19$$

$$20 - \boxed{} = 2$$

$$20 - \boxed{} = 18$$

$$20 - \boxed{} = 14$$

$$20 - \boxed{} = 16$$

$$20 - \boxed{} = 13$$

$$20 - \boxed{} = 11$$

5

$$20 - \boxed{} = 7$$

$$20 - \boxed{} = 17$$

$$20 - \boxed{} = 12$$

$$20 - \boxed{} = 15$$

$$20 - \boxed{} = 0$$

$$20 - \boxed{} = 8$$

$$20 - \boxed{} = 3$$

Nóta don mhúinteoir: Úsáid boinn airgid e.g. 3 bhonn 10 cent agus 4 bhonn 1 cent don chéad suim i gceist 1, agus ina dhiaidh sin más gá, go dtí go dtagann na daltaí isteach air.

1

$\begin{array}{r} 34 \\ - 1 \\ \hline \end{array}$	$\begin{array}{r} 79 \\ - 5 \\ \hline \end{array}$	$\begin{array}{r} 36 \\ - 4 \\ \hline \end{array}$	$\begin{array}{r} 19 \\ - 6 \\ \hline \end{array}$	$\begin{array}{r} 28 \\ - 7 \\ \hline \end{array}$
--	--	--	--	--

2

$\begin{array}{r} 97 \\ - 1 \\ \hline \end{array}$	$\begin{array}{r} 48 \\ - 2 \\ \hline \end{array}$	$\begin{array}{r} 57 \\ - 3 \\ \hline \end{array}$	$\begin{array}{r} 29 \\ - 2 \\ \hline \end{array}$	$\begin{array}{r} 37 \\ - 7 \\ \hline \end{array}$
--	--	--	--	--

3

$\begin{array}{r} 32 \\ - 1 \\ \hline \end{array}$	$\begin{array}{r} 41 \\ - 0 \\ \hline \end{array}$	$\begin{array}{r} 33 \\ - 2 \\ \hline \end{array}$	$\begin{array}{r} 44 \\ - 3 \\ \hline \end{array}$	$\begin{array}{r} 56 \\ - 5 \\ \hline \end{array}$
--	--	--	--	--

4

$\begin{array}{r} 34 \\ - 3 \\ \hline \end{array}$	$\begin{array}{r} 52 \\ - 2 \\ \hline \end{array}$	$\begin{array}{r} 35 \\ - 4 \\ \hline \end{array}$	$\begin{array}{r} 62 \\ - 1 \\ \hline \end{array}$	$\begin{array}{r} 65 \\ - 3 \\ \hline \end{array}$
--	--	--	--	--

5

$\begin{array}{r} 96 \\ - 4 \\ \hline \end{array}$	$\begin{array}{r} 57 \\ - 6 \\ \hline \end{array}$	$\begin{array}{r} 43 \\ - 3 \\ \hline \end{array}$	$\begin{array}{r} 66 \\ - 2 \\ \hline \end{array}$	$\begin{array}{r} 78 \\ - 7 \\ \hline \end{array}$
--	--	--	--	--

6

$\begin{array}{r} 58 \\ - 5 \\ \hline \end{array}$	$\begin{array}{r} 47 \\ - 5 \\ \hline \end{array}$	$\begin{array}{r} 63 \\ - 2 \\ \hline \end{array}$	$\begin{array}{r} 88 \\ - 6 \\ \hline \end{array}$	$\begin{array}{r} 48 \\ - 7 \\ \hline \end{array}$
--	--	--	--	--



1

$\begin{array}{r} \text{DA} \\ 47 \\ - 35 \\ \hline \end{array}$	$\begin{array}{r} \text{DA} \\ 74 \\ - 43 \\ \hline \end{array}$	$\begin{array}{r} \text{DA} \\ 38 \\ - 25 \\ \hline \end{array}$	$\begin{array}{r} \text{DA} \\ 69 \\ - 35 \\ \hline \end{array}$	$\begin{array}{r} \text{DA} \\ 87 \\ - 52 \\ \hline \end{array}$
--	--	--	--	--

2

$\begin{array}{r} \text{DA} \\ 69 \\ - 37 \\ \hline \end{array}$	$\begin{array}{r} \text{DA} \\ 87 \\ - 62 \\ \hline \end{array}$	$\begin{array}{r} \text{DA} \\ 94 \\ - 21 \\ \hline \end{array}$	$\begin{array}{r} \text{DA} \\ 78 \\ - 17 \\ \hline \end{array}$	$\begin{array}{r} \text{DA} \\ 37 \\ - 14 \\ \hline \end{array}$
--	--	--	--	--

3

$\begin{array}{r} \text{DA} \\ 80 \\ - 30 \\ \hline \end{array}$	$\begin{array}{r} \text{DA} \\ 95 \\ - 40 \\ \hline \end{array}$	$\begin{array}{r} \text{DA} \\ 87 \\ - 44 \\ \hline \end{array}$	$\begin{array}{r} \text{DA} \\ 98 \\ - 25 \\ \hline \end{array}$	$\begin{array}{r} \text{DA} \\ 89 \\ - 41 \\ \hline \end{array}$
--	--	--	--	--

4

$\begin{array}{r} \text{DA} \\ 38 \\ - 16 \\ \hline \end{array}$	$\begin{array}{r} \text{DA} \\ 58 \\ - 43 \\ \hline \end{array}$	$\begin{array}{r} \text{DA} \\ 75 \\ - 44 \\ \hline \end{array}$	$\begin{array}{r} \text{DA} \\ 63 \\ - 32 \\ \hline \end{array}$	$\begin{array}{r} \text{DA} \\ 48 \\ - 22 \\ \hline \end{array}$
--	--	--	--	--

5

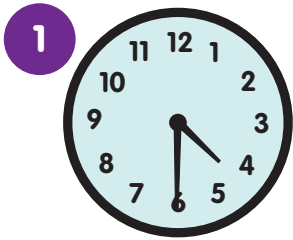
$\begin{array}{r} \text{DA} \\ 56 \\ - 34 \\ \hline \end{array}$	$\begin{array}{r} \text{DA} \\ 68 \\ - 42 \\ \hline \end{array}$	$\begin{array}{r} \text{DA} \\ 95 \\ - 45 \\ \hline \end{array}$	$\begin{array}{r} \text{DA} \\ 35 \\ - 22 \\ \hline \end{array}$	$\begin{array}{r} \text{DA} \\ 75 \\ - 33 \\ \hline \end{array}$
--	--	--	--	--

6


$\begin{array}{r} \text{DA} \\ 88 \\ - 27 \\ \hline \end{array}$	$\begin{array}{r} \text{DA} \\ 46 \\ - 26 \\ \hline \end{array}$	$\begin{array}{r} \text{DA} \\ 74 \\ - 53 \\ \hline \end{array}$	$\begin{array}{r} \text{DA} \\ 77 \\ - 45 \\ \hline \end{array}$	$\begin{array}{r} \text{DA} \\ 59 \\ - 26 \\ \hline \end{array}$
--	--	--	--	--

An tAm


Nóta don mhúinteoir: Téigh siar ar an gclog agus ar an am. Is i Rang 1 a chuirtear an leathuair i láthair.




Leathuair ($\frac{1}{2}$)
tar éis a



Leathuair ($\frac{1}{2}$)
tar éis a



Leathuair ($\frac{1}{2}$)
tar éis a



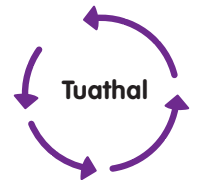
Leathuair ($\frac{1}{2}$)
tar éis a



Seasca (60) nóiméad atá in 1 uair an chloig.
Tríocha (30) nóiméad atá i leathuair ($\frac{1}{2}$) an chloig.
An bhfuil tú in ann scipeáil ar feadh aon nóiméad amháin?



2 Tarraing ciorcal ar an urlár. Siúil deiseal agus tuathal timpeall air.



3

Meán Fómhair 2012

Dé Luain	Dé Máirt	Dé Céadaoin	Déardaoin	Dé hAoine	Dé Sathairn	Dé Domhnaigh
1	2	3	4	5	6	7
8	9	10	11	12	13	14
15	16	17	18	19	20	21
22	23	24	25	26	27	28

a) Cé mhéad lá i mí Mheán Fómhair?

c) Cén dáta é an dara Satharn de mhí Mheán Fómhair?

b) Cén dáta atá scáthaithe?

d) Cé mhéad Luan i mí Mheán Fómhair?

4

Laethanta Breithe mo Mhuintirse.

a) Bíonn lá breithe agamsa ar

b) Bíonn lá breithe ag mo Mham ar

c) Bíonn lá breithe ag mo chol ceathrair ar

d) Bíonn lá breithe ag m'ainfin ar

e) Bíonn lá breithe ag m'uncail ar



1



Cén méid airgid?

2



Cén méid airgid?

3



Cén méid airgid?

4



Cén méid airgid?

5



Cén méid airgid?

6



Cén méid airgid?

7



Cén méid airgid?

8



Cén méid airgid?

Suimiú. Freagraí ilroghnacha. Cuir ciorcal timpeall ar an tsuim cheart airgid.

1



30c

40c

50c

2



30c

40c

50c

3



30c

40c

50c

4




40c

45c

50c

5



30c

40c

42c

6



30c

40c

50c

7




30c

40c

50c

8



30c

40c

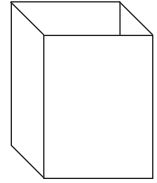
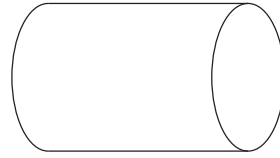
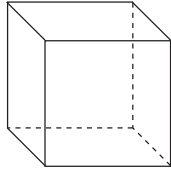
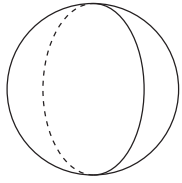
50c

Cruthanna 2-T agus 3-T




Labhair faoi na cruthanna seo. Ainmnigh iad. Cuir síos orthu.
Cuir i gcomparáid lena chéile iad.

1



Meaitseáil



Cuir na cruthanna 3-T isteach i mála. (Liathróidí gailf, bloic, stáin, boscaí, díslí).
Dún do shúile, braith na cruthanna le do lámha agus déan cur síos ar gach ceann díobh.




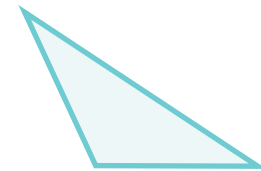





2

Scríobh **L** laistigh de gach leathchiorcal.

Scríobh **T** laistigh de gach triantán.

Scríobh **D** laistigh de gach dronuilleog.

Scríobh **C** laistigh de gach ciorcal.



Fad


An Méadar agus an Leathmhéadar.



Nuair a shíneann tú do dhá lámh amach,
sin tuairim is méadar.

1 mhéadar = 100 ceintiméadar **€1 = 100 cent**

Aimsigh giota snátha nó sreinge.
Tomhais aon mhéadar amháin. Gearr é.



Tá tomhas méadair agat anois agus féadfaidh tú é a úsáid.

1

Rudaí a d'aimsigh mé

atá níos giorra ná 1 mhéadar

atá níos faide ná 1 mhéadar

Gearr an tsreang aon mhéadar ina dhá leath. Aimsigh rudaí sa
bhaile nó ar scoil atá tuairim is leathmhéadar ar fad.



2

Rudaí a d'aimsigh mé

atá níos mó ná leathmhéadar

atá níos lú ná leathmhéadar

Toilleadh




Labhair faoi seo.

Nóta don mhúinteoir: Bíodh taithí ag na daltaí ar shoithigh aon lítir agus ar shoithigh leathlítir a líonadh le leacht sula dtugann siad faoin leathanach seo.




Cé mhéad lítear?




Cé mhéad lítear?


3 Dathaigh leath an mhéid sú i ngach buidéal thíos.




SÚ ORÁISTÍ



LIOMANÁID



SÚ ÚLL



SÚ CUIRÍNÍ DUBHA

Meáchan

Labhair faoi seo.

Nóta don mhúinteoir: Bíodh taithí ag na daltaí ar chileagram agus ar leathchileagram a mheá sula dtugann siad faoin leathanach seo.

1



Cé mhéad cileagram?

2



Cé mhéad cileagram?

3

Cuir tic ✓ leis an bhfreagra ceart



Níos mó ná 1 chileagram

Níos lú ná 1 chileagram



Níos mó ná 1 chileagram

Níos lú ná 1 chileagram



Níos mó ná 1 chileagram

Níos lú ná 1 chileagram



Níos mó ná 1 chileagram

Níos lú ná 1 chileagram



Níos mó ná 1 chileagram

Níos lú ná 1 chileagram



Níos mó ná 1 chileagram

Níos lú ná 1 chileagram



Níos mó ná 1 chileagram

Níos lú ná 1 chileagram



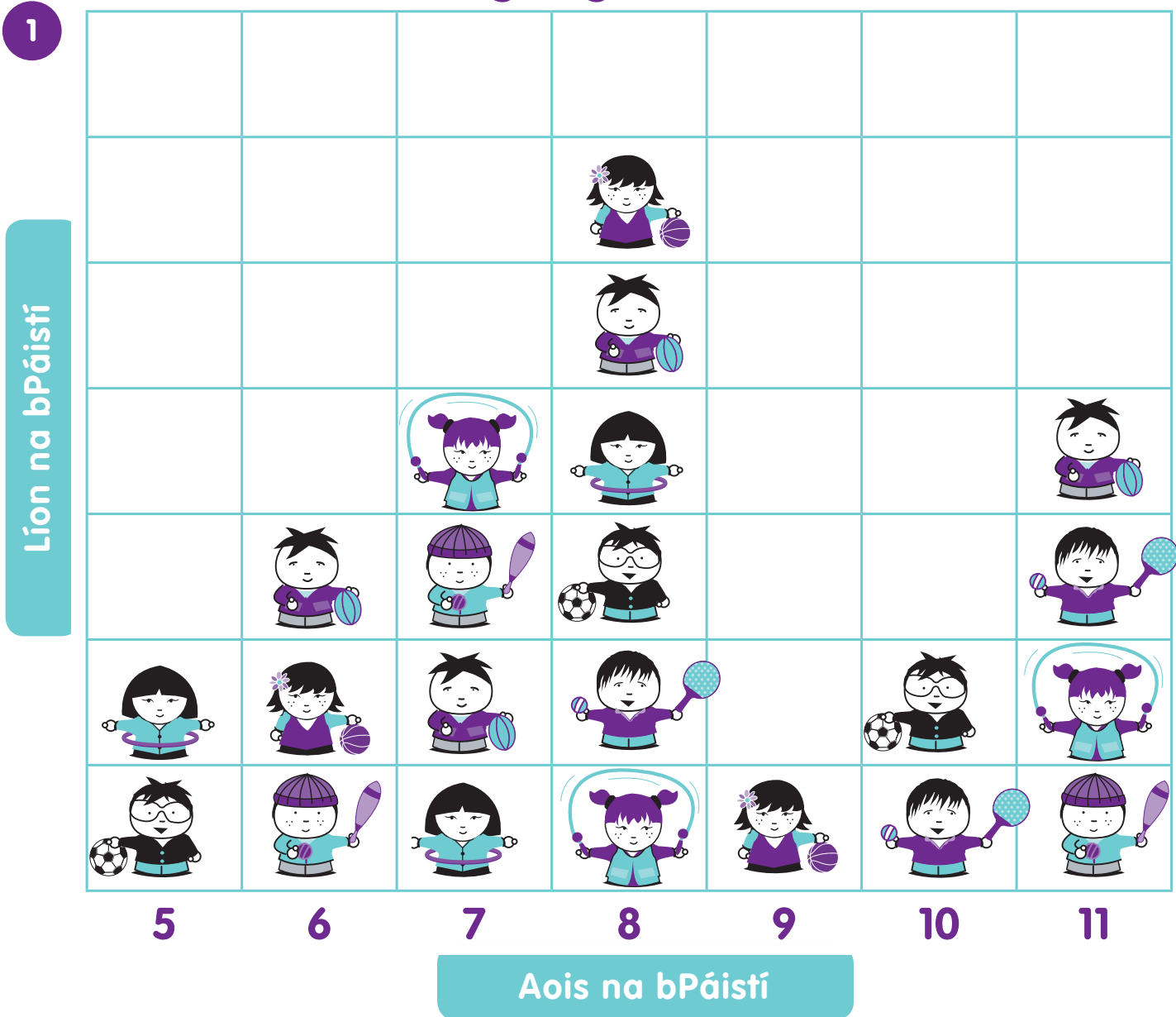
Níos mó ná 1 chileagram

Níos lú ná 1 chileagram



Picteagram a aithint agus a thuiscint.

Páistí ag Súgradh sa Pháirc



- 1 Cé mhéad páiste atá os cionn 8 mbliana d'aois?
- 2 Cé mhéad páiste atá faoi bhun 7 mbliana d'aois?
- 3 Cé mhéad páiste atá sa pháirc ar an iomlán?
- 4 Cé mhéad páiste a bheidh in aois 11 ar a gcéad lá breithe eile?
- 5 Cén aoisghrúpa lena mbaineann tusa?

Suimiú

Déan 10 ar dtús agus suimigh an figiúr eile ansin.

1

$\begin{array}{r} 14 \\ 18 \\ + 16 \\ \hline \end{array}$	$\begin{array}{r} 15 \\ 12 \\ + 15 \\ \hline \end{array}$	$\begin{array}{r} 17 \\ 13 \\ + 13 \\ \hline \end{array}$	$\begin{array}{r} 19 \\ 15 \\ + 11 \\ \hline \end{array}$	$\begin{array}{r} 18 \\ 14 \\ + 12 \\ \hline \end{array}$
---	---	---	---	---

2

$\begin{array}{r} 12 \\ 18 \\ + 18 \\ \hline \end{array}$	$\begin{array}{r} 19 \\ 22 \\ + 21 \\ \hline \end{array}$	$\begin{array}{r} 16 \\ 21 \\ + 14 \\ \hline \end{array}$	$\begin{array}{r} 15 \\ 13 \\ + 25 \\ \hline \end{array}$	$\begin{array}{r} 13 \\ 13 \\ + 27 \\ \hline \end{array}$
---	---	---	---	---

3

$\begin{array}{r} 16 \\ 14 \\ + 27 \\ \hline \end{array}$	$\begin{array}{r} 25 \\ 15 \\ + 13 \\ \hline \end{array}$	$\begin{array}{r} 18 \\ 22 \\ + 18 \\ \hline \end{array}$	$\begin{array}{r} 17 \\ 13 \\ + 15 \\ \hline \end{array}$	$\begin{array}{r} 20 \\ 29 \\ + 21 \\ \hline \end{array}$
---	---	---	---	---

2

$\begin{array}{r} 18 \\ 12 \\ + 22 \\ \hline \end{array}$	$\begin{array}{r} 11 \\ 24 \\ + 29 \\ \hline \end{array}$	$\begin{array}{r} 24 \\ 21 \\ + 26 \\ \hline \end{array}$	$\begin{array}{r} 17 \\ 21 \\ + 13 \\ \hline \end{array}$	$\begin{array}{r} 25 \\ 15 \\ + 20 \\ \hline \end{array}$
---	---	---	---	---

3

$\begin{array}{r} 18 \\ 15 \\ + 12 \\ \hline \end{array}$	$\begin{array}{r} 31 \\ 29 \\ + 3 \\ \hline \end{array}$	$\begin{array}{r} 26 \\ 34 \\ + 1 \\ \hline \end{array}$	$\begin{array}{r} 25 \\ 5 \\ + 12 \\ \hline \end{array}$	$\begin{array}{r} 19 \\ 18 \\ + 1 \\ \hline \end{array}$
---	--	--	--	--

Measúnú 3




1

Scríobh **L** laistigh de gach leathchiorcal.

Scríobh **T** laistigh de gach triantán.

Scríobh **D** laistigh de gach dronuilleog.



2



a) Cé mhéad bonn?

b) Cén méid airgid?

3



Cé mhéad lítear?

4

Bíonn lá breithe agamsa ar

5

1 uair an chloig = nóiméad

6

$$\begin{array}{r} 29 \\ 3 \\ + 17 \\ \hline \end{array}$$

$$\begin{array}{r} 34 \\ 26 \\ + 0 \\ \hline \end{array}$$

$$\begin{array}{r} 17 \\ 21 \\ + 13 \\ \hline \end{array}$$

$$\begin{array}{r} 28 \\ 15 \\ + 12 \\ \hline \end{array}$$

$$\begin{array}{r} 15 \\ 29 \\ + 35 \\ \hline \end{array}$$

7

DA

$$\begin{array}{r} 58 \\ - 42 \\ \hline \end{array}$$

DA

$$\begin{array}{r} 36 \\ - 20 \\ \hline \end{array}$$

DA

$$\begin{array}{r} 55 \\ - 33 \\ \hline \end{array}$$

DA

$$\begin{array}{r} 35 \\ - 21 \\ \hline \end{array}$$




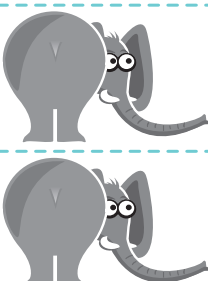


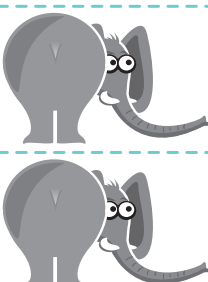










DA

$$\begin{array}{r} 95 \\ - 75 \\ \hline \end{array}$$

8

Na hAinmhithe Fiáine is fearr le Rang a hAon

Líon na bPáistí

5					
4					
3					
2					
1					

a) Cé mhéad páiste ar fearr leo moncaithe ná séabraí?

b) Cé mhéad páiste ar fearr leo pearóidí ná leoin?

c) Cé mhéad páiste a dtaitníonn eilifintí leo?

d) Cé mhéad páiste a dtaitníonn leoin leo?

9



Cé mhéad cileagram?

10



a) Meánn an cat seo


níos mó ná 1 chileagram

níos lú ná 1 chileagram

b) Meánn an peann luaidhe seo

níos mó ná 1 chileagram

níos lú ná 1 chileagram



An Scór

Comhlánaigh an tuairisc Measúnú 2 i ndeireadh an leabhair.

Measúnú: a bhfuil i gceist



Moltar go mbeadh daltaí ó Rang 1 ar aghaidh, rannpháirteach sa mheasúnú a dhéantar orthu.

Measúnú 1	Féinmheasúnú an dalta			Tuairim an mhúinteora.
Tuiscint				
Cruinneas				
Luas				
Buanna				Múinteoir
Laigí				Múinteoir

Measúnú 2	Féinmheasúnú an dalta			Tuairim an mhúinteora.
Tuiscint				
Cruinneas				
Luas				
Buanna				Múinteoir
Laigí				Múinteoir

Measúnú 3	Féinmheasúnú an dalta			Tuairim an mhúinteora.
Tuiscint				
Cruinneas				
Luas				
Buanna				Múinteoir
Laigí				Múinteoir