

# Mata go Deo!

# 4




Florence Gavin





**Florence Gavin**



Aisling Ní Fharachtáin & Áine Ní Fhlatharta  
a d'aistrigh

**AN GÚM**

Baile Átha Cliath

Ba iad Mulberry Publications a chéadfhoilsigh  
faoin teideal *MakeSure Maths 4*

© Florence Gavin, 2006

**An leagan Gaeilge**

© Foras na Gaeilge, 2009

ISBN 978-1-85791-758-1

Gach ceart ar cosaint. Ní ceadmhach aon chuid  
den fhoilseachán seo a atáirgeadh,  
gan cead a fháil roimh ré ón bhfoilsitheoir.

Susan Meaney a dhear agus a chuir suas an cló  
**[www.smeaney.com](http://www.smeaney.com)**

Future Print a chlóbhuail in Éirinn

***Le fáil ar an bpost uathu seo:***

An Siopa Leabhar  
6 Sráid Fhearchair  
Baile Átha Cliath 2  
**[ansiopaleabhar@eircom.net](mailto:ansiopaleabhar@eircom.net)**

*nó*

An Ceathrú Póilí  
Cultúrlann Mac Adam–Ó Fiaich  
216 Bóthar na bhFál  
Béal Feirste BT12 6AH  
**[leabhair@an4poili.com](mailto:leabhair@an4poili.com)**

***Orduithe ó leabhardhíoltóirí chuig:***

Áis  
31 Sráid na bhFíníní  
Baile Átha Cliath 2  
**[eolas@forasnagaeilge.ie](mailto:eolas@forasnagaeilge.ie)**



# Mata go Deo!

## 4


### SNÁITHE

### SNÁITHAONAD

### LEATHANACH


Uimhreas	Uimhreacha suas go dtí 9999	2
Uimhreas	Ionadluach	4
Uimhreas	Slánú	5
Uimhreas	Uimhreacha suas go dtí 9999	6
Uimhreas	Fadhbanna le Réiteach	7
Uimhreas	Iolrú	8
Uimhreas	Dealú Leantach	10
Uimhreas	Roinnt	12
Uimhreas	Roinnt agus Garmheastacháin	14
<b>Cruth &amp; Spás</b>	<b>Cruthanna Déthoiseacha (2-T)</b>	<b>15</b>
<b>Measúnú 1</b>		<b>16</b>
Uimhreas	Fadhbanna Scríofa	18
Uimhreas	Codáin Choibhéiseacha	19
Uimhreas	Codáin	20
Uimhreas	Fadhbanna Scríofa	21
<b>Cruth &amp; Spás</b>	<b>Cruthanna Tríthoiseacha (3-T)</b>	<b>22</b>
Uimhreas	Codáin Dheachúlacha	23
Tomhais	Meáchan	24
<b>Measúnú 2</b>		<b>25</b>
Tomhais	Toilleadh	26
Uimhreas	Deachúlacha	27
Tomhais	Fad	28
Tomhais	Fad Slí	29
Tomhais	Achar	30
Tomhais	An tAm	32
Tomhais	Airgead	34
Uimhreas	Fadhbanna Scríofa	35
Ailgéabar	Patrúin Uimhreacha	36
Sonraí	Cairteacha	38
<b>Cruth &amp; Spás</b>	<b>Uillinneacha &amp; Línte</b>	<b>39</b>
Sonraí	Seans & Dóchúlacht	42
<b>Cruth &amp; Spás</b>	<b>Siméadracht</b>	<b>44</b>
Uimhreas	Slánú	45
<b>Measúnú 3</b>		<b>46</b>

# Uimhreacha suas go dtí 9999




Naoi míle naoi gcéad nócha naoi (9999)

1




Scríobh an uimhir atá léirithe.

2




Scríobh an uimhir atá léirithe.

3

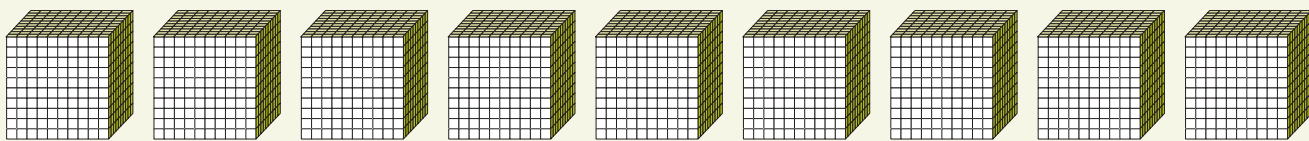


Scríobh an uimhir atá léirithe.

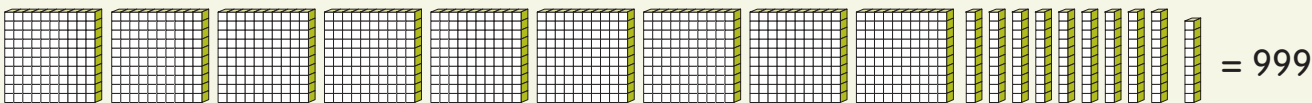
4



Scríobh an uimhir atá léirithe.



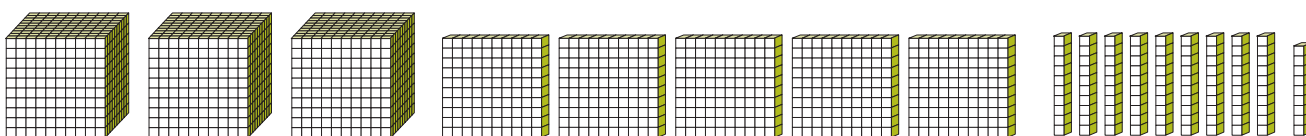
1000 + 1000 ...



= 999

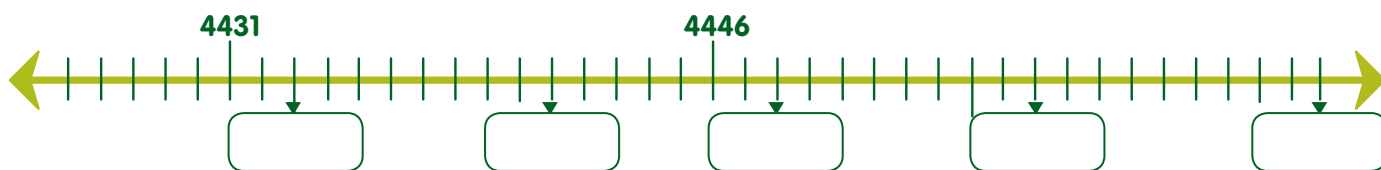
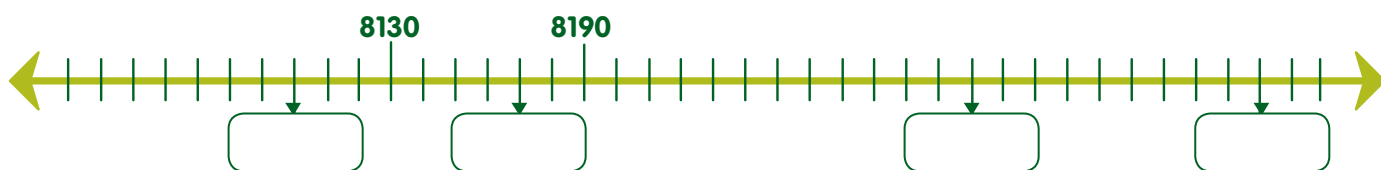
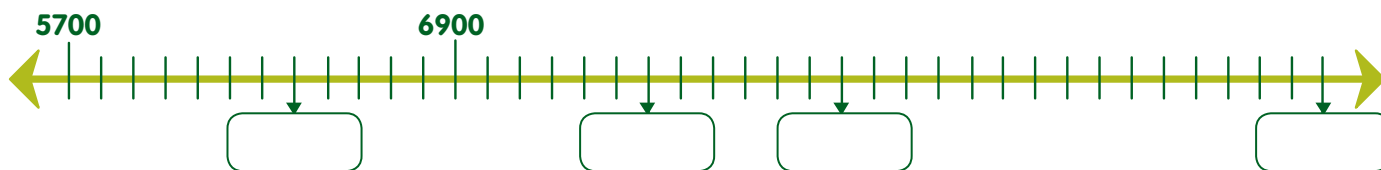
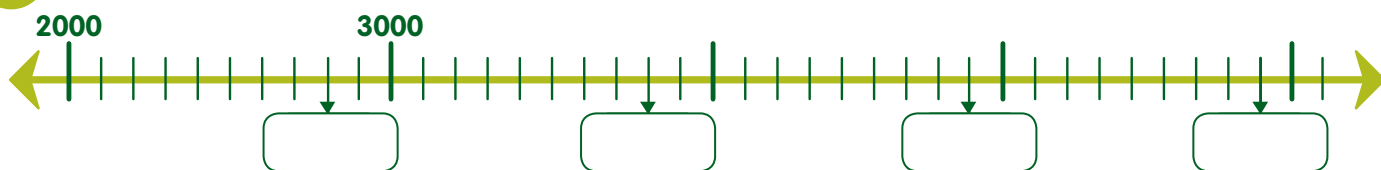
lomlán = 9999

5



Cén uimhir atá á léiriú.

6 Codanna den uimhirlíne atá á léiriú thíos. Scríobh na huimhreacha sna boscaí.



7

Déan an oiread uimhreacha ceithre dhigit agus is féidir leat leis na digití 4, 5, 7, 9. Cuir na huimhreacha sna boscaí thíos agus cuir ciorcal timpeall ar an uimhir is mó.

<input type="text"/>	<input type="text"/>	<input type="text"/>	<input type="text"/>	<input type="text"/>	<input type="text"/>	<input type="text"/>	<input type="text"/>
<input type="text"/>	<input type="text"/>	<input type="text"/>	<input type="text"/>	<input type="text"/>	<input type="text"/>	<input type="text"/>	<input type="text"/>

Cé mhéad uimhir cheithre dhigit a d'éirigh leat a dhéanamh?

# Ionadluach

1 Cén luach atá ag an uimhir uaine? Cuir  tic sa bhosca ceart.

**4428** 2  28  20  4200  **7659** 60  106  600  760

**6343** 30  300  3  6003  **9199** 9  90  19  190

**2654** 65  5  50  2000  **5581** 1  581  81  5000

2  Cé mhéad?

3 Tarraing pictiúir den chineál céanna chun an uimhir 4106 a léiriú. Cé mhéad?

4 Bris na huimhreacha thíos i bpíosaí ar aon dul leis an gcéad uimhir.

**5028 = 5000 + 20 + 8**

8106 =

4089 =

3105 =

5695 =

6319 =

9038 =

4376 =

3082 =

2580 =

5 Tabhair gach uimhir go dtí an **100** is gaire.

9136

2370

4462

3750

6500

9402

5499

3502

8480

Tabhair gach uimhir go dtí an **1000** is gaire.

9136

2370

4462

3750

6500


9402

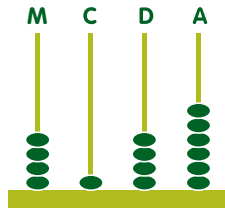
5499

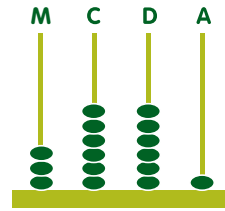
3502

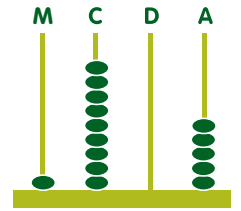
8480

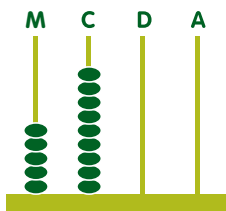
1 Scríobh na huimhreacha cúí sna boscaí

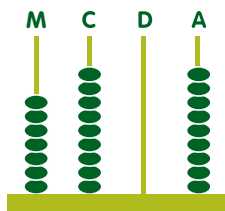





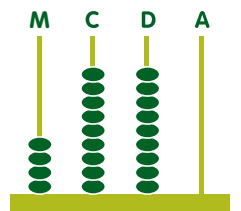













2 Tabhair na huimhreacha seo go dtí an míle (1000) is gaire.

2500	3800	4600	4100	2999	4999	9999
<input type="text"/>	<input type="text"/>	<input type="text"/>	<input type="text"/>	<input type="text"/>	<input type="text"/>	<input type="text"/>

3 Tabhair na huimhreacha seo go dtí an céad (100) is gaire.

4950	2621	8540	3950	8765	8750	9149
<input type="text"/>	<input type="text"/>	<input type="text"/>	<input type="text"/>	<input type="text"/>	<input type="text"/>	<input type="text"/>

4 Seiceáil do chuid freagraí leis an áireamhán.

$\begin{array}{r} 2046 \\ + 869 \\ \hline \end{array}$ <input type="text"/>	$\begin{array}{r} 3057 \\ + 876 \\ \hline \end{array}$ <input type="text"/>	$\begin{array}{r} 3694 \\ + 2076 \\ \hline \end{array}$ <input type="text"/>	$\begin{array}{r} 762 \\ - 438 \\ \hline \end{array}$ <input type="text"/>	$\begin{array}{r} 926 \\ - 465 \\ \hline \end{array}$ <input type="text"/>	$\begin{array}{r} 873 \\ - 377 \\ \hline \end{array}$ <input type="text"/>
---	---	--	--	--	--

Tabhair do chuid freagraí go dtí an deich (10) is gaire.

<input type="text"/>	<input type="text"/>	<input type="text"/>
----------------------	----------------------	----------------------

Tabhair do chuid freagraí do dtí an céad (100) is gaire.

<input type="text"/>	<input type="text"/>	<input type="text"/>
----------------------	----------------------	----------------------

5

$2045 + 976 =$	<input type="text"/>	$3410 + 832 =$	<input type="text"/>	$3684 + 2156 =$	<input type="text"/>
$4801 + 1712 =$	<input type="text"/>	$2850 + 2419 =$	<input type="text"/>	$4508 + 1632 =$	<input type="text"/>



# Uimhreacha suas go dtí 9999



1000 méadar = 1 km

9000 méadar = 9 km

1  $\frac{1}{2}$  de 100 =        $\frac{1}{4}$  de 100 =        $\frac{3}{4}$  de 100 =   
 $\frac{1}{2}$  de 1000 =        $\frac{1}{4}$  de 1000 =        $\frac{3}{4}$  de 1000 =

2

$29 + 15 + 47 =$ <input type="text"/>	$18 + 18 + 26 =$ <input type="text"/>	$8 + 3 + 5 =$ <input type="text"/>
$8 + 13 + 27 =$ <input type="text"/>	$18 + 23 + 5 =$ <input type="text"/>	$19 + 23 + 17 =$ <input type="text"/>
$9 + 13 + 7 =$ <input type="text"/>	$18 + 23 + 37 =$ <input type="text"/>	$100 + 70 + 8 =$ <input type="text"/>
$26 + 50 + 10 =$ <input type="text"/>	$40 + 63 + 60 =$ <input type="text"/>	$60 + 70 + 30 =$ <input type="text"/>
$600 + 20 + 7 =$ <input type="text"/>	$5000 + 4000 =$ <input type="text"/>	$9000 + 350 =$ <input type="text"/>
$200 + 80 + 6 =$ <input type="text"/>	$1000 + 60 + 6 =$ <input type="text"/>	$2000 + 500 + 9 =$ <input type="text"/>
$5000 + 500 =$ <input type="text"/>	$8000 + 1500 =$ <input type="text"/>	$6000 + 2000 =$ <input type="text"/>
$9000 + 9 =$ <input type="text"/>	$9000 + 100 =$ <input type="text"/>	$9000 + 200 =$ <input type="text"/>
$9000 + 309 =$ <input type="text"/>	$9000 + 990 =$ <input type="text"/>	$9000 + 350 =$ <input type="text"/>
$9000 +$ <input type="text"/> $= 9090$	$9000 +$ <input type="text"/> $= 9990$	$9000 +$ <input type="text"/> $= 9999$


# Fadhbanna le Réiteach

1 Dhíol díoltóir carranna athláimhe 5 charr ar €950, €2,653, €2,997, €1,025 agus €2,050.



Cén méid airgid a fuair sé orthu ar fad?

2 Thaistil bus 9999 km i dtrí (3) mhí. Thaistil an bus 3574 km an chéad mhí agus 2901 km an dara mí.



Cé mhéad km a thaistil an bus an tríú mí?

3 Dhíol oifig an phoist

2050



2949

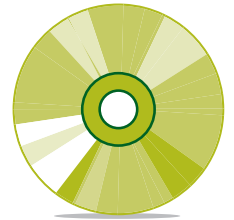


5000




Cé mhéad stampa ar fad a díoladh?

4 €8 a chosnaíonn dlúthdhiosca. 80 cent sa tseachtain a bhíonn á choigilt ag Seosamh.



Cé mhéad seachtain a mbeidh sé ag coigilt sula mbeidh sé in ann an CD a cheannach?

5 €4.70 atá ar phaca cártaí. €6.10 atá ar stáplóir.



Cad é an costas iomlán?

6 Bhí Seán ag fanacht 20 nóiméad ar an mbus. Tháinig an bus ag 5 nóiméad tar éis a 3.



Cén t-am a shroich Seán stad an bhus?

7 Cheannaigh Daidí ceithre channa péinte ar €24.99 an canna. Cén tsóinseáil a fuair sé as €100?



8 45 kg an meáchan atá i mála guail. Cén meáchan atá i gceithre mhála guail?



**1**

$7 \times 2 =$	<input type="text"/>	$0 \times 3 =$	<input type="text"/>	$7 \times 4 =$	<input type="text"/>	$4 \times 5 =$	<input type="text"/>
$2 \times 2 =$	<input type="text"/>	$2 \times 3 =$	<input type="text"/>	$9 \times 4 =$	<input type="text"/>	$7 \times 5 =$	<input type="text"/>
$3 \times 2 =$	<input type="text"/>	$3 \times 3 =$	<input type="text"/>	$3 \times 4 =$	<input type="text"/>	$3 \times 5 =$	<input type="text"/>
$0 \times 2 =$	<input type="text"/>	$4 \times 3 =$	<input type="text"/>	$4 \times 4 =$	<input type="text"/>	$8 \times 5 =$	<input type="text"/>
$5 \times 2 =$	<input type="text"/>	$5 \times 3 =$	<input type="text"/>	$0 \times 4 =$	<input type="text"/>	$9 \times 5 =$	<input type="text"/>
$9 \times 2 =$	<input type="text"/>	$9 \times 3 =$	<input type="text"/>	$5 \times 4 =$	<input type="text"/>	$2 \times 5 =$	<input type="text"/>
$10 \times 2 =$	<input type="text"/>	$10 \times 3 =$	<input type="text"/>	$2 \times 4 =$	<input type="text"/>	$10 \times 5 =$	<input type="text"/>
$8 \times 2 =$	<input type="text"/>	$8 \times 3 =$	<input type="text"/>	$10 \times 4 =$	<input type="text"/>	$1 \times 5 =$	<input type="text"/>
$6 \times 2 =$	<input type="text"/>	$6 \times 3 =$	<input type="text"/>	$8 \times 4 =$	<input type="text"/>	$6 \times 5 =$	<input type="text"/>
$1 \times 2 =$	<input type="text"/>	$1 \times 3 =$	<input type="text"/>	$6 \times 4 =$	<input type="text"/>	$5 \times 5 =$	<input type="text"/>

**2**

$10 \times 6 =$	<input type="text"/>	$8 \times 7 =$	<input type="text"/>	$5 \times 8 =$	<input type="text"/>	$4 \times 9 =$	<input type="text"/>	$7 \times 10 =$	<input type="text"/>
$8 \times 6 =$	<input type="text"/>	$1 \times 7 =$	<input type="text"/>	$9 \times 8 =$	<input type="text"/>	$2 \times 9 =$	<input type="text"/>	$1 \times 10 =$	<input type="text"/>
$2 \times 6 =$	<input type="text"/>	$2 \times 7 =$	<input type="text"/>	$10 \times 8 =$	<input type="text"/>	$3 \times 9 =$	<input type="text"/>	$3 \times 10 =$	<input type="text"/>
$3 \times 6 =$	<input type="text"/>	$6 \times 7 =$	<input type="text"/>	$6 \times 8 =$	<input type="text"/>	$10 \times 9 =$	<input type="text"/>	$8 \times 10 =$	<input type="text"/>
$4 \times 6 =$	<input type="text"/>	$4 \times 7 =$	<input type="text"/>	$4 \times 8 =$	<input type="text"/>	$5 \times 9 =$	<input type="text"/>	$6 \times 10 =$	<input type="text"/>
$1 \times 6 =$	<input type="text"/>	$7 \times 7 =$	<input type="text"/>	$7 \times 8 =$	<input type="text"/>	$6 \times 9 =$	<input type="text"/>	$9 \times 10 =$	<input type="text"/>
$9 \times 6 =$	<input type="text"/>	$9 \times 7 =$	<input type="text"/>	$1 \times 8 =$	<input type="text"/>	$1 \times 9 =$	<input type="text"/>	$4 \times 10 =$	<input type="text"/>
$5 \times 6 =$	<input type="text"/>	$5 \times 7 =$	<input type="text"/>	$8 \times 8 =$	<input type="text"/>	$9 \times 9 =$	<input type="text"/>	$5 \times 10 =$	<input type="text"/>
$7 \times 6 =$	<input type="text"/>	$3 \times 7 =$	<input type="text"/>	$2 \times 8 =$	<input type="text"/>	$7 \times 9 =$	<input type="text"/>	$10 \times 10 =$	<input type="text"/>
$6 \times 6 =$	<input type="text"/>	$10 \times 7 =$	<input type="text"/>	$3 \times 8 =$	<input type="text"/>	$8 \times 9 =$	<input type="text"/>	$2 \times 10 =$	<input type="text"/>

**3**

$\begin{array}{r} 367 \\ \times 4 \\ \hline \end{array}$	$\begin{array}{r} 549 \\ \times 6 \\ \hline \end{array}$	$\begin{array}{r} 693 \\ \times 7 \\ \hline \end{array}$	$\begin{array}{r} 578 \\ \times 9 \\ \hline \end{array}$	$\begin{array}{r} 858 \\ \times 5 \\ \hline \end{array}$	$\begin{array}{r} 921 \\ \times 7 \\ \hline \end{array}$
--	--	--	--	--	--

**4**

$\begin{array}{r} 69 \\ \times 23 \\ \hline \end{array}$	$\begin{array}{r} 97 \\ \times 42 \\ \hline \end{array}$	$\begin{array}{r} 84 \\ \times 35 \\ \hline \end{array}$	$\begin{array}{r} 25 \\ \times 10 \\ \hline \end{array}$	$\begin{array}{r} 37 \\ \times 24 \\ \hline \end{array}$	$\begin{array}{r} 58 \\ \times 43 \\ \hline \end{array}$
--	--	--	--	--	--

**5**

$\begin{array}{r} 26 \\ \times 23 \\ \hline \end{array}$	$\begin{array}{r} 34 \\ \times 32 \\ \hline \end{array}$	$\begin{array}{r} 69 \\ \times 45 \\ \hline \end{array}$	$\begin{array}{r} 56 \\ \times 54 \\ \hline \end{array}$	$\begin{array}{r} 68 \\ \times 21 \\ \hline \end{array}$	$\begin{array}{r} 45 \\ \times 22 \\ \hline \end{array}$
--	--	--	--	--	--

**6**


$\begin{array}{r} 125 \\ \times 8 \\ \hline \end{array}$	$\begin{array}{r} 346 \\ \times 8 \\ \hline \end{array}$	$\begin{array}{r} 406 \\ \times 9 \\ \hline \end{array}$	$\begin{array}{r} 209 \\ \times 8 \\ \hline \end{array}$	$\begin{array}{r} 207 \\ \times 7 \\ \hline \end{array}$	$\begin{array}{r} 807 \\ \times 6 \\ \hline \end{array}$
--	--	--	--	--	--

**7**

$\begin{array}{r} 64 \\ \times 25 \\ \hline \end{array}$	$\begin{array}{r} 39 \\ \times 42 \\ \hline \end{array}$	$\begin{array}{r} 54 \\ \times 36 \\ \hline \end{array}$	$\begin{array}{r} 68 \\ \times 15 \\ \hline \end{array}$	$\begin{array}{r} 73 \\ \times 19 \\ \hline \end{array}$	$\begin{array}{r} 84 \\ \times 26 \\ \hline \end{array}$
--	--	--	--	--	--


# Dealú Leantach

1




Cé mhéad uair is féidir 2 a dhealú óna 16?

2




Cé mhéad uair is féidir 3 a dhealú óna 21?

3




Cé mhéad uair is féidir 4 a dhealú óna 24?

4




Cé mhéad uair is féidir 5 a dhealú óna 30?

5




Cé mhéad uair is féidir 6 a dhealú óna 24?

6



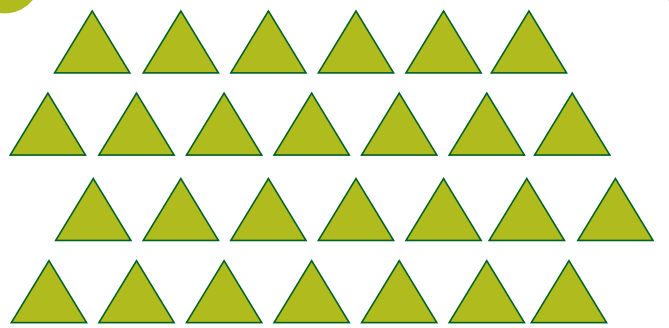
Cé mhéad uair is féidir 7 a dhealú óna 28?

7




Cé mhéad uair is féidir  
8 a dhealú óna 24?

8




Cé mhéad uair is féidir  
9 a dhealú óna 27?

9




Cé mhéad uair is féidir 6  
a dhealú óna 30?

10




Cé mhéad uair is féidir 10  
a dhealú óna 30?

11



Cé mhéad uair is féidir 8  
a dhealú óna 56?

12



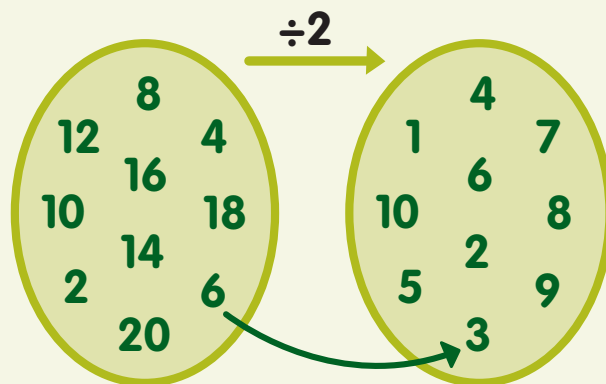
Cé mhéad uair is féidir 7  
a dhealú óna 63?

# Roinnt

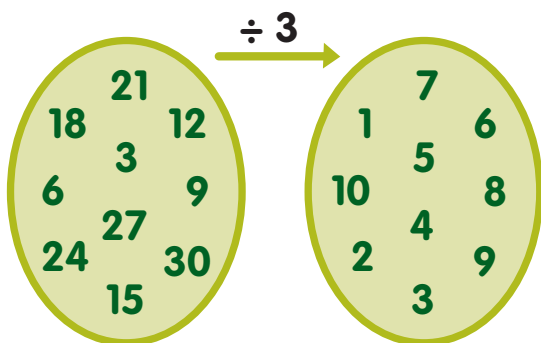
Mapáil na huimhreacha cearta sna bolgóidí. Tá sampla déanta i gceist 1.

1	2	3	4	5	6	7	8	9	10
11	12	13	14	15	16	17	18	19	20
21	22	23	24	25	26	27	28	29	30
31	32	33	34	35	36	37	38	39	40
41	42	43	44	45	46	47	48	49	50
51	52	53	54	55	56	57	58	59	60
61	62	63	64	65	66	67	68	69	70
71	72	73	74	75	76	77	78	79	80
81	81	83	84	85	86	87	88	89	90
91	92	93	94	95	96	97	98	99	100

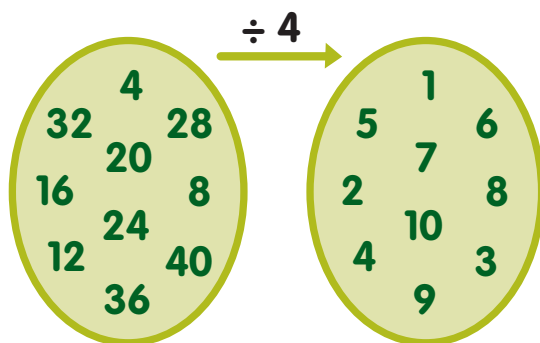
1



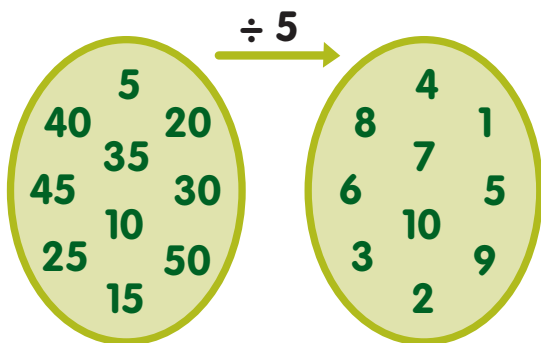
2



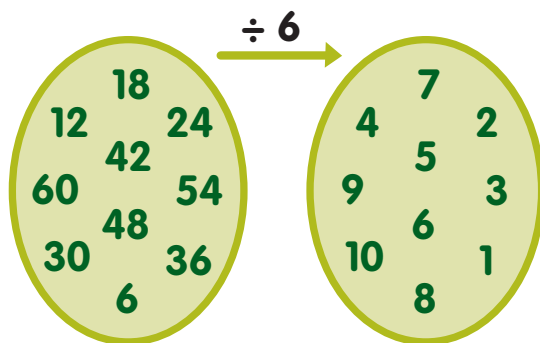
3



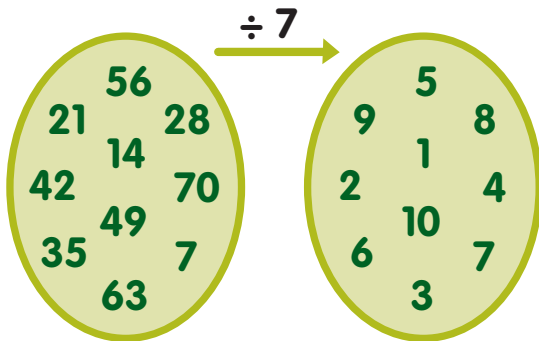
4



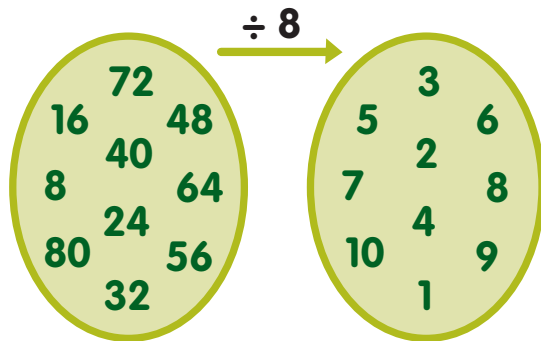
5



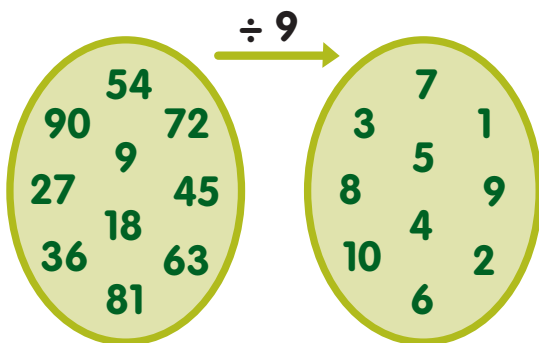
6



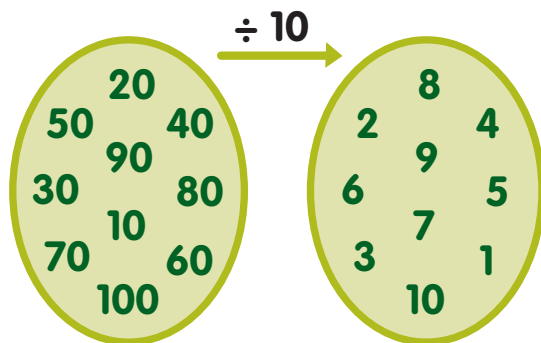
7



8



9



An t-iolrú a inbhéartú, sin an roinnt.

Sampla:

$$9 \times 3 = 27$$

$$27 \div 9 = 3$$


$$27 \div 3 = 9$$

Críochnaigh:

$$7 \times 8 = 56$$



$$8 \times 9 = 72$$



# Roinnt agus Garmheastchán



Déan garmheastachán ar dtús.

Tomhas an-mhaith is ea garmheastachán.

Scríobh 'f' ma tá fuilleach ann. Seiceáil do chuid freagraí leis an áireamhán.

1  $3 \overline{)363}$        $2 \overline{)284}$        $2 \overline{)100}$        $4 \overline{)848}$        $3 \overline{)996}$

2  $5 \overline{)800}$        $6 \overline{)846}$        $7 \overline{)568}$        $7 \overline{)847}$        $3 \overline{)364}$

3  $2 \overline{)357}$        $5 \overline{)381}$        $6 \overline{)520}$        $4 \overline{)612}$        $3 \overline{)353}$

4  $7 \overline{)641}$        $5 \overline{)420}$        $3 \overline{)542}$        $2 \overline{)510}$        $6 \overline{)450}$

5  $4 \overline{)932}$        $3 \overline{)487}$        $10 \overline{)120}$        $6 \overline{)396}$        $7 \overline{)575}$








6  $10 \overline{)110}$        $7 \overline{)416}$        $5 \overline{)535}$        $10 \overline{)150}$        $4 \overline{)617}$

7  $7 \overline{)461}$        $4 \overline{)613}$        $2 \overline{)399}$        $6 \overline{)590}$        $7 \overline{)210}$

8  $9 \overline{)625}$        $5 \overline{)749}$        $7 \overline{)833}$        $9 \overline{)720}$        $4 \overline{)280}$


# Cruthanna Déthoiseacha (2-T)

1

Cruth	Ainm	Líon na Sleasa	Líon na nUillinneacha
			
			
			
			
			
			
			

2


Tarraing patrúin le heicseagáin.




3


An dteisilíonn na cruthanna thíos?


Cuir ✓ nó ✗ sna boscaí.





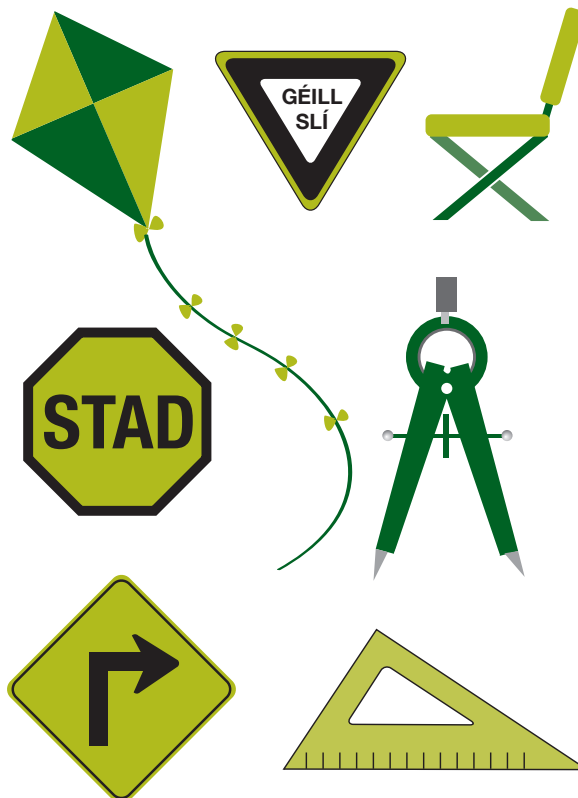







4

Uillinneacha sa saol mórtimpeall.  
Labhair faoi na huillinneacha seo.



# Measúnú 1

1 Cuir ciorcal timpeall ar an uimhir cheart.

$18 \div 6 = 2, 3, 4$

$60 \div 6 = 10, 8, 9$

$36 \div 6 = 6, 4, 3$

$30 \div 6 = 4, 6, 5$

$6 \div 6 = 0, 1, 12$

$48 \div 6 = 8, 7, 3$

$42 \div 6 = 7, 6, 8$

$12 \div 6 = 1, 3, 2$

$54 \div 6 = 7, 9, 8$

$24 \div 8 = 2, 3, 4$

$32 \div 8 = 4, 3, 2$

$48 \div 8 = 6, 8, 2$

$40 \div 8 = 5, 10, 2$

$64 \div 8 = 12, 8, 4$

$56 \div 8 = 8, 7, 9$

$16 \div 8 = 8, 1, 2$

$8 \div 8 = 0, 3, 1$

$72 \div 8 = 8, 9, 7$

2  $\frac{6}{8}$  de 32 =   $\frac{2}{5}$  de 25 =

3 Déan an uimhir is mó is féidir leat as na digití seo: 8, 9, 2, 7

4


M	C	D	A
2	3	2	1


M	C	D	A
1	1	1	4


M	C	D	A
3	3	1	1


M	C	D	A
1	2	3	1

5 Ainmnigh na cruthanna seo.











6  $200 + 70 + 500 + 10 =$    
 $1500 + 250 - 500 =$

$500 + 1000 - 70 =$    
 $60 + 600 + 6000 =$

7  $(33 + 10) + (47 + 10) =$    
 $(41 + 10) + (26 + 10) =$

$(17 + 100) + (42 + 100) =$    
 $(31 + 10) + (62 + 100) =$

8 8 mbosca coirníní atá ag Sorcha agus 120 coirnín i ngach bosca. Cé mhéad coirnín atá aici ar fad?

9 250 páiste, 100 fear, agus 125 bean a bhí ag an sorcas. Cé mhéad duine ar fad a bhí ann?

10 270 caora a bhí ag feirmeoir. Dhíol sé 49 díobh. Cé mhéad caora a bhí fágtha aige?

11 Rith Máire 75 méadar ar an lá spóirt. Rith Áine a cúig (5) oiread sin. Cén fad slí a rith sí?

12 26 bonn airgid atá ag Seán. Tá a sé (6) oiread ag Seosamh. Cé mhéad bonn airgid ar fad atá acu?

13 
$$\begin{array}{r} 817 \\ - 698 \\ \hline \end{array}$$

$$\begin{array}{r} 902 \\ - 386 \\ \hline \end{array}$$

14 
$$\begin{array}{r} 26 \\ \times 24 \\ \hline \end{array}$$

$$\begin{array}{r} 25 \\ \times 36 \\ \hline \end{array}$$

$$\begin{array}{r} 29 \\ \times 34 \\ \hline \end{array}$$

$$\begin{array}{r} 24 \\ \times 47 \\ \hline \end{array}$$

$$\begin{array}{r} 28 \\ \times 25 \\ \hline \end{array}$$

15  $9 \overline{) 81}$

$4 \overline{) 16}$

$8 \overline{) 64}$

$5 \overline{) 25}$

$6 \overline{) 36}$

# Fadhbanna Scríofa

1 Roinneadh €9.06 go cothrom ar sheisear (6) páistí. Cén méid airgid a fuair gach páiste?

2 48 cárta a bhí ag Síle. Roinn sí iad ina 6 ghrúpa chothroma. Cé mhéad cárta a bhí i ngach grúpa?

3 Más 8 marcóir atá i bpaicéad, cé mhéad marcóir atá i ndeich (10) bpaicéad?

4 €10 i mboinn 20c atá ag Sorcha. Cé mhéad bonn ar fad atá aici?

5 Má tá 6 chiste i mbosca, cé mhéad bosca a theastaíonn le haghaidh 42 ciste?

6 Cheannaigh Sinéad 2 lítear sú oráiste. Cé mhéad gloine 200 ml is féidir léi a líonadh as?

7 Thug Daidí 7 milseán an duine do naonúr (9) páistí. 8 milseán a bhí fágtha aige. Cé mhéad milseán a bhí ag Daidí ar dtús?

8 Cheannaigh Diarmaid Ó Floinn 201 bosca péinte. Cé mhéad lítear péinte a cheannaigh sé má bhí ceithre (4) channa péinte aon-lítear (1 lítear) i ngach bosca?

9 9 bpéitseog atá i ngach ciseán. Cé mhéad ciseán a d'fhéadfaí a líonadh as bosca ina bhfuil 108 péitseog?

10 Cheannaigh Mamaí 1 kg milseán. Roinn sí iad go cothrom ar Shíobhán agus a triúr (3) cairde. Cé mhéad gram milseán a fuair gach páiste?

11 40 ubh Chásca a bhí curtha i bhfolach don tóraíocht. D'aimsigh seisear (6) páistí 3 ubh an duine. Cé mhéad ubh a bhí fós le haimsiú?

12 Ocht scuab péinte a bhí ag an múinteoir. Ansin cheannaigh sé 6 phacáiste a raibh trí scuab i ngach pacáiste díobh. Cé mhéad scuab ar fad a bhí aige ansin?

13 Cé mhéad péire bróg atá in 420 bróg?

14 Faigh na péirí fachtóirí atá ag 12.

15 Céard é leath ( $\frac{1}{2}$ ) 1430?

16 Faigh toradh 9 agus 8.

# Codáin Choibhéisacha

1  $\frac{1}{2}$  de 50 =   $\frac{1}{4}$  de 100 =   $\frac{1}{5}$  de 100 =   $\frac{1}{6}$  de 72 =

$\frac{1}{9}$  de 90 =   $\frac{1}{3}$  de 36 =   $\frac{1}{10}$  de 100 =   $\frac{1}{2}$  de 100 =

$\frac{1}{2}$  de 200 =   $\frac{1}{4}$  de 200 =   $\frac{1}{5}$  de 200 =   $\frac{1}{6}$  de 720 =

$\frac{1}{9}$  de 180 =   $\frac{1}{3}$  de 360 =   $\frac{1}{10}$  de 10 =   $\frac{1}{2}$  de 300 =

---

2  $\frac{1}{5} = \frac{\square}{10}$   $\frac{3}{4} = \frac{\square}{8}$   $\frac{5}{10} = \frac{\square}{2}$   $\frac{1}{2} = \frac{\square}{12}$   $\frac{1}{3} = \frac{\square}{6}$   $\frac{1}{3} = \frac{\square}{9}$

$\frac{1}{2} = \frac{\square}{6}$   $\frac{1}{2} = \frac{\square}{4}$   $\frac{1}{2} = \frac{\square}{10}$   $\frac{3}{12} = \frac{\square}{4}$   $\frac{3}{12} = \frac{\square}{8}$   $\frac{3}{9} = \frac{\square}{6}$

$\frac{2}{3} = \frac{\square}{6}$   $\frac{2}{5} = \frac{\square}{10}$   $\frac{3}{6} = \frac{\square}{2}$   $\frac{6}{9} = \frac{\square}{3}$   $\frac{6}{12} = \frac{\square}{6}$   $\frac{6}{8} = \frac{\square}{4}$

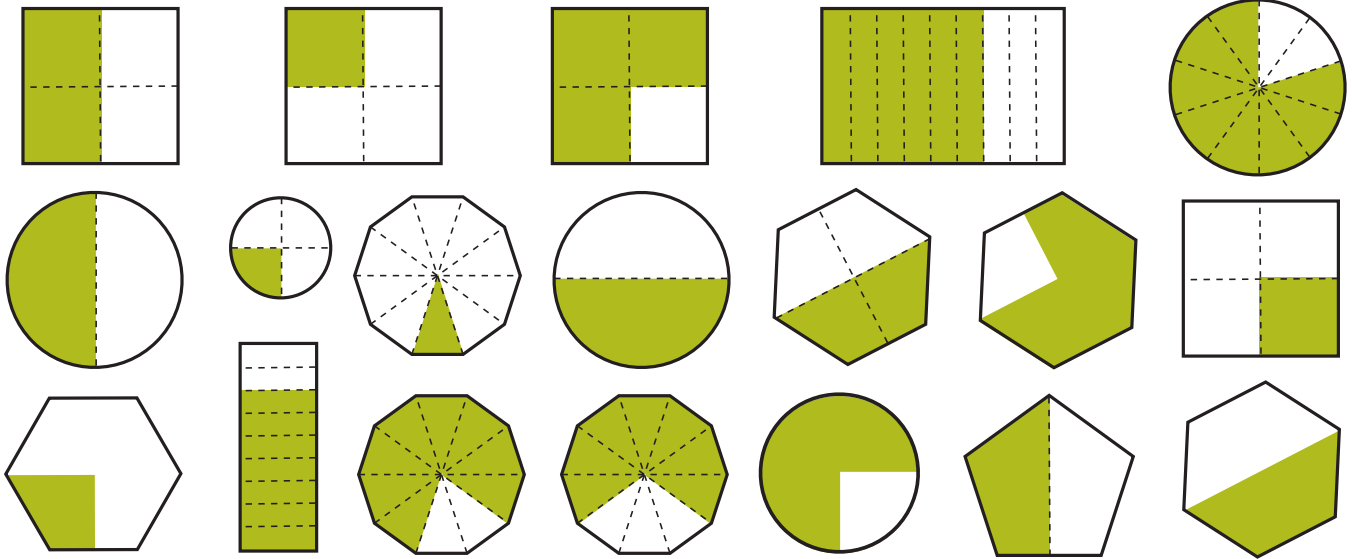
---

3 Tá  $\frac{1}{2}$  d'uimhir = 50. Tá  $\frac{1}{2}$  d'uimhir = 75. Tá  $\frac{1}{2}$  d'uimhir = 40.  
Faigh an uimhir.  Faigh an uimhir.  Faigh an uimhir.

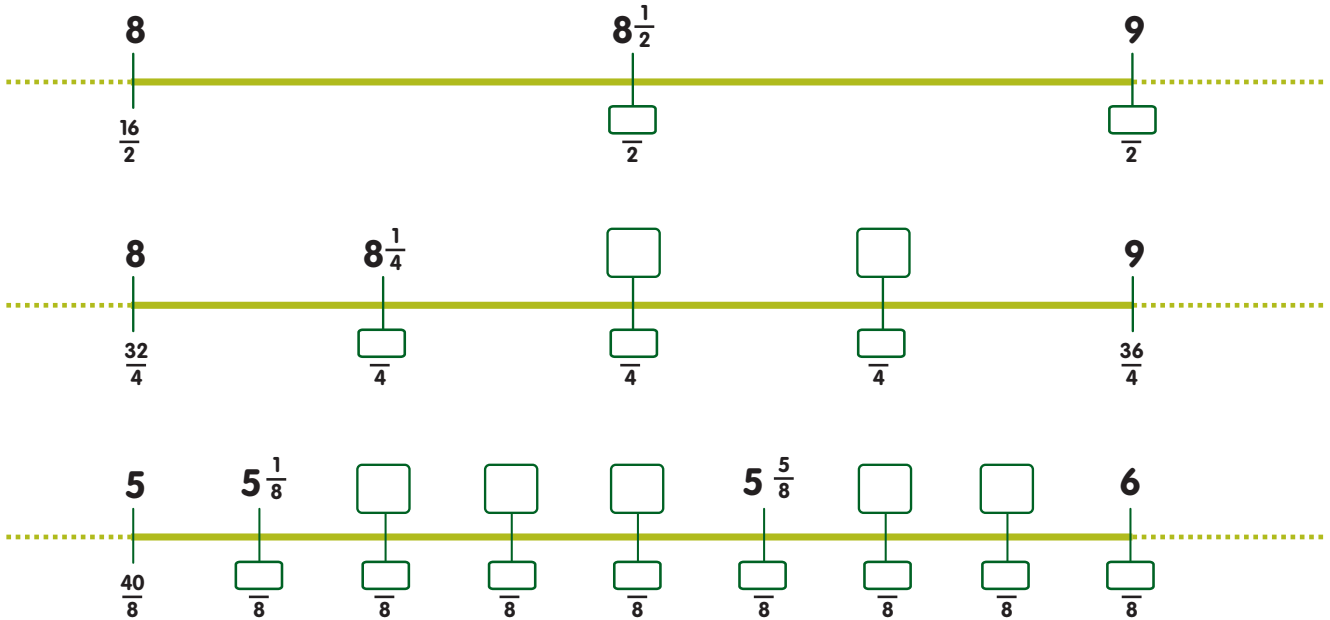
Tá  $\frac{1}{4}$  d'uimhir = 25. Tá  $\frac{1}{3}$  d'uimhir = 120. Tá  $\frac{1}{10}$  d'uimhir = 100.  
Faigh an uimhir.  Faigh an uimhir.  Faigh an uimhir.

Tá  $\frac{1}{4}$  d'uimhir = 20. Tá  $\frac{1}{3}$  d'uimhir = 42. Tá  $\frac{1}{10}$  d'uimhir = 25.  
Faigh an uimhir.  Faigh an uimhir.  Faigh an uimhir.


1 Cén codán de gach cruth atá scáthaithe?



2 Líon isteach.




3 Cuir na codáin seo in ord méide. Tosaigh leis an gceann is lú.




# Fadhbanna Scríofa

1 Cuir ciorcal timpeall ar an deichiú cuid ( $\frac{1}{10}$ ) de na beacha.




$$\frac{9}{10} \text{ de } 30 = \boxed{\phantom{00}}$$

2 Cuir ciorcal timpeall ar an gcúigiú cuid ( $\frac{1}{5}$ ) de na héin.




$$\frac{4}{5} \text{ de } 20 = \boxed{\phantom{00}}$$

3 Cuir ciorcal timpeall ar an ceathrú cuid ( $\frac{1}{4}$ ) de na dioscaí.




$$\frac{3}{4} \text{ de } 24 = \boxed{\phantom{00}}$$

4 Cuir ciorcal timpeall ar an ochtú cuid ( $\frac{1}{8}$ ) de na feithidí.




$$\frac{7}{8} \text{ de } 16 = \boxed{\phantom{00}}$$

5 Cuir ciorcal timpeall ar an tríú cuid ( $\frac{1}{3}$ ) de na féileacáin.



$$\frac{2}{3} \text{ de } 24 = \boxed{\phantom{00}}$$

6 Cuir ciorcal timpeall ar an séú cuid ( $\frac{1}{6}$ ) de na pearóidí.



$$\frac{5}{6} \text{ de } 16 = \boxed{\phantom{00}}$$

7 868 cartún bainne a fhaigheann siopadóir gach seachtain. Faigheann sé an líon céanna cartún gach lá.




Cé mhéad cartún a fhaigheann sé gach lá?

8 Roinn 283 cnó capaill go cothrom ar thriúr buachaillí.



Cé mhéad a fhaigheann gach buachaill?   
An mbeidh fuilleach ann?

9 Tá 846 ubh agam. Cé mhéad bosca a bheidh de dhíth má tá 6 ubh le cur i ngach bosca?



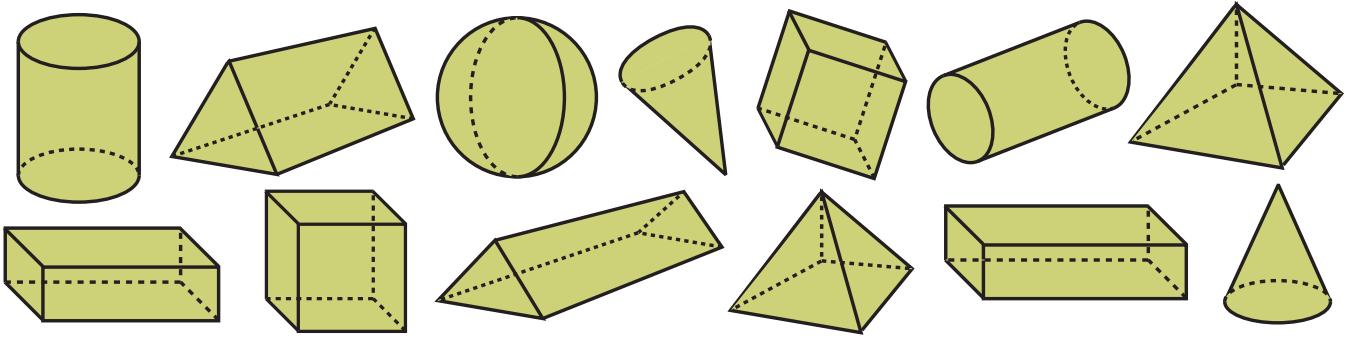

10 975 borróg a fhaigheann scoil sa tseachtain. Cé mhéad borróg é sin in aghaidh an lae?





# Cruthanna Tríthoiseacha (3-T)

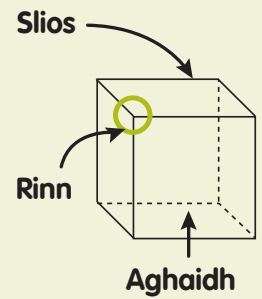
1 Ainmnigh na cruthanna agus líon isteach an tábla seo.



	Líon na nAghaidheanna	Líon na Sleasa	Líon na Reanna
Ciúb			
Ciúbóideach			
Príosma Triantánach			

**Nótáil:**

**Rinn:** Pointe ag a dtagann trí slios le chéile.

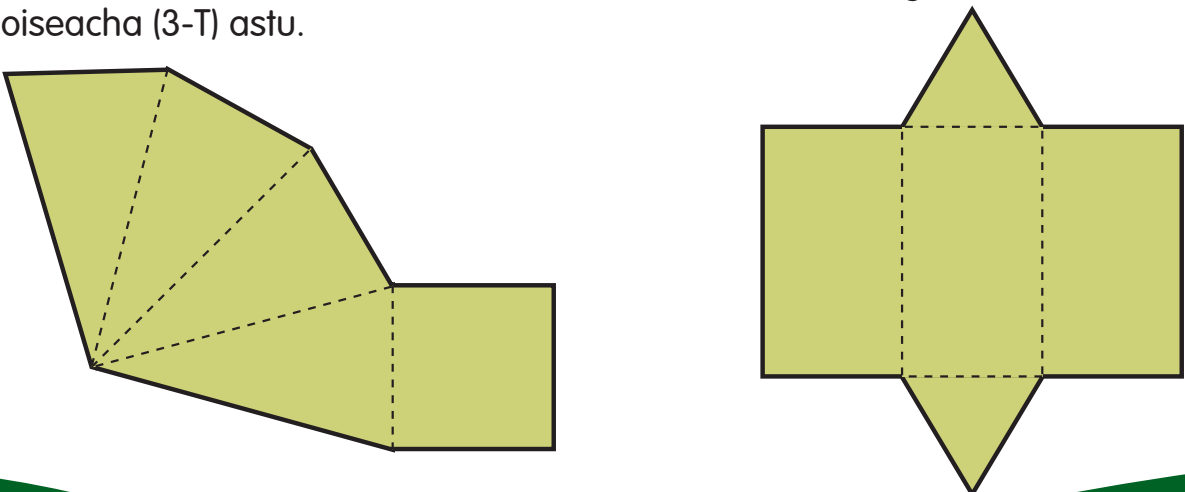


2 Ainmnigh na cruthanna déthoiseacha (2-T) atá le sonrú sna cruthanna tríthoiseacha (3-T) seo. Abair rud éigin fúthu.



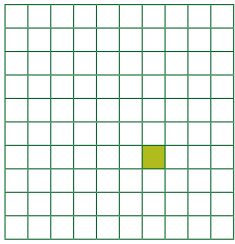
Cuir ciorcal timpeall ar chruth ar bith a bhfuil cuid de chón le feiceáil ann.

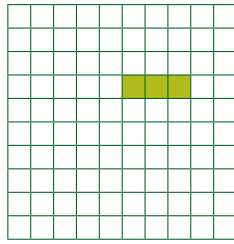
3 Cóipeáil na líontáin ar chairtchlár éadrom. Gearr amach iad agus déan cruthanna tríthoiseacha (3-T) astu.

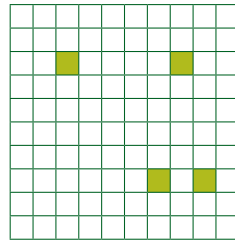


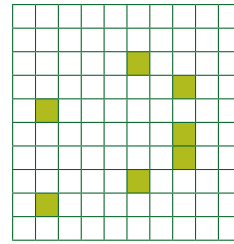
# Codáin Dheachúlacha

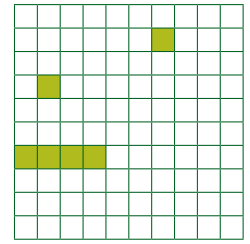
1 Cén codán deachúlach den chearnóg atá scáthaithe? Scríobh ina codán deachúlach an chuid sin de gach cearnóg atá scáthaithe.

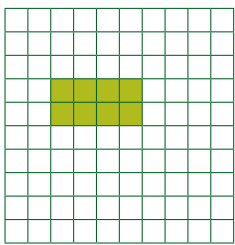


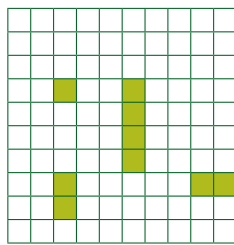


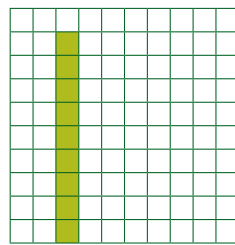





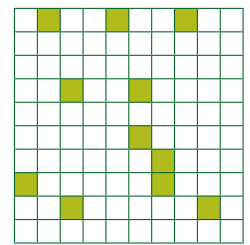




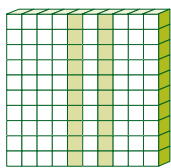
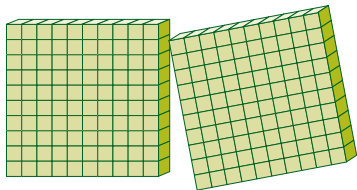


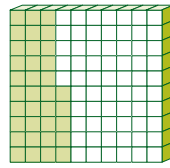
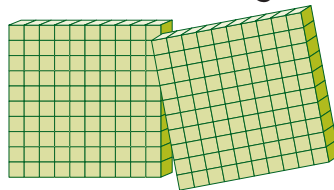


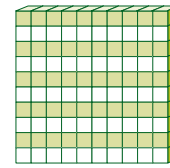
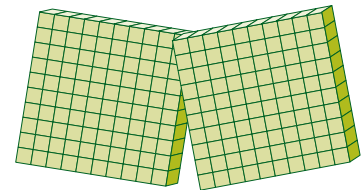





2 Scríobh na huimhreacha atá á léiriú thíos ina gcodáin dheachúlacha?








3 Suimigh

$$2.5 \quad \text{€} 2.50$$

$$8.9 \quad \text{€} 8.90$$

$$+ 6.45 \quad + \text{€} 6.45$$



4 Dealraith 9.97 ó 28.55

Dealraith €9.97 ó €28.55

5 Meánn Séamas 136 kg, agus meánn a uncail 250 kg. Cén difríocht meáchain atá eatarthu?

6 €10.80 atá ag Seosamh. Cheannaigh sé cluiche ríomhaire ar €6.25.

Cén méid airgid a bhí fágtha aige?

7 Úsáideann feirmeoir dhá (2) píosa de shreang mhiotail chun fál a dheisiú. Tá píosa amháin díobh 7.5 m ar fad agus tá an píosa eile 4.9 m ar fad.

Cén fad de shreang mhiotail a d'úsáid an feirmeoir?

# Meáchan



$1 \text{ kg} = 1000 \text{ g}$

$\frac{1}{2} \text{ kg} = 500 \text{ g}$

$\frac{1}{4} \text{ kg} = 250 \text{ g}$

$\frac{3}{4} \text{ kg} = 750 \text{ g}$

$\frac{1}{5} \text{ kg} = 200 \text{ g}$

$0.25 \text{ kg} = \frac{1}{4} \text{ kg}$

$0.5 \text{ kg} = \frac{1}{2} \text{ kg}$

$0.75 \text{ kg} = \frac{3}{4} \text{ kg}$

$0.2 \text{ kg} = \frac{1}{5} \text{ kg}$

$0.1 \text{ kg} = 100 \text{ g}$

$0.25 \text{ kg} = 250 \text{ g}$

$0.5 \text{ kg} = 500 \text{ g}$

$0.75 \text{ kg} = 750 \text{ g}$


$0.2 \text{ kg} = 200 \text{ g}$

1 Cé mhéad gram atá in

3 kg  2 kg   $\frac{1}{2}$  kg   $\frac{1}{4}$  kg   $\frac{3}{4}$  kg   $\frac{1}{5}$  kg

$\frac{3}{5}$  kg   $3\frac{3}{4}$  kg   $1\frac{1}{5}$  kg   $2\frac{3}{5}$  kg   $\frac{4}{5}$  kg   $3\frac{1}{2}$  kg

2

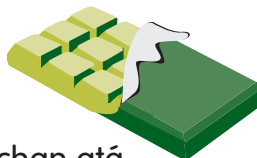


€3 an kg an praghas.

Céard a chosnaíonn 2.5 kg?

3

250 g



Cén meáchan atá i gceithre (4) bharra seacláide?

4

750 g



€3 an kg an praghas. Céard a chosnaíonn 750 g bananaí?

5 Cé mhéad gram in

2.25 kg  3.5 kg  4.5 kg  3.2 kg  5.75 kg

6.25 kg  7.75 kg  4.1 kg  3.6 kg  6.4 kg

6 Suimigh agus dealaigh

$$\begin{array}{r} \text{kg g} \\ 3 \ 380 \\ + 4 \ 270 \\ \hline \end{array}$$

$$\begin{array}{r} \text{kg g} \\ 1 \ 690 \\ + 6 \ 780 \\ \hline \end{array}$$

$$\begin{array}{r} \text{kg g} \\ 2 \ 370 \\ + 3 \ 350 \\ \hline \end{array}$$

$$\begin{array}{r} \text{kg g} \\ 7 \ 630 \\ - 4 \ 280 \\ \hline \end{array}$$

$$\begin{array}{r} \text{kg g} \\ 8 \ 320 \\ - 2 \ 140 \\ \hline \end{array}$$

7 Roinn agus lolraigh

$$\begin{array}{r} \text{kg g} \\ 2 \ 402 \\ \times \quad 3 \\ \hline \end{array}$$

$$\begin{array}{r} \text{kg g} \\ 4 \ 146 \\ \times \quad 6 \\ \hline \end{array}$$

$$\begin{array}{r} \text{kg g} \\ 2 \ 214 \\ \times \quad 7 \\ \hline \end{array}$$

$$\begin{array}{r} \text{kg g} \\ 3 \ 416 \\ \times \quad 4 \\ \hline \end{array}$$

$$\begin{array}{r} \text{kg g} \\ 2 \ 517 \\ \times \quad 4 \\ \hline \end{array}$$

$$8 \overline{)11 \ 760}$$

$$9 \overline{)14 \ 760}$$

$$7 \overline{)9 \ 450}$$

$$3 \overline{)8 \ 550}$$

# Measúnú 2

1 Cuir tic ✓ leis na cruthanna a theisilíonn.



2

Cruth	Líon na Sleasa	Líon na nUillinneacha
Peinteagán		
Ochtagán		

3  $\frac{1}{4}$  de 504 =        $\frac{1}{3}$  de 741 =        $\frac{1}{5}$  de 945 =   
 $\frac{1}{2}$  de 758 =        $\frac{1}{6}$  de 810 =        $\frac{1}{9}$  de 243 =

4

Scáthaigh  $\frac{1}{2}$       Scáthaigh  $\frac{1}{4}$       Scáthaigh  $\frac{3}{4}$       Scáthaigh  $\frac{1}{5}$       Scáthaigh  $\frac{2}{5}$

5 Scríobh na huimhreacha cearta sna boscaí.

7 900 an deichiú ( $\frac{1}{10}$ ) cuid d'uimhir. Faigh an uimhir.

8 Dealraith 18.95 ó 21.52.

9  $4.1 + 3.62 + 5.8 =$

10      kg g  
 6 450  
 + 2 590

11      kg g  
 68 250  
 - 41 750

12      kg g  
 3 25 650

13      kg  
 22  
 x 25  


---

14  $\frac{1}{2}$  kg =  g       $\frac{1}{5}$  kg =  g      0.2 kg =  g

# Toilleadh



$1 \text{ l} = 1000 \text{ ml}$

$\frac{1}{2} \text{ l} = 500 \text{ ml}$

$\frac{1}{4} \text{ l} = 250 \text{ ml}$

$\frac{3}{4} \text{ l} = 750 \text{ ml}$

$\frac{1}{5} \text{ l} = 200 \text{ ml}$

$0.25 \text{ kg} = \frac{1}{4} \text{ l}$

$0.5 \text{ kg} = \frac{1}{2} \text{ l}$

$0.75 \text{ kg} = \frac{3}{4} \text{ l}$

$0.2 \text{ kg} = \frac{1}{5} \text{ l}$

$0.3 \text{ kg} = \frac{1}{3} \text{ l}$

$0.1 \text{ l} = 100 \text{ ml}$

$0.25 \text{ l} = 250 \text{ ml}$

$0.5 \text{ l} = 500 \text{ ml}$

$0.75 \text{ l} = 750 \text{ ml}$

$0.2 \text{ l} = 200 \text{ ml}$

1

$\frac{1}{2} \text{ l} =$ <input type="text"/> ml	$\frac{3}{5} \text{ l} =$ <input type="text"/> ml
$\frac{1}{4} \text{ l} =$ <input type="text"/> ml	$\frac{2}{10} \text{ l} =$ <input type="text"/> ml
$\frac{3}{4} \text{ l} =$ <input type="text"/> ml	$\frac{7}{10} \text{ l} =$ <input type="text"/> ml
$\frac{1}{10} \text{ l} =$ <input type="text"/> ml	$\frac{4}{5} \text{ l} =$ <input type="text"/> ml
$\frac{6}{10} \text{ l} =$ <input type="text"/> ml	$\frac{5}{10} \text{ l} =$ <input type="text"/> ml

2

$2.25 \text{ l} =$ <input type="text"/> ml	$7.75 \text{ l} =$ <input type="text"/> ml
$3.5 \text{ l} =$ <input type="text"/> ml	$4.1 \text{ l} =$ <input type="text"/> ml
$4.5 \text{ l} =$ <input type="text"/> ml	$3.6 \text{ l} =$ <input type="text"/> ml
$3.2 \text{ l} =$ <input type="text"/> ml	$6.4 \text{ l} =$ <input type="text"/> ml
$5.75 \text{ l} =$ <input type="text"/> ml	$5.2 \text{ l} =$ <input type="text"/> ml

3 Ólann Bríd leath a cuid anraith ar 11 a.m. Cén méid atá fágtha aici?

ml



4 Cé mhéad gloine 250 ml is féidir a líonadh as an gcrúiscín?

ml




5 Má ghlacaim 5 ml den chógas gach lá, cé chomh fada is a mhairfidh an buidéal?

lá



6 Úsáideann Mamaí 5 channa uisce leis na bláthanna a uisciú. Cén méid uisce ar fad a úsáideann sí?

ml



7 10 lítear uisce a d'úsáid Daidí chun an carr a ní. D'úsáid sé 10 lítear eile chun an carr a shruthlú. Cé mhéad uair ar líon sé an buicéad?



8 400 l uisce atá i linn na leanaí. Bhí trí cheathrú ( $\frac{3}{4}$ ) den uisce ídithe faoi dheireadh an lae. Cé mhéad lítear a bhí fágtha?




9 Dúirt Mamaí le Tomás deochanna a cheannach don bhearbaiciú. Chaill sé an liosta. Chuimhnigh sé ar a raibh le ceannach, áfach, ach ar bhealach eile. Céard a bhí scríofa ar liosta Mhamaí?

Liosta Thomáis		Liosta Mhamaí	
Sú Anann	2 lítear	Sú Anann	2000 ml
Sú Oráistí	$1\frac{1}{2}$ lítear	Sú Oráistí	
Sú Cuiríní Dubha	1 lítear	Sú Cuiríní Dubha	
Liomanáid	0.5 lítear	Liomanáid	

# Deachúlacha

Déan garmheastachán ar dtús.

Bíodh na pointí deachúlacha díreach faoina chéile agat nuair a bhíonn deachúlacha á suimiú agus á ndealú.



**1**

$31.15$	$52.06$	$33.42$	$15.16$	$24.15$
$+ 52.32$	$+ 61.82$	$+ 41.74$	$+ 22.07$	$+ 32.38$
<input type="text"/>	<input type="text"/>	<input type="text"/>	<input type="text"/>	<input type="text"/>

**2**

$28.22$	$33.48$	$21.58$	$41.07$	$61.06$
$19.85$	$42.94$	$17.23$	$19.45$	$28.76$
$+ 2.15$	$+ 3.60$	$+ 31.99$	$+ 72.98$	$+ 32.38$
<input type="text"/>	<input type="text"/>	<input type="text"/>	<input type="text"/>	<input type="text"/>

**3**

$79.93$	$96.74$	$46.83$	$89.75$	$67.82$
$- 51.72$	$- 60.32$	$- 31.60$	$- 76.71$	$- 31.36$
<input type="text"/>	<input type="text"/>	<input type="text"/>	<input type="text"/>	<input type="text"/>

$49.66$	$38.31$	$77.34$	$55.12$	$95.40$
$- 23.18$	$- 21.49$	$- 52.76$	$- 43.23$	$- 26.75$
<input type="text"/>	<input type="text"/>	<input type="text"/>	<input type="text"/>	<input type="text"/>

**4** Is fiú deachúlacha a phlé i gcomhthéacs airgid. Bí san airdeall ar na náideanna. Dhá áit a bhíonn ann i ndiaidh an phointe dheachúlaigh nuair is airgead atá i gceist.

€	€	€	€	€
$51.42$	$61.51$	$24.35$	$60.20$	$51.16$
$83.23$	$70.20$	$47.12$	$28.15$	$23.52$
$+ 10.14$	$+ 36.45$	$+ 31.35$	$+ 11.36$	$+ 11.42$
<input type="text"/>	<input type="text"/>	<input type="text"/>	<input type="text"/>	<input type="text"/>

€	€	€	€	€
$21.58$	$28.67$	$31.50$	$43.70$	$94.12$
$22.70$	$63.30$	$60.37$	$67.21$	$12.06$
$+ 0.99$	$+ 45.45$	$+ 51.16$	$+ 84.56$	$+ 10.46$
<input type="text"/>	<input type="text"/>	<input type="text"/>	<input type="text"/>	<input type="text"/>

# Fad

$$100 \text{ cm} = 1 \text{ m}$$

1 Tarraing líne dhíreach ó A go B. Cén fad atá sa líne?

 cm

A

B

2



Peinteagán

An fad i slios amháin.

An fad sna cúig (5) shlios.



Heicseagán

An fad i slios amháin.

An fad sna sé (6) shlios.



Ochtagán

An fad i slios amháin.

An fad sna hocht (8) shlios.

3  $1 \text{ m} =$   cm

$\frac{1}{10} \text{ m} =$   cm

$\frac{1}{2} \text{ m} =$   cm

$\frac{1}{5} \text{ m} =$   cm

$\frac{1}{4} \text{ m} =$   cm

$\frac{9}{10} \text{ m} =$   cm

4 Scríobh ina méadair agus ina gceintiméadair

$0.5 \text{ m} =$   m  cm

$3.25 \text{ m} =$   m  cm

$0.75 \text{ m} =$   m  cm

$1.4 \text{ m} =$   m  cm

5 Scríobh ina méadair agus pointe deachúlach in úsáid agat.

$135 \text{ cm} =$   m

$160 \text{ cm} =$   m

$180 \text{ cm} =$   m

$170 \text{ cm} =$   m

$190 \text{ cm} =$   m

$145 \text{ cm} =$   m

$250 \text{ cm} =$   m

$160 \text{ cm} =$   m


$175 \text{ cm} =$   m

6

Tomhais sleasa na dtriantán. Scríobh do chuid freagraí ar na sleasa.



Triantán Scailéanach



Triantán Comhchosach



Triantán Comhshleasach

# Fad Slí



Foghlaim

$$1000 \text{ m} = 1 \text{ km}$$

$$500 \text{ m} = \frac{1}{2} \text{ km} = 0.5 \text{ km}$$

$$250 \text{ m} = \frac{1}{4} \text{ km} = 0.25$$

$$750 \text{ m} = \frac{3}{4} \text{ km} = 0.75 \text{ km}$$

$$200 \text{ m} = \frac{1}{5} \text{ km} = 0.2 \text{ km}$$

1 Scríobh ina méadair.

$$1 \text{ km} = \boxed{\phantom{000}} \text{ m}$$

$$\frac{1}{2} \text{ km} = \boxed{\phantom{000}} \text{ m}$$

$$\frac{3}{4} \text{ km} = \boxed{\phantom{000}} \text{ m}$$

$$\frac{1}{5} \text{ km} = \boxed{\phantom{000}} \text{ m}$$

$$\frac{2}{5} \text{ km} = \boxed{\phantom{000}} \text{ m}$$

$$\frac{1}{10} \text{ km} = \boxed{\phantom{000}} \text{ m}$$

2  $1.4 \text{ km} = \boxed{\phantom{000}} \text{ m}$

$1.5 \text{ km} = \boxed{\phantom{000}} \text{ m}$

$1.6 \text{ km} = \boxed{\phantom{000}} \text{ m}$

$1.25 \text{ km} = \boxed{\phantom{000}} \text{ m}$

$1.2 \text{ km} = \boxed{\phantom{000}} \text{ m}$

$1.75 \text{ km} = \boxed{\phantom{000}} \text{ m}$

3

2 km	500 m	3 km	500 m
4 km	150 m	2 km	750 m
+ 5 km 250 m		+ 1 km 127 m	
km	m	km	m

3 km	500 m	2 km	750 m
4 km	150 m	2 km	750 m
+ 5 km 250 m		+ 1 km 127 m	
km	m	km	m

4

km	m	km	m
	320		450
	x 5		x 5
km	m	km	m

km	m	km	m
	450		450
	x 5		x 5
km	m	km	m

5  $2.75 \text{ km} + 6.29 \text{ km} + 3.76 \text{ km} = \boxed{\phantom{000.00}}$

$9\frac{1}{2} \text{ km} + 3.25 \text{ km} + 6.4 \text{ km} = \boxed{\phantom{000.00}}$

$(4.96 \text{ km} + 3.49 \text{ km}) - 2.78 \text{ km} = \boxed{\phantom{000.00}}$

$6.5 \text{ km} + 3\frac{1}{4} \text{ km} - 8.3 \text{ km} = \boxed{\phantom{000.00}}$

6  $4.36 \text{ km} \times 3 = \boxed{\phantom{000.00}} \text{ km}$

$6.75 \text{ km} \times 6 = \boxed{\phantom{000.00}} \text{ km}$

$2.47 \text{ km} \times 4 = \boxed{\phantom{000.00}} \text{ km}$

7

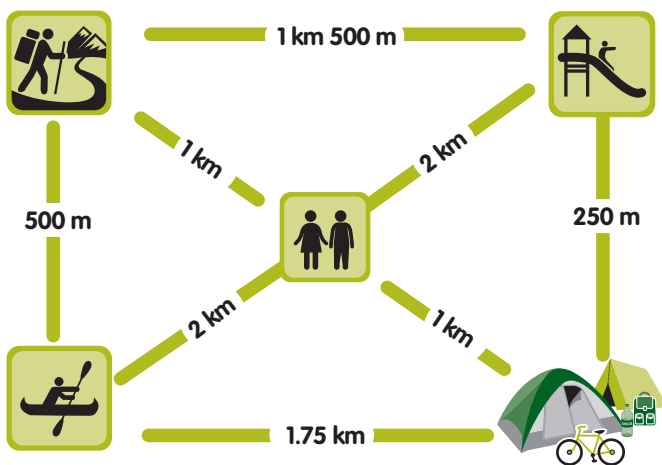
km	m
7	8 330

km	m
9	2 340

km	m
6	4 680

km	m
8	9 360

8 Chuaigh muintir Mhic Chárthaigh ag campáil ar feadh seachtaine.



Rothlaigh an teaghlach ón bpuball go dtí an láthair chanúála agus ar ais, trí mhaidin as a chéile. Ghlac siad an bóthar is giorra.

Cén fad iomlán a rothaigh siad?

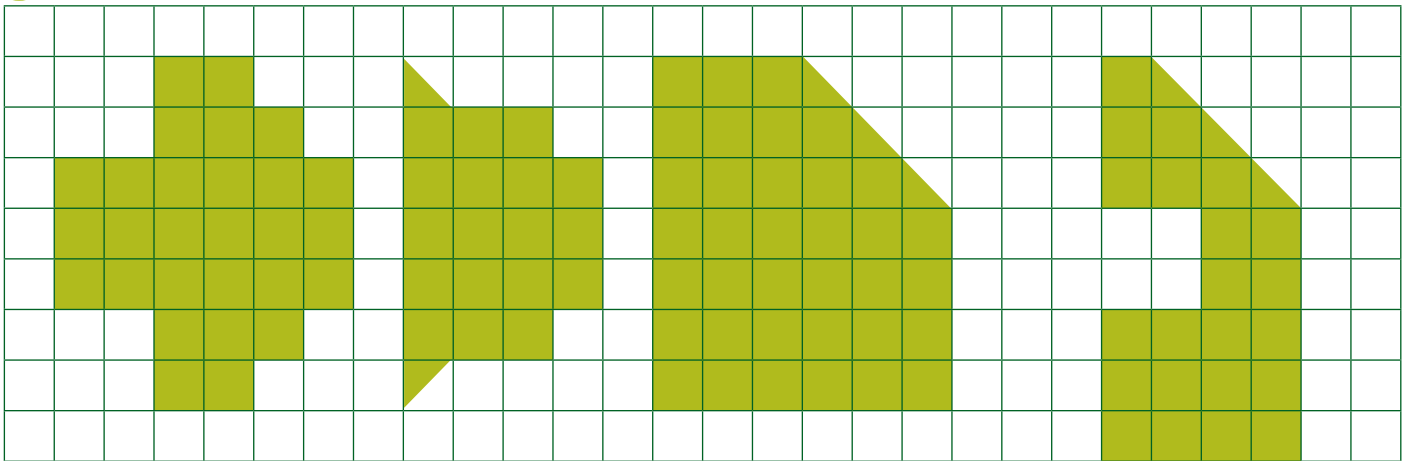
Ar an Domhnach, thiomáin siad fad leis na cnoic agus chuaigh siad ag dreapadóireacht. Chuaigh siad an bealach ba ghiorra gach uair.

Cén fad slí a thiomáin siad?

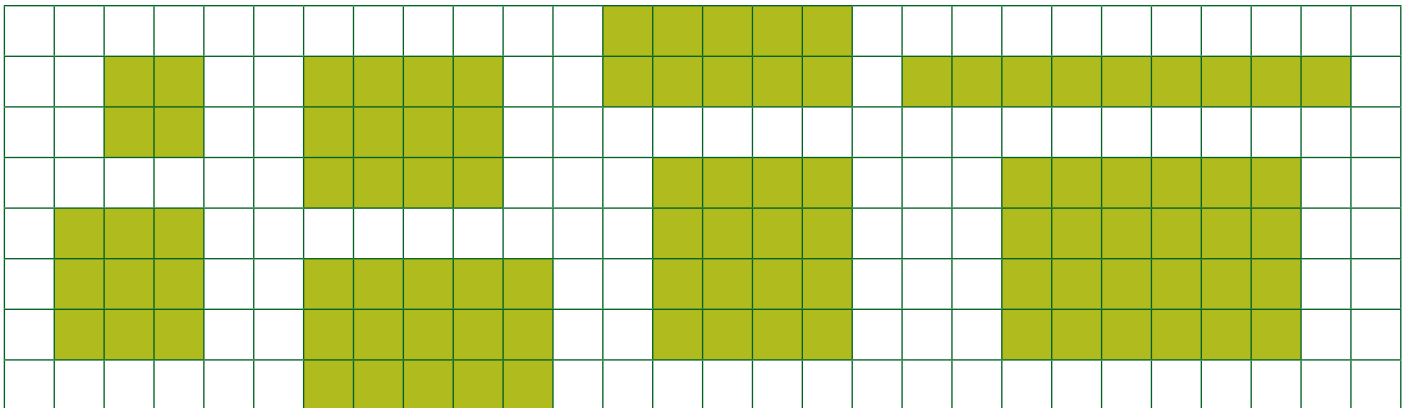
Shiúil na páistí go dtí an láthair shúgartha agus ar ais gach tráthnóna. Cén fad slí a shiúil siad in imeacht na seachtaine?




1 Cé mhéad aonad cearnógach atá i ngach cruth?



2 Comhair na cearnóga beaga agus faigh líon na gcearnóg i ngach cruth ar leith.



3 An féidir achar dromchla a fháil ar bhealach níos tapúla? Déan iad seo ar an mbealach tapa sin más eol duit é. Aon cheintiméadar cearnach ( $1 \text{ cm}^2$ ) atá i ngach cearnóg thíos.



4  $2 \text{ cm} \times 2 \text{ cm} =$    $\text{cm}^2$      $2 \text{ cm} \times 6 \text{ cm} =$    $\text{cm}^2$      $5 \text{ cm} \times 3 \text{ cm} =$    $\text{cm}^2$

$11 \text{ cm} \times 2 \text{ cm} =$    $\text{cm}^2$      $3 \text{ cm} \times 3 \text{ cm} =$    $\text{cm}^2$      $7 \text{ cm} \times 1 \text{ cm} =$    $\text{cm}^2$



5 Scríobh na toisí atá in easnamh.

Fad	Leithead	Achar
7 cm	8 cm	cm <sup>2</sup>
8 cm	6 cm	cm <sup>2</sup>
13 cm	14 cm	cm <sup>2</sup>
25 cm	11 cm	cm <sup>2</sup>
30 cm	10 cm	cm <sup>2</sup>
23 cm	18 cm	cm <sup>2</sup>
15 cm	11 cm	cm <sup>2</sup>

6 Cén t-achar atá i do sheomra codlata?

Fad	Leithead	Achar
9 cm	cm	81 cm <sup>2</sup>
7 cm	cm	56 cm <sup>2</sup>
11 cm	cm	121 cm <sup>2</sup>
9 cm	cm	90 cm <sup>2</sup>
12 cm	cm	120 cm <sup>2</sup>
8 cm	cm	72 cm <sup>2</sup>
12 cm	cm	60 cm <sup>2</sup>

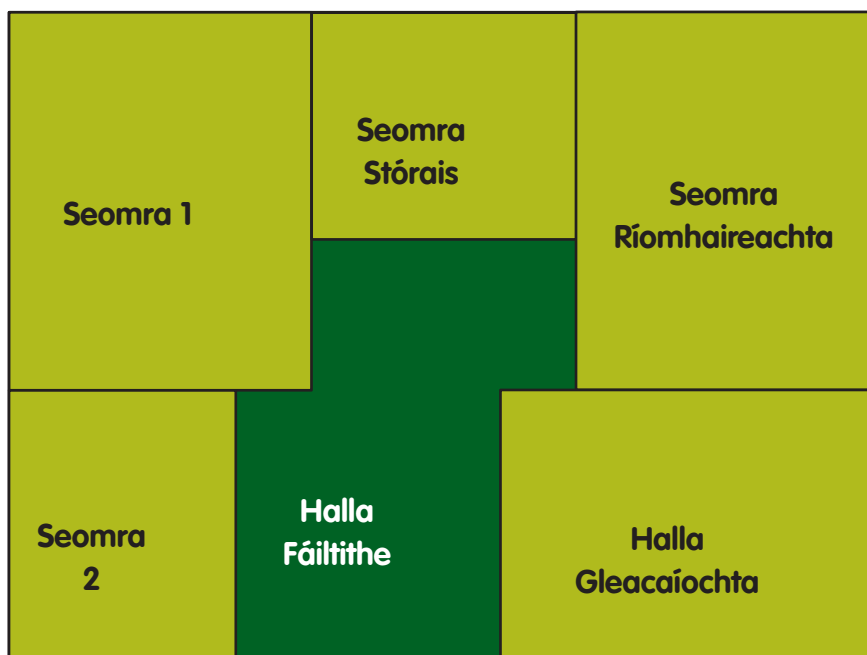
7 Tomhais imlíne na bhfrámaí pictiúir seo.







8 Cuid de phlean urlár scoile í seo. **Scála: 1 cm = 2 m**




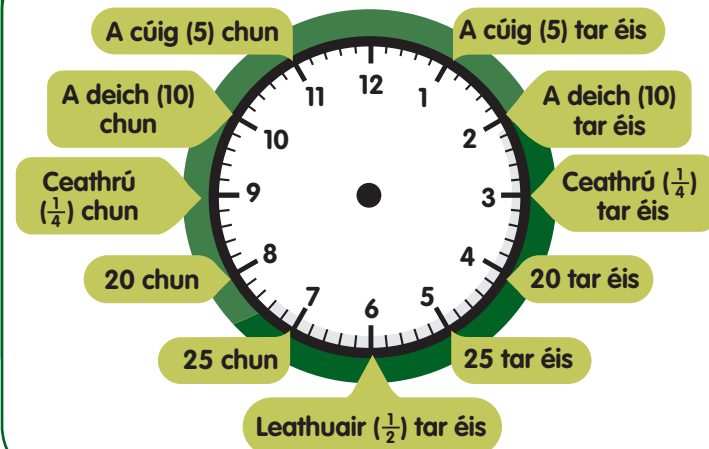
Tomhais na taobhanna agus scríobh toisí na seomraí ina méadair. Bain úsáid as an scála.

	F × L
Seomra 1:	
Seomra 2:	
Seomra Stórais:	
Seomra Ríomhaireachta:	
Halla Gleacaíochta:	

1

## A chlog

## Líon isteach na freagraí



2 Scríobh an t-am a bhí ann 20 nóiméad níos luaithe.








3 Cé mhéad uair agus nóiméad atá in:

- 80 nóim =  uair  nóim
- 120 nóim =  uair  nóim
- 130 nóim =  uair  nóim
- 135 nóim =  uair  nóim
- 175 nóim =  uair  nóim

4 Cé mhéad nóiméad atá idir:

- 12.25 agus 1.10 =
- 9.55 agus 10.15 =
- 6.40 agus 7.55 =
- 7.30 agus 9.15 =
- 2.10 agus 2.50 =

5

LONDAIN GO BAILE ÁTHA CLIATH		
	IMEAHT	ISTEAHT
E127	11:00	12:15
E128	14:30	15:45
E129	18:00	19:15

Cén fad a ghlacann gach eitilt?

Cén t-am a shroich an t-eitleán Baile Átha Cliath má cuireadh moill 35 nóiméad ar eitilt E128?

Cé acu eitilt a roghnófa chun a bheith i mBaile Átha Cliath faoina 2 p.m.?



Foghlaim

52 seachtain = 1 bhliain 365 lá = 1 bhliain

366 lá atá i mbliain bhisigh

$$\begin{array}{r} 4 \text{ huair} \quad 35 \text{ nóiméad} \\ + 6 \text{ huair} \quad 50 \text{ nóiméad} \\ \hline 10 \text{ n-uair} \quad 85 \text{ nóiméad} \end{array}$$

Athghrúpáil

85 nóiméad = 1 uair 25 nóiméad

10 n-uair + 1 uair 25 nóiméad = 11 uair 25 nóiméad

1

uair nóim

$$\begin{array}{r} 2 \quad 45 \\ + 3 \quad 50 \\ \hline \end{array}$$

uair nóim

$$\begin{array}{r} 3 \quad 55 \\ + 4 \quad 25 \\ \hline \end{array}$$

uair nóim

$$\begin{array}{r} 6 \quad 50 \\ + 4 \quad 48 \\ \hline \end{array}$$

uair nóim

$$\begin{array}{r} 3 \quad 37 \\ + 3 \quad 58 \\ \hline \end{array}$$

$$\begin{array}{r} 7 \text{ n-uair} \quad 20 \text{ nóim} \\ - 5 \text{ huair} \quad 35 \text{ nóim} \\ \hline \end{array}$$

Ní féidir 35 a dhealú ó 20. Dá bhrí sin déan **6 huair 80 nóiméad as 7 n-uair agus 20 nóiméad**

$$\begin{array}{r} 6 \text{ huair} \quad 80 \text{ nóim} \\ - 5 \text{ huair} \quad 35 \text{ nóim} \\ \hline \end{array}$$

1 uair 45 nóim

2

uair nóim

$$\begin{array}{r} 5 \quad 30 \\ - 2 \quad 45 \\ \hline \end{array}$$

uair nóim

$$\begin{array}{r} 4 \quad 40 \\ - 1 \quad 55 \\ \hline \end{array}$$

uair nóim

$$\begin{array}{r} 5 \quad 23 \\ - 2 \quad 35 \\ \hline \end{array}$$

uair nóim

$$\begin{array}{r} 8 \quad 44 \\ - 6 \quad 57 \\ \hline \end{array}$$

3

Chodail an leanbh 1 uair agus 36 nóiméad.

Cén t-am a dhúisigh sí má chuaigh sí a chodladh ar 2.25 a.m.?



4

Chabhraigh Ríonach lena hathair doras an bhotháin a phéinteáil. Ghlac sé 1 uair agus 20 nóiméad orthu. Cén t-am a thosaigh siad ar an obair má chríochnaigh siad ar 4.45 p.m.?



5

Chaith Deirdre an oíche i dteach a cara. Bhreathnaigh siad ar dhá scannán a mhair 3 huair agus 20 nóiméad. Mhair scannán amháin 1 uair agus 34 nóiméad. Cén fad a mhair an scannán eile?



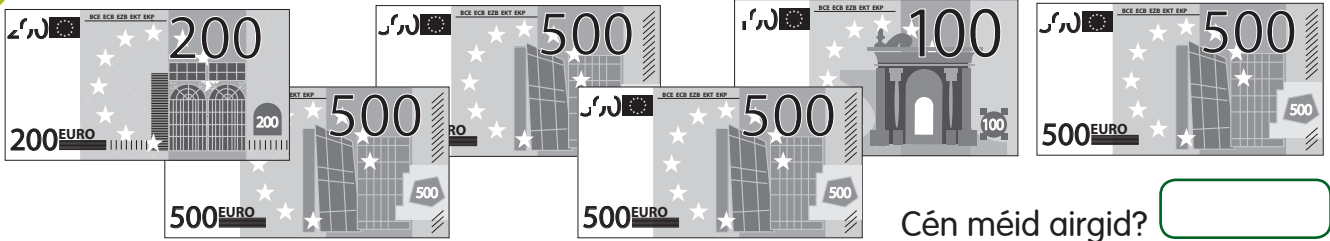
6

Ghlac Maidhc páirt i rás rothaíochta a mhair 2 uair agus 21 nóiméad. Má thosaigh an rás ar 3.15 p.m., cén uair a chríochnaigh sé?




# Airgead

1



2



3

Scríobh na suimeanna airgid seo ina € agus cent.

56 c =  17 c =  135 c =  204 c =  534 c =   
 500 c =  5 c =  79 c =  103 c =  340 c =

4

€	€	€	€	€
39.46	14.37	13.54	27.58	18.27
52.81	29.28	29.36	19.49	49.76
+ 86.49	+ 16.79	+ 8.87	+ 46.97	+ 27.89
<input type="text"/>	<input type="text"/>	<input type="text"/>	<input type="text"/>	<input type="text"/>

5

€	€	€	€	€
125.56	142.34	170.03	180.00	195.20
- 75.34	- 120.75	- 29.67	- 34.26	- 157.43
<input type="text"/>	<input type="text"/>	<input type="text"/>	<input type="text"/>	<input type="text"/>

6

€26.37	€29.46	€38.79	€86.38	€73.87
x 3	x 6	x 5	x 7	x 4
<input type="text"/>	<input type="text"/>	<input type="text"/>	<input type="text"/>	<input type="text"/>

7

3 ) €72.63      6 ) €89.64      9 ) €73.71      6 ) €66.18      4 ) €113.12

# Fadhbanna Scríofa

1 Suimigh 2859 agus 3166.

2 Cén méid níos mó ná 2124 atá 9846?

3 Cad é toradh 38 agus 96?

4 Cén méid níos lú ná 9999 atá suim 3469 agus 3769?

5 €27.49 a bhí ag Clár. Chaith sí €18.50. Cén méid a bhí fágtha?



6 Bhí 1942 turcaí ag feirmeoir agus dhíol sé 1898 díobh. Cé mhéad turcaí a bhí fágtha aige?



7 Bhí Seán agus Máire ag coigilt airgid le haghaidh Lá na Máithreacha. €50 a bhí uathu. Bhí €27.60 ag Seán agus bhí €19.87 ag Máire. Cén méid airgid a bhí fós de dhíth?



8 I monarcha áirithe rinneadh 2347 carr i mí Mheán Fómhair, 5196 carr i mí Dheireadh Fómhair agus 1845 carr i mí na Samhna. Cé mhéad carr ar fad a rinneadh in imeacht na trí mhí sin?



9 Má chosnaíonn 9 bpeann €21.33 cé mhéad a chosnaíonn peann amháin?



10 Chaith Colm €1.60 dá chuid airgead póca i siopa amháin agus 70 c i siopa eile. €7.70 a bhí fágtha aige. Cén t-airgead póca a bhí aige ar dtús?



11 Mhair turas traenach ó 8.35 a.m. go dtí 10.27 a.m. Cén fad ama é sin?



12 €1.75 a chosnaíonn mála milseán. Cén costas a bheadh ar ocht mála milseán?



# Patrúin Uimhreacha

Críochnaigh na patrúin.

1 

2 

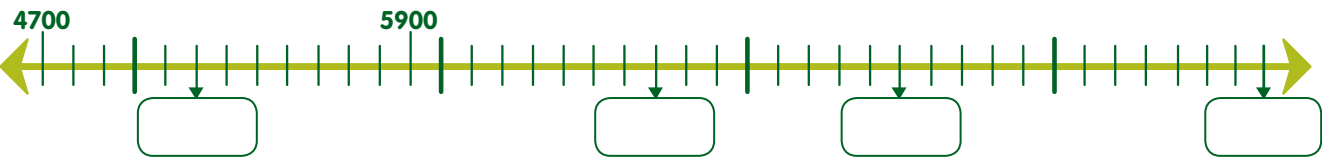
3 

4 

5 Codanna de 100-chearnóg atá anseo. Líon isteach na huimhreacha atá in easnamh.

45			33
	66		99

6 Scríobh isteach, ar an uimhirlíne thíos, na huimhreacha atá in easnamh.



Críochnaigh na codáin thíos.

7

$9$	$9\frac{1}{2}$	$10$
$\frac{18}{2}$	<input type="text"/> $\frac{\quad}{2}$	<input type="text"/> $\frac{\quad}{2}$

8

$9$	$9\frac{1}{4}$	<input type="text"/>	<input type="text"/>	$10$
$\frac{36}{4}$	<input type="text"/> $\frac{\quad}{4}$	<input type="text"/> $\frac{\quad}{4}$	<input type="text"/> $\frac{\quad}{4}$	<input type="text"/> $\frac{\quad}{4}$

9

$8$	$8.25$	<input type="text"/>	<input type="text"/>	$9$
$\frac{32}{4}$	<input type="text"/> $\frac{\quad}{4}$	<input type="text"/> $\frac{\quad}{4}$	<input type="text"/> $\frac{\quad}{4}$	$\frac{36}{4}$

10 Líon isteach na boscaí

$6 \times \square = 42$

$8 \times \square = 24$

$6 \times \square = 66$

$\square \times 6 = 54$

$\square \times 8 = 64$

$\square \times 9 = 81$

11  $\square \div 9 = 8$

$\square \div 5 = 12$

$\square \div 8 = 8$

$\square \div 7 = 3$

$\square \div 3 = 12$

$\square \div 5 = 9$

12  $8 \times 3 = \square \times 8$

$9 \times 10 = \square \times 9$

$12 \times 4 = \square \times 8$

$6 \times 6 = 3 \times \square$

$15 \times 4 = 5 \times \square$

$6 \times 5 = 10 \times \square$

13  $(36 \div 9) + 4 = \square$

$(63 \div 9) + 8 = \square$

$(81 \div 9) + 2 = \square$

$(45 \div 9) - 2 = \square$

$(18 \div 9) - 0 = \square$

$(72 \div 9) - 4 = \square$

14 Scríobh uimhirabairt do gach scéilín thíos. (Tá bealaí éagsúla ann lena dhéanamh)



42 ball a bhí sa chumann lúthchleasaíochta. Chláraigh dháréag (12) eile sa chumann. Cé mhéad ball a bhí sa chumann ansin?



€7.50 a chosnaíonn ballraíocht sa chumann snámha. Má théann cúigear cairde isteach sa chumann, cé mhéad a chosnóidh sé orthu uile?



Bhí 1644 leabhar i leabharlann na bpáistí. Bhí trí cheathrú ( $\frac{3}{4}$ ) díobh amuigh ar iasacht. Cé mhéad leabhar a bhí amuigh ar iasacht?



40 stampa a bhí ag Seán. Tá slí do 25 stampa ar gach leathanach san albam. Cé mhéad leathanach a líon sé? An raibh aon stampaí fágtha?



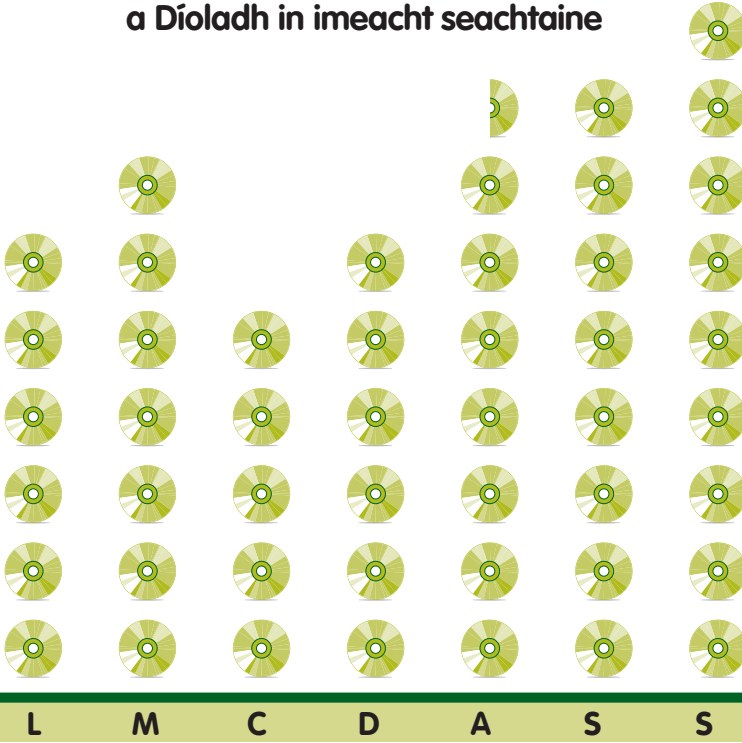
Sheachaid fear an bhainne 256 cartán bainne gach lá i mí an Mheithimh. Cé mhéad cartán a sheachaid sé ar fad?



# Cairteacha

1

Líon na ndlúthdhioscaí (CD-anna) a Díoladh in imeacht seachtaine



Eochair:



Díoladh 20



Díoladh 10

Cé acu lá ba ghnóthaí?

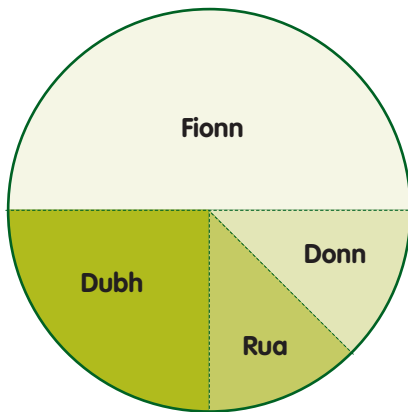
Cén dá lá ar ar díoladh an líon céanna dlúthdhioscaí (CD)?

Cé mhéad dlúthdhiosca a díoladh ar an Aoine?

Cé mhéad dlúthdhiosca a díoladh ar an Domhnach de bhreis an gCéadaoin?

2

Dath Gruaige na nDaltaí i Rang 4  
32 dalta atá sa rang.



Cén codán díobh seo a bhfuil gruaig rua orthu?

Cé mhéad dalta a bhfuil gruaig dhubh orthu?

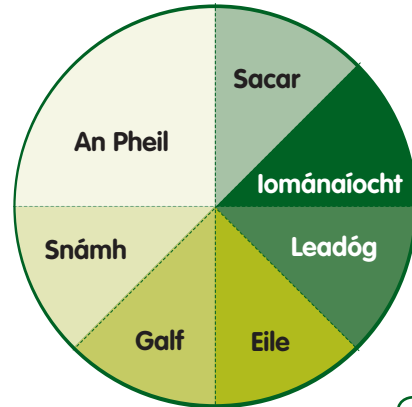
Cé mhéad dalta a bhfuil gruaig rua orthu?

Cé mhéad dalta a bhfuil gruaig fhionn orthu?

Cén codán díobh a bhfuil gruaig dhonn orthu?

3

Na Cluichí Spóirt is rogha le Rang 4



Cén codán arb é sacar a rogha?

Cé acu spórt is fearr leis na daltaí?

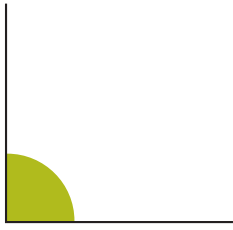
24 dalta atá sa rang. Cé mhéad dalta arb é snámh a rogha?

Cé mhéad dalta ar fad arb iad iománaíocht agus galf a rogha?


Cé mhéad dalta ar fad a roghnaigh iománaíocht, snámh agus sacar?

Ainmnigh cluichí spóirt a bheadh san áireamh faoi 'Eile'.

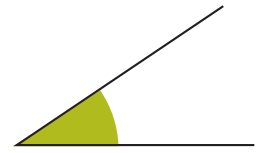
# Uillinneacha agus Línte



Dronuillinn



Maoluillinn

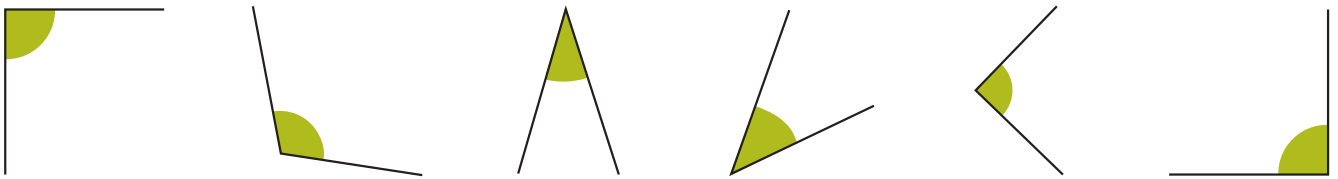


Géaruillinn

< dronuillinn

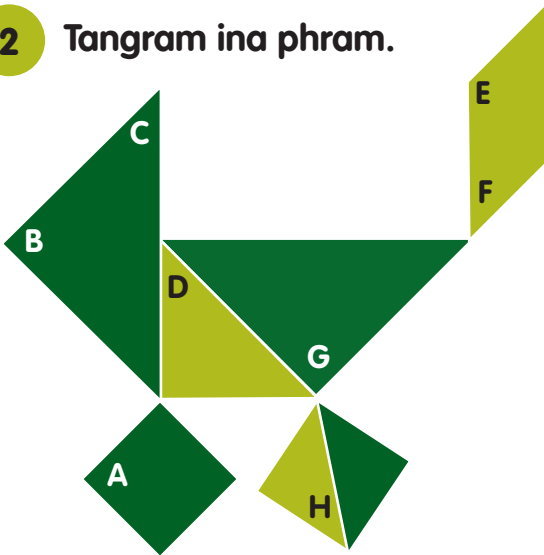
> dronuillinn

1 Ainmnigh na huillinneacha.



\_\_\_\_\_

2 Tangram ina phram.






Cé acu géaruillinn, maoluillinn nó dronuillinn atá sna huillinneacha anseo?

Cuir tic ✓ sna boscaí cearta.

	Maoluillinn	Géaruillinn	Dronuillinn
Uillinn A			
Uillinn B			
Uillinn C			
Uillinn D			
Uillinn E			
Uillinn F			
Uillinn G			
Uillinn H			

3 Ainmnigh na huillinneacha atá á ndéanamh ag lámha na gclog?



\_\_\_\_\_


\_\_\_\_\_

\_\_\_\_\_

\_\_\_\_\_

\_\_\_\_\_

# Uillinneacha agus Línte



Bíonn ráillí an iarnróid comhthreomhar.




Tá foirgneamh an-cháiliúil san Iodáil ar a dtugtar Túr Claonta Pisa. Níl sé ingearach leis an talamh.

1 Cuir tic ✓ leis na línte comhthreomhara.



2 Cuir tic ✓ leis na línte comhthreomhara sna comharthaí.



Déan iad seo a phlé.

An léaslíne: Bíonn an Ghrian le feiceáil ag an léaslíne.



Líne chothrománach

Tá na colúin ceartingearach.



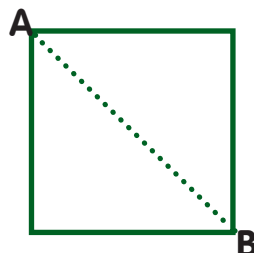
Líne cheartingearach

3 Cé mhéad líne cheartingearach atá sa dréimire?



Cé mhéad líne chothrománach atá sa dréimire?

4 Is trasnán í an líne AB. Tarraing trasnán sa chruth seo.




5

Tarraing líne a bheidh ingearach leis an líne AB.



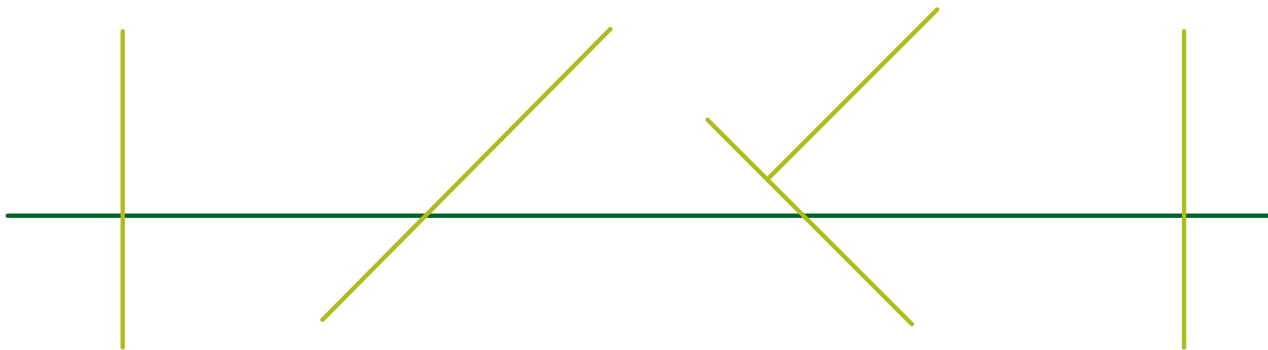
6

Cuir tic ✓ leis an líne atá comhthreomhar leis an líne CD


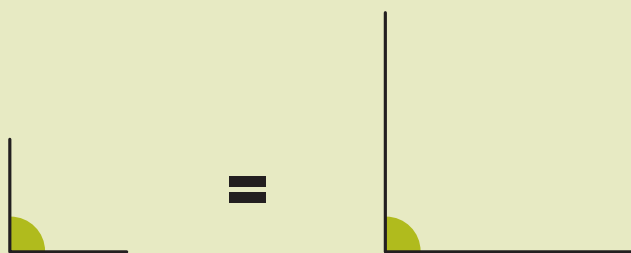


7

Scríobh L ar na línte cothrománacha. Cuir I ar na línte ceartingearacha. Cuir C ar na línte comhthreomhara.



Níl aon bhaint ag fad na línte le méid na huillinne.



# Seans agus Dóchúlacht

1 Caith bonn 50 cent san aer 20 uair agus cláraigh na torthaí sa tábla thíos.

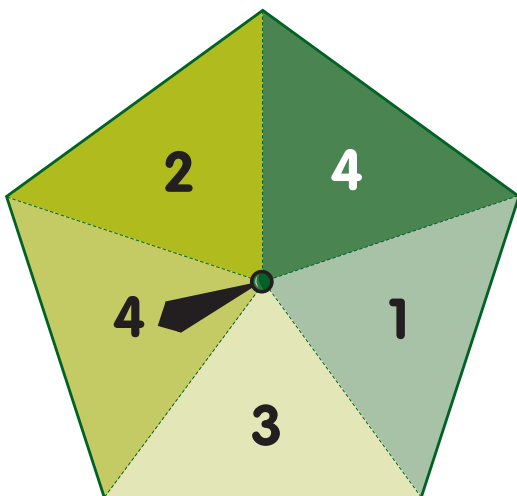
Líon na gCaitheamh	1	2	3	4	5	6	7	8	9	10	11	12	13	14	15	16	17	18	19	20
Aghaidh																				
Cúl																				

2 Cuir tic ✓ sa cholún is oiriúnaí maidir le gach ráiteas díobh seo a leanas.

	Níl seans ann	Caolseans	Seans Maith	Cinnte
Saolófar amárach mé.				
Tá 0.2 cothrom le $\frac{1}{2}$ .				
Beidh báisteach in Éirinn inniu.				
Beidh báisteach sa Sahára inniu.				
Bogfaidh mé isteach i dteach nua inniu.				
Rachaidh mé ag sciáil sa gheimhreadh.				
Bíonn lá breithe ag gach duine.				

3

## Roithleán



An bhfuil an seans céanna ag gach uimhir ar an roithleán seo?

Cén seans atá ann gurb é 2 an uimhir?

Cén seans atá ann gurb é 4 an uimhir?

Líon isteach na bearnaí. Úsáid do chuid focal féin nó roghnaigh focail ón liosta thíos. B'fhéidir go mbeidh gá le dhá fhocal in abairtí áirithe.

**pioc, go randamach, Tá sé ionann is cinnte go, Bheadh dóchúlacht ...as.., Níorbh fhéidir gur, B'fhéidir gur, Seans gur, Seans nach, Ní dócha gur, Ní dócha go, Is dócha go, Is cinnte nach, Is cinnte go, D'fhéadfadh sé go**

Bain úsáid as an stór focal thuas agus líon isteach na bearnaí sna habairtí seo a leanas:

a) ..... mbeidh sé fuar sa gheimhreadh.



b) Dún do shúile agus ..... cúig bhréagán ..... as bosca bréagán.

c) ..... troime an balún ná an bríce.



d) ..... mbeidh laethanta grianmhara ann an samhradh seo chugainn.

e) ..... gcosnaíonn barra seacláide €120.



f) ..... bhfuil an fear níos sine ná an buachaill.

g) ..... ag dul ar scoil atá an cailín seo.



h) ..... mbeidh sé fuar sa samhradh.

i) ..... 5 ..... 6 ann le madra a phiocadh as mála ina raibh cúig (5) mhadra agus cat amháin (1).



j) ..... tapúla éan ná scairdeitleán.

k) ..... go dtaitníonn an pheil le gach aon duine.



l) ..... mbeidh laethanta fliucha ann sa gheimhreadh.

m) ..... mbeidh an madra agus an cat ag troid.



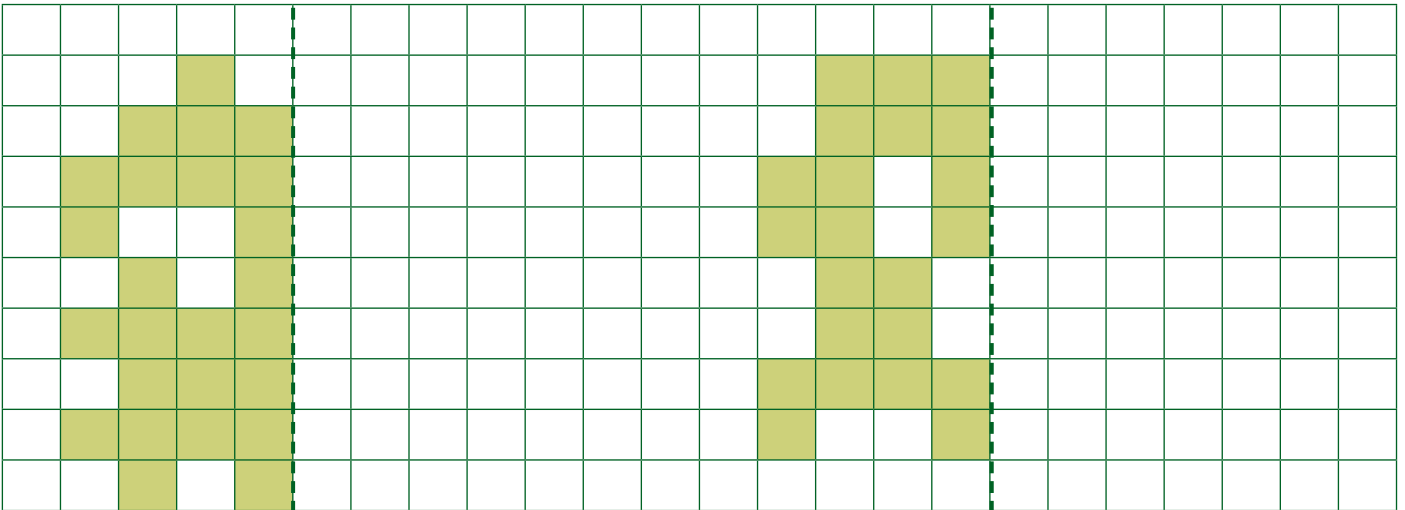
n) ..... gcosnódh dhá thicéad bus €15.

# Siméadracht


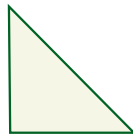
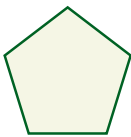
- 1 Cuir ✓ leis na cruthanna atá siméadrach.  
Cuir ✗ leis na cruthanna a bhfuil breis is ais siméadrachta amháin acu.



- 2 Líon isteach an leath eile agus déan cruth siméadrach.



- 3 Tarraing ais na siméadrachta ar na cruthanna a mbaineann siméadracht leo.



- 4 Cuir tic ✓ sa bosca a thugann an líon ceart aiseanna siméadrachta.

	1 líne	2 líne	3 líne	4 líne	> 4 líne	Ní cruth siméadrach é.

1 Tabhair na huimhreacha seo go dtí an 10 is gaire.

31	<input type="text"/>	89	<input type="text"/>	98	<input type="text"/>	37	<input type="text"/>	51	<input type="text"/>	82	<input type="text"/>
33	<input type="text"/>	25	<input type="text"/>	91	<input type="text"/>	46	<input type="text"/>	84	<input type="text"/>	52	<input type="text"/>
141	<input type="text"/>	389	<input type="text"/>	136	<input type="text"/>	172	<input type="text"/>	241	<input type="text"/>	147	<input type="text"/>
253	<input type="text"/>	164	<input type="text"/>	258	<input type="text"/>	147	<input type="text"/>	371	<input type="text"/>	256	<input type="text"/>

2 Tabhair na huimhreacha seo go dtí an 100 is gaire.

395	<input type="text"/>	582	<input type="text"/>	479	<input type="text"/>	308	<input type="text"/>	790	<input type="text"/>	315	<input type="text"/>
725	<input type="text"/>	859	<input type="text"/>	851	<input type="text"/>	450	<input type="text"/>	650	<input type="text"/>	955	<input type="text"/>
1385	<input type="text"/>	1842	<input type="text"/>	1924	<input type="text"/>	2560	<input type="text"/>	3970	<input type="text"/>	1540	<input type="text"/>
2499	<input type="text"/>	3690	<input type="text"/>	3890	<input type="text"/>	4752	<input type="text"/>	3125	<input type="text"/>	2281	<input type="text"/>

3 Tabhair na huimhreacha seo go dtí an 1000 is gaire.

7850	<input type="text"/>	4739	<input type="text"/>	8500	<input type="text"/>	6499	<input type="text"/>	5005	<input type="text"/>	3750	<input type="text"/>
9069	<input type="text"/>	6700	<input type="text"/>	7850	<input type="text"/>	3125	<input type="text"/>	4900	<input type="text"/>	5099	<input type="text"/>

4 Tabhair na faid seo go dtí an méadar is gaire.

3.75 m	<input type="text"/>	9.5 m	<input type="text"/>	4.8 m	<input type="text"/>	7.35 m	<input type="text"/>	6.7 m	<input type="text"/>	2.15	<input type="text"/>
--------	----------------------	-------	----------------------	-------	----------------------	--------	----------------------	-------	----------------------	------	----------------------

5 Tabhair na faid slí seo go dtí an ciliméadar is gaire.

19.5 km	12.95 km	21.25 km	16.4 km	38.37 km	47.28 km
<input type="text"/>	<input type="text"/>	<input type="text"/>	<input type="text"/>	<input type="text"/>	<input type="text"/>

6 Tabhair na cainníochtaí seo go dtí an lítear is gaire.

8.4 l	<input type="text"/>	3.56 l	<input type="text"/>	9.98 l	<input type="text"/>	7.61 l	<input type="text"/>	6.25 l	<input type="text"/>	5.75 l	<input type="text"/>
-------	----------------------	--------	----------------------	--------	----------------------	--------	----------------------	--------	----------------------	--------	----------------------

7 Tabhair na huimhreacha seo thíos go dtí an tslánuimhir is gaire.

$19 \frac{1}{2}$	<input type="text"/>	$17 \frac{3}{4}$	<input type="text"/>	$28 \frac{1}{4}$	<input type="text"/>	$36 \frac{1}{8}$	<input type="text"/>	$51 \frac{3}{4}$	<input type="text"/>	$14 \frac{5}{9}$	<input type="text"/>
------------------	----------------------	------------------	----------------------	------------------	----------------------	------------------	----------------------	------------------	----------------------	------------------	----------------------



# Measúnú 3

1 
$$\begin{array}{r} 46.75 \\ + 29.67 \\ \hline \end{array}$$

2 
$$\begin{array}{r} 79.90 \\ - 48.27 \\ \hline \end{array}$$

3 
$$\begin{array}{r} \text{km} \quad \text{m} \\ 2 \quad 500 \\ + 2 \quad 755 \\ \hline \end{array}$$

4 
$$\begin{array}{r} \text{l} \quad \text{ml} \\ 6 \quad 340 \\ \times \quad \quad 5 \\ \hline \end{array}$$

5 
$$\begin{array}{r} \text{l} \quad \text{ml} \\ 7 \overline{) 58 \quad 310} \\ \hline \end{array}$$

6  $1000 \text{ m} = \text{ } \text{ km}$

$750 \text{ m} = \frac{3}{4} \text{ km} = \text{ } \text{ km}$

$250 \text{ m} = \frac{1}{4} \text{ km} = 0.25 \text{ km}$

$500 \text{ m} = \text{ } \text{ km} = 0.5 \text{ km}$

$200 \text{ m} = \text{ } \text{ km} = 0.2 \text{ km}$

7  $\text{ } \text{ l} = 100 \text{ ml}$

$0.25 \text{ l} = 250 \text{ ml}$

$\text{ } \text{ l} = 500 \text{ ml}$

$0.75 \text{ l} = 75 \text{ ml}$

$\text{ } \text{ l} = 800 \text{ ml}$

8 Aon bhliain amháin  
=  $\text{ } \text{ seachtain}$

Aon bhliain amháin  
=  $\text{ } \text{ lá}$

$\text{ } \text{ lá}$  a bhíonn  
i mbliain bhisigh.

## 9 Faigh an t-achar.

$7 \text{ cm} \times 9 \text{ cm} = \text{ } \text{ cm}^2$

$8 \text{ cm} \times 8 \text{ cm} = \text{ } \text{ cm}^2$

$6 \text{ cm} \times 7 \text{ cm} = \text{ } \text{ cm}^2$

## Faigh an imlíne.

$4 \text{ cm} \times 8 \text{ cm} = \text{ } \text{ cm}$

$10 \text{ cm} \times 6 \text{ cm} = \text{ } \text{ cm}$

$9 \text{ cm} \times 4 \text{ cm} = \text{ } \text{ cm}$

10  $\frac{1}{2}$  de 90 =  $\text{ } \quad \frac{3}{4}$  de 200 =  $\text{ } \quad \frac{4}{5}$  de 855 =  $\text{ } \quad \frac{2}{3}$  de 279 =  $\text{ } \quad$

11 
$$\begin{array}{r} \text{uair nóim} \\ 2 \quad 50 \\ + 4 \quad 15 \\ \hline \end{array}$$

$$\begin{array}{r} \text{uair nóim} \\ 6 \quad 30 \\ - 4 \quad 55 \\ \hline \end{array}$$

$$\begin{array}{r} \text{€} \\ 220.50 \\ - 75.75 \\ \hline \end{array}$$

$$\begin{array}{r} \text{€} \\ 125.06 \\ \times \quad \quad 9 \\ \hline \end{array}$$

$$\begin{array}{r} \text{€} \\ 6 \overline{) 397.08} \\ \hline \end{array}$$

12  $2 \overline{) 345} \quad 6 \overline{) 492} \quad 9 \overline{) 861} \quad 8 \overline{) 764} \quad 7 \overline{) 691} \quad 5 \overline{) 408}$


13

Meaitseáil gach líne leis an ainm ceart.

Líne  
cheartingearachLíne  
chothrománach

14

Meaitseáil gach uillinn leis an ainm ceart.



Maoluillinn    Dronuillinn    Géaruillinn


15

Meaitseáil gach triantán leis an ainm ceart.

Dronuilleach

Scailéanach

Comhchosach




16


Meaitseáil gach cruth leis an ainm ceart.



Ochtagán



Heicseagán



Peinteagán

17

Tabhair na huimhreacha seo go dtí an 10 is gaire.

129

106

224

412

88

18

Tabhair na huimhreacha seo go dtí an 100 is gaire.

436

1392

99

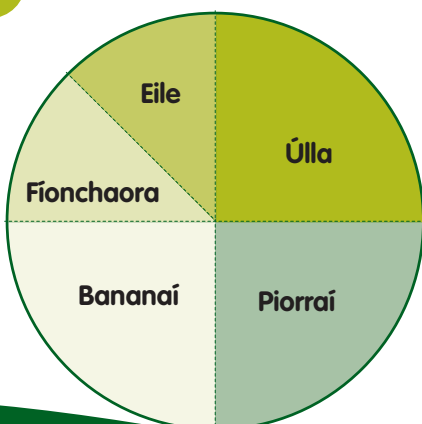
876

678

19

Cad é suim  
3296 agus 4188?Cad é toradh  
29 agus 35?Cé mhéad níos mó  
ná 2175 atá 5122?

20 Na torthaí a itheann Rang 4 ag an mbriseadh beag



24 dalta atá sa rang.

a) Cé mhéad dalta arb iad úlla a rogha










b) Cén codán díobh arb iad piorraí a rogha?










c) Cén codán díobh arb iad fionchaora  
a rogha?










An Scór

# Measúnú: a bhfuil i gceist

Moltar go mbeadh daltaí ó Rang 1 ar aghaidh, rannpháirteach sa mheasúnú a dhéantar orthu.

Measúnú 1	Féinmheasúnú an dalta			Tuairim an mhúinteora.
Tuiscint				
Cruinneas				
Luas				
Buanna				Múinteoir
Laigí				Múinteoir

Measúnú 2	Féinmheasúnú an dalta			Tuairim an mhúinteora.
Tuiscint				
Cruinneas				
Luas				
Buanna				Múinteoir
Laigí				Múinteoir

Measúnú 3	Féinmheasúnú an dalta			Tuairim an mhúinteora.
Tuiscint				
Cruinneas				
Luas				
Buanna				Múinteoir
Laigí				Múinteoir