

Mata go Deo!




Florence Gavin



Mata go Deo! 2

Florence Gavin



Aisling Ní Fharachtáin & Áine Ní Fhatharta
a d'aistrigh

 AN GÚM
Baile Átha Cliath

Ba iad Mulberry Publications a chéadfhoilsigh
faoin teideal *MakeSure Maths 2*

© Florence Gavin, 2006

An leagan Gaeilge

© Foras na Gaeilge, 2009

ISBN 978-1-85791-756-7

Gach ceart ar cosaint. Ní ceadmhach aon chuid
den fhoilseachán seo a atáirgeadh,
gan cead a fháil roimh ré ón bhfoilsitheoir.

Susan Meaney a dhear agus a chuir suas an cló
www.smeaney.com

Future Print a chlóbhuail in Éirinn

Le fáil ar an bpost uathu seo:

An Siopa Leabhar
6 Sráid Fhearchair
Baile Átha Cliath 2
ansiopaleabhar@eircom.net

nó

An Ceathrú Póilí
Cultúrlann Mac Adam–Ó Fiaich
216 Bóthar na bhFál
Béal Feirste BT12 6AH
leabhair@an4poili.com

Orduithe ó leabhardhíoltóirí chuig:

Áis
31 Sráid na bhFíníní
Baile Átha Cliath 2
eolas@forasnagaeilge.ie

Mata go Deo!

2




SNÁITHE	SNÁITHAONAD	LEATHANACH
Uimhreas	Comhaireamh & Cur in Ord	2
Uimhreas	Patrúin Uimhreacha	3
Uimhreas	Garmheastacháin	4
Uimhreas	Ionadluach	5
Ailgéabar	Patrúin a Aimsiú	6
Cruth & Spás	Cruthanna Déthoiseacha (2-T)	8
Uimhreas	Suimiú & Athghrúpáil	10
Uimhreas	Ionadluach	12
Uimhreas	Fadhbanna le Réiteach	14
Uimhreas	Dealú gan Athghrúpáil	16
MEASÚNÚ 1		17
Tomhais	An tAm	18
Uimhreas	Codáin (An Ceathrú Cuid)	19
Tomhais	Airgead	20
Sonraí	Picteagraim	22
Tomhais	Meáchan	23
Uimhreas	Suimiú & Athghrúpáil	24
Uimhreas	Dealú & Athghrúpáil	25
Cruth & Spás	Cruthanna Tríthoiseacha (3-T)	26
Tomhais	Fad	28
Uimhreas	Siombailí a Úsáid >, <, =	29
Uimhreas	Fadhbanna le Réiteach	30
Tomhais	Toilleadh (Leathlítear ($\frac{1}{2}$ l) & Ceathrú Lítear ($\frac{1}{4}$ l))	32
MEASÚNÚ 2		34
Uimhreas	Suimiú Leantach	36
Ailgéabar	Patrúin Uimhreacha	37
Tomhais	Achar	38
Uimhreas	Suimiú & Athghrúpáil	39
Cruth & Spás	An tSiméadracht	40
Cruth & Spás	Uillinneacha sa Saol	41
Cruth & Spás	Treo	42
Tomhais	Airgead	43
Tomhais	Airgead: Fadhbanna	44
Uimhreas	Suimiú & Athghrúpáil	45
Uimhreas	Dealú & Athghrúpáil	46
MEASÚNÚ 3		48

Comhaireamh agus Cur in Ord

Tabhair srachféachaint orthu seo, tomhais agus seiceáil


1



Tomhais

Seiceáil


2



Tomhais

Seiceáil


3



Tomhais

Seiceáil


4



Tomhais

Seiceáil


5



Tomhais

Seiceáil


6



Tomhais

Seiceáil


7



Tomhais

Seiceáil

8



Tomhais

Seiceáil

Patrúin Uimhreacha

1 Cén uimhir a thagann i ndiaidh?

12		35	
59		98	

2 Cén uimhir a thagann roimh?

	11		79
	31		100

3 Líon na boscaí folmha.

	2							
41								
61								70
		83						
91								

4 Líon na boscaí folmha.

1									10
21									
41									
71									
									100

5

			30

6


		55	

7

41			

Garmheastachán


1



Tomhais

Seiceáil


2



Tomhais

Seiceáil

3



Tomhais

Seiceáil

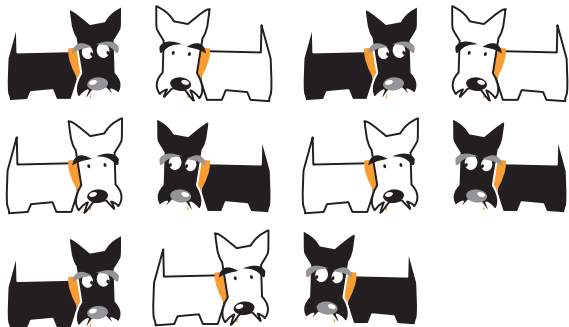
4



Tomhais

Seiceáil


5



Tomhais

Seiceáil

6



Tomhais


Seiceáil

Ionadluach




Slogann an siorc an uimhir is mó i gcónaí!

Tá



níos mó ná



$5 > 3$

1 Cé acu tacar is mó?

<input checked="" type="checkbox"/>	<input type="checkbox"/>

$14 > 12$

2 Cé acu tacar is mó?

<input type="checkbox"/>	<input type="checkbox"/>

$\square > \square$

3 Cé acu tacar is mó?

<input type="checkbox"/>	<input type="checkbox"/>

$\square > \square$

4 Cé acu tacar is mó?

<input type="checkbox"/>	<input type="checkbox"/>

$\square > \square$

5 Cé acu tacar is mó?

<input type="checkbox"/>	<input type="checkbox"/>

$\square > \square$

6 Cé acu tacar is mó?

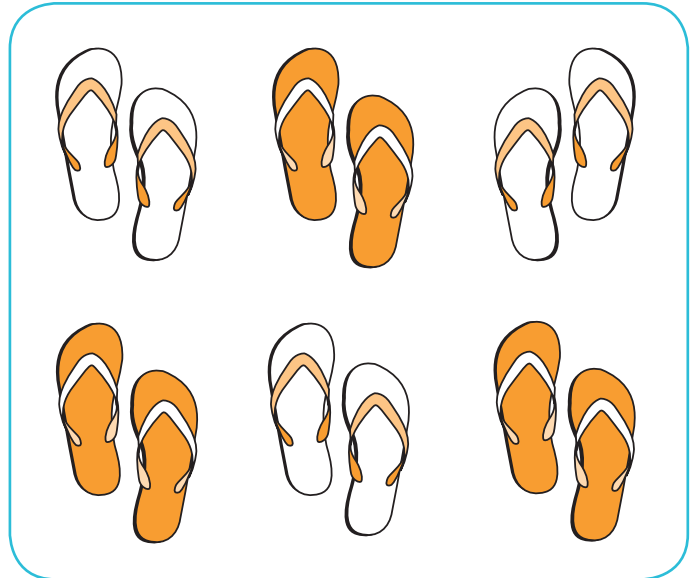
<input type="checkbox"/>	<input type="checkbox"/>

$\square > \square$

Patrúin a Aimsiú

1	2	3	4	5	6	7	8	9	10
11	12	13	14	15	16	17	18	19	20
21	22	23	24	25	26	27	28	29	30
31	32	33	34	35	36	37	38	39	40
41	42	43	44	45	46	47	48	49	50
51	52	53	54	55	56	57	58	59	60
61	62	63	64	65	66	67	68	69	70
71	72	73	74	75	76	77	78	79	80
81	81	83	84	85	86	87	88	89	90
91	92	93	94	95	96	97	98	99	100

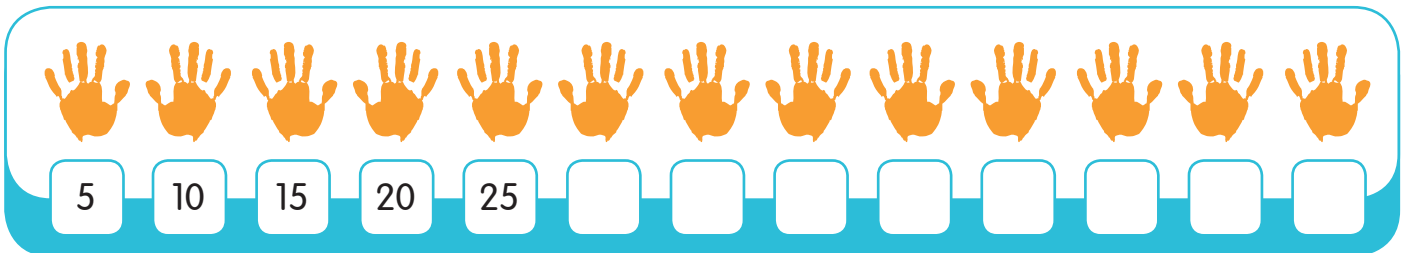
1 Comhair i ndónna



2 Comhair i gcúigeanna



3 Comhair i gcúigeanna



4 Comhair i ndeicheanna



5

$5 + 2 = \square$

$15 + 2 = \square$

$25 + 2 = \square$

$35 + 2 = \square$

$45 + 2 = \square$

$55 + 2 = \square$

$65 + 2 = \square$

$75 + 2 = \square$

$85 + 2 = \square$

$95 + 2 = \square$

6

$9 + 1 = \square$

$19 + 1 = \square$

$29 + 1 = \square$

$39 + 1 = \square$

$49 + 1 = \square$

$59 + 1 = \square$

$69 + 1 = \square$

$79 + 1 = \square$

$89 + 1 = \square$

$99 + 1 = \square$

7

$8 - 3 = \square$

$18 - 3 = \square$

$28 - 3 = \square$

$38 - 3 = \square$

$48 - 3 = \square$

$58 - 3 = \square$

$68 - 3 = \square$

$78 - 3 = \square$


$88 - 3 = \square$

$98 - 3 = \square$

Cruthanna Déthoiseacha (2-T)

Meaitseáil

1



2

Ubhchruth

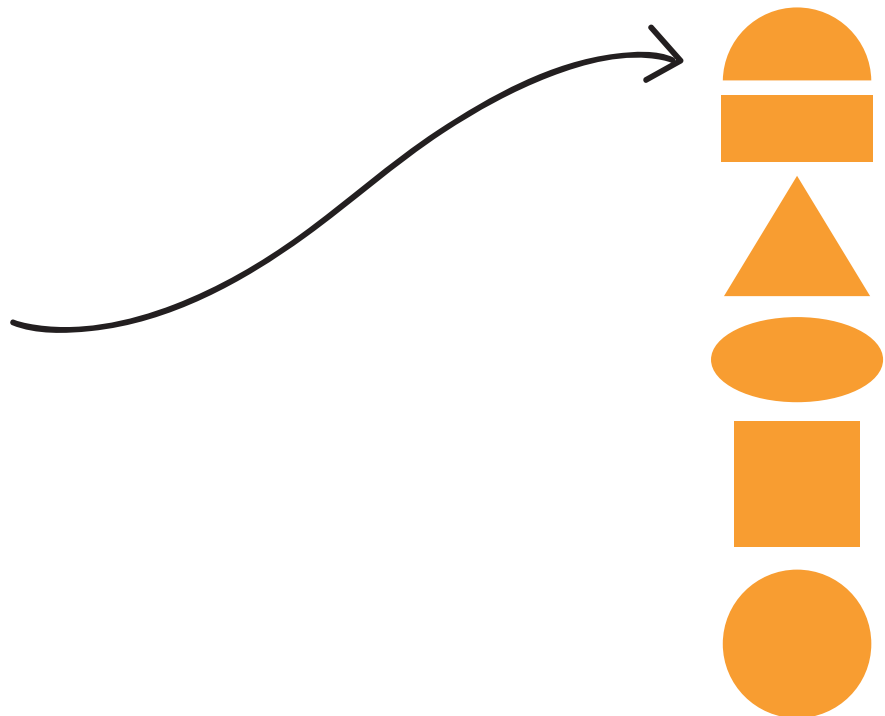
Cearnóg

Leathchiorcal

Dronuilleog

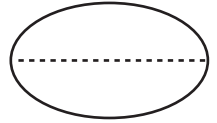
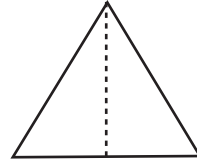
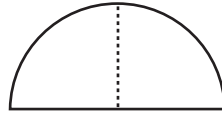
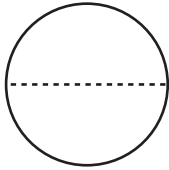
Ciorcal

Triantán



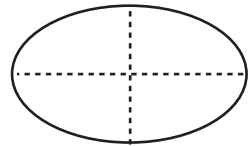
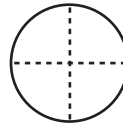
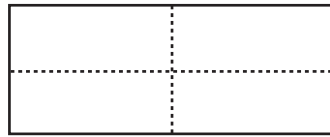
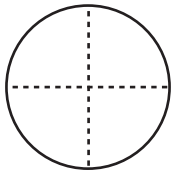
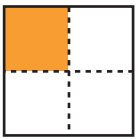
1 Dathaigh leath ($\frac{1}{2}$) gach crutha díobh seo.

Sampla



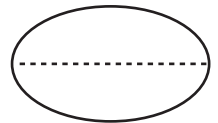
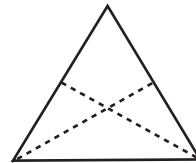

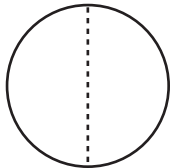
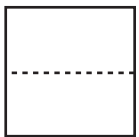
2 Dathaigh an ceathrú cuid ($\frac{1}{4}$) de gach cruth díobh seo.

Sampla



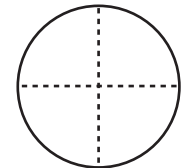
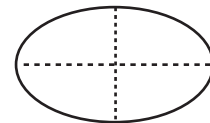
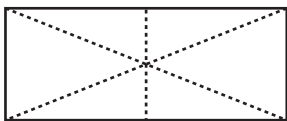
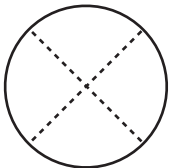
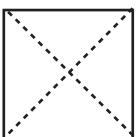
3 Cuir tic leis na cruthanna atá roinnte ina dhá leath.

Sampla



4 Cuir tic le cruth ar bith atá roinnte ina cheithre cheathrú.

Sampla



Suimiú

Agus athghrúpáil

1

DA

23

+ 7

DA

35

+ 5

DA

28

+ 2

DA

56

+ 4

DA

21

+ 9

2

DA

19

+ 1

DA

37

+ 3

DA

32

+ 8

DA

25

+ 5

DA

12

+ 8

3

Déan 10 agus suimigh ansin.

DA

27

12

+ 3

DA

26

14

+ 13

DA

19

16

+ 11

DA

18

15

+ 12

DA

22

18

+ 19

4

DA

16

22

+ 4

DA

15

24

+ 25

DA

13

14

+ 27

DA

16

14

+ 28

DA

25

15

+ 14

5

DA	DA	DA	DA	DA
46	57	38	56	57
+ 27	+ 25	+ 35	+ 18	+ 36
<input type="text"/>	<input type="text"/>	<input type="text"/>	<input type="text"/>	<input type="text"/>

6

DA	DA	DA	DA	DA
29	45	37	35	48
+ 66	+ 19	+ 27	+ 19	+ 32
<input type="text"/>	<input type="text"/>	<input type="text"/>	<input type="text"/>	<input type="text"/>

7

DA	DA	DA	DA	DA
54	63	52	41	83
+ 16	+ 17	+ 18	+ 19	+ 17
<input type="text"/>	<input type="text"/>	<input type="text"/>	<input type="text"/>	<input type="text"/>

8

DA	DA	DA	DA	DA
30	26	26	21	39
+ 19	+ 40	+ 46	+ 30	+ 19
<input type="text"/>	<input type="text"/>	<input type="text"/>	<input type="text"/>	<input type="text"/>

9

DA	DA	DA	DA	DA
46	35	22	39	27
+ 4	+ 5	+ 8	+ 1	+ 3
<input type="text"/>	<input type="text"/>	<input type="text"/>	<input type="text"/>	<input type="text"/>

Ionadluach

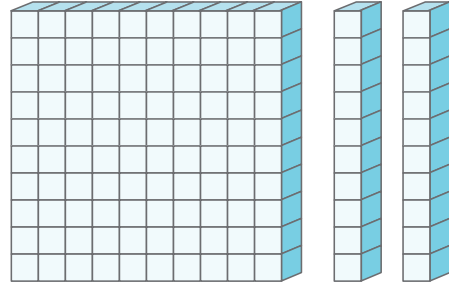
Uimhreacha suas go dtí 199 a aithint.

1

1	2	3	4	5	6	7	8	9	10
11	12	13	14	15	16	17	18	19	20
21	22	23	24	25	26	27	28	29	30
31	32	33	34	35	36	37	38	39	40
41	42	43	44	45	46	47	48	49	50
51	52	53	54	55	56	57	58	59	60
61	62	63	64	65	66	67	68	69	70
71	72	73	74	75	76	77	78	79	80
81	82	83	84	85	86	87	88	89	90
91	92	93	94	95	96	97	98	99	100

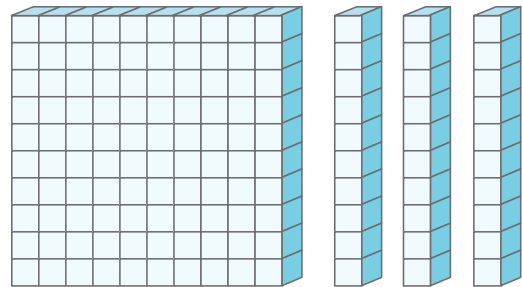
Cé mhéad?

2



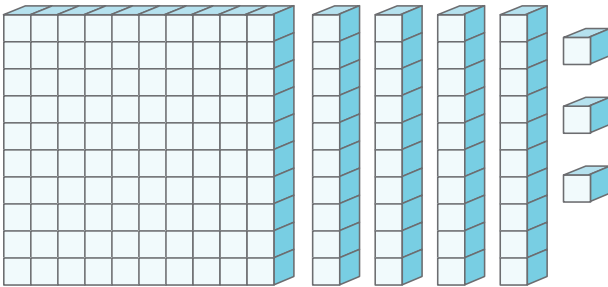
Cé mhéad?

3



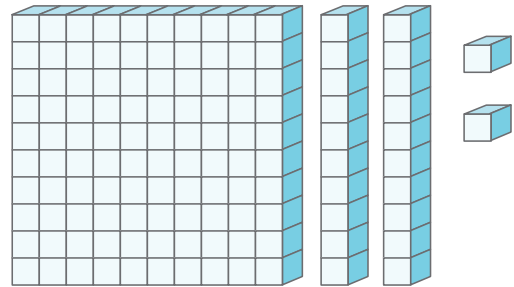
Cé mhéad?

4



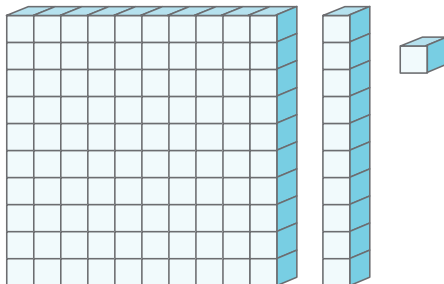
Cé mhéad?

5



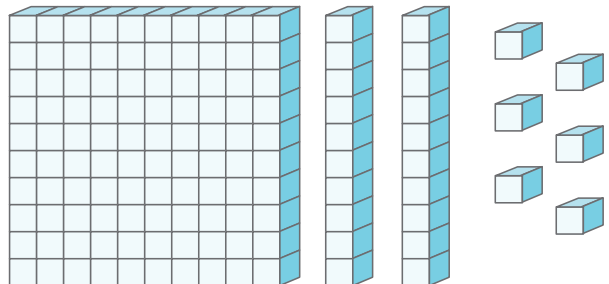
Cé mhéad?

6



Cé mhéad?

7



Cé mhéad?

Euro a athrú ina cent.

8




Cé mhéad?

9



Cé mhéad?

10



Cé mhéad?

11



Cé mhéad?

12



Cé mhéad?

13



Cé mhéad?

14 Tá €1.50 agam, sin cent.

15 Tá €1.99 agam, sin cent

16 Tá €1.20 agam, sin cent.


17 Tá €1.55 agam, sin cent

Fadhbanna le Réiteach

Baineann dhá chéim leis na fadhbanna seo, agus tá suimiú agus dealú i gceist.

Tarraing pictiúr den fhadhb. Cuideoidh sé leat.

1



Bhí 13 bhuachaill ar an mbus. Thuirling beirt (2). Chuaigh mise ar an mbus. Cé mhéad duine a bhí ar an mbus ansin?

2

Cearnaíodh an bus scoile an bhliain a rugadh thú. Cén aois é anois? Cén aois a bheidh aige i gceann 3 bliana?

3

Bhí 15 chailín ar bhus. Chuaigh cúigear (5) eile ar an mbus. Ansin thuirling cúigear (5). Cé mhéad cailín a bhí ar an mbus ansin?

4

Bhí an t-umar peitрил folamh. Chuir an tiománaí bus 70 lítear ann agus bhí sé lán. D'úsáid sé 6 lítear Dé Máirt agus 4 lítear Dé Céadaoin. Cé mhéad lítear a bhí fágtha san umar?

5

Tá slí do 24 páiste ar an mbus. Thuirling a leath ag an gcéad scoil. Thuirling dháréag (12) ag an dara scoil. Cé mhéad páiste a bhí fágtha ar an mbus?

6

20 páiste a bhí ar an mbus. Buachaillí ba ea sé dhuine dhéag (16). Cé mhéad cailín a bhí ann?

7

Bhí 21 páiste ar an mbus. Bhí caipíní á gcaitheamh ag seachtar (7). Cé mhéad páiste nach raibh caipíní orthu?

8

Bhí 20 páiste ar an mbus. Bhí 11 ina suí thuas staighre. Cé mhead páiste a bhí ina suí thíos staighre?

Dealú

Gan athghrúpáil

1

$\begin{array}{r} \text{DA} \\ 39 \\ - 22 \\ \hline \end{array}$	$\begin{array}{r} \text{DA} \\ 49 \\ - 19 \\ \hline \end{array}$	$\begin{array}{r} \text{DA} \\ 58 \\ - 26 \\ \hline \end{array}$	$\begin{array}{r} \text{DA} \\ 43 \\ - 11 \\ \hline \end{array}$	$\begin{array}{r} \text{DA} \\ 57 \\ - 21 \\ \hline \end{array}$
--	--	--	--	--

2

$\begin{array}{r} \text{DA} \\ 49 \\ - 26 \\ \hline \end{array}$	$\begin{array}{r} \text{DA} \\ 58 \\ - 21 \\ \hline \end{array}$	$\begin{array}{r} \text{DA} \\ 48 \\ - 17 \\ \hline \end{array}$	$\begin{array}{r} \text{DA} \\ 64 \\ - 51 \\ \hline \end{array}$	$\begin{array}{r} \text{DA} \\ 37 \\ - 16 \\ \hline \end{array}$
--	--	--	--	--

3

$\begin{array}{r} \text{DA} \\ 69 \\ - 13 \\ \hline \end{array}$	$\begin{array}{r} \text{DA} \\ 75 \\ - 54 \\ \hline \end{array}$	$\begin{array}{r} \text{DA} \\ 27 \\ - 15 \\ \hline \end{array}$	$\begin{array}{r} \text{DA} \\ 86 \\ - 41 \\ \hline \end{array}$	$\begin{array}{r} \text{DA} \\ 47 \\ - 34 \\ \hline \end{array}$
--	--	--	--	--

4

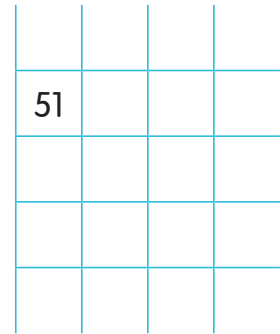
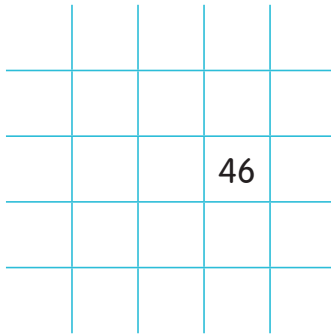
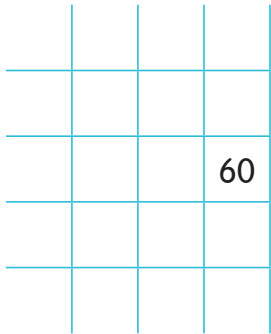
$14 - 3 = \square$	$16 - 6 = \square$	$28 - 6 = \square$
$34 - 3 = \square$	$27 - 13 = \square$	$42 - 11 = \square$
$39 - 17 = \square$	$63 - 23 = \square$	$20 - 15 = \square$
$50 - 5 = \square$	$21 - 1 = \square$	$35 - 10 = \square$

5



$(12 + 6) - 3 = \square$	$(14 + 5) - 7 = \square$	$(15 + 5) - 8 = \square$
$(10 + 7) - 4 = \square$	$(13 + 6) - 8 = \square$	$(16 + 4) - 9 = \square$

Measúnú 1

1 Míreanna de 100-chearnóg atá anseo. Scríobh na huimhreacha atá in easnamh.



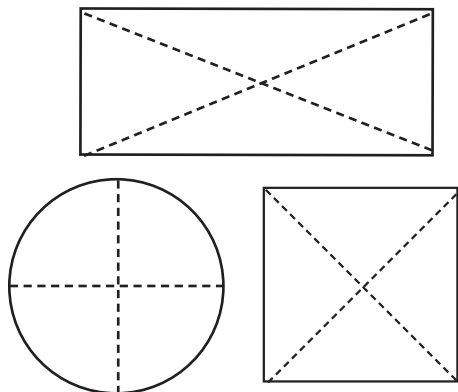
2 Cé acu tacar is mó?



3

DA	DA	DA	DA	DA
57	36	49	83	78
- 15	- 14	- 23	- 62	- 57
<input type="text"/>	<input type="text"/>	<input type="text"/>	<input type="text"/>	<input type="text"/>

4 Dathaigh an ceathrú cuid ($\frac{1}{4}$) de gach cruth.



5

<input type="text"/>	>	29	6	>	<input type="text"/>
<input type="text"/>	>	21	19	>	<input type="text"/>
<input type="text"/>	>	14	10	>	<input type="text"/>




An tAm

Téigh siar ar uaireanta an chloig leis na daltaí sula dtugann sibh faoin leathanach seo.


1




Leathuair ($\frac{1}{2}$)
tar éis a



Leathuair ($\frac{1}{2}$)
tar éis a

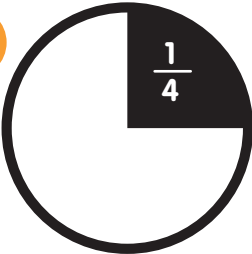


Leathuair ($\frac{1}{2}$)
tar éis a




Leathuair ($\frac{1}{2}$)
tar éis a


2




Ceathrú ($\frac{1}{4}$)
tar éis...



Ceathrú ($\frac{1}{4}$)
tar éis a



Ceathrú ($\frac{1}{4}$)
tar éis a



Ceathrú ($\frac{1}{4}$)
tar éis a



Foghlaim

60 nóim = 1 uair an chloig 30 nóim = ($\frac{1}{2}$) leathuair an chloig

15 nóim = ceathrú ($\frac{1}{4}$) uair an chloig

3

An Nollaig

L	M	C	D	A	S	D
	1	2	3	4	5	6
7	8	9	10	11	12	13
14	15	16	17	18	19	20
21	22	23	24	25	26	27
28	29	30	31			

Cé mhéad lá i mí na Nollag?

Cén lá den tseachtain é Oíche Nollag?

Cén dáta ar a dtiteann Lá Nollag?

Cé mhéad Máirt i mí na Nollag?

4

Meaitseáil



An Geimhreadh



An Samhradh



An tEarrach

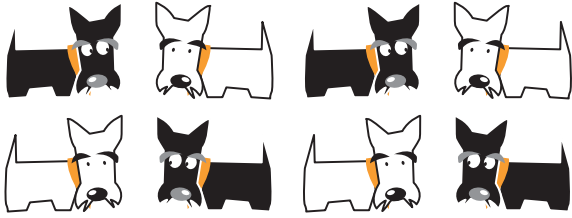


An Fómhar

Codáin

An Ceathrú Cuid

1



An ceathrú cuid ($\frac{1}{4}$) den tacar

2



An ceathrú cuid ($\frac{1}{4}$) den tacar

3




$\frac{1}{4}$ =

4




$\frac{1}{4}$ =

5




An ceathrú cuid ($\frac{1}{4}$) den tacar

6




An ceathrú cuid ($\frac{1}{4}$) den tacar

7



An ceathrú cuid ($\frac{1}{4}$) den tacar

8



An ceathrú cuid ($\frac{1}{4}$) den tacar

Airgead

1



Cé mhéad?

2



Cé mhéad?

3



Cé mhéad?

4




Cé mhéad?

5



Cé mhéad?

6



Cé mhéad?

7

135c = €

200c = €

148c = €

189c = €

114c = €

112c = €

8

€1.17 = c

€1.40 = c


€1.29 = c

€1.50 = c

€1.35 = c


€1.75 = c

1 Ceannaigh dhá uachtar reoite.



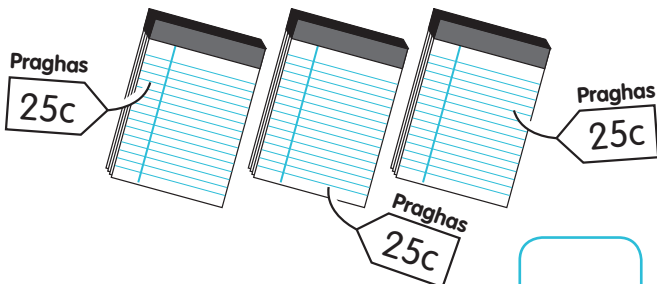
Cad é an costas iomlán?

2 Ceannaigh dhá phaiceád grán rósta.



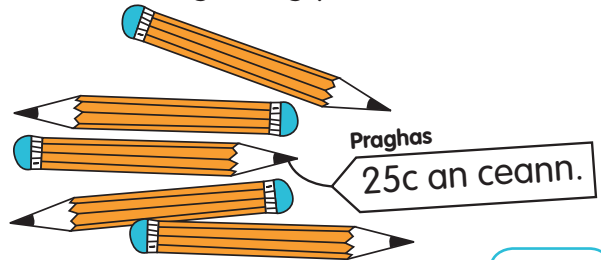
Cad é an costas iomlán?

3 Ceannaigh trí chóipleabhar.



Cad é an costas iomlán?

4 Ceannaigh cúig pheann luaidhe.



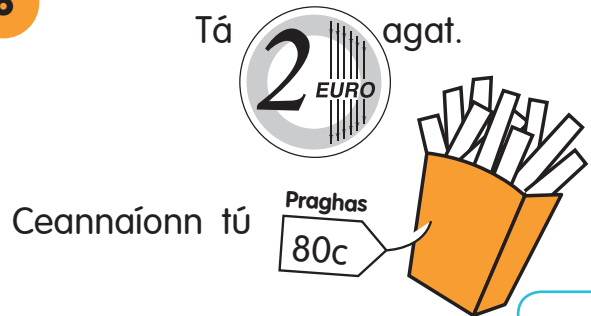
Cad é an costas iomlán?

5 Coigil 50c gach seachtain ar feadh 4 seachtaine.



Cén méid airgid é sin?

6 Tá 2 EURO agat.

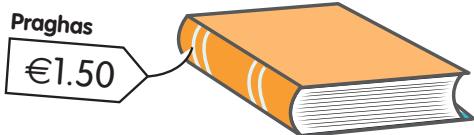


Cén tsóinseáil atá agat?

7 Tá 1 EURO agat.



Ceannaíonn tú



Cén tsóinseáil atá agat?

8 Tá 1 EURO agat.




Ceannaíonn tú



Cén tsóinseáil atá agat?

Picteagram

Na hÉin is Mó a Thaitníonn le Daltaí Rang a Dó



1 Cé mhéad páiste arb é an t-ulchabhán a rogha?

2 Cé mhéad páiste arb é an piongain a rogha?

3 Cé acu éan is mó a roghnaíodh?

4 Cé acu éan is lú a roghnaíodh?

5 Cén líon daltaí atá i Rang a Dó?

6 Cum dhá cheist de do chuid féin faoi na picteagram thuas.

Meáchan

1




Cé mhéad kg?

2



Cé mhéad kg?

3



Cé mhéad kg?

100 gm = 1 kg

Foghlaim



4

1 kg = $\frac{1}{4}$ kg + + +

5

1 kg = $\frac{1}{2}$ kg + +

6

Cuir tic leis an bhfreagra ceart



Meánn sé?

Tuairim is 1 chileagram

Tuairim is $\frac{1}{2}$ cileagram

Tuairim is $\frac{1}{4}$ cileagram



Meánn sé?

Tuairim is 1 chileagram

Tuairim is $\frac{1}{2}$ cileagram

Tuairim is $\frac{1}{4}$ cileagram



Meánn sé?

Tuairim is 1 chileagram

Tuairim is $\frac{1}{2}$ cileagram

Tuairim is $\frac{1}{4}$ cileagram



Meánn sé?

Tuairim is 1 chileagram

Tuairim is $\frac{1}{2}$ cileagram

Tuairim is $\frac{1}{4}$ cileagram



Meánn sé?

Tuairim is 1 chileagram

Tuairim is $\frac{1}{2}$ cileagram

Tuairim is $\frac{1}{4}$ cileagram



Meánn sé?

Tuairim is 1 chileagram

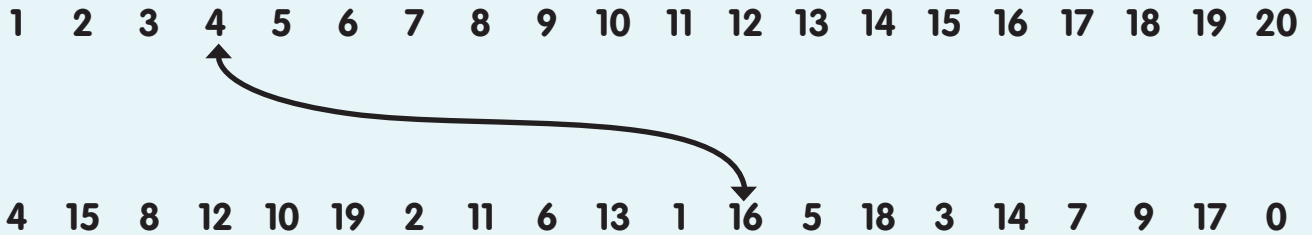
Tuairim is $\frac{1}{2}$ cileagram

Tuairim is $\frac{1}{4}$ cileagram

Suimiú

Agus athghrúpáil

1 Déan 20



2	DA	DA	DA	DA	DA
	39	45	56	34	47
	32	23	17	28	34
	+ 25	+ 28	+ 19	+ 21	+ 12
	<input type="text"/>	<input type="text"/>	<input type="text"/>	<input type="text"/>	<input type="text"/>



Foghlaim

100 cm = 1 mhéadar

3	14 cm	17 cm	8 cm	26 cm	34 cm
	27 cm	8 cm	46 cm	9 cm	18 cm
	+ 46 cm	+ 63 cm	+ 37 cm	+ 19 cm	+ 41 cm
	<input type="text"/>	<input type="text"/>	<input type="text"/>	<input type="text"/>	<input type="text"/>

4	$3 + 1 = 1 + \boxed{3}$	$5 + 2 = 2 + \boxed{}$	$6 + 4 = 4 + \boxed{}$
	$9 + 1 = \boxed{} + 9$	$7 + 3 = \boxed{} + 7$	$8 + \boxed{} = 2 + 7$

5	$28 + 39 = 39 + \boxed{}$	$46 + 47 = \boxed{} + 46$	$72 + \boxed{} = 28 + 72$
	$35 + 18 = 18 + \boxed{}$	$53 + 15 = \boxed{} + 53$	$64 + \boxed{} = 20 + 64$

Dealú

Agus athghrúpáil

DA

$$\begin{array}{r} 235 \\ - 9 \\ \hline 26 \end{array}$$

Athghrúpáil

2 dheich + 15

Dealraith

1

DA

$$\begin{array}{r} 343 \\ - 7 \\ \hline \end{array}$$

13

2

DA

$$\begin{array}{r} 46 \\ - 8 \\ \hline \end{array}$$

3

DA

$$\begin{array}{r} 55 \\ - 6 \\ \hline \end{array}$$

4

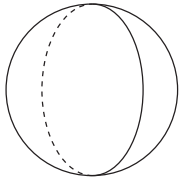
DA

$$\begin{array}{r} 64 \\ - 7 \\ \hline \end{array}$$

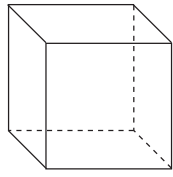
Cruthanna Tríthoiseacha (3-T)

Labhair faoi na cruthanna seo. Cuir síos orthu. Ainmnigh iad. Cuir i gcomparáid lena chéile iad.

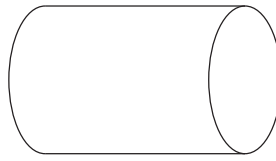
1



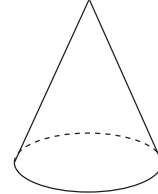
Sféar



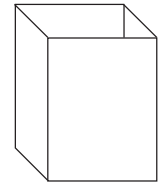
Ciúb



Sorcóir



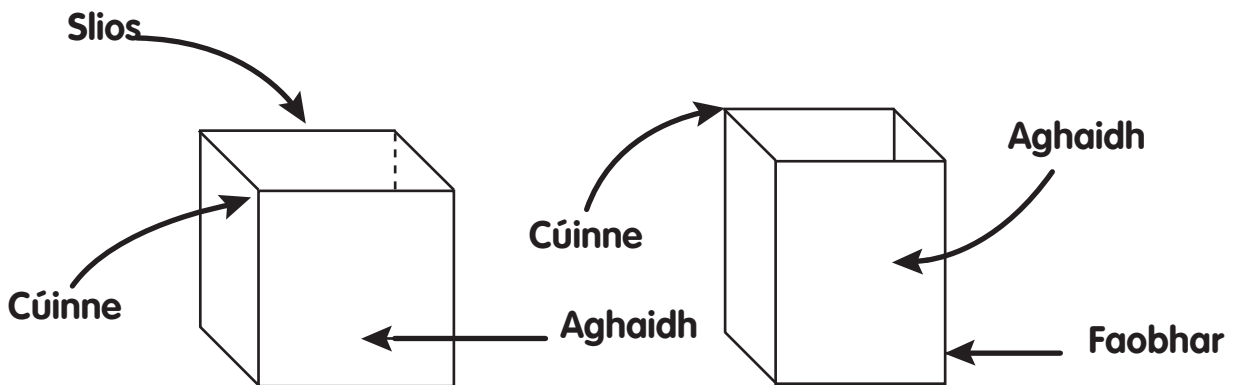
Cón



Ciúbóideach



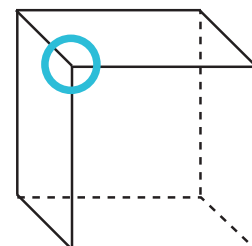
2



	Líon na nAghaidheanna	Líon na bhFaobhar	Líon na gCúinní
Ciúb			
Ciúbóideach			

Tabhair faoi deara:

Foghlaimid na páistí na téarmaí rinn agus reanna ar ball. I Rang a Dó úsáidtear an focal 'cúinne' le cur síos a dhéanamh ar an áit ina mbuaileann trí fhaobhar le chéile.




Tarraing agus gearr amach an cruth.

Céim 1

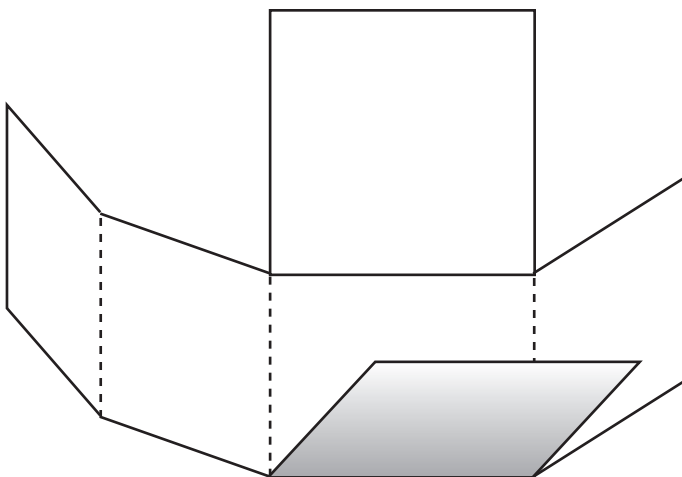
Gearr amach an cíúb agus cuir le chéile é.

Cairtchlár



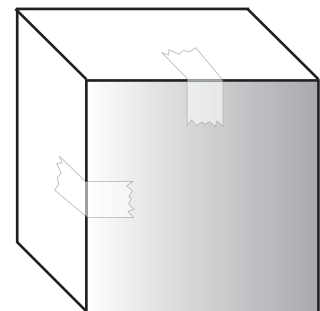
Céim 2

Fill ar feadh na línte poncailthe.



Céim 3

Fill ar feadh na línte poncailthe. Greamaigh le seilitéip é.



Fad

B'fhiú labhairt faoi chúrsaí faid ar dtús, agus neart gníomhaíochtaí tomhais a dhéanamh le stiall 10 cm freisin.

1 Déan stiall 10 cm duit féin 

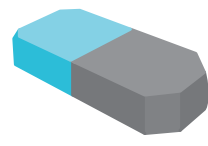
Aimsigh roinnt rudaí beaga den chineál seo agus déan gach ceann díobh a thomhas.



Fad



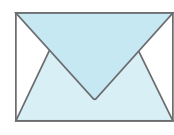
Fad



Fad



Fad








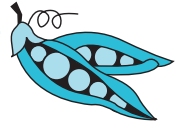






Fad



Fad

2 Tomhais fad an turais atá le déanamh ag gach feithid.

	<input type="text" value="cm"/>			<input type="text" value="cm"/>	
	<input type="text" value="cm"/>			<input type="text" value="cm"/>	
	<input type="text" value="cm"/>			<input type="text" value="cm"/>	

3 Tá mé méadar agus ceintiméadar **nó** m agus cm ar airde.

Faigh rudaí sa teach atá thart ar: 100 cm ar fad, 50 cm ar fad, 25 cm ar fad

	Thart ar 100 cm	Thart ar 50 cm	Thart ar 25 cm
Rud			



Foghlaim

100 cm = 1 m



50 cm = 1/2 m

25 cm = 1/4 m

Siombailí a Úsáid <, >, =


Féach leathanach 5 arís sula dtugann tú faoin leathanach seo.




Tá  níos lú ná 

<


1 Cé acu tacar is lú ball?






>

2 Cé acu tacar is lú ball?





>

3 Scríobh < nó > nó = sna boscaí.

18 <input type="text"/> 20	18 <input type="text"/> 4	7 <input type="text"/> 16
24 <input type="text"/> 17	19 <input type="text"/> 13	19 <input type="text"/> 17
20 <input type="text"/> 15	6 <input type="text"/> 11	14 <input type="text"/> 13
12 <input type="text"/> 20	9 <input type="text"/> 15	18 <input type="text"/> 5
17 <input type="text"/> 16	17 <input type="text"/> 11	20 <input type="text"/> 15


17 <input type="text"/> 18 + 6	9 + 12 <input type="text"/> 17	18 + 6 <input type="text"/> 17 + 3
6 <input type="text"/> 15 + 5	6 + 6 <input type="text"/> 4	2 + 7 <input type="text"/> 5 + 5
14 <input type="text"/> 10 + 5	7 + 12 <input type="text"/> 19	9 + 6 <input type="text"/> 10 + 6

Fadhbanna le Réiteach

Suimiú agus Dealú.

Tarraing pictiúr. Cuideoidh sé leat.

1



Bhuaigh Pádraig 13 mhirlín agus bhuaigh Síle 19 mirlín. Cé mhéad mirlín ar fad a bhuaigh siad?

2

Thug Séamas 9 leabhar leis go dtí an margadh saothair. Thug Bríd 10 leabhar léi agus thug Aoife 11 leabhar léise. Cé mhéad leabhar é sin ar fad?

3

Bhí 17 milseán ag Aoife. D'ith sí 5 mhilseán agus thug sí 5 mhilseán do Cháit. Cé mhéad milseán a bhí fágtha aici?

4

D'fhág Tomás agus Micheál an teach ar 2.30 p.m. D'imir siad peil ar feadh uair an chloig go leith (1½). Cén t-am a stop siad ag imirt?

5

Shiúil toirtís Sheosaimh 10 cm gach lá.
Cén fad a shiúil sí in imeacht seachtaine?
Cé mhéad lá a thógfadh sé uirthi méadar
iomlán a shiúl?

6

Bhí €10 ag Aoife le haghaidh bronntanas
a cheannach do Mhamaí. Bhí €6 ar na
bláthanna agus bhí €2.50 ar an gcárta.
Cén tsóinseáil a bhí aici?

7

Rinne Anna agus Colm 3 nóiméad
scipeála an duine gach maidin. Cé mhéad
maidin a thógfadh sé orthu leathuair an
chloig scipeála a dhéanamh?

8

Bhí rialóir 25 cm an duine ag Sinéad
agus ag Conchúr. Leag siad na rialóirí ar
an mbord as a chéile. Cén fad a bhí sna
rialóirí ansin?

Toilleadh

Labhair faoi seo. Pléigh toilleadh leis na daltaí. Bíodh neart taithí ag na daltaí ar leachtanna a thomhas sula dtugann siad faoin leathanach seo.

1




Cé mhéad lítear?

2



Cé mhéad lítear?

3



Cé mhéad lítear?

4

1 lítear amháin = $\frac{1}{4} l$ + $\frac{1}{4} l$ + +



1 lítear amháin = $\frac{1}{2} l$ + +

1


Líon isteach na boscaí

	< 1 lítear	Tuairim is 1 lítear	> 1 lítear
			
			
			
			


2

	Tuairim is $\frac{1}{4}$ lítir	Tuairim is $\frac{1}{2}$ lítir	Tuairim is 1 lítear
			
			
			
			


Measúnú 2




Leathuair ($\frac{1}{2}$)
tar éis a



Ceathrú ($\frac{1}{4}$)
tar éis a



Leathuair ($\frac{1}{2}$)
tar éis a



Ceathrú ($\frac{1}{4}$)
tar éis a



7

€1.54 = c

8


€2.10 = c

9



























Deireadh Fómhair						
Dé Domhnaigh	Dé Luain	Dé Máirt	Dé Céadaoin	Déardaoin	Dé hAoine	Dé Sathairn
				1	2	3
4	5	6	7	8	9	10
11	12	13	14	15	16	17
18	19	20	21	22	23	24
25	26	27	28	29	30	31

Tá lá i mí Dheireadh Fómhair.

Beidh an 9ú Deireadh Fómhair ann



11 Na torthaí is deise le daltaí Rang 2

8					
7					
6					
5					
4					
3					
2					
1					
	Oráistí	Piorraí	Péitseoga	Caora Fíniúna	Bananaí

Cé mhéad páiste ar fearr leo úlla?

Cé mhéad páiste ar fearr leo bananaí?

Cé mhéad páiste ar fearr leo piorraí?

Cé mhéad páiste ar fearr leo péitseoga?


12 1 kg = + 1/4 kg +

13 1 mhéadar = cm

(1/2) leathmhéadar = cm

(1/4) ceathrú méadair = cm

14 Tomhais turas na feithide le rialóir



cm

15	DA	DA	DA
	56	64	47
	- 8	- 6	- 28
	<input type="text"/>	<input type="text"/>	<input type="text"/>

16 Líon na gciumhaiseanna

Líon na gcúinní

Líon na n-aghaidheanna

17 Scríobh an comhartha < nó >

20 18


6 10

13 7

An Scór


Suimiú Leantach

1




Cé mhéad sciathán?
(Comhair i ndónna).

2




Cé mhéad súil?
(Comhair i ndónna).

3




Cé mhéad súil?
(Comhair i dtríonna).

4



Cé mhéad slios?
(Comhair i dtríonna).

5



Cé mhéad slios?
(Comhair i gceathaireanna).

6




Cé mhéad spota?
(Comhair i séanna.)

7



Cé mhéad cos?
(Comhair in ochtanna).

8



Cé mhéad cos?
(Comhair in ochtanna).

Patrún Uimhreacha

1

1	2	3	4	5	6	7	8	9	10
11	12	13	14	15	16	17	18	19	20
21	22	23	24	25	26	27	28	29	30
31	32	33	34	35	36	37	38	39	40
41	42	43	44	45	46	47	48	49	50
51	52	53	54	55	56	57	58	59	60
61	62	63	64	65	66	67	68	69	70
71	72	73	74	75	76	77	78	79	80
81	81	83	84	85	86	87	88	89	90
91	92	93	94	95	96	97	98	99	100

Dathaigh gach dara (2ú) huimhir.
Comhair i ndónna. Foghlaim 2, 4, 6,...

2

1	2	3	4	5	6	7	8	9	10
11	12	13	14	15	16	17	18	19	20
21	22	23	24	25	26	27	28	29	30
31	32	33	34	35	36	37	38	39	40
41	42	43	44	45	46	47	48	49	50
51	52	53	54	55	56	57	58	59	60
61	62	63	64	65	66	67	68	69	70
71	72	73	74	75	76	77	78	79	80
81	81	83	84	85	86	87	88	89	90
91	92	93	94	95	96	97	98	99	100

Dathaigh gach tríú (3ú) huimhir.
Comhair i dtríonna. Foghlaim 3, 6, 9...

3

1	2	3	4	5	6	7	8	9	10
11	12	13	14	15	16	17	18	19	20
21	22	23	24	25	26	27	28	29	30
31	32	33	34	35	36	37	38	39	40
41	42	43	44	45	46	47	48	49	50
51	52	53	54	55	56	57	58	59	60
61	62	63	64	65	66	67	68	69	70
71	72	73	74	75	76	77	78	79	80
81	81	83	84	85	86	87	88	89	90
91	92	93	94	95	96	97	98	99	100

Dathaigh gach ceathrú (4ú) huimhir.
Comhair i gceathaireanna. Foghlaim 4, 8, 12...

4

1	2	3	4	5	6	7	8	9	10
11	12	13	14	15	16	17	18	19	20
21	22	23	24	25	26	27	28	29	30
31	32	33	34	35	36	37	38	39	40
41	42	43	44	45	46	47	48	49	50
51	52	53	54	55	56	57	58	59	60
61	62	63	64	65	66	67	68	69	70
71	72	73	74	75	76	77	78	79	80
81	81	83	84	85	86	87	88	89	90
91	92	93	94	95	96	97	98	99	100

Dathaigh gach cúigiú (5ú) huimhir.
Comhair i gcúigeanna. Foghlaim 5, 10, 15...

Suimiú

Breathnaigh leathanach 7 arís sula dtugann tú faoin leathanach seo.

1 Déan 10 (ar dtús) agus suimigh ansin.

$$\begin{array}{r} \text{DA} \\ 28 \\ 34 \\ + 12 \\ \hline \end{array}$$

$$\begin{array}{r} \text{DA} \\ 29 \\ 37 \\ + 11 \\ \hline \end{array}$$

$$\begin{array}{r} \text{DA} \\ 27 \\ 13 \\ + 23 \\ \hline \end{array}$$

$$\begin{array}{r} \text{DA} \\ 25 \\ 22 \\ + 15 \\ \hline \end{array}$$

$$\begin{array}{r} \text{DA} \\ 14 \\ 38 \\ + 26 \\ \hline \end{array}$$

2

$$\begin{array}{r} \text{DA} \\ 27 \\ 13 \\ + 10 \\ \hline \end{array}$$

$$\begin{array}{r} \text{DA} \\ 25 \\ 23 \\ + 15 \\ \hline \end{array}$$

$$\begin{array}{r} \text{DA} \\ 36 \\ 21 \\ + 14 \\ \hline \end{array}$$

$$\begin{array}{r} \text{DA} \\ 29 \\ 32 \\ + 21 \\ \hline \end{array}$$

$$\begin{array}{r} \text{DA} \\ 26 \\ 14 \\ + 27 \\ \hline \end{array}$$

3

$$\begin{array}{r} \text{DA} \\ 35 \\ 15 \\ + 13 \\ \hline \end{array}$$

$$\begin{array}{r} \text{DA} \\ 28 \\ 32 \\ + 18 \\ \hline \end{array}$$

$$\begin{array}{r} \text{DA} \\ 27 \\ 23 \\ + 15 \\ \hline \end{array}$$

$$\begin{array}{r} \text{DA} \\ 32 \\ 10 \\ + 18 \\ \hline \end{array}$$

$$\begin{array}{r} \text{DA} \\ 20 \\ 29 \\ + 31 \\ \hline \end{array}$$

4

$$\begin{array}{r} \text{DA} \\ 24 \\ 21 \\ + 26 \\ \hline \end{array}$$

$$\begin{array}{r} \text{DA} \\ 17 \\ 21 \\ + 33 \\ \hline \end{array}$$

$$\begin{array}{r} \text{DA} \\ 41 \\ 19 \\ + 10 \\ \hline \end{array}$$

$$\begin{array}{r} \text{DA} \\ 25 \\ 15 \\ + 20 \\ \hline \end{array}$$

$$\begin{array}{r} \text{DA} \\ 26 \\ 24 \\ + 38 \\ \hline \end{array}$$

5

$$\begin{array}{r} \text{DA} \\ 28 \\ 13 \\ + 22 \\ \hline \end{array}$$

$$\begin{array}{r} \text{DA} \\ 29 \\ 31 \\ + 10 \\ \hline \end{array}$$

$$\begin{array}{r} \text{DA} \\ 11 \\ 21 \\ + 19 \\ \hline \end{array}$$

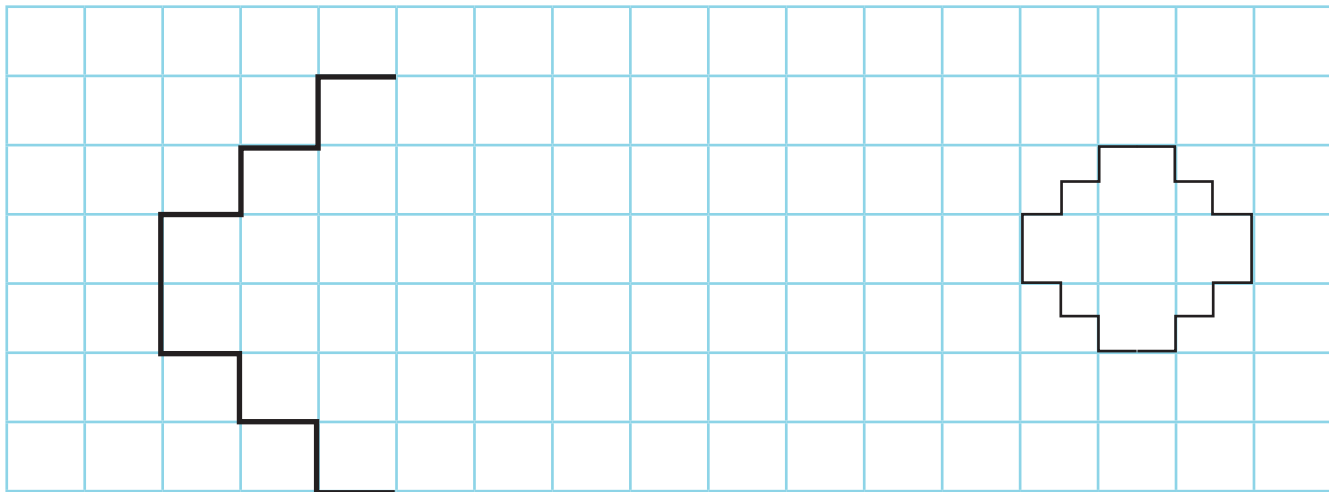
$$\begin{array}{r} \text{DA} \\ 28 \\ 35 \\ + 12 \\ \hline \end{array}$$

$$\begin{array}{r} \text{DA} \\ 19 \\ 28 \\ + 1 \\ \hline \end{array}$$


An tSiméadracht

Tarraing an leath eile.

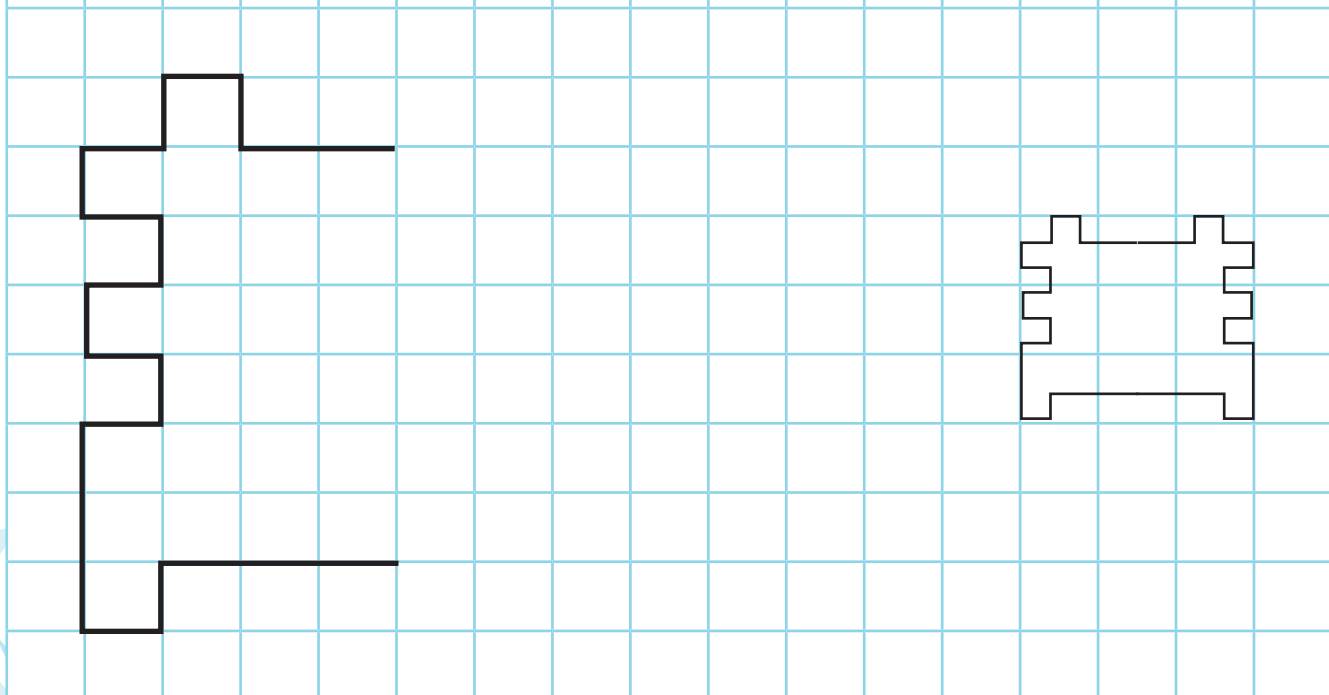
1



2



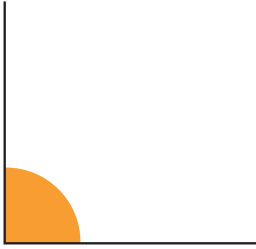
3



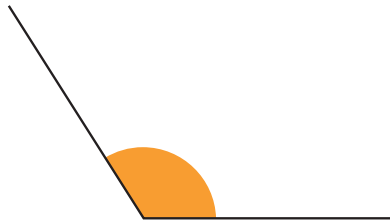
Uillinneacha sa Saol

Labhair faoi uillinneacha.

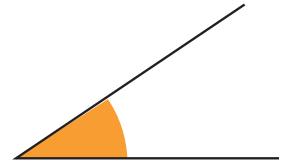
1



Dronuillinn



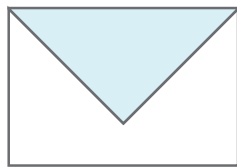
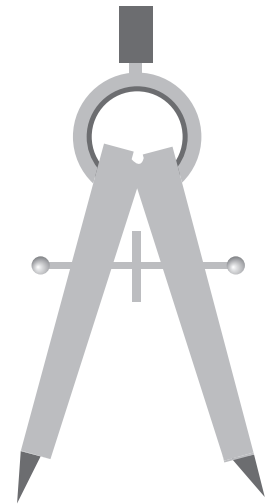
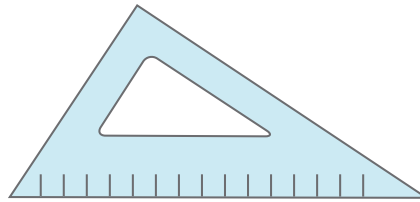
Maoluillinn



Géaruillinn

2

Labhair faoi na huillinneacha thíos.



3



Faigh na huillinneacha san fhocal MATA.

MATA

Scríobh d'ainm féin le ceannlitreacha. Cé mhéad uillinn atá i d'ainm féin?

4

Ainmnigh na huillinneacha thíos. Déan le do chorp féin iad.




Treo


1			5			9	
					18		
			46				
						70	
							100

Treoir

 Téigh céim amháin ar dheis.





















 Téigh céim amháin ar chlé.

 Téigh céim amháin suas.

 Téigh céim amháin síos.

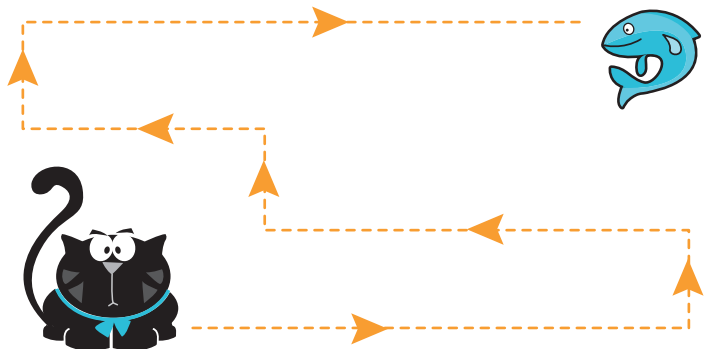
1 Tosaigh anseo.

Cá bhfuil tú?

5						<input type="text" value="8"/>
9						<input type="text"/>
18						<input type="text"/>
46						<input type="text"/>

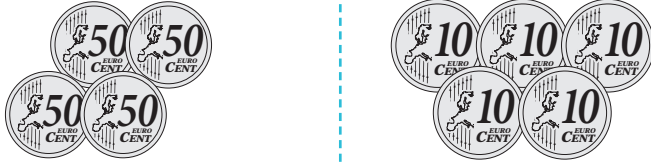

2 Tá an cat ag iarraidh an t-iasc a aimsiú. Cuir síos ar a thuras.

Cabhróidh na frásaí seo leat:
 casann sé ar dheis, casann sé ar chlé,
 téann sé suas, téann sé ar aghaidh,
 an chéad chasadh ar chlé,
 an dara casadh ar dheis.



Airgead

1

Bhí airgead agam:		€1.80
Chaith mé:	€1.30	
Cad atá fágtha agam?	20 cent	

2

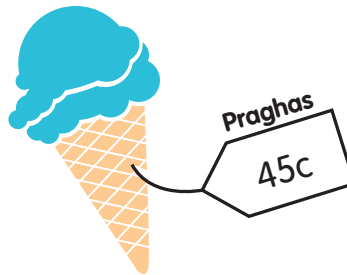
Cén costas atá ar 3 oráiste?



Cen tsóinseáil a fuair mé as 2 euro?

3

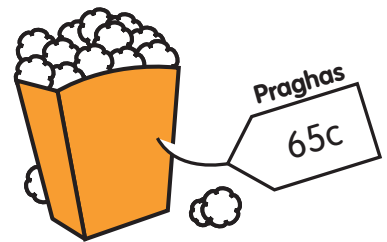
Cén costas atá ar 3 uachtar reoite?



Cen tsóinseáil a fuair mé as 2 euro?

4

Cén costas atá ar 3 bhosca?



Cen tsóinseáil a fuair mé as 2 euro?

5

Déan 2 euro.



Cén bonn atá in easnamh?

6

Déan 2 euro.



Cén bonn atá in easnamh?

Airgead: Fadhbanna

Úsáid airgead ceart. Mínigh do na daltaí go bhfuil níos mó ná bealach amháin ann chun na fadhbanna seo a réiteach.

- 1 Fuair Niamh 50 cent óna hathair inné agus 50 cent inniu.

Cén méid airgid ar fad a fuair sí óna hathair?

$$\square + \square = \square$$

2

Tá a dhá oiread airgid ag Seán agus atá ag Niamh.

Cén méid airgid ar fad atá ag Seán?

$$\square + \square = \square$$

- 3 Cheannaigh mé úll ar 55 cent agus uachtar reoite ar 50 cent.

Cén méid airgid a chaith mé?

$$\square + \square = \square$$

4

Tá €1.50 agam. Cosnaíonn leabhar €1.99.

Cé mhéad eile atá uaim?

$$\square + \square = \square$$

- 5 Cheannaigh Mamaí 60 stampa Nollag. D'úsáid sí 45 stampa ar an Luan.

Cé mhéad stampa a bhí fágtha aici?

$$\square + \square = \square$$

6

€1.70 atá ar 2 phaicéad síolta.

Céard a chosnaíonn paicéad amháin?

$$\square + \square = \square$$

- 7 Scríobh scéilín faoi gach ceann de na habairtí uimhreach seo.

$$€1.40 + 40c = €1.80$$

$$80c + 40c = €1.20$$

$$50c + 50c + 50c = €1.50$$

Suimiú

Suimigh, agus athghrúpáil nuair is gá.

1

DA	DA	DA	DA	DA
38	19	27	25	24
31	24	42	32	17
+ 10	+ 21	+ 20	+ 12	+ 36
<input type="text"/>	<input type="text"/>	<input type="text"/>	<input type="text"/>	<input type="text"/>

2

DA	DA	DA	DA	DA
25	36	25	39	42
23	31	30	13	18
+ 21	+ 12	+ 14	+ 21	+ 18
<input type="text"/>	<input type="text"/>	<input type="text"/>	<input type="text"/>	<input type="text"/>

3

DA	DA	DA	DA	DA
18	27	31	20	28
12	33	40	29	41
+ 17	+ 14	+ 18	+ 31	+ 20
<input type="text"/>	<input type="text"/>	<input type="text"/>	<input type="text"/>	<input type="text"/>

4

DA	DA	DA	DA	DA
39	41	25	26	37
20	29	15	14	13
+ 33	+ 10	+ 20	+ 12	+ 15
<input type="text"/>	<input type="text"/>	<input type="text"/>	<input type="text"/>	<input type="text"/>

5

DA	DA	DA	DA	DA
36	19	25	31	28
0	28	45	40	31
+ 42	+ 10	+ 20	+ 13	+ 10
<input type="text"/>	<input type="text"/>	<input type="text"/>	<input type="text"/>	<input type="text"/>

Dealú

An gá athghrúpáil? Scríobh an freagra ar dtús. Cuir **Tá** **T** nó **Níl** **N** sa bhosca ansin.

1

$\begin{array}{r} 49 \\ - 27 \\ \hline \square \end{array}$	$\begin{array}{r} 47 \\ - 28 \\ \hline \square \end{array}$	$\begin{array}{r} 46 \\ - 18 \\ \hline \square \end{array}$	$\begin{array}{r} 49 \\ - 34 \\ \hline \square \end{array}$	$\begin{array}{r} 55 \\ - 34 \\ \hline \square \end{array}$
$\begin{array}{r} 35 \\ - 27 \\ \hline \square \end{array}$	$\begin{array}{r} 57 \\ - 26 \\ \hline \square \end{array}$	$\begin{array}{r} 59 \\ - 25 \\ \hline \square \end{array}$	$\begin{array}{r} 57 \\ - 24 \\ \hline \square \end{array}$	$\begin{array}{r} 48 \\ - 26 \\ \hline \square \end{array}$

2 Náid

$\begin{array}{r} 20 \\ - 15 \\ \hline \square \end{array}$	$\begin{array}{r} 20 \\ - 19 \\ \hline \square \end{array}$	$\begin{array}{r} 20 \\ - 17 \\ \hline \square \end{array}$	$\begin{array}{r} 20 \\ - 11 \\ \hline \square \end{array}$	$\begin{array}{r} 20 \\ - 16 \\ \hline \square \end{array}$
---	---	---	---	---



Má tá an digit thuas níos lú ná an digit thíos, beidh ort athghrúpáil.

3

$\begin{array}{r} 42 \\ - 14 \\ \hline \square \end{array}$	$\begin{array}{r} 64 \\ - 26 \\ \hline \square \end{array}$	$\begin{array}{r} 44 \\ - 17 \\ \hline \square \end{array}$	$\begin{array}{r} 73 \\ - 19 \\ \hline \square \end{array}$	$\begin{array}{r} 85 \\ - 64 \\ \hline \square \end{array}$
$\begin{array}{r} 81 \\ - 46 \\ \hline \square \end{array}$	$\begin{array}{r} 82 \\ - 56 \\ \hline \square \end{array}$	$\begin{array}{r} 72 \\ - 58 \\ \hline \square \end{array}$	$\begin{array}{r} 57 \\ - 18 \\ \hline \square \end{array}$	$\begin{array}{r} 61 \\ - 28 \\ \hline \square \end{array}$
$\begin{array}{r} 56 \\ - 29 \\ \hline \square \end{array}$	$\begin{array}{r} 93 \\ - 54 \\ \hline \square \end{array}$	$\begin{array}{r} 63 \\ - 29 \\ \hline \square \end{array}$	$\begin{array}{r} 51 \\ - 13 \\ \hline \square \end{array}$	$\begin{array}{r} 81 \\ - 27 \\ \hline \square \end{array}$

Dealraigh agus athghrúpáil nuair is gá.

1

$$\begin{array}{r} \text{DA} \\ 41 \\ - 27 \\ \hline \end{array}$$

$$\begin{array}{r} \text{DA} \\ 54 \\ - 21 \\ \hline \end{array}$$

$$\begin{array}{r} \text{DA} \\ 57 \\ - 18 \\ \hline \end{array}$$

$$\begin{array}{r} \text{DA} \\ 47 \\ - 23 \\ \hline \end{array}$$

$$\begin{array}{r} \text{DA} \\ 63 \\ - 29 \\ \hline \end{array}$$

2

$$\begin{array}{r} \text{DA} \\ 74 \\ - 27 \\ \hline \end{array}$$

$$\begin{array}{r} \text{DA} \\ 85 \\ - 12 \\ \hline \end{array}$$

$$\begin{array}{r} \text{DA} \\ 92 \\ - 46 \\ \hline \end{array}$$

$$\begin{array}{r} \text{DA} \\ 67 \\ - 46 \\ \hline \end{array}$$

$$\begin{array}{r} \text{DA} \\ 53 \\ - 36 \\ \hline \end{array}$$

3

$$\begin{array}{r} \text{DA} \\ 79 \\ - 57 \\ \hline \end{array}$$

$$\begin{array}{r} \text{DA} \\ 82 \\ - 27 \\ \hline \end{array}$$

$$\begin{array}{r} \text{DA} \\ 87 \\ - 41 \\ \hline \end{array}$$

$$\begin{array}{r} \text{DA} \\ 77 \\ - 18 \\ \hline \end{array}$$

$$\begin{array}{r} \text{DA} \\ 69 \\ - 56 \\ \hline \end{array}$$

4

$$\begin{array}{r} \text{DA} \\ 47 \\ - 15 \\ \hline \end{array}$$

$$\begin{array}{r} \text{DA} \\ 72 \\ - 45 \\ \hline \end{array}$$

$$\begin{array}{r} \text{DA} \\ 68 \\ - 55 \\ \hline \end{array}$$

$$\begin{array}{r} \text{DA} \\ 48 \\ - 19 \\ \hline \end{array}$$

$$\begin{array}{r} \text{DA} \\ 61 \\ - 58 \\ \hline \end{array}$$

5

$$\begin{array}{r} \text{DA} \\ 49 \\ - 38 \\ \hline \end{array}$$

$$\begin{array}{r} \text{DA} \\ 96 \\ - 54 \\ \hline \end{array}$$

$$\begin{array}{r} \text{DA} \\ 93 \\ - 35 \\ \hline \end{array}$$

$$\begin{array}{r} \text{DA} \\ 88 \\ - 34 \\ \hline \end{array}$$

$$\begin{array}{r} \text{DA} \\ 75 \\ - 58 \\ \hline \end{array}$$

Measúnú 3

1 Comhair i ndónna go dtí 20.

.....
.....

2 Comhair i dtríonna go dtí 30.

.....
.....

3 Comhair i gceathaireanna go dtí 40.

.....
.....

4 Comhair i séanna go dtí 60.

.....
.....


5 200 cent a bhí ag Pól. Chaith sé €1.45.
Cén méid airgid atá fágtha aige?

Tá fágtha aige .


6 Bhí 300 cent ag Áine. Caith sí €1.75.
Cén méid airgid atá fágtha aici?

Tá fágtha aici .

7 Tarraing chearnóg atá níos mó ná an chearnóg seo.

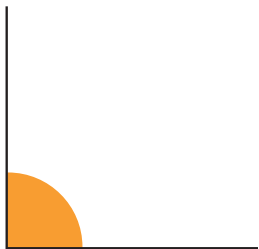


Tarraing an leath eile.




7


Meaitseáil na focail agus na huillinneacha



Maoluillinn



Géaruillinn



Dronuillinn

8

DA	DA	DA	DA	DA
28	45	39	27	36
32	21	42	13	14
+ 22	+ 15	+ 10	+ 32	+ 21
<input type="text"/>	<input type="text"/>	<input type="text"/>	<input type="text"/>	<input type="text"/>

9










DA	DA	DA	DA	DA
98	74	63	85	45
- 59	- 46	- 14	- 27	- 26
<input type="text"/>	<input type="text"/>	<input type="text"/>	<input type="text"/>	<input type="text"/>










10	€1.80 + <input type="text"/> = €2	€1.50 + <input type="text"/> = €2	€1.45 + <input type="text"/> = €2
	€1.35 + <input type="text"/> = €2	€1.70 + <input type="text"/> = €2	€1.55 + <input type="text"/> = €2
	€1.40 + <input type="text"/> = €2	€1.65 + <input type="text"/> = €2	€1.15 + <input type="text"/> = €2










Na ceistanna ar fad le freagairt i gceart.

Measúnú: a bhfuil i gceist

Moltar go mbeadh daltaí ó Rang 1 ar aghaidh, rannpháirteach sa mheasúnú a dhéantar orthu.

Measúnú 1	Féinmheasúnú an dalta			Tuairim an mhúinteora.
Tuiscint				
Cruinneas				
Luas				
Buanna				Múinteoir
Laigí				Múinteoir

Measúnú 2	Féinmheasúnú an dalta			Tuairim an mhúinteora.
Tuiscint				
Cruinneas				
Luas				
Buanna				Múinteoir
Laigí				Múinteoir

Measúnú 3	Féinmheasúnú an dalta			Tuairim an mhúinteora.
Tuiscint				
Cruinneas				
Luas				
Buanna				Múinteoir
Laigí				Múinteoir