

# Mata go Deo! Naíonáin Sóisir




Florence Gavin



# Mata go Deo! Naíonáin Sóisir!

Florence Gavin



Aisling Ní Fharachtáin & Áine Ní Fhlatharta  
a d'aistrigh

 AN GÚM  
Baile Átha Cliath

Ba iad Mulberry Publications a chéadfhoilsigh faoin teideal *MakeSure Maths Junior Infants*

© Florence Gavin, 2006

**An leagan Gaeilge**  
© Foras na Gaeilge, 2013

ISBN 978-1-85791-819-9

Gach ceart ar cosaint. Ní ceadmhach aon chuid den fhoilseachán seo a atáirgeadh, gan cead a fháil roimh ré ón bhfoilsitheoir.

Susan Meaney a dhear agus a chuir suas an cló  
[www.smeaney.com](http://www.smeaney.com)

PB Print a chlóbhuail in Éirinn

**Le fáil ar an bpost uathu seo:**

An Siopa Leabhar  
6 Sráid Fhearchair  
Baile Átha Cliath 2  
[siopa@cnag.ie](mailto:siopa@cnag.ie)

nó

An Ceathrú Póilí  
Cultúrlann Mac Adam-Ó Fiaich  
216 Bóthar na bhFál  
Béal Feirste BT12 6AH  
[leabhair@an4poili.com](mailto:leabhair@an4poili.com)

**Orduithe ó leabhardhíoltóirí chuig:**

Áis  
31 Sráid na bhFíníní  
Baile Átha Cliath 2  
[ais@forasnagaeilge.ie](mailto:ais@forasnagaeilge.ie)

An Gúm, 24-27 Sráid Fhreidric Thuaidh, Baile Átha Cliath 1.



## SNÁITHE


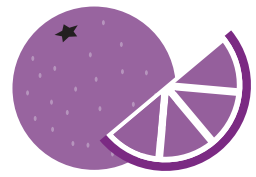
## MATHANACH

<b>Luathghníomhaíochtaí Matamaitice</b>	Sortáil & Rangú	<b>2</b>
<b>Luathghníomhaíochtaí Matamaitice</b>	Meaitseáil	<b>5</b>
<b>Uimhreas</b>	Cé mhéad?	<b>7</b>
<b>Uimhreas</b>	Comparáid & Cur in Ord	<b>9</b>
<b>Uimhreas</b>	Cé mhéad?	<b>10</b>
<b>Uimhreas</b>	Comhcheangal	<b>11</b>
<b>Uimhreas</b>	Comhaireamh	<b>13</b>
<b>Uimhreas</b>	Deighilt	<b>19</b>
<b>Uimhreas</b>	Cé mhéad? (Tobmheas)	<b>23</b>
<b>Uimhreas</b>	Dealú	<b>27</b>
<b>Measúnú 1</b>		<b>28</b>
<b>Ailgéabar</b>	Patrún a fhorbairt	<b>29</b>
<b>Cruth &amp; Spás</b>	Foclóir a leathnú	<b>31</b>
<b>Cruth &amp; Spás</b>	Cruthanna 3-T	<b>32</b>
<b>Cruth &amp; Spás</b>	Cruthanna 2-T	<b>33</b>
<b>Tomhais</b>	Comparáid & Cur in Ord	<b>34</b>
<b>Tomhais</b>	Meáchan	<b>36</b>
<b>Tomhais</b>	Toilleadh	<b>38</b>
<b>Tomhais</b>	An tAm	<b>40</b>
<b>Measúnú 2</b>		<b>44</b>
<b>Uimhreas</b>	Poncanna a cheangal	<b>46</b>
<b>Cruth &amp; Spás</b>	Cruthanna a Dhathú	<b>47</b>
<b>Uimhreas</b>	Cur in Ord	<b>50</b>
<b>Uimhreas</b>	Comhaireamh	<b>52</b>
<b>Uimhreas</b>	Uimhriú	<b>53</b>
<b>Measúnú 3</b>		<b>56</b>

# Sortáil agus Rangú

## Torthaí agus Feithiclí

### 1 Torthaí



### 2 Feithiclí



## Cúpáin agus Buidéil

### 3 Cupáin



### 4 Buidéil



# Sortáil agus Rangú

## Hataí agus Bróga

1

Hataí








2

Bróga



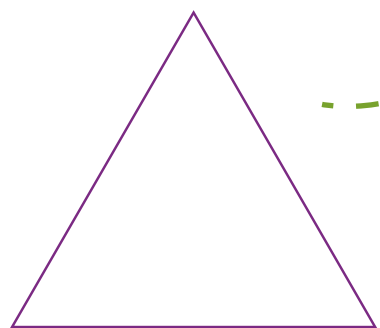
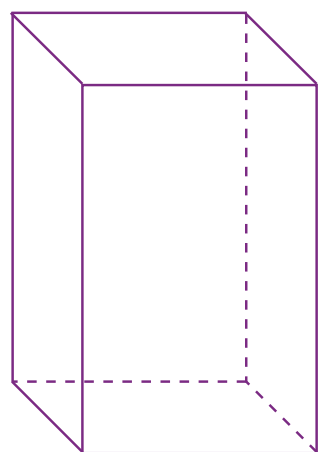

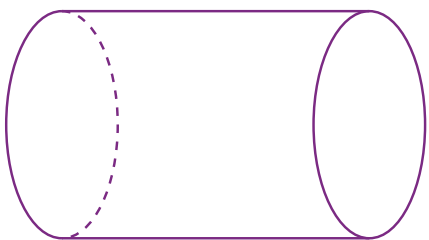
# Meaitseáil

1



# Meaitseáil

1



# Cé Mhéad?

A



Cé mhéad?

1

B




Cé mhéad?

C



Cé mhéad?

D



Cé mhéad?

E




Cé mhéad?


F





Cé mhéad?


# Cé Mhéad?


**A** 


**B** 


**C** 


**D** 

**E** 

**F** 

**G** 

**H** 

**I** 

# Cé acu is líonmhaire?

An bhfuil níos mó  ná  ann?

Tabhair **hata** do gach bobaide.  
Cé mhéad **hata** atá fágtha?



# Cé Mhéad?

Cad é an chéad cheann?

1 Cuir na boscaí in ord. Tosaigh leis an mbosca is lú spotaí. Cuir do mhéar ar a cúig (5).

Activity 1: Ordering boxes by number of spots. A horizontal line is drawn above five empty boxes. Below each box is a square containing a certain number of spots. A pencil icon is shown writing the number '6' in the first box.


2 Cuir na boscaí in ord. Tosaigh leis an mbosca is lú spotaí. Cuir do mhéar ar a ceathair (4).

Activity 2: Ordering boxes by number of spots. A horizontal line is drawn above five empty boxes. Below each box is a square containing a certain number of spots.


# Rudaí a Chomhcheangal

Activity 3: Matching items. Each row shows a group of items on the left, a connector 'agus', and a group of items on the right. The number of items in each group is shown in a box below.

a) agus (3 and 1)

b) agus (2 and empty box)

c) agus agus (1, 1, and empty box)

d) agus (2 and empty box)



# Ceann amháin (1) a chur leis



Cuir a haon le líon na spotaí ar an mbóin Dé agus scríobh an freagra sa bhosca.

<b>A</b>		<input type="text"/>
<b>B</b>		<input type="text"/>
<b>C</b>		<input type="text"/>
<b>D</b>		<input type="text"/>
<b>E</b>		<input type="text"/>
<b>F</b>		<input type="text"/>
<b>G</b>		<input type="text"/>
<b>H</b>		<input type="text"/>

Abair amach os ard na huimhreacha atá scríofa agat.

# Comhaireamh

Labhair faoi seo

- 0** A Náid

---

- 1** A hAon

---

- 2** A Dó

---

- 3** A Trí

---

- 4** A Ceathair

---

- 5** A Cúig

---

- 6** A Sé

---

- 7** A Seacht

---

- 8** A hOcht

---

- 9** A Naoi

---

- 10** A Deich

## Airgead

<b>1</b>	Aon cent (amháin)	
<b>2</b>	Dhá cent	
<b>3</b>	Trí cent	
<b>4</b>	Ceithre cent	
<b>5</b>	Cúig cent	
<b>6</b>	Sé cent	
<b>7</b>	Seacht cent	
<b>8</b>	Ocht cent	
<b>9</b>	Naoi cent	
<b>10</b>	Deich cent	

# Comhaireamh

1



Duine

2



Beirt

3



Triúr

4



Ceathrar

5



Cúigear

6



Seisear

7



Seachtar

8



Ochtar

9



Naonúr

10



Deichniúr

# Comhaireamh

1



Aon chat (amháin)

2



Dhá chat

3



Trí chat

4



Ceithre chat

5



Cúig chat

6



Sé chat

7



Seacht gcat

8



Ocht gcat

9



Naoi gcat


10



Deich gcat


# Comhaireamh

1



Aon iasc (amháin)

2



Dhá .....

3



Trí .....

4


Ceithre .....

5




Cúig .....

6




Sé .....

7




Seacht n-.....

8




Ocht n-.....

9



Naoi n-.....

10

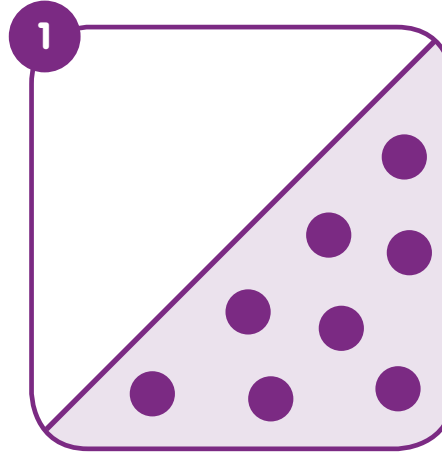


Deich n-.....

# Deighilt


Scéal a hOcht (8). Nialas a chur i láthair.

1



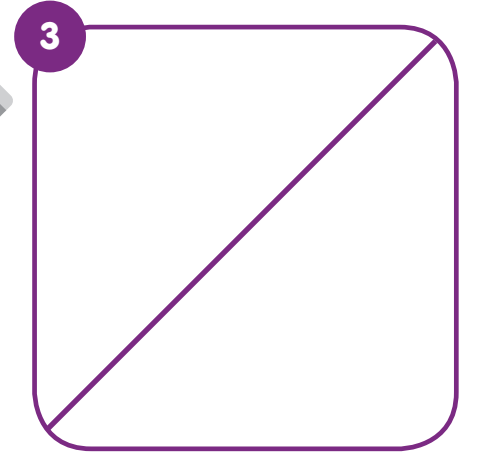
0 agus 8

2



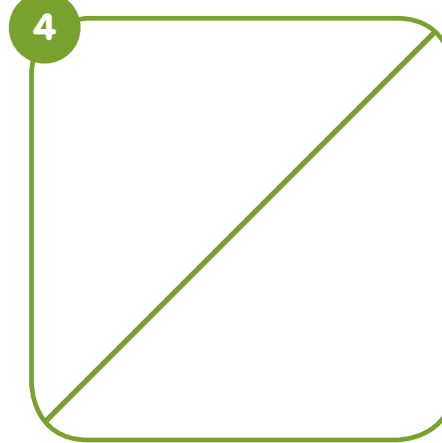
1 agus 7

3



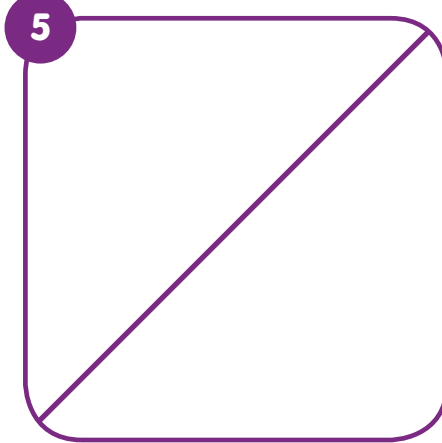
2 agus 6

4




3 agus 5

5



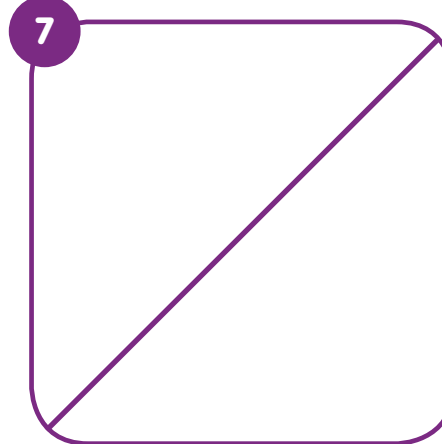
4 agus 4

6



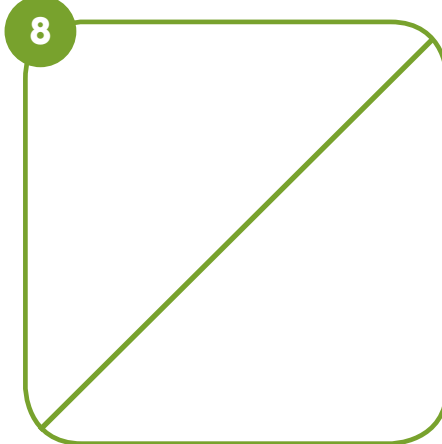
5 agus 3

7




6 agus 2

8



7 agus 1


9




8 agus 0



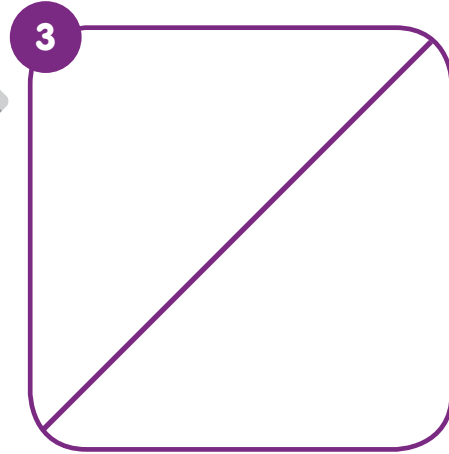
Scéal a hOcht (8). Nialas a chur i láthair.



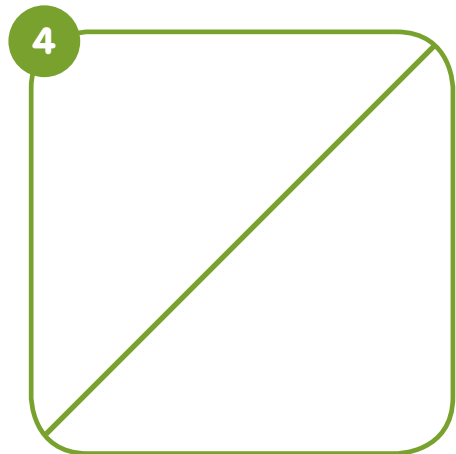
8 agus 0



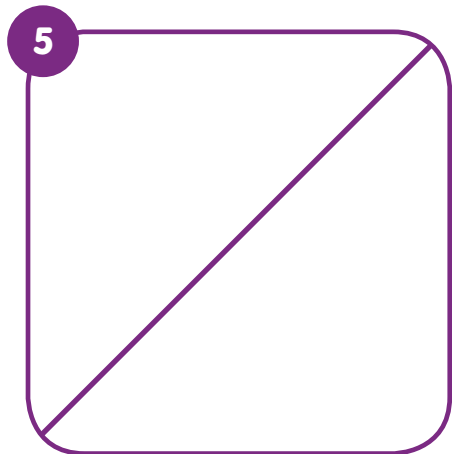
7 agus 1



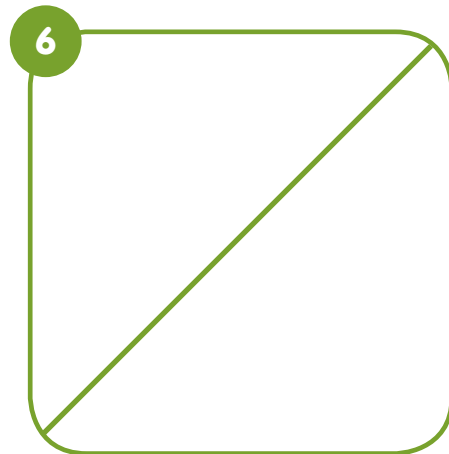
6 agus 2



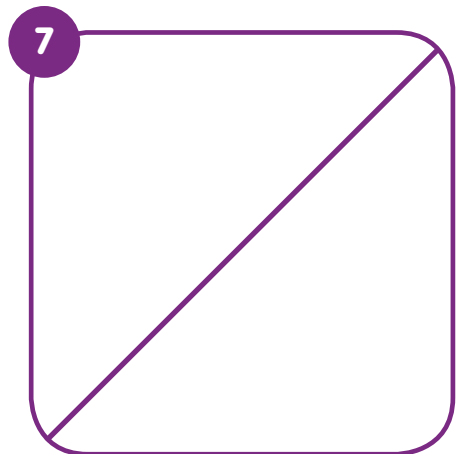
5 agus 3



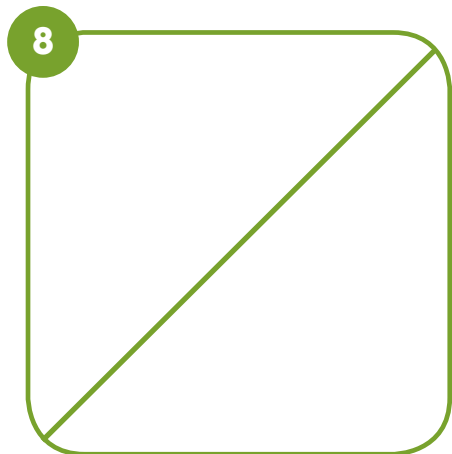
4 agus 4



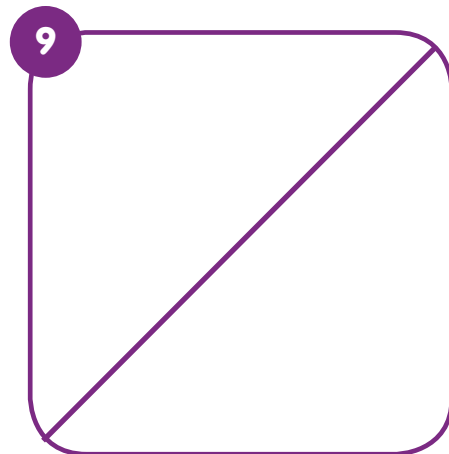
3 agus 5



2 agus 6



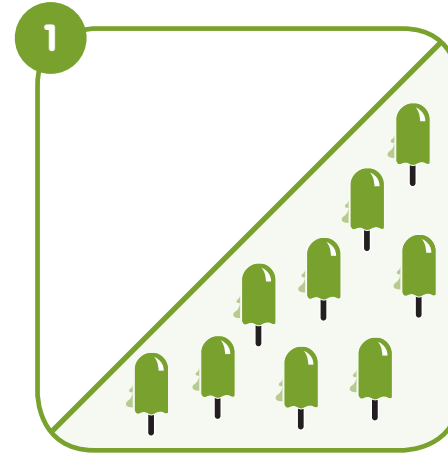
1 agus 7



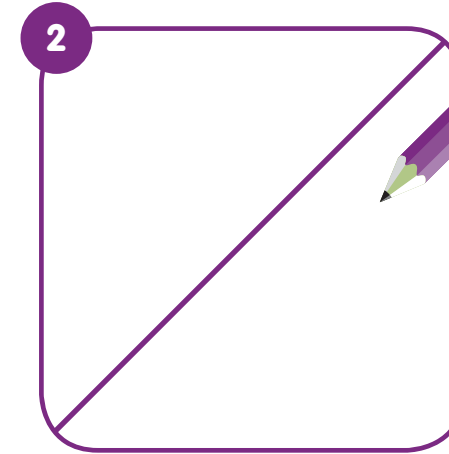
0 agus 8



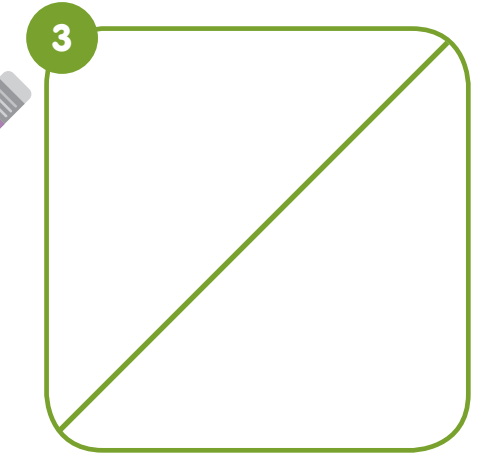
Scéal a Naoi (9). Nialas a chur i láthair.



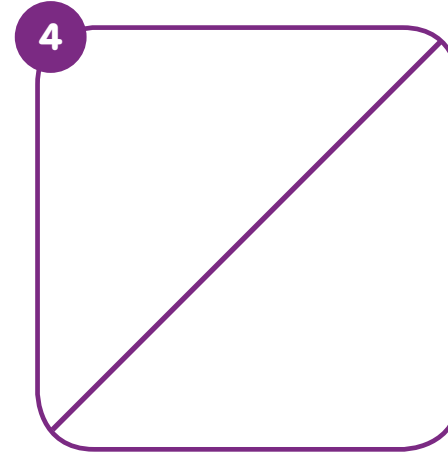
0 agus 9



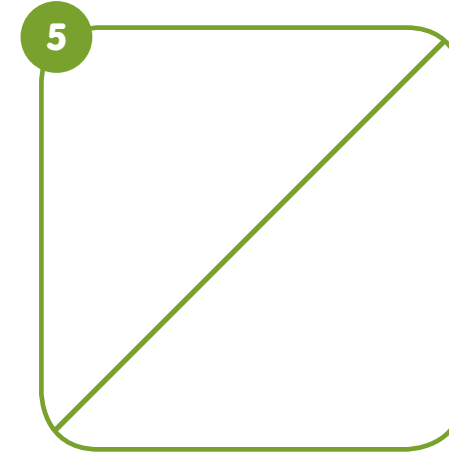
1 agus 8



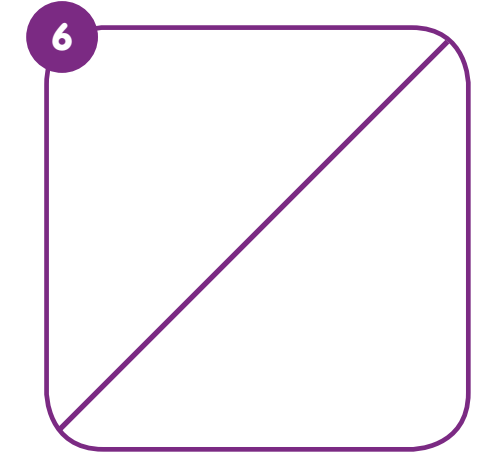
2 agus 7



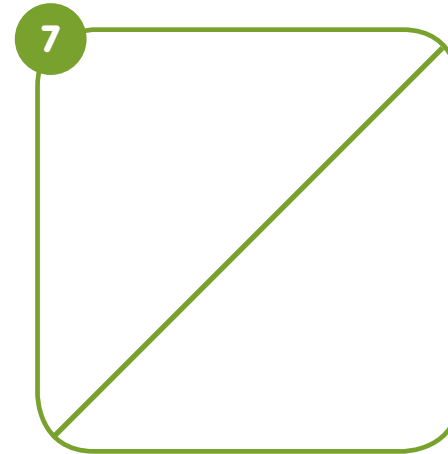
3 agus 6



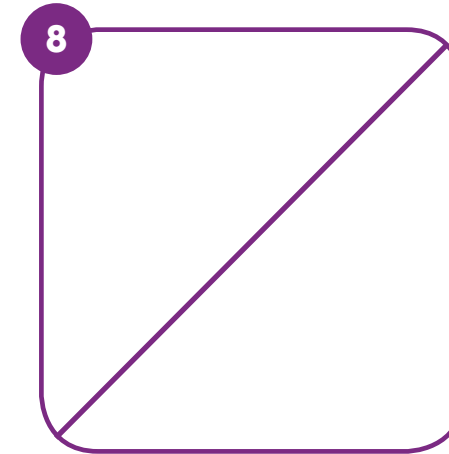
4 agus 5



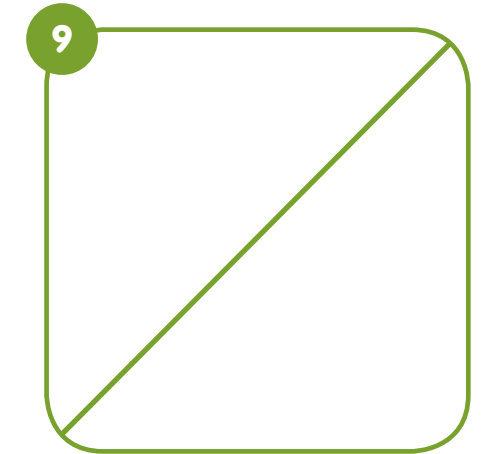
5 agus 4



6 agus 3





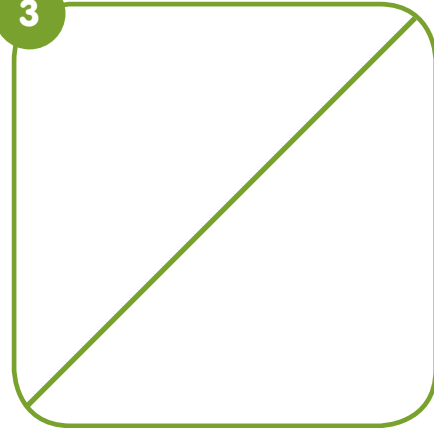

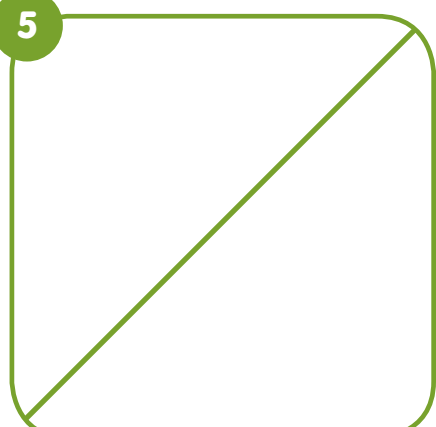
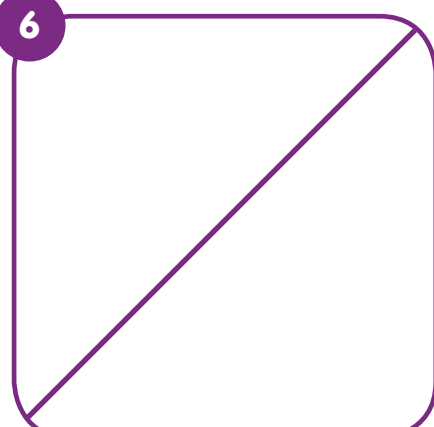

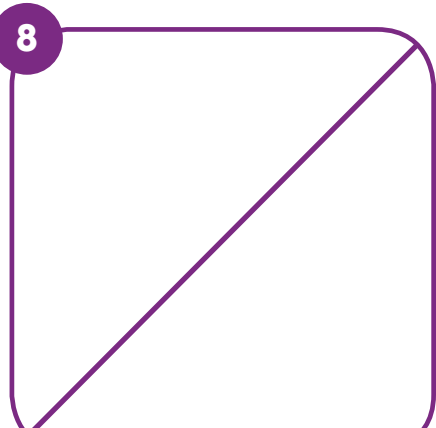
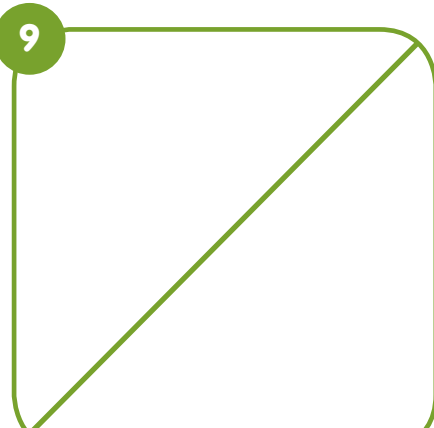
7 agus 2



8 agus 1



Scéal a Naoi (9). Nialas a chur i láthair.






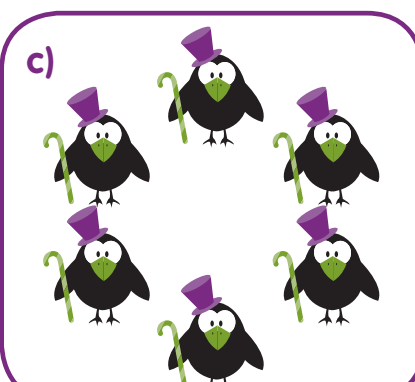

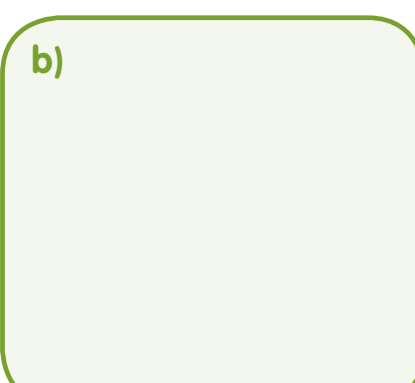

 <p>9 agus 0</p>	 <p>8 agus 1</p>	 <p>7 agus 2</p>
 <p>6 agus 3</p>	 <p>5 agus 4</p>	 <p>4 agus 5</p>
 <p>3 agus 6</p>	 <p>2 agus 7</p>	 <p>1 agus 8</p>



Nóta don mhúinteoir

Léirigh an fhíric mhatamaitice do na daltaí: Is cuma cén bealach a ndéanann tú na nithe a ghrúpáil ní thagann athrú riamh ar líon na nithe sin.




<p>1</p> <p>a) </p> <p>b) </p> <p>c) </p>
<p>2</p> <p>a) </p> <p>b) </p> <p>c) </p>
<p>3</p> <p>a) </p> <p>b) </p> <p>c) </p>


# Cé mhéad?


Cé mhéad iasc atá i ngach bosca? Cuir an uimhir cheart sa bhosca.

Déan túr a sheasann do gach grúpa ar leith le ciúbanna, bloic nó claibíní.


1


a) 


b) 

c) 


2


d) 

e) 

f) 

3

g) 


h) 


i)

Cé mhéad beach atá i ngach bosca? Cuir an uimhir cheart sa bhosca.

Déan túr a sheasann do gach grúpa ar leith le ciúbanna, bloic nó claibíní.


1


a) 


b) 

c)


2


d) 


e) 

f) 

3

g) 

h) 

i) 

# Cé mhéad?

Nóta don mhúinteoir

Iarr ar na daltaí tobmheas a dhéanamh orthu seo.

1 Tomhais cé mhéad atá ann.

2 Meaitseáil (Ceangail leis an uimhir cheart)

0  
5  
4  
6  
3  
1

# Cé mhéad atá fágtha?

Nóta don mhúinteoir

Grúpaí beaga a aithint gan comhaireamh a dhéanamh. Abair a leithéid seo leis an daltaí: 'Amharc go tapa ar an ciúbanna atá i mo lámh agam agus abair cé mhéad díobh atá ann.'



1

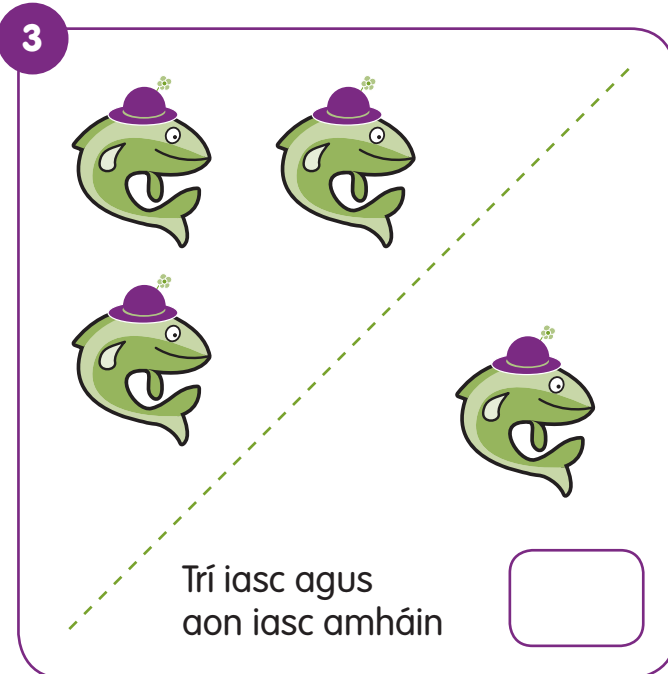

2

3



# Measúnú 1

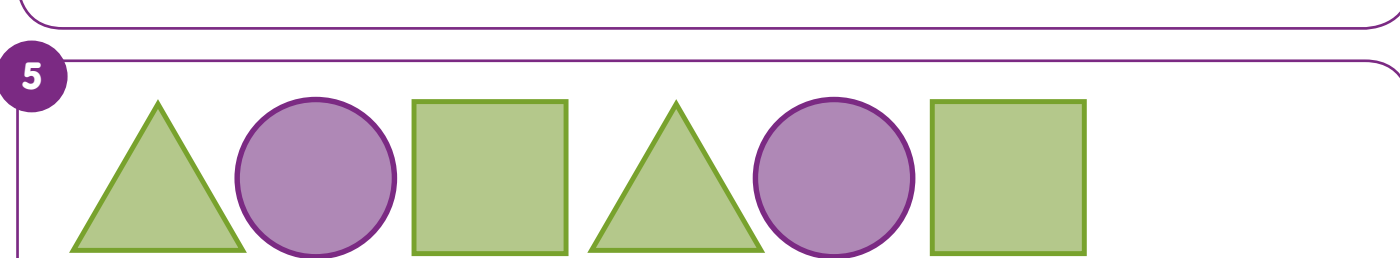
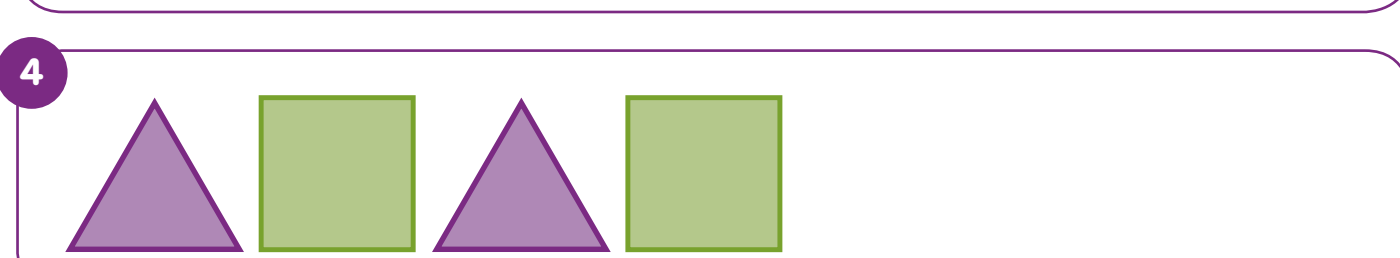
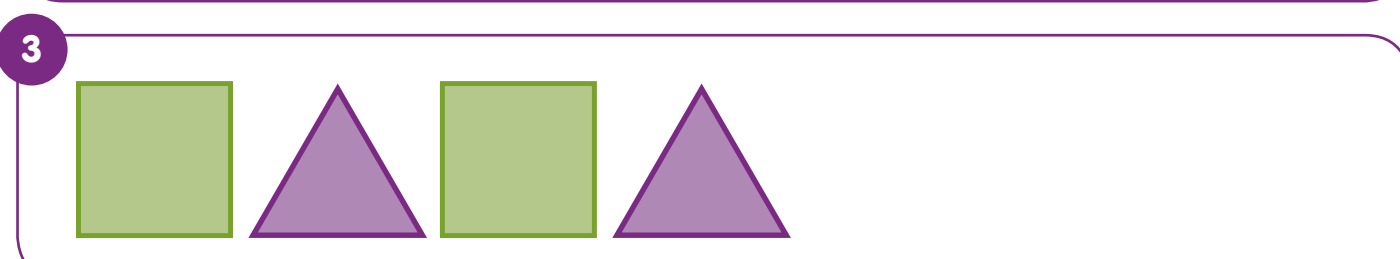
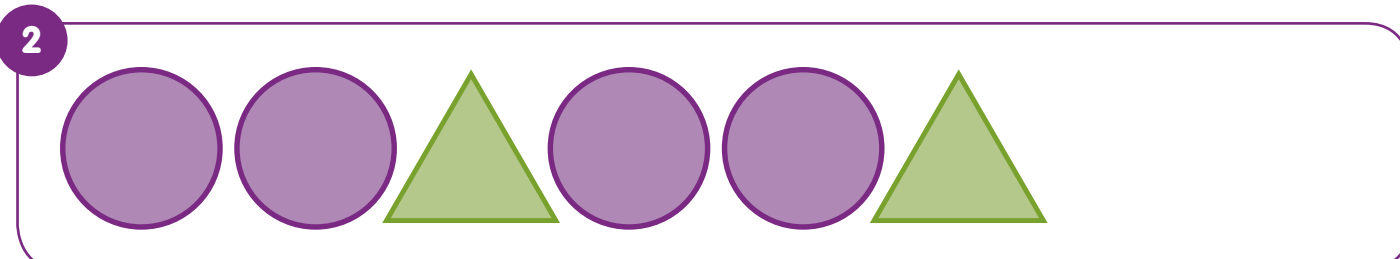
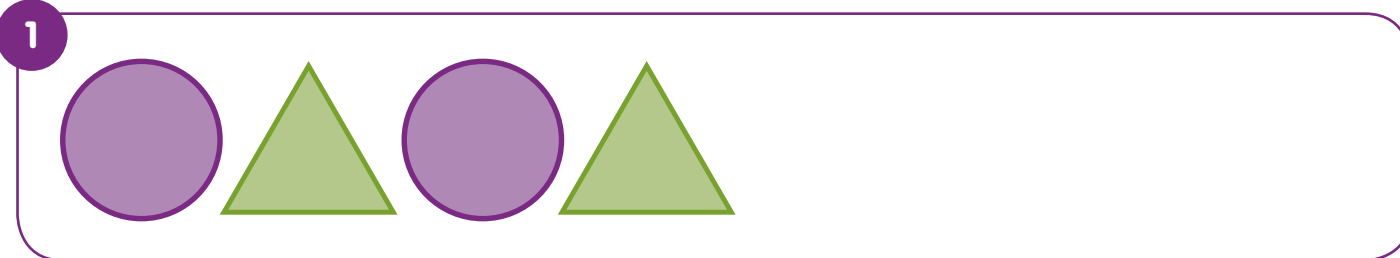
1 Cé mhéad spota atá ar gach bóin Dé?



An Scór

# Cad é an Chéad Cheann Eile?

Lean den phatrún seo. Is leor líniócht gharbh.



- a) Cuir réimse cruthanna (boscaí beaga, cartáin, cannaí stáin, barraí gallúnaí, cnaipí) isteach i mála nó i mbosca.
- b) Dún do shúile agus déan an cruth a mhothú.
- c) Déan cur síos air.
- d) An bhfuil sé fada **nó** gear, garbh **nó** mín, bog **nó** cruá, biorach **nó** cruinn, cearnógach **nó** ciorclach?





# Cad é an Chéad Cheann Eile?


Lean den phatrún seo.

1 

2 

3 

4 

5 

Má scaipimid amach na cúig (5) iasc ar fud an bhosca, an cúig (5) iasc a bheidh ann fós? Bain triail as le claibíní nó cnaipí.




# Foclóir a Fhorleathnú


Cén focal a oireann i ngach cás?

Os cionn Faoi(n) Thuas Thíos Laistigh Lasmuigh In aice Ar


1 Cá bhfuil an t-éan?

a) 


..... an asail atá an t-éan.

b) 


..... asal atá an t-éan.

c) 


..... le ceann an asail atá an t-éan.

d) 


..... ar an talamh atá an t-éan.

e) 


..... dhroim an asail atá an t-éan.

f) 

..... ar an seastán atá an t-éan.

g) 

..... den fháinne atá an t-éan.

h) 

..... den fháinne atá an t-éan.


# Cruthanna 3-T

Cé acu díobh seo is féidir a rollú?



# Cruthanna 2-T

Ainmnigh na cruthanna.




Dún do shúile agus déan cur síos ar na cruthanna.

# Comparáid agus Cur in Ord

Labhair faoi seo.


1 fada níos faide is faide




2 gearr níos giorra is giorra



3 ard níos airde is airde



4 íseal níos ísle is ísle



5 leathan níos leithne is leithne




6 caol níos caoile is caoile




7 tapa níos tapúla is tapúla



8 mall níos moille is moille




9 mór níos mó is mó



10 beag níos lú is lú



11 trom níos troime is troime



12 éadrom níos éadroime is éadroime



# Meáchan

Labhair faoi seo.

## Nóta don mhúinteoir

B'fhiú samplaí coinchréiteacha de na rudaí atá léirithe ar an leathanach seo a úsáid sa rang. D'fhéadfadh na daltaí greim a fháil orthu agus an meáchan atá iontu a mheas.





1

Trom



2

Éadrom



3

Tá an



níos troime ná an



Tá an



níos éadroime ná an



Tá an



níos troime ná an



Tá an



níos éadroime ná an



3

- a) Cé acu is éadroime? Cuir ✓ sa bhosca.  
b) Cé acu is troime? Cuir ✗ sa bhosca.



# Toilleadh

Labhair faoi seo

## Nóta don mhúinteoir



An bealach is fearr le tuiscint cheart ar thoilleadh a fhorbairt sna daltaí ná iad a bheith ag spraoi faoi threoir le cartáin agus soithigh éagsúla.

1



Lán

Folamh

2




Beagnach  
Lán

Beagnach  
Folamh

3

Is féidir an méid céanna leachta a chur sa dá shoitheach seo. (Tá an toilleadh céanna iontu.)



4

Is féidir an méid céanna leachta a chur sa dá shoitheach seo. (Tá an toilleadh céanna iontu.)



4

Coinníonn an



níos mó uisce ná an



Coinníonn an



níos lú uisce ná an



Coinníonn an



níos mó uisce ná an



Coinníonn an



níos lú uisce ná an



4

a) Cé acu soitheach ar féidir an méid is mó uisce a chur ann? Cuir ✓ sa bhosca.

b) Cé acu soitheach ar féidir an méid is lú uisce a chur ann? Cuir ✗ sa bhosca.




# Laethanta na Seachtaine



Dé  
Luain

1


An Luan



Dé  
Máirt

2

An Mháirt



Dé  
Céadaoin

3

An Chéadaoin



Déardaoin

4

An Déardaoin



Dé  
hAoine

5

An Aoine



Dé  
Sathairn

6

An Satharn



Dé  
Domhnaigh

7

An Domhnach



# Míonna na Bliana

1

Mí Eanáir



Eanáir

2

Mí Feabhra



Feabhra

3


Mí an  
Mhárta



Márta

4

Mí Aibreáin



Aibreán

5

Mí na  
Bealtaine



Bealtaine

6


Mí an  
Mheithimh



Meitheamh

7

Mí Iúil



Iúil

8

Mí Lúnasa



Lúnasa

9

Mí Mheán  
Fómhair



Meán  
Fómhair

10

Mí Dheireadh  
Fómhair



Deireadh  
Fómhair

11

Mí na  
Samhna



Samhain

12

Mí na  
Nollaig



Nollaig

## Nóta don mhúinteoir

Ba chóir go mbeadh an páiste ag éirí eolach ar laethanta na seachtaine agus ar mhíonna na bliana faoin staid seo.

- 1 Cad é an chéad cheann? .....
- Cad é an dara ceann? .....
- Cad é an tríú ceann? .....



## 2 An Clog

chun tar éis / i ndiaidh a chlog luath mall



## 3 Na Séasúir



An tEarrach



An Samhradh



An Fómhar



An Geimhreadh

## 4 Féilte na Bliana



Lá Fhéile Pádraig



Oíche Shamhna



An Cháisc



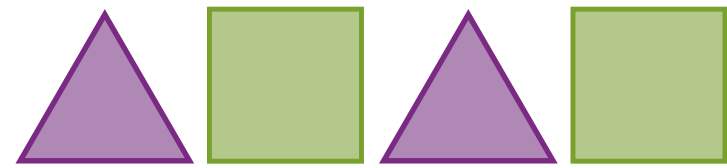
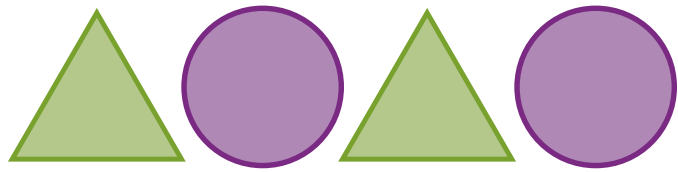
An Nollaig



# Measúnú 2

1

Lean den phatrún. **Nótáil:** Is leor líníocht gharbh.



2

- a) Cuir ✓ leis an gceann is troime.  
 b) Cuir ✗ leis an gceann is éadroime.







3

- a) Cuir ✓ leis an gceann is troime.  
 b) Cuir ✗ leis an gceann is éadroime.







4


- a) Cuir ✓ leis an gceann is troime.  
 b) Cuir ✗ leis an gceann is éadroime.






5

Cé mhéad beach?




6

a) Cuir spota eile leis, sin.

b) Cuir spota eile leis, sin.

c) Cuir spota eile leis, sin.

d) Cuir spota eile leis, sin.

e) Cuir spota eile leis, sin.

f) Cuir spota eile leis, sin.

## Tuairisc an Mhúinteora.

- a) Is féidir leis an dalta laethanta na seachtaine a ainmniú in ord.
- b) Is eol don dalta cén lá a thagann roimh Dé Domhnaigh.
- c) Is eol don dalta cén lá a thagann i ndiaidh Dé Luain.
- d) Is féidir leis an dalta na cruthanna thíos a ainmniú.























- e) Tuigean an dalta an bhrí atá le 'lán'.
- f) Tuigean an dalta an bhrí atá le 'folamh'.
- g) Tuigean an dalta an bhrí atá le 'méideanna cothroma'.











An Scór











# Ceangail na Poncanna











Tosaigh ar a haon (1).











1          

2          

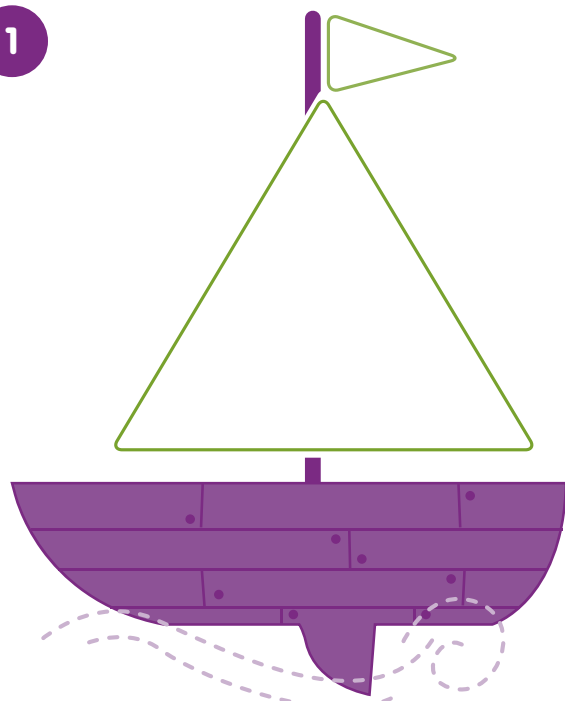
3          

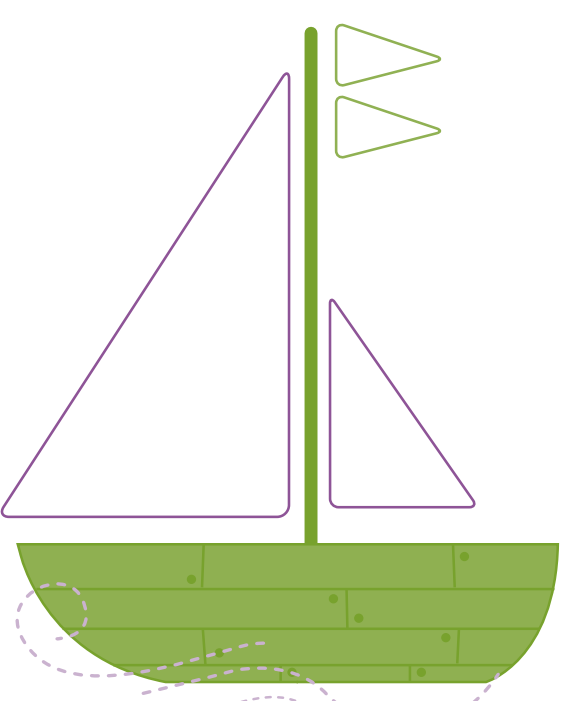
4          

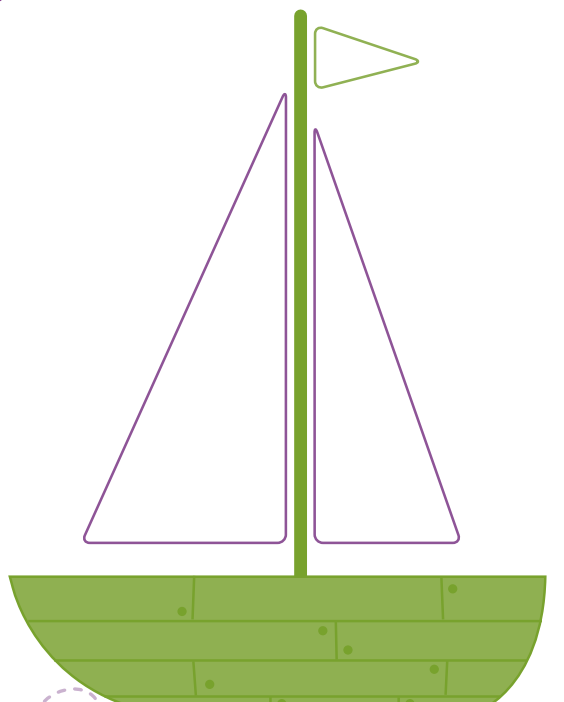
5          

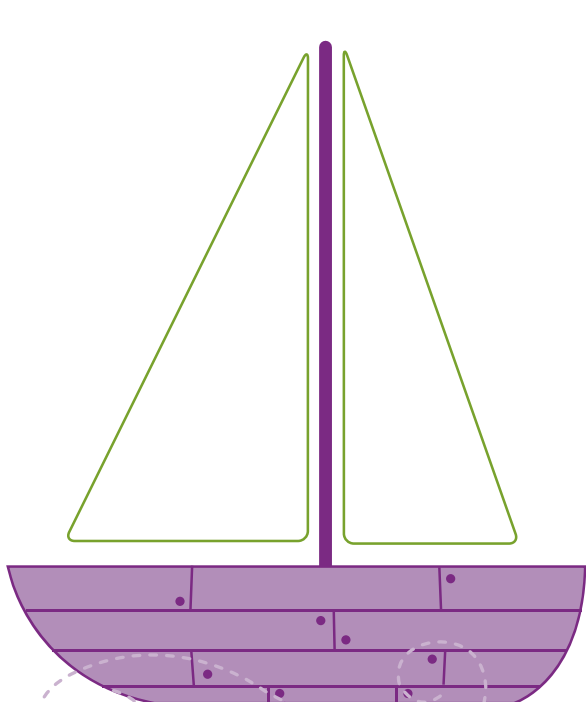
6          

# Dathaigh na Triantáin

1  Cé mhéad triantán?


2  Cé mhéad triantán?

3  Cé mhéad triantán?

4  Cé mhéad triantán?


# Dathaigh na Ciorcail

1



Cé mhéad ciorcal?

2




Cé mhéad ciorcal?

3



Cé mhéad ciorcal?

4



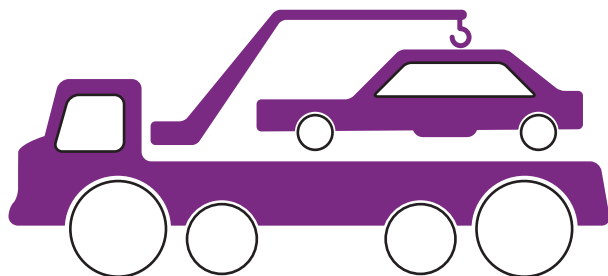
Cé mhéad ciorcal?

5



Cé mhéad ciorcal?

6



Cé mhéad ciorcal?

# Dathaigh na Cearnóga

1



Cé mhéad cearnóg?

2



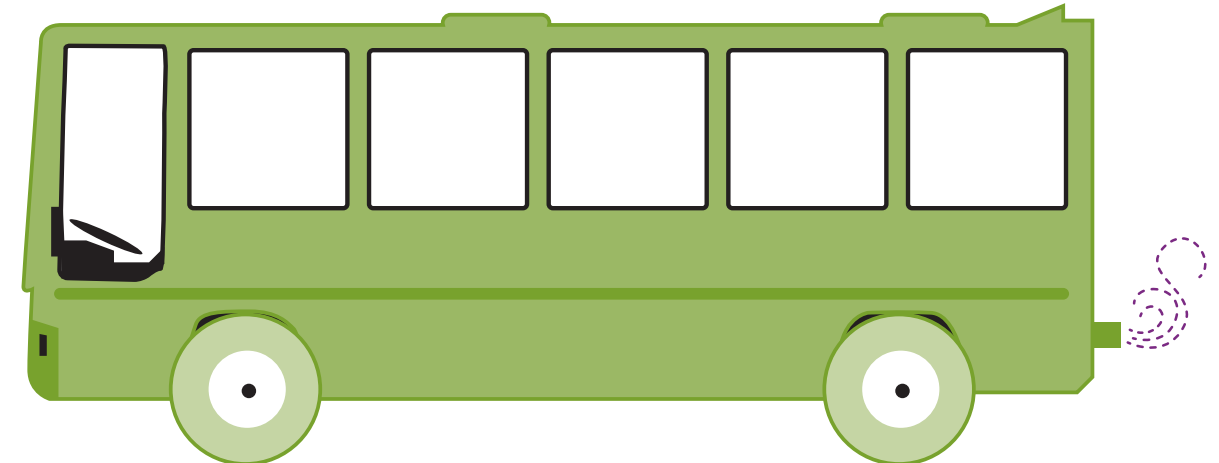
Cé mhéad cearnóg?

3



Cé mhéad cearnóg?

4



Cé mhéad cearnóg?

# Oibríochtaí Uimhirlíne

1 a)

1	2		4		6	7	8	9	10
---	---	--	---	--	---	---	---	---	----

b)

1		3	4		6	7		9	10
---	--	---	---	--	---	---	--	---	----

## Nóta don mhúinteoir



Úsáid bosca agus deich licín nó claibín.  
Caith isteach licín amháin, dhá licín, trí licín etc. faoi seach.  
In éineacht leis na daltaí comhair líon na licíní a thiteann isteach sa bhosca gach uair.  
Líon isteach na bearnaí sna huimhirlínte.

2 a)

	2		4	5	6	7	8	9	
--	---	--	---	---	---	---	---	---	--

b)

					6			9	
--	--	--	--	--	---	--	--	---	--

3 a)

1									
---	--	--	--	--	--	--	--	--	--

b)

		3							
--	--	---	--	--	--	--	--	--	--

## Nóta don mhúinteoir



Úsáid deich leacán talún nó a leithéid.  
Luaigh uimhir óna 1-10 le gach ceann acu. Léimeadh na daltaí orthu ceann i ndiaidh a chéile.  
Líon isteach na bearnaí sna huimhirlínte.



4 a)

			4						
--	--	--	---	--	--	--	--	--	--

b)

				5					
--	--	--	--	---	--	--	--	--	--

# Comhaireamh

1



Aon choinneal (amháin)

2



Dhá choinneal

3



Trí choinneal

4



Ceithre choinneal

5



Cúig choinneal

6



Sé choinneal

7



Seacht goinneal

8



Ocht goinneal

9



Naoi goinneal

10



Deich goinneal

# Coinnle a Chur ar na Cístí.

Tarraing na coinneal ar na cístí.


3



5




6




4



2



7



# Cé mhéad?

Cuir ciorcal timpeall ar an uimhir cheart.


1

a)




1 2 3

b)



3 4 5

c)



1 3 5

d)



5 1 2

e)



1 3 5


f)



2 3 4


2

a)




7 6 9

b)




5 9 6

c)



1 2 10

d)



5 6 8

e)



8 9 7

f)

3 1 0

# Measúnú 3

1


a)

1	2	3		5	6	7		9	10
---	---	---	--	---	---	---	--	---	----

b)


1		3	4	5	6	7	8		10
---	--	---	---	---	---	---	---	--	----

2




1    2    4

3




0    3    5

4




8    7    9

5




5    6    9

6




1

agus



1

agus



7

a)

	2	3		5	6		8	9	
--	---	---	--	---	---	--	---	---	--

b)

1	2		4	5		7		9	10
---	---	--	---	---	--	---	--	---	----

8

Tarraing na coinnle ar an gcíste.

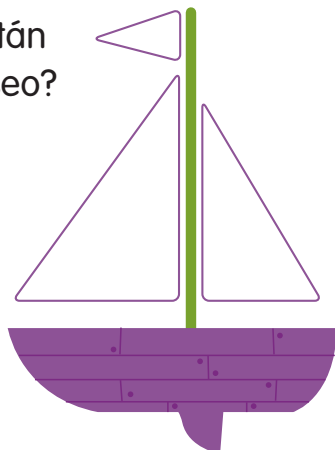


6

9

Cé mhéad triantán atá sa phictiúr seo?

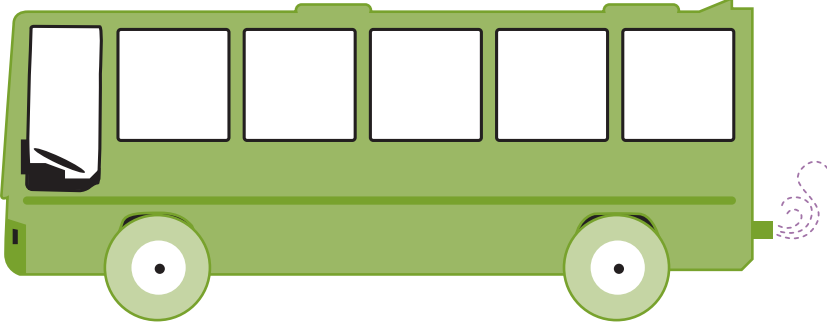
Dathaigh na triantáin.



10

Cé mhéad cearnóg atá sa phictiúr?

Dathaigh na cearnóga.



**Tuairisc an Mhúinteora**

Tuigeann an dalta gur 6 ghluaisteán a bheidh ann i gcónaí fiú má bhogtar iad, má scaiptear amach iad nó má tharraingítear le chéile iad.

Tuigeann     Ní thuigeann

**An Scór**

# Measúnú: a bhfuil i gceist

Measúnú 1	Tuairim an mhúinteora.
Tuiscint	
Cruinneas	
Luas	
Buanna	
Laigí	

Measúnú 2	Tuairim an mhúinteora.
Tuiscint	
Cruinneas	
Luas	
Buanna	
Laigí	

Measúnú 3	Tuairim an mhúinteora.
Tuiscint	
Cruinneas	
Luas	
Buanna	
Laigí	

