

Mata le Chéile

1 & 2

Florence Gavin

Micheál Ó Fathaigh a d'aistrigh

 AN GÚM

Baile Átha Cliath

An leagan Béarla
Ba iad Mulberry Publications a chéadfhoilsigh faoin teideal *Maths Together: 1 & 2*
© Florence Gavin, 1999

An leagan Gaeilge
© Foras na Gaeilge, 2003
ISBN 1-85791-451-1

Gach ceart ar cosaint. Ní ceadmhach aon chuid den fhoilseachán seo a atáirgeadh,
gan cead a fháil roimh ré ón bhfoilsitheoir.

Tá cead ón bhfoilsitheoir ag múinteoirí, áfach, fótachóipeanna a dhéanamh
de leathanaigh lena n-úsáid sa seomra ranga.

Mulberry Publications Teo. a chuir suas an cló

Criterion Press Teo. a chlóbhuail in Éirinn

Le fáil ar an bpost uathu seo:

An Siopa Leabhar,
6 Sráid Fhearchair,
Baile Átha Cliath 2.
ansiopaleabhar@eircom.net

nó

An Ceathrú Póilí,
Cultúrlann Mac Adam–Ó Fiaich,
216 Bóthar na bhFál,
Béal Feirste BT12 6AH.
acpoili@mail.portland.co.uk

Orduithe ó leabhardhioltóirí chuig:

Áis,
31 Sráid na bhFíiní,
Baile Átha Cliath 2.
eolas@forasnagaeilge.ie

An Gúm, 24-27 Sráid Fhreidric Thuaidh, Baile Átha Cliath 1

Clár an Ábhair

Leibhéal 1

Caibidil	Snáithe	Snáithaonad
1	Uimhreas	Comparáid & Cur in Ord; Suimiú; Comhaireamh & Uimhriú
2	Uimhreas; Ailgéabar	Comhaireamh & Uimhriú; Dealú; Ionadluach; Patrúin a fhorleathnú agus a úsáid
3	Cruth & Spás; Uimhreas; Tomhais	Cruthanna 2-T; Cruthanna 3-T; Codáin; Comhaireamh & Uimhriú; Airgead; Am
4	Tomhais; Cruth & Spás; Uimhreas	Am; Cruthanna 2-T; Fad; Siméadracht; Dealú; Suimiú
5	Tomhais; Uimhreas	Airgead; Toilleadh; Codáin

Leibhéal 2

Caibidil	Snáithe	Snáithaonad
6	Uimhreas; Ailgéabar	Oibríochtaí; Patrúin a fhorleathnú agus a úsáid
7	Uimhreas	Comhaireamh & Uimhriú; Oibríochtaí; Patrúin a fhorleathnú agus a úsáid
8	Uimhreas; Tomhais; Ailgéabar	Oibríochtaí; Codáin; Airgead; Cruthanna 2-T; Cruthanna 3-T; Fad; Patrúin a fhorleathnú agus a úsáid
9	Sonraí; Tomhais	Sonraí a léiriú & a léirmhíniú; Am; Meáchan; Toilleadh

Aguisín: Eangacha le haghaidh Cruthanna 3-T

Trialacha

Freagraí

Gníomhaíocht	Snáithe	Caibidil	Leathanaigh
Teanga	Tomhais	1	1, 2, 24
Cónascadh	Uimhreas	1	3, 4
Deighilt	Uimhreas	1	5, 6
Suimiú	Uimhreas	1	7, 8, 9, 10, 13, 23
Tacair, Cruth & Spás	Uimhreas	1	11
Siombailí	Uimhreas, Cruth & Spas	1	14, 15, 16, 17, 18, 19, 20, 21, 22
Am	Tomhais	2	1, 10
Comhaireamh ar aghaidh	Uimhreas	2	2
Comhaireamh	Uimhreas	2	3, 6, 7
Fadhbanna	Uimhreas	2	4, 5
Suimiú	Uimhreas	2	8, 9, 25
Patrúin	Uimhreas	2	11, 12, 13, 14
Dealú	Ailgéabar	2	15, 16
Deiceanna, Aonaid	Uimhreas	2	17, 18, 19, 21, 22, 23, 24, 27, 28, 29
Fadhbanna	Uimhreas	3	1, 5, 7, 19, 21, 22
Suimiú	Uimhreas	3	2, 3, 4
Dealú	Uimhreas	3	4
Airgead	Tomhais	3	6, 7, 8, 19
Cruthanna	Cruth & Spás	3	9, 10, 11
Am	Tomhais	3	12, 13, 22
Comhaireamh	Uimhreas	3	14, 15, 18, 20, 21, 23
An 100-Chearnóg	Ailgéabar	3	16, 24, 25
Deiceanna, Aonaid	Uimhreas	3	17, 26
Deiceanna, Aonaid	Uimhreas	4	1
Am, Laethanta	Tomhais	4	2, 10
Fadhbanna	Uimhreas	4	4, 9, 18
Suimiú	Uimhreas	4	5
Am digiteach	Tomhais	4	6
Athghrúpáil	Uimhreas	4	7, 8, 15
Cruthanna	Cruth & Spás	4	11, 12, 15
Sonraí	Sonraí	4	13
Codáin	Uimhreas	4	1
Teanga	Tomhais	4	16, 17
Meá	Tomhais	4	19
Suimiú	Uimhreas	4	20
Siméadracht	Cruth & Spás	4	21, 22, 23

Gníomhaíocht	Snáithe	Caibidil	Leathanaigh
Fad	Tomhais	4	24, 25
Airgead	Tomhais	4	26
Suimiú	Uimhreas	5	1, 3, 8
Dealú	Tomhais	5	2
Codáin	Uimhreas	5	4, 5
Orduimhreacha	Uimhreas	5	6
Dealú	Uimhreas	5	7, 8
Súil Siar		6	1, 5, 9, 10, 12, 13, 14
Dealú	Uimhreas	6	2
Suimiú	Uimhreas	6	3, 4
Orduimhreacha	Uimhreas	6	6
Deicheanna & Aonaid	Uimhreas	6	6, 8
Fadhbanna	Uimhreas	6	7, 11
An 100-Chearnóg	Ailgéabar	6	15
Tacair	Uimhreas	6	25, 26
Tacair	Uimhreas	7	1
Comhaireamh	Uimhreas	7	2, 3, 5, 14, 15, 16, 17, 19, 20, 21
Suimiú	Uimhreas	7	4, 25, 26
Deicheanna & Aonaid	Uimhreas	7	6, 7, 8, 9, 10, 12, 13
Uimhreacha a chur in ord	Uimhreas	7	11
Orduimhreacha	Uimhreas	7	18
Dealú	Uimhreas	7	22,23
Dealú	Uimhreas	7	24
Suimiú	Uimhreas	8	1
Dealú	Uimhreas	8	2, 3, 4
Airgead	Tomhais	8	5, 6, 7, 8, 9, 10, 11,12
Cruthanna	Cruth & Spás	8	13, 14, 15, 17
Codáin	Uimhreas	8	16
Fad	Tomhais	8	18, 19, 20, 21, 22, 23
Corruimhreacha, Ré-uimhreacha	Uimhreas	8	24
Sonraí	Sonraí	9	1, 2, 3, 4
Am	Tomhais	9	5, 6, 7, 8, 9, 10, 11, 12
Meáchan	Tomhais	9	13, 14, 15
Toilleadh	Tomhais	9	16
Léitheoireacht		4	3
Cruth & Spás	Eangacha	Aguisín	

Réamhrá

Is é cuspóir *Mata le Chéile 1 & 2* cur le tuiscint na ndaltaí ar na príomhchoincheapa atá leagtha amach in *Curaclam na Bunscoile: Matamaitic* (An Roinn Oideachais agus Eolaíochta, 1999). An obair phraiticiúil atá ar fáil sa phacáiste seo, cuirfidh sí le heolas na ndaltaí ar an Matamaitic agus tabharfaidh sí deis dóibh teanga na Matamaitice a fhoghlaim agus a úsáid go beacht.

Déantar coincheapa na Matamaitice a fhorbairt de réir a chéile sa phacáiste seo. Tá deis ag daltaí dá réir sin a gcuid scileanna a fhorbairt de réir a chéile, ar luas a oireann dóibh féin. D'fhéadfaí *Mata le Chéile* a úsáid le rang iomlán, le grúpa daltaí nó le daltaí aonair. D'fhéadfadh codanna éagsúla den phacáiste a bheith in úsáid ag aon am amháin san aon rang amháin, ag brath ar chumas na ndaltaí. Ós ceadmhach leathanaigh *Mata le Chéile* a chóipeáil is féidir leis an múinteoir na coincheapa agus na scileanna a chur i láthair, agus dul siar orthu, ar an gcaoi is fearr a oireann do chumas agus d'fhorbairt na ndaltaí ina rang féin. Bíonn daltaí ann a fhoghlaimíonn coincheapa agus scileanna na Matamaitice go gasta ach is beag dalta a fhoghlaimíonn iad gan dul siar go rialta orthu.

Cuirtear béim ar leith sa churaclam nua ar fhorbairt scileanna teanga. Bíonn béim freisin ar théarmaíocht na Matamaitice a fhoghlaim in éineacht leis na coincheapa agus leis na scileanna. Dá ainneoin sin, áfach, gearradh siar ar an léitheoireacht a oiread agus a d'fhéadfaí sa phacáiste seo sa chaoi is gur féidir leis an múinteoir féin díriú ar fhorbairt na scileanna teanga. Tá go leor leathanach sa phacáiste a chabhróidh go mór leis an múinteoir caint agus plé a spreagadh sa rang má chuirtear i láthair an ranga ar an mbealach cuí iad. Tá leathnaigh eile ann a oireann don obair fhorbartha agus athneartaithe a leanfadh an chéadchur i láthair.

Is gá timpeallacht 'shaibhir' thacúil a chur ar fáil sa seomra ranga má tá suim na ndaltaí sa Mhatamaitic le múscailt agus le cothú. Ós rud nach sa chóipleabhar foirmiúil a dhéantar obair *Mata le Chéile* moltar do na múinteoirí obair na ndaltaí a chur ar taispeáint sa seomra ranga. Má bhíonn teacht ag daltaí ar a gcuid oibre ar an gcaoi sin, agus má bhíonn taispeántas leanúnach ar fáil acu de na coincheapa agus de na scileanna atá le foghlaim, beidh siad ag cur lena dtuiscint ar na snáithaonaid éagsúla sa siollabas i rith an ama.

Tá sraith de thrialacha i gcúl an leabhair a chabhróidh le múinteoirí tabhairt faoin measúnú neamhfhoirmiúil a mholtar sna *Treoirlínte do Mhúinteoirí* (lch 19) agus in *Curaclam na Bunscoile: Matamaitic* (lgh 121-25).

Florence Gavin

Iúil 2003

Leibhéal 1



1

Tarraing líne timpeall ar an teach is airde.




2

Tarraing líne timpeall ar an madra is lú.




3

Tarraing líne timpeall ar an bpeann luaidhe is giorra.




4

Tarraing líne timpeall ar an scuab fiacla is mó.




1 Tarraing líne timpeall ar an gceann is mó.




2 Tarraing líne timpeall ar an gceann is lú.




3 Tarraing líne timpeall ar an gceann is éadroime.






agus



1


$2 + 3 =$



2




agus




agus

$3 + 1 =$




$3 + 4 =$



3




agus




agus

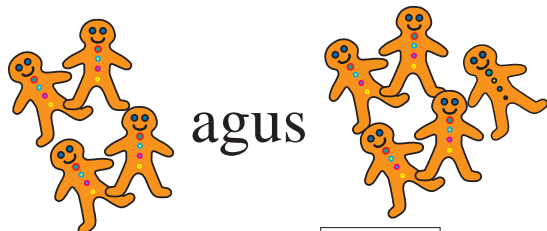
$4 + 2 =$




$6 + 2 =$



4




agus





agus

$4 + 5 =$




$5 + 4 =$






agus




5 + 4 =

1




agus

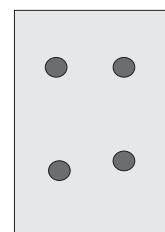


3 + 1 =

2




agus




3 + 4 =


3



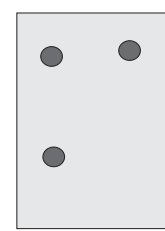
agus



6 + 2 =




agus

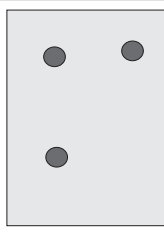


4 + 3 =


4



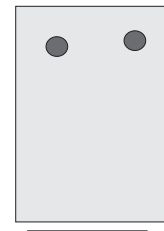
agus



5 + 3 =



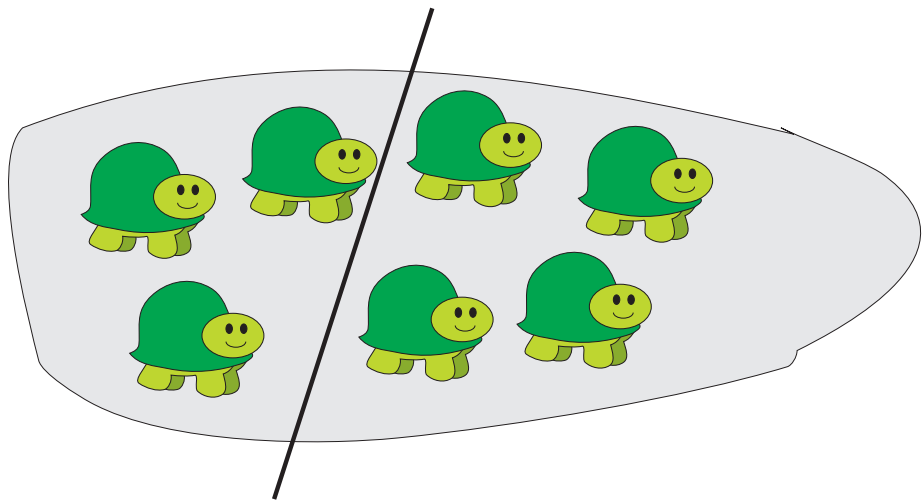
agus



7 + 2 =

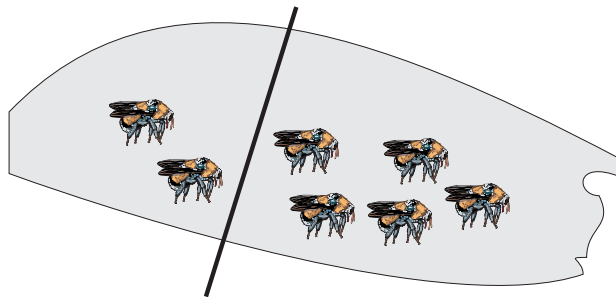


1




$3 + 4 =$

2




$2 + 5 =$

3




$6 + 3 =$


4



$3 + 4 =$


1



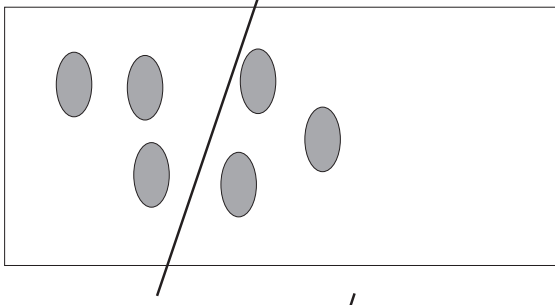
$4 + 2 =$ 


2



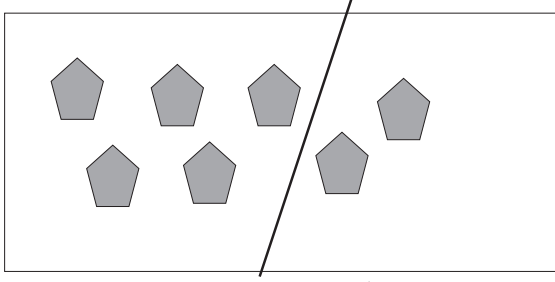
$2 + 4 =$ 


3



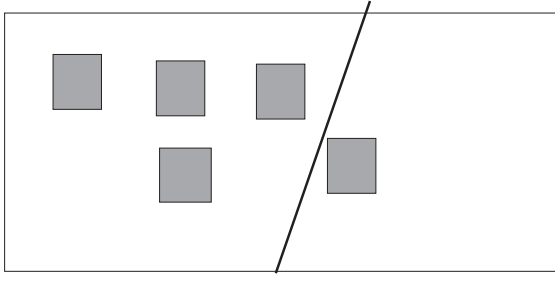
$3 + 3 =$ 


4



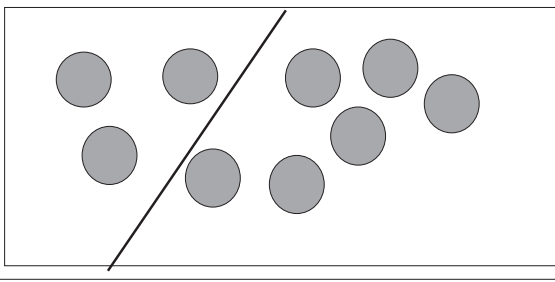
$5 + 2 =$ 


5



$4 + 1 =$ 

6



$3 + 6 =$ 

Suimigh iad seo.

1

4	3	1	5	2	4	3
<u>+3</u>	<u>+2</u>	<u>+3</u>	<u>+2</u>	<u>+6</u>	<u>+2</u>	<u>+5</u>

2

2	5	6	3	8	4	6
<u>+7</u>	<u>+3</u>	<u>+3</u>	<u>+3</u>	<u>+1</u>	<u>+5</u>	<u>+0</u>

3 Ceangail iad seo.


3 + 3	4
5 + 2	9
2 + 6	7
3 + 1	6
2 + 3	3
4 + 5	8
1 + 2	5

4

4 + 3	4
3 + 6	7
7 + 1	9
6 + 2	8
3 + 5	
2 + 7	
2 + 2	


1



$6 + 5 =$ 


2



$3 + 3 =$ 


3



$3 + 2 =$ 

4



$3 + 4 =$ 

1



$$3 + \square = 6$$

2



$$5 + \square = 7$$

3



$$3 + \square = 7$$

4





$$\square + 5 = 8$$


1


$\begin{array}{r} \circ \quad 1 \\ \circ \quad \circ \quad 2 \\ + \quad \circ \quad \circ \quad 2 \\ \hline \end{array}$	$\begin{array}{r} \circ \quad \circ \quad \circ \quad 3 \\ \circ \quad \circ \quad 2 \\ + \quad \circ \quad \circ \quad \circ \quad 3 \\ \hline \end{array}$	$\begin{array}{r} \circ \quad 1 \\ \circ \quad \circ \quad \circ \quad \circ \quad 4 \\ + \quad \circ \quad \circ \quad 2 \\ \hline \end{array}$	$\begin{array}{r} \circ \quad \circ \quad \circ \quad \circ \quad 4 \\ \circ \quad \circ \quad \circ \quad 3 \\ + \quad \circ \quad \circ \quad \circ \quad 3 \\ \hline \end{array}$	$\begin{array}{r} \circ \quad \circ \quad \circ \quad \circ \quad \circ \quad 6 \\ \circ \quad 1 \\ + \quad \circ \quad 1 \\ \hline \end{array}$
--	--	--	--	--


2



 $\begin{array}{r} 1 \\ 2 \\ + 2 \\ \hline \end{array}$

 $\begin{array}{r} 2 \\ 4 \\ + 3 \\ \hline \end{array}$

3


5 + 1 + 2 = 


3 + 3 + 2 = 


2 + 4 + 2 = 


6 + 2 + 0 = 

4

1 + 4 + 3 = 




4 + 3 + 2 = 





3 + 4 + 1 = 

8 + 0 + 1 = 

Meaitseáil an uimhir leis an tacar.

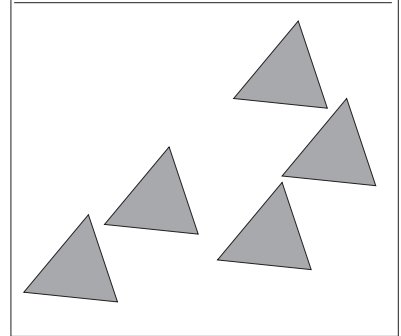
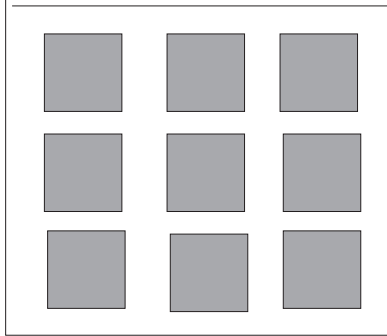

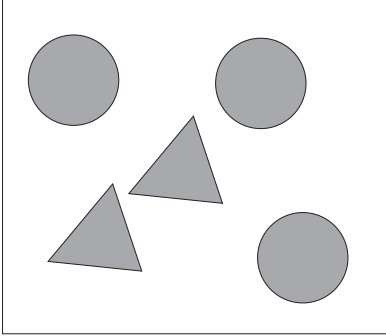

Sampla:

3
  

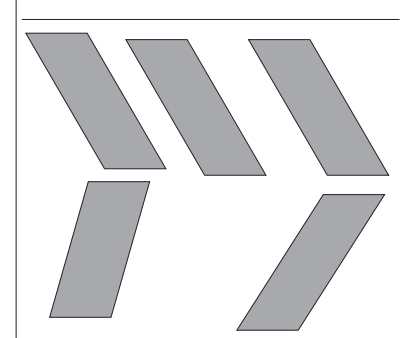
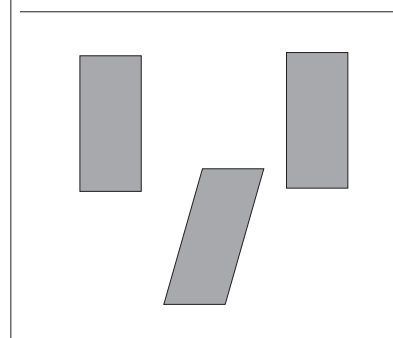

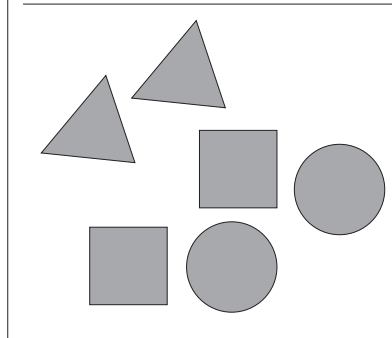

<input type="text"/>
   

Cé mhéad ball sna tacair seo?


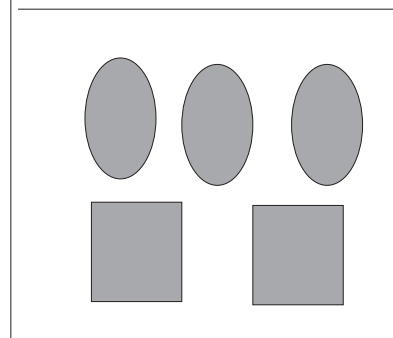



1



2



3



Cé mhéad ball sna tacair seo?

1

6 circles and 4 stars

4 stars, 4 squares, and 1 circle

1 parallelogram, 3 triangles, and 2 stars

2

2 triangles, 1 square, and 3 stars

2 rectangles, 1 star, and 3 ovals

3 parallelograms and 2 stars

3


1 circle, 1 star, 1 parallelogram, and 1 rectangle

3 ovals and 2 squares


2 parallelograms and 6 stars

1


$$\begin{array}{r} 3 \\ 4 \\ +2 \end{array}$$


$$\begin{array}{r} 1 \\ 4 \\ +4 \end{array}$$

$$\begin{array}{r} 2 \\ 2 \\ +3 \end{array}$$


 

$$\begin{array}{r} 4 \\ 3 \\ +2 \end{array}$$


 

2


$$\begin{array}{r} 1 \\ 4 \\ +2 \end{array}$$


$$\begin{array}{r} 3 \\ 3 \\ +2 \end{array}$$

$$\begin{array}{r} 5 \\ 2 \\ +2 \end{array}$$


 

$$\begin{array}{r} 3 \\ 4 \\ +1 \end{array}$$

3

$$\begin{array}{r} 3 \\ 4 \\ +0 \end{array}$$


$$\begin{array}{r} 5 \\ 4 \\ +0 \end{array}$$

$$\begin{array}{r} 2 \\ 3 \\ +0 \end{array}$$


 

$$\begin{array}{r} 4 \\ 0 \\ +2 \end{array}$$


 

4


$$\begin{array}{r} 0 \\ 4 \\ +2 \end{array}$$


$$\begin{array}{r} 6 \\ 0 \\ +2 \end{array}$$

$$\begin{array}{r} 2 \\ 0 \\ +2 \end{array}$$

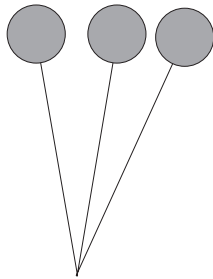
 

$$\begin{array}{r} 5 \\ 0 \\ +2 \end{array}$$

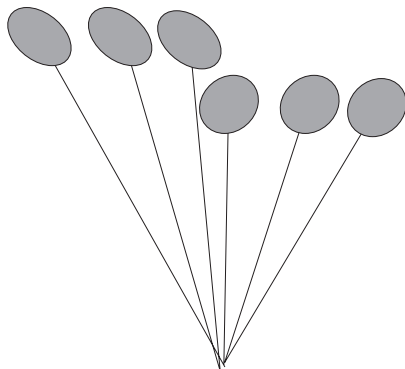
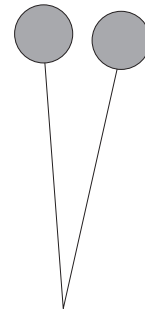
 

>
Níos mó ná

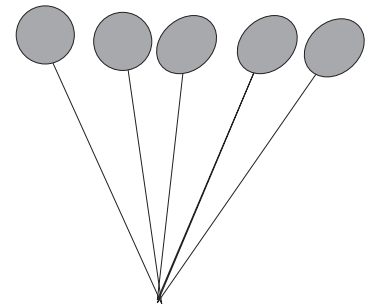
Tá 3 níos mó ná 2.
3 > 2



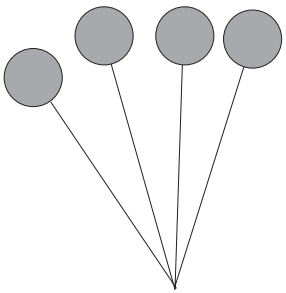
Níos mó ná
3 > 2




Níos mó ná
6 > 5



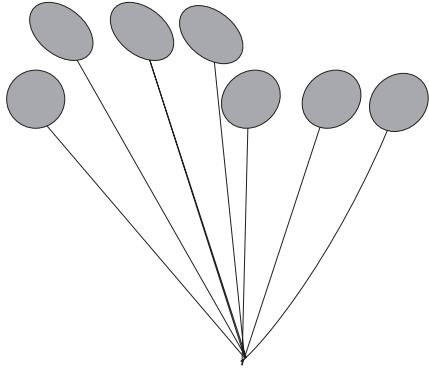
Críochnaigh an pictiúr.



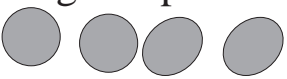
Níos mó ná

$$4 > 2$$


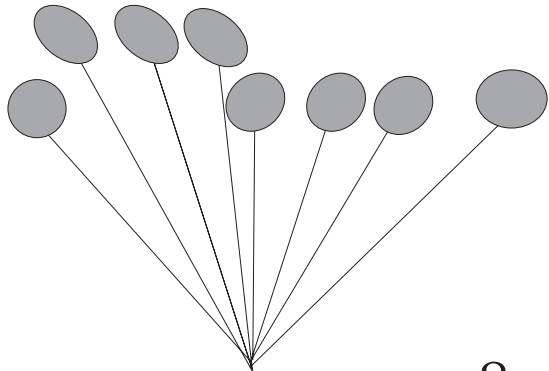
Críochnaigh an pictiúr.



Níos mó ná

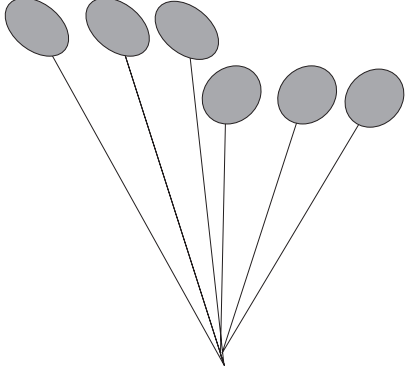
$$7 > 4$$


Tarraing an pictiúr.


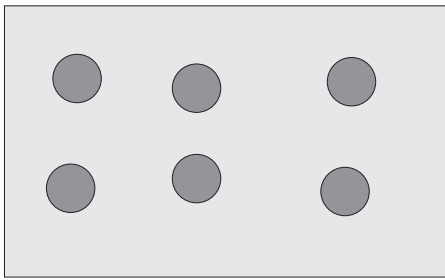


$8 > 5$

Tarraing an pictiúr.




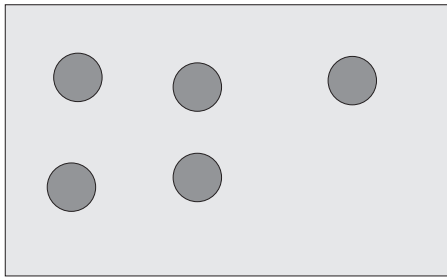
$6 > 3$



$6 > 4$


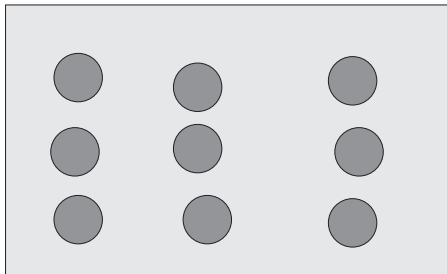
Scríobh $>$ agus na huimhreacha cuí sna boscaí thíos.

1



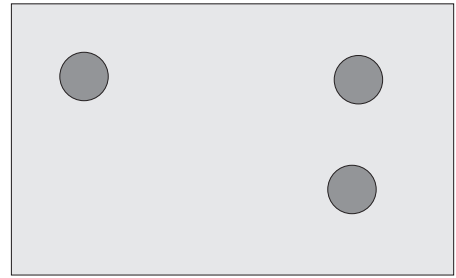
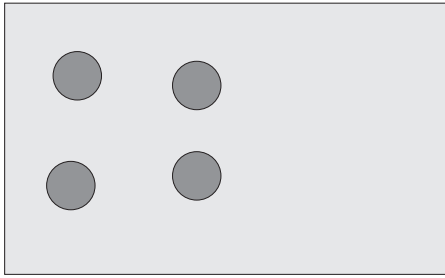


2


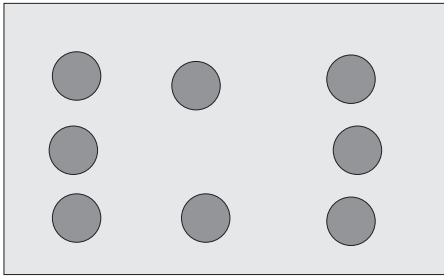





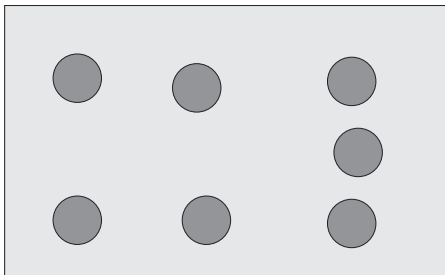
Scríobh > agus na huimhreacha cuí sna boscaí thíos.



1



2

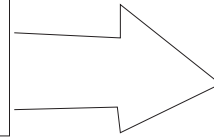


3



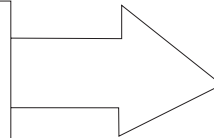
Seichimh

Cad é an chéad uimhir eile?



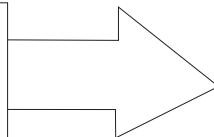
1

1 2 3 4




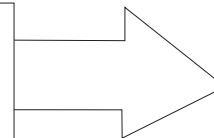
2

2 3 4 5




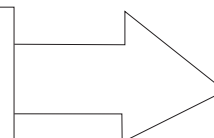
3

6 7 8 9



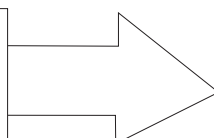
4

4 5 6 7



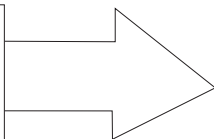
5

5 6 7 8



6

3 4 5 6




<


níos lú ná

Tá 2 níos lú ná 3.


2 < 3




<




1




<





3 < 

2



<



< 5 

Scríobh na huimhreacha cuí sna boscaí thíos.

1

2

2

3

3

4

4

5

>
Níos mó ná

1 8 > 7

> 4

> 2

> 3

> 5

> 5

> 5

2 > 6

> 8

> 9


> 9


> 4


> 3


> 1


Scríobh < nó >


1 10  8


2 6  10

3 9  2

4 5  3

5 8  9

6 7  3


7 4  3


1	2	3	4	5	6	7	8	9	10
---	---	---	---	---	---	---	---	---	----


Úsáid an uimhirstiall chun cabhrú leat suimiú.


Suimigh +


1


$1 + 4 = \square$ 


$2 + 6 = \square$ 


$1 + 7 = \square$ 


$3 + 5 = \square$ 


$2 + 8 = \square$ 

$4 + 5 = \square$ 

$6 + 1 = \square$ 

$2 + 4 = \square$ 

$1 + 8 = \square$ 

$8 + 0 = \square$ 

Suimiú de shórt eile

2

$8 + \square = 10$ 

$3 + \square = 10$ 

$7 + \square = 10$ 

$4 + \square = 10$ 

$9 + \square = 10$ 

$1 + \square = 10$ 

$6 + \square = 10$ 

$2 + \square = 10$ 

$5 + \square = 10$ 



$0 + \square = 10$ 

1

Cé aige a bhfuil an méid is mó?

Ag

>



2

Cé aige a bhfuil an méid is mó?

Ag

>




3

Cé aige a bhfuil an méid is lú?

Ag

<





4

Cé aige a bhfuil an méid is lú?

Ag

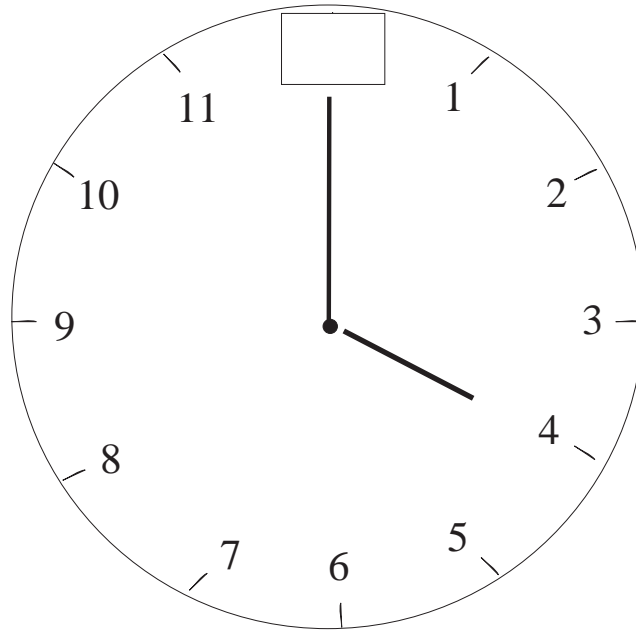
<



An tAm

Scríobh an uimhir cheart sa bhosca.

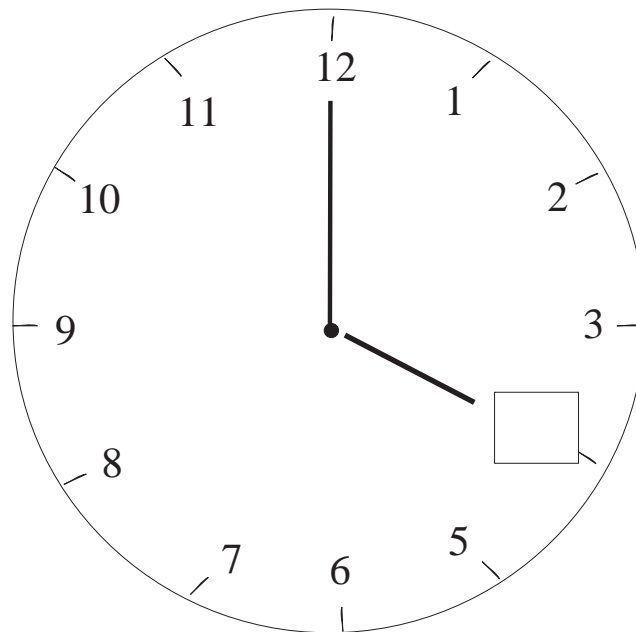
1



4 a chlog

2

Scríobh an uimhir cheart sa bhosca.



4 a chlog

Cangarú ag Léimneach

Cé na huimhreacha ar a bpreabann an cangarú?



1

0 2 4 6 10 12 16

2

0 3 6 9 15 18 24

3

0 4 8 12 20 24 32

4

0 5 10 15 25 30 40

5

0 10 20 30 50 60 80

Comhair ar aghaidh.

1

Seas ar 3. Gabh ar aghaidh dhá (2) cheann.


Cá bhfuil tú anois?

2

Seas ar 5. Gabh ar aghaidh dhá (2) cheann.

Cá bhfuil tú anois?

3

Seas ar 4. Gabh ar aghaidh trí (3) cinn.

Cá bhfuil tú anois?

4

Seas ar 9. Gabh ar aghaidh ceann amháin (1).

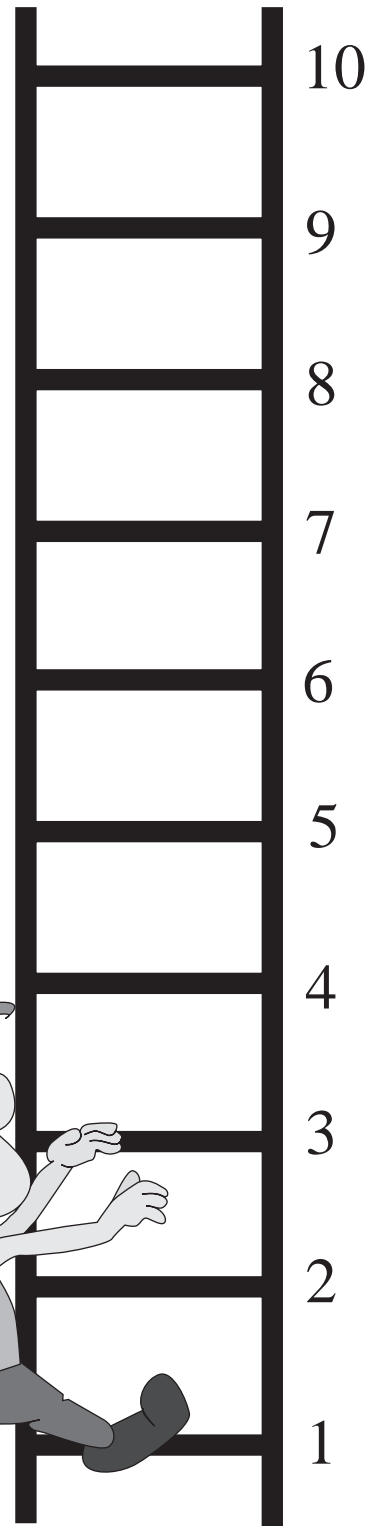
Cá bhfuil tú anois?

5

Seas ar 2. Gabh ar aghaidh sé (6) cinn.


Cá bhfuil tú anois?

Suimiú: Fadhbanna


1

Bhí 6 líreacán ag Áine. Bhí 4 (ceithre) líreacán ag Síle. Cé mhéad líreacán ar fad a bhí ag an mbeirt acu?




2

Bhí 4 (ceithre) charr ag Cáit. Bhí 3 charr ag Colm. Cé mhéad carr ar fad a bhí ag an mbeirt acu?




3

Bhí 6 liathróid ag Bríd. Bhí 4 (ceithre) liathróid ag Aisling. Cé mhéad liathróid ar fad a bhí ag an mbeirt acu?



4


Tá 8 leabhar ag Eoin. Tá 2 (dhá) leabhar ag Síle. Cé mhéad leabhar ar fad atá ag an mbeirt acu?



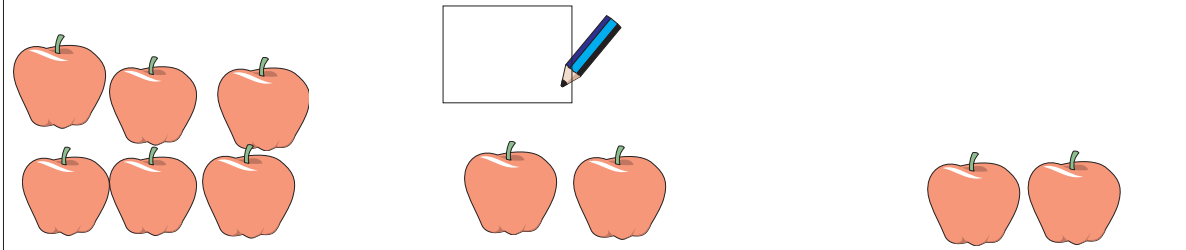
Suimiú: Fadhbanna

Comhair ar aghaidh


1 Tá 4 (ceithre) cháca ag Niamh. Tá 2 (dhá) cháca ag Pól agus 3 cháca ag Máire. Cé mhéad cáca ar fad atá acu?




2 Tá 6 úll ag Pól. Tá 2 (dhá) úll ag Niamh agus 2 (dhá) úll ag Máire. Cé mhéad úll ar fad atá acu?



3 Tá 3 choinín ag Máire. Tá 1 choinín amháin ag Niamh agus 1 choinín amháin ag Pól. Cé mhéad coinín ar fad atá acu?




4 Tá 8 mbláth ag Niamh. Tá 1 bhláth amháin ag Máire agus 1 bhláth amháin ag Pól. Cé mhéad bláth ar fad atá acu?




Comhair ar aghaidh


1

Seas ar 1.
 Siúil ar aghaidh 2 chéim.
 Cá bhfuil tú anois? 


3

Seas ar 7.
 Siúil ar aghaidh 2 chéim.
 Cá bhfuil tú anois? 


2

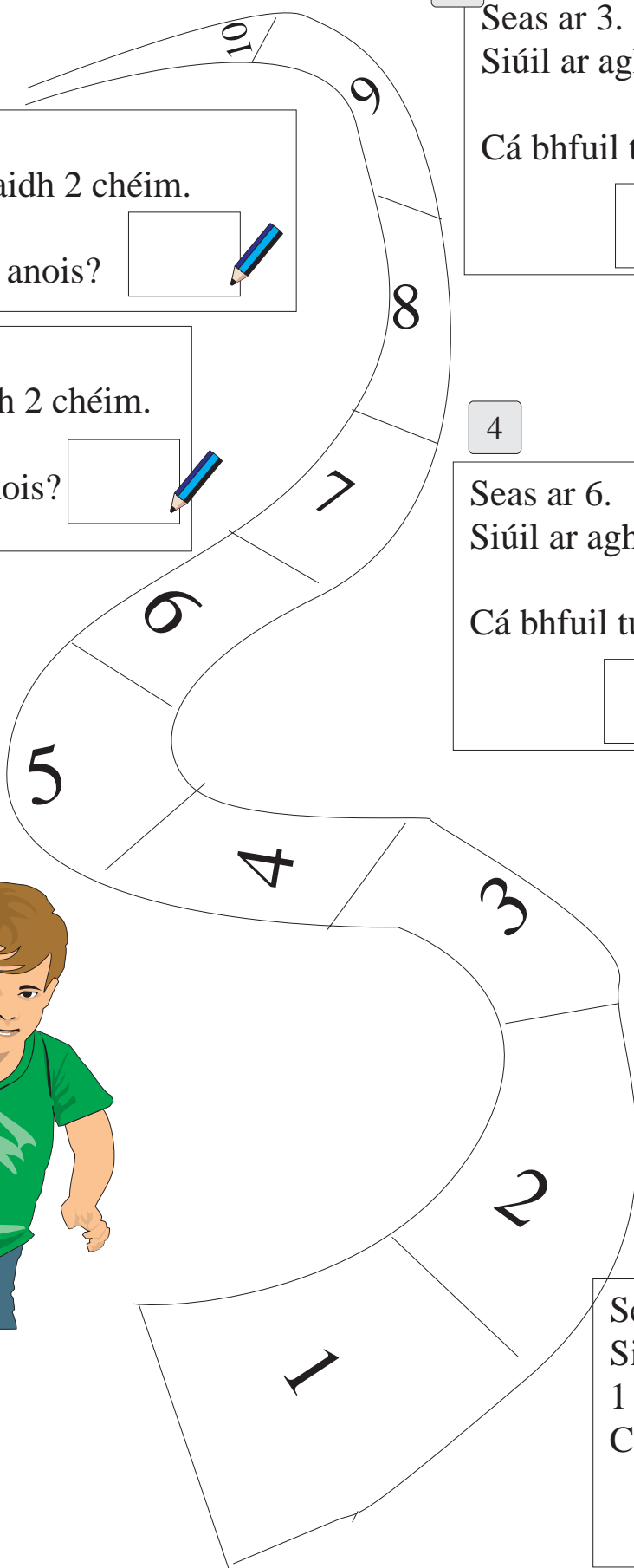
Seas ar 3.
 Siúil ar aghaidh 3 chéim.
 Cá bhfuil tú anois? 

4

Seas ar 6.
 Siúil ar aghaidh 4 chéim.
 Cá bhfuil tú anois? 

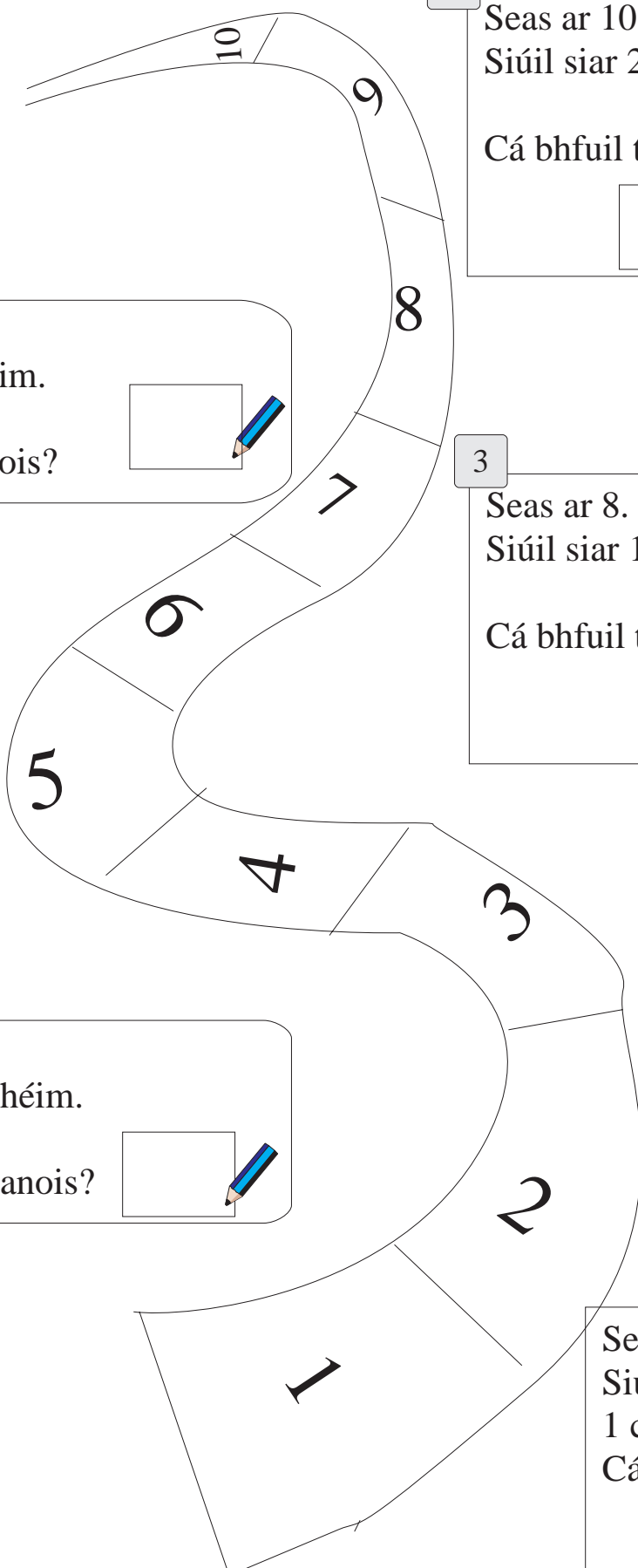
5

Seas ar 8.
 Siúil ar aghaidh 1 chéim amháin.
 Cá bhfuil tú anois? 






Comhair siar




1 Seas ar 10.
Siúil siar 2 chéim.

Cá bhfuil tú anois?


2 Seas ar 6.
Siúil siar 3 chéim.

Cá bhfuil tú anois?


3 Seas ar 8.
Siúil siar 1 chéim amháin.

Cá bhfuil tú anois?


4 Seas ar 5.
Siúil siar 2 chéim.

Cá bhfuil tú anois?

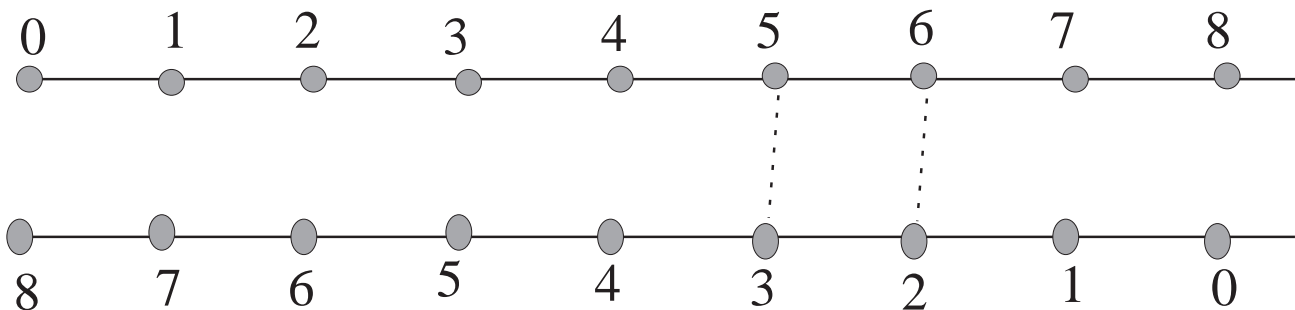
5 Seas ar 2.
Siúil siar 1 chéim amháin.

Cá bhfuil tú anois?

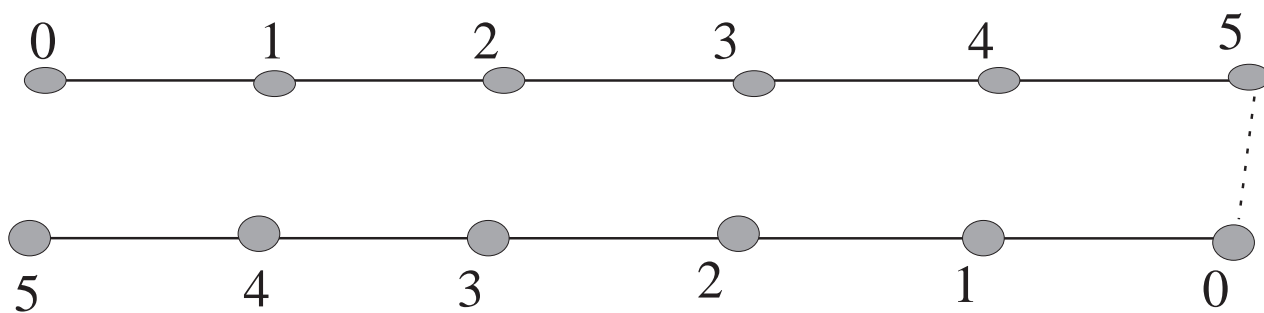
 

Suimiú +

Ceangail na poncanna chun 8 a fháil.



Ceangail na poncanna chun 5 a fháil.



1

$$\square \text{  + \square \text{  = 5$$

$$\square \text{  + \square \text{  = 5$$

$$\square \text{  + \square \text{  = 5$$

$$\square \text{  + \square \text{  = 5$$

Suimiú + Comhair ar aghaidh.

Bain úsáid as an uimhirstiall más mian leat.

1	2	3	4	5	6	7	8	9	10
---	---	---	---	---	---	---	---	---	----

1

4	1	6	9	2
0	3	4	0	2
<u>+4</u>	<u>+3</u>	<u>+1</u>	<u>+1</u>	<u>+2</u>

2

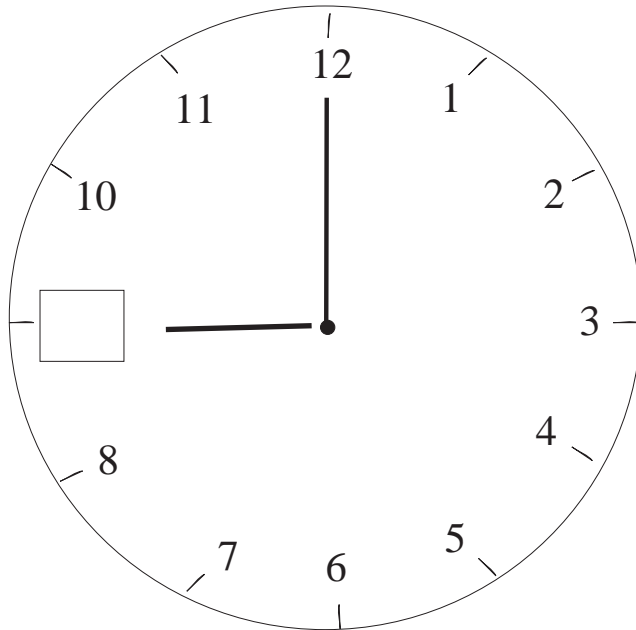
6	1	5	4	6
2	3	2	3	1
<u>+2</u>	<u>+4</u>	<u>+1</u>	<u>+2</u>	<u>+1</u>

3

7	2	0	8	8
2	2	9	1	0
<u>+0</u>	<u>+5</u>	<u>+1</u>	<u>+1</u>	<u>+1</u>

1


9 a chlog



Scríobh an uimhir cheart sa bhosca.

2

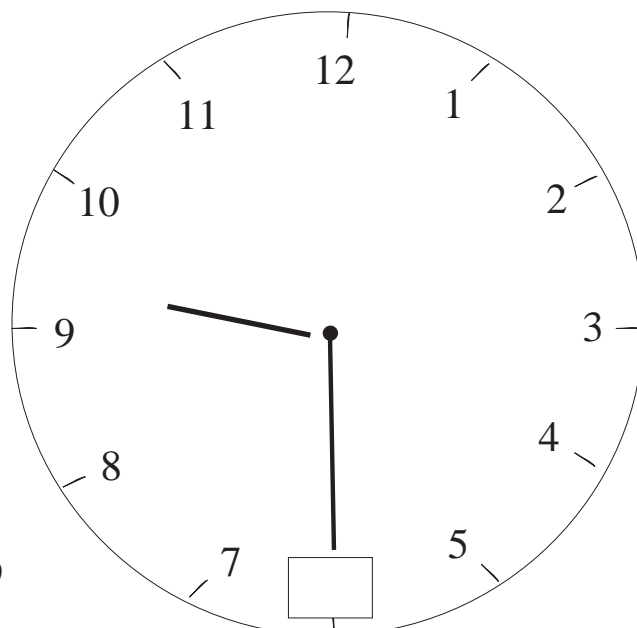
9 a chlog



Scríobh an uimhir cheart sa bhosca.



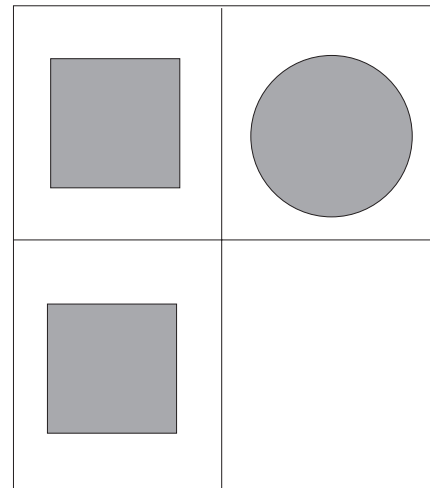
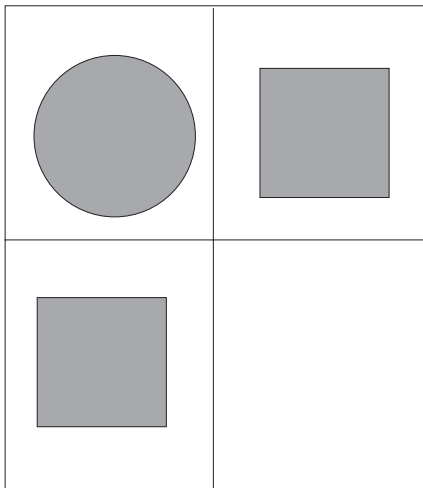
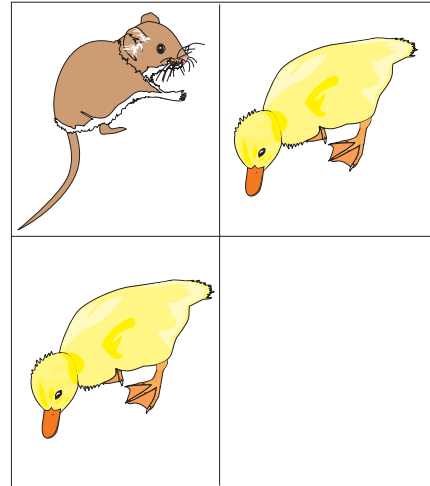

3

$\frac{1}{2}$ uair tar éis a 9




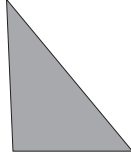



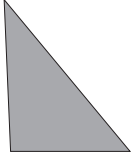

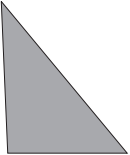






Scríobh an uimhir cheart sa bhosca.





Críochnaigh na patrúin thíos.



Críochnaigh na patrúin thíos.

Déan do phatrúin féin.

Críochnaigh na patrúin thíos.

1

2

3

4

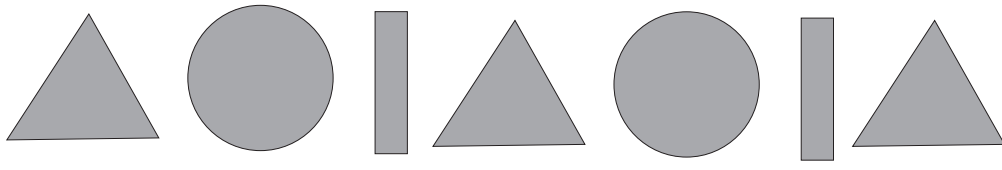
5

6


7

Críochnaigh na patrúin thíos.

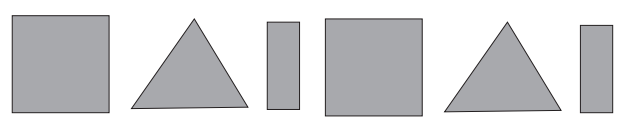
1



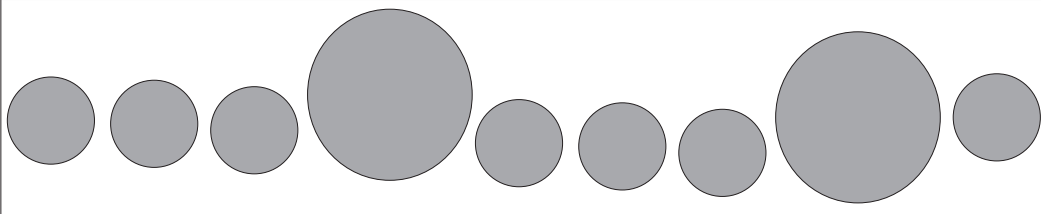
2



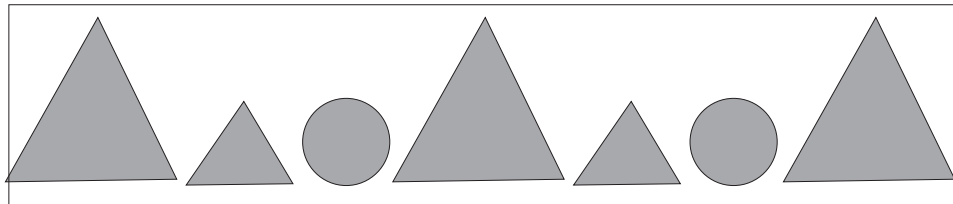
3



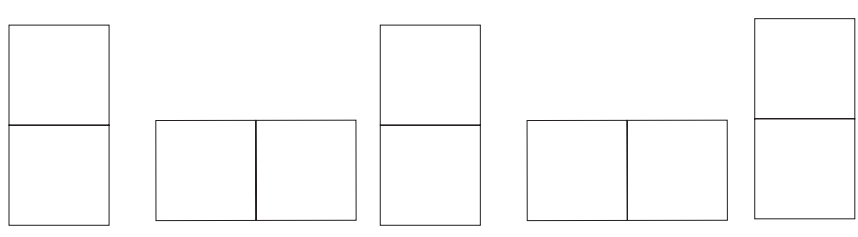
4



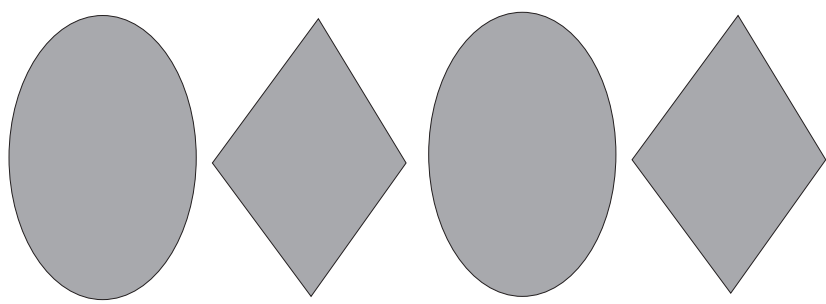
5



6




7




5 - 1 =


1

6 - 3 = 


2

10 - 6 = 

3

5 - 3 = 

4

8 - 6 = 

4 - 1 = 3

1

7 - 5 =

2

9 - 1 =

3

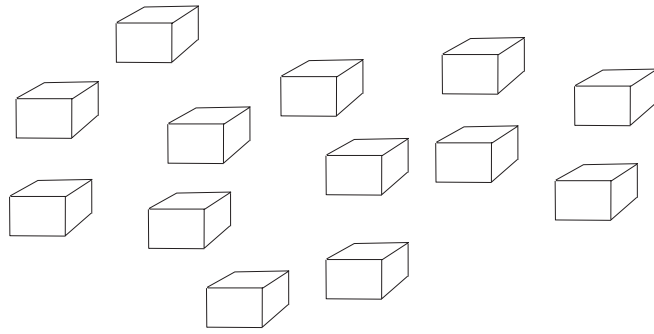
4 - 2 =

4

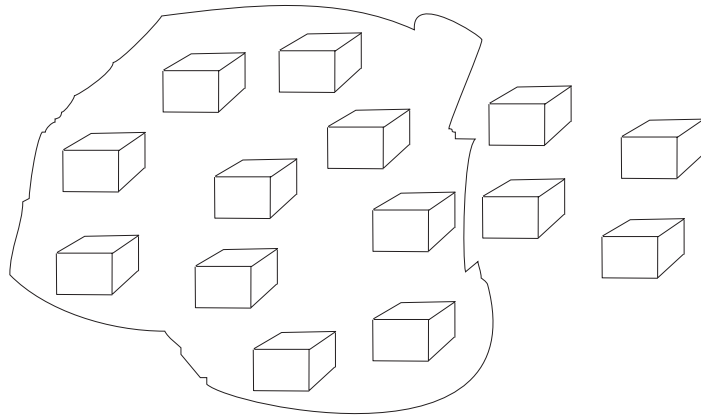
6 - 4 =

Deicheanna agus Aonta

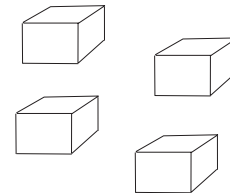
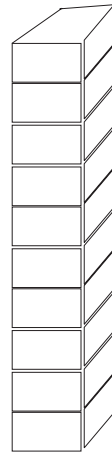
Féach ar na blocanna.



Tá líne thart ar dheich (10) gcinn de na blocanna anois.



Tá na deich mbloc sin ar bharr a chéile againn anois.



4 aon

Deich

Mar sin tá 10 againn agus 4 aon. Is féidir é a scríobh mar seo:

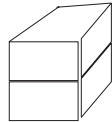
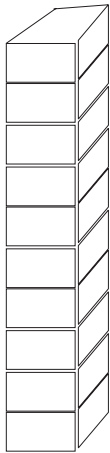
deicheanna	aonta
1	4

nó

d	a
1	4

a ceathair déag 14

1



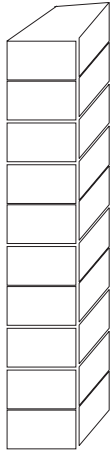
Scríobh síos líon na ndeicheanna (d) agus líon na n-aonta (a).

d	a

Scríobh an uimhir anseo.




2



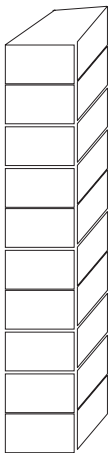
Scríobh síos líon na ndeicheanna (d) agus líon na n-aonta (a).

d	a

Scríobh an uimhir anseo.



3



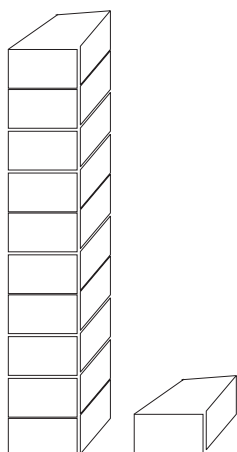
Scríobh síos líon na ndeicheanna (d) agus líon na n-aonta (a).

d	a

Scríobh an uimhir anseo.



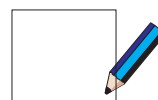
1



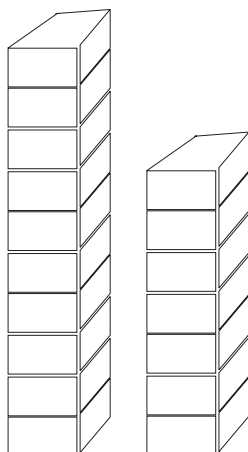
Scríobh síos líon na ndeiceanna (d) agus líon na n-aonta (a).

d	a

Scríobh an uimhir anseo.




2



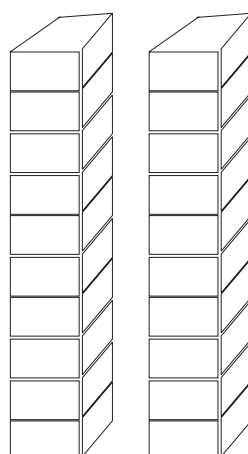
Scríobh síos líon na ndeiceanna (d) agus líon na n-aonta (a).

d	a

Scríobh an uimhir anseo.




3



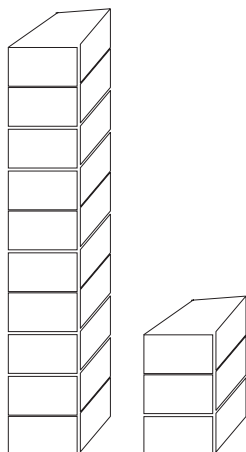
Scríobh síos líon na ndeiceanna (d) agus líon na n-aonta (a).

d	a

Scríobh an uimhir anseo.



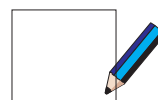
1



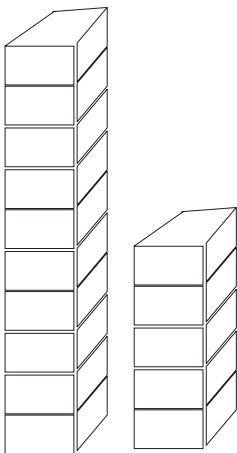
Scríobh síos líon na ndeicheanna (d) agus líon na n-aonta (a).

d	a

Scríobh an uimhir anseo.




2



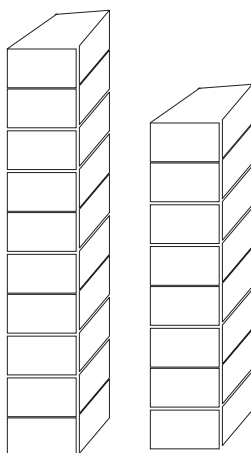
Scríobh síos líon na ndeicheanna (d) agus líon na n-aonta (a).

d	a

Scríobh an uimhir anseo.




3



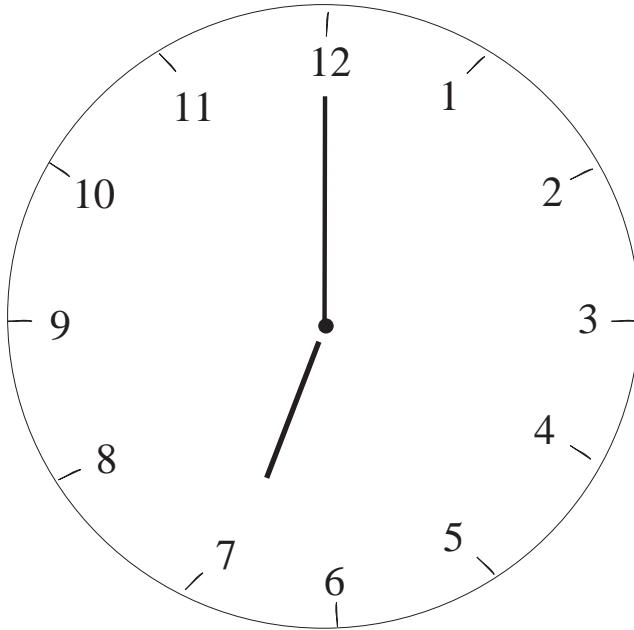
Scríobh síos líon na ndeicheanna (d) agus líon na n-aonta (a).

d	a

Scríobh an uimhir anseo.

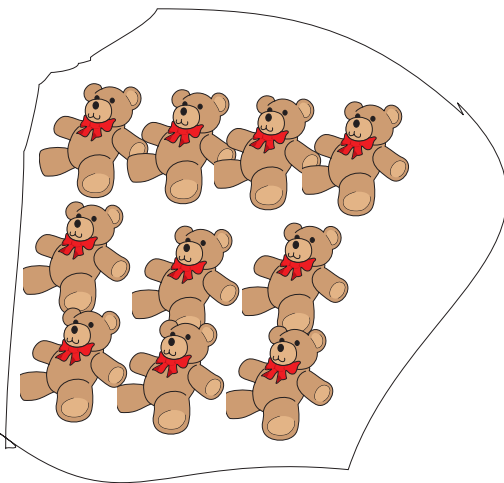


1 Cén t-am é?




a chlog

2 Deicheanna agus aonta



Scríobh síos líon na ndeicheanna (d) agus líon na n-aonta (a).

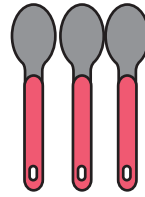
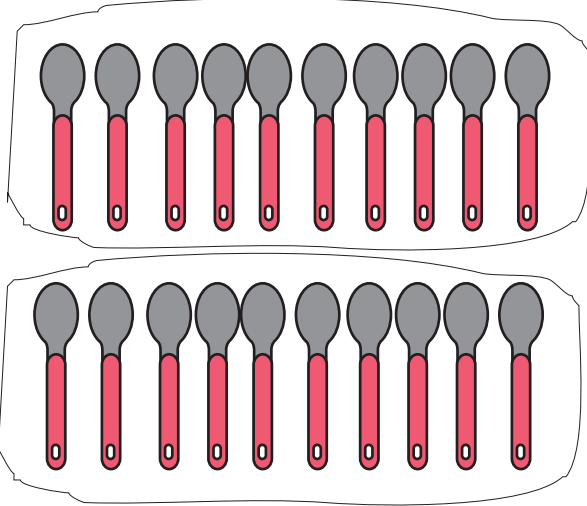
d	a



Scríobh síos líon na ndeicheanna (d) agus líon na n-aonta (a).


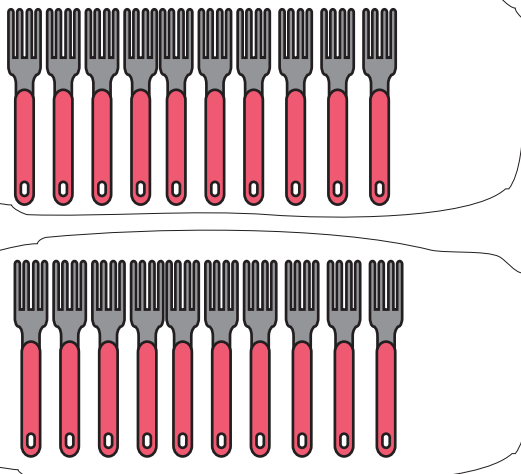
d	a

1



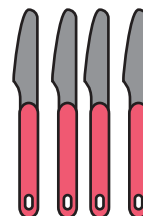
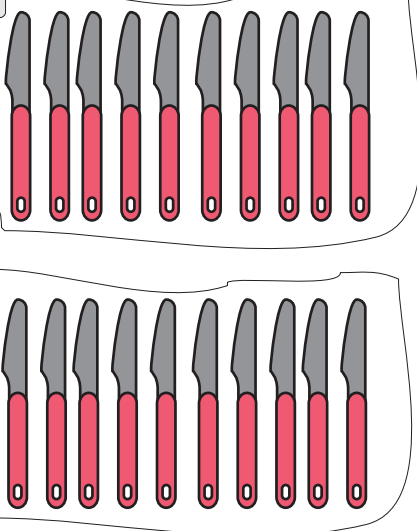
d	a
2	3

2



d	a

3

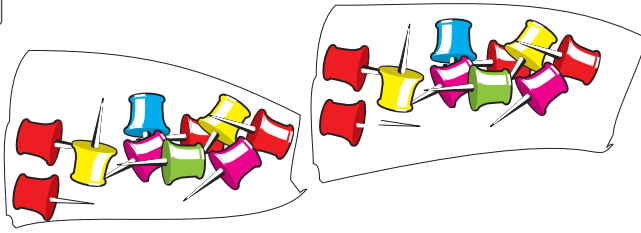


d	a



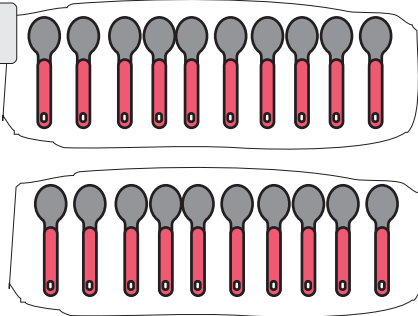
Is ionann aonad agus aon (1).

1




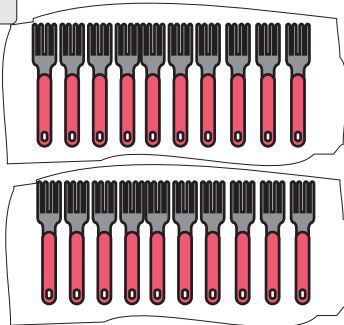
d	a

2



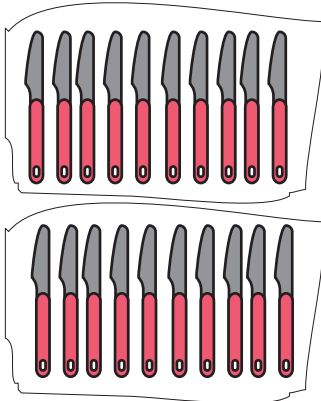
d	a

3



d	a

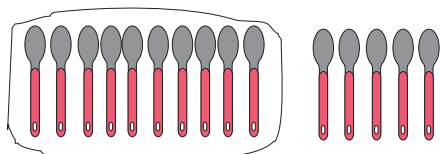
4



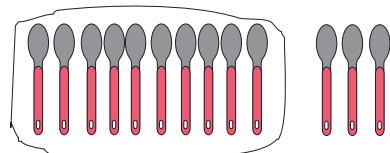
d	a



Ciallaíonn > níos mó ná.



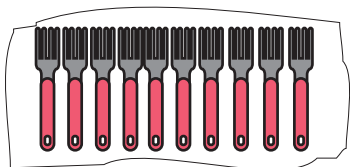
d	a
1	5



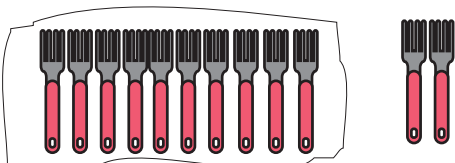
d	a
1	3

Tá 2 (dhá) dheich agus 8 n-aonad ar fad ann.

$$\begin{array}{r} 15 \\ + 13 \\ \hline 28 \end{array}$$

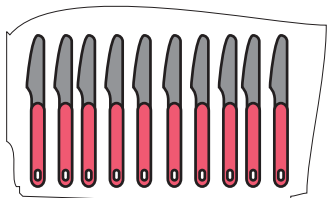


d	a
1	2

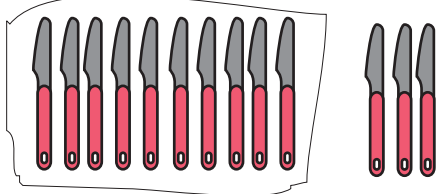


d	a
1	2

$$\begin{array}{r} 12 \\ + 12 \\ \hline 24 \end{array}$$



d	a
1	1



d	a
1	3

$$\begin{array}{r} 11 \\ + 13 \\ \hline 24 \end{array}$$

Suimiú

1

$$\begin{array}{r} 14 \\ + 12 \\ \hline \end{array}$$

$$\begin{array}{r} 14 \\ + 13 \\ \hline \end{array}$$

$$\begin{array}{r} 13 \\ + 13 \\ \hline \end{array}$$

$$\begin{array}{r} 11 \\ + 15 \\ \hline \end{array}$$

2

$$\begin{array}{r} 17 \\ + 10 \\ \hline \end{array}$$

$$\begin{array}{r} 15 \\ + 16 \\ \hline \end{array}$$

$$\begin{array}{r} 12 \\ + 16 \\ \hline \end{array}$$

$$\begin{array}{r} 13 \\ + 15 \\ \hline \end{array}$$

3

$$\begin{array}{r} 12 \\ + 12 \\ \hline \end{array}$$

$$\begin{array}{r} 17 \\ + 11 \\ \hline \end{array}$$

$$\begin{array}{r} 18 \\ + 11 \\ \hline \end{array}$$

$$\begin{array}{r} 14 \\ + 14 \\ \hline \end{array}$$

4

$$\begin{array}{r} 15 \\ + 14 \\ \hline \end{array}$$

$$\begin{array}{r} 14 \\ + 15 \\ \hline \end{array}$$

$$\begin{array}{r} 12 \\ + 6 \\ \hline \end{array}$$

$$\begin{array}{r} 21 \\ + 8 \\ \hline \end{array}$$

5

$$\begin{array}{r} 22 \\ + 5 \\ \hline \end{array}$$

$$\begin{array}{r} 22 \\ + 6 \\ \hline \end{array}$$

$$\begin{array}{r} 21 \\ + 7 \\ \hline \end{array}$$

$$\begin{array}{r} 22 \\ + 5 \\ \hline \end{array}$$

1

Meaitseáil iad seo.



11
18
14
12
13
16
20
19
17
15

a haon déag
a trí déag
a dó dhéag
a seacht déag
a ceathair déag
a naoi déag
a cúig déag
a sé déag
a hocht déag
fiche

2

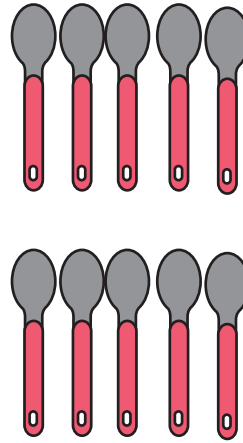
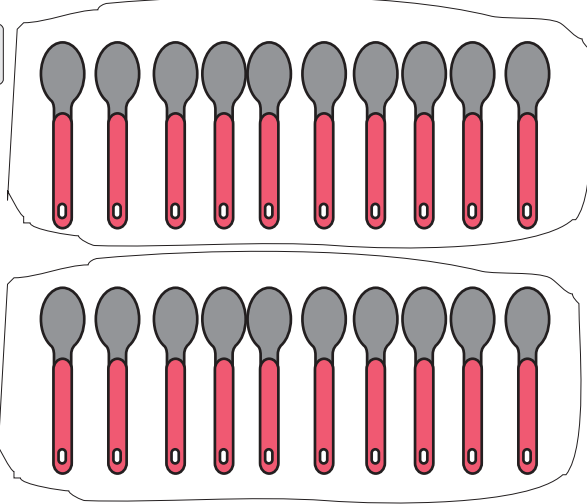
is lú de 2 (a dó) é ná



3
7
4
6
8
5

9
5
8
6
7
10

1



d	a
1	5

d	a
1	5

2 (dhá) dheich + (5 spúnóg + 5 spúnóg)

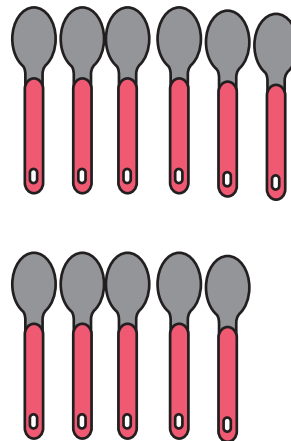
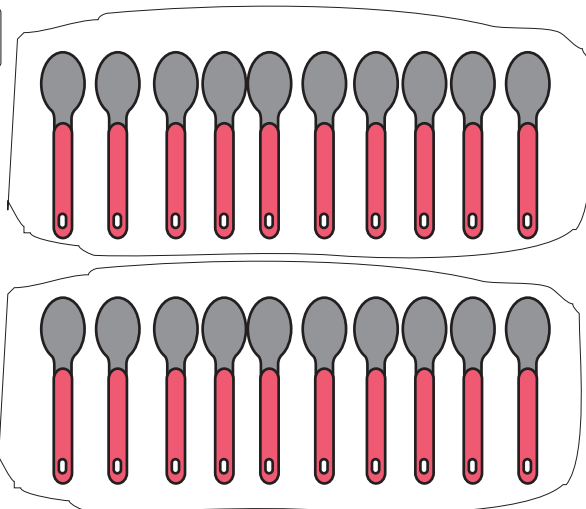
= 2 (dhá) dheich + 1 deich amháin

= 3 dheich

= 30

15
+ 15
30

2



d	a
1	6

d	a
1	5

2 (dhá) dheich + (6 spúnóg + 5 spúnóg)

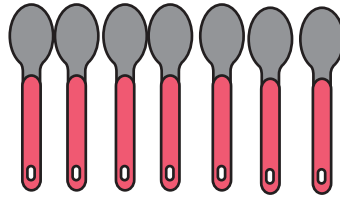
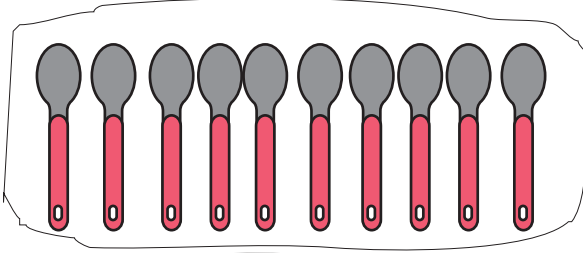
= 2 (dhá) dheich + 11 spúnóg

= 2 dheich + 1 deich + 1 spúnóg amháin

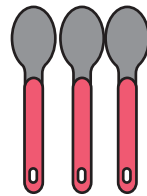
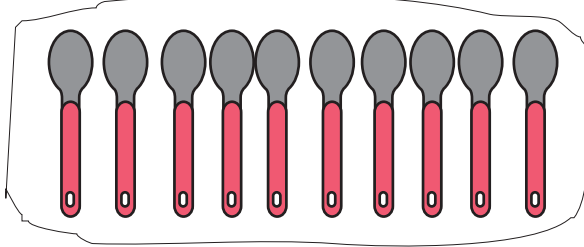
= 3 dheich + 1 spúnóg amháin = 31 spúnóg

16
+ 15
31

1



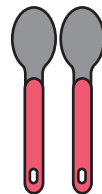
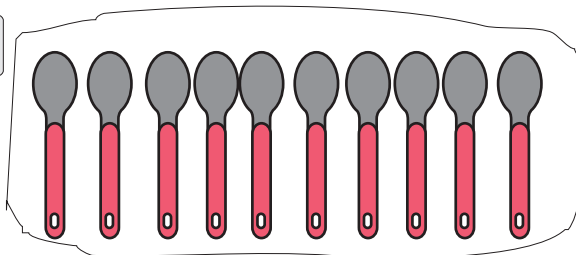
d	a



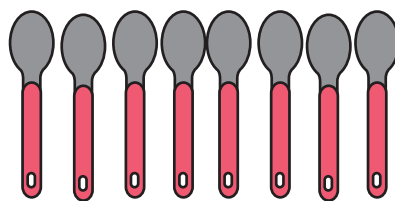
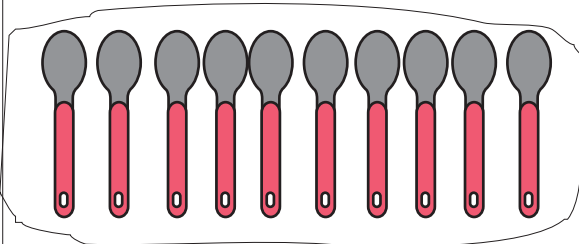
d	a

+ _____

2



d	a

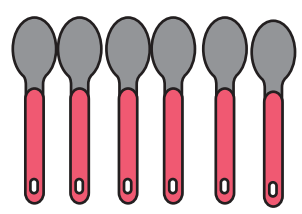
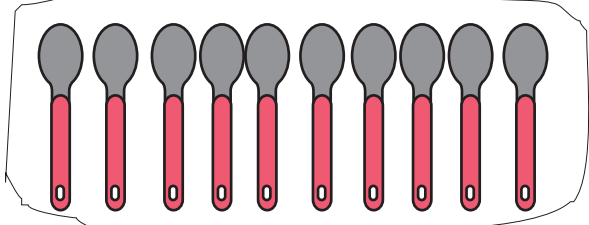


d	a

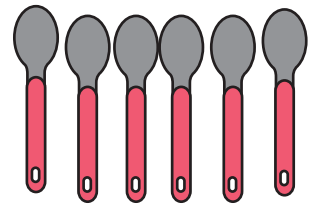
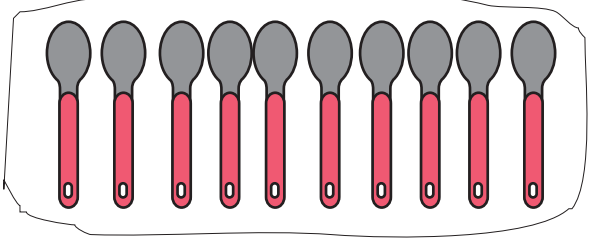
+ _____

--

1



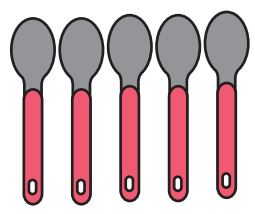
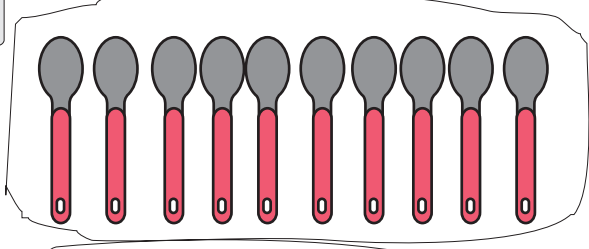
d	a



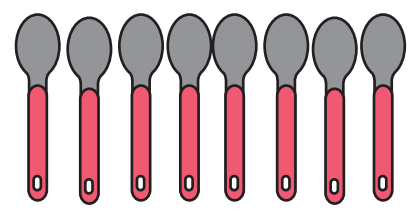
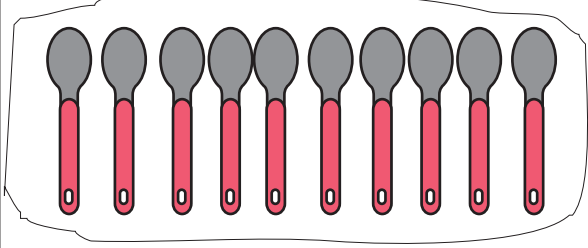
d	a

+ _____

2



d	a



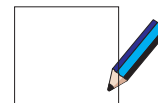
d	a

+ _____

1



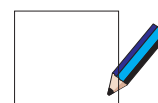
Bhí 6 mhilseán agam. D'ith mé 2 (dhá) mhilseán.
Cé mhéad milseán atá fágtha agam anois?



2




Bhí 3 phiscín sa teach. Rith 2 (dhá) phiscín amach an doras.
Cé mhéad piscín atá fágtha sa teach?



3




Bhí 5 cháca agam. Thug mé 1 cháca amháin do Mhamaí agus
1 cháca amháin do Dhaidí. Cé mhéad cáca atá fágtha agam
anois?



4



Cé mhéad tairne a chuir
an fear san adhmaid?



Meaitseáil iad seo.

$2 + 2 + 2$

8

$0 + 2 + 2$

6

$5 + 2 + 1$

9

$4 + 1 + 1$

6

$6 + 2 + 2$

4

$6 + 1 + 2$


10

$7 + 1 + 1$


Suimiú

Cé mhéad ?

1




14 iasc + 11 iasc



2




10 gcanna + 16 channa



3




16 mhadra + 13 mhadra



4




12 choinín + 12 choinín




5




21 uachtar reoite + 6 uachtar reoite




6




22 mhuc + 6 mhuc



7




7 lacha + 12 lacha



8



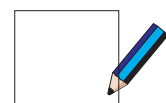
13 phearóid + 14 phearóid



9

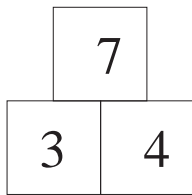


15 chat + 10 gcat



Fíricí faoi Uimhreacha

1



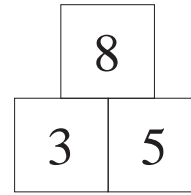
$3 + 4 = 7$

$4 + 3 = 7$

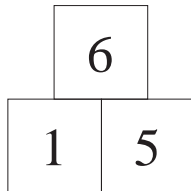
$7 - 3 = 4$

$7 - 4 = 3$

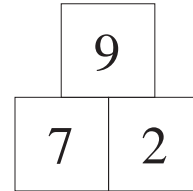
2



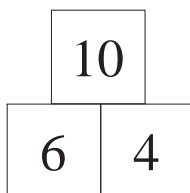
3



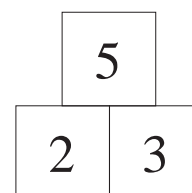
4











5



6



$9 + 2 =$	<input type="text"/>	
$5 + 7 =$	<input type="text"/>	
$8 + 4 =$	<input type="text"/>	
$9 + 3 =$	<input type="text"/>	
$5 + 5 =$	<input type="text"/>	
$6 + 6 =$	<input type="text"/>	
$8 + 2 =$	<input type="text"/>	
$9 + 4 =$	<input type="text"/>	

Inis scéal faoi gach ceann de na suimeanna seo.

Seo é an chéad scéal :

1

Bhí 9 leabhar ag Síle. Bhí 2 (dhá) leabhar ag Bríd.
Cé mhéad leabhar ar fad a bhí acu beirt?

Airgead

Cé mhéad cent?


1

cent



2

cent




4

cent




3

cent




6

cent



5

cent



7

cent



Airgead

Suimiú

1

$$\begin{array}{r} 2 \text{ cent} \\ + 2 \text{ cent} \\ \hline \text{cent} \end{array}$$

$$\begin{array}{r} 5 \text{ cent} \\ + 6 \text{ cent} \\ \hline \text{cent} \end{array}$$

$$\begin{array}{r} 2 \text{ cent} \\ + 6 \text{ cent} \\ \hline \text{cent} \end{array}$$

$$\begin{array}{r} 4 \text{ cent} \\ + 6 \text{ cent} \\ \hline \text{cent} \end{array}$$

2

$$\begin{array}{r} 9 \text{ cent} \\ + 1 \text{ cent} \\ \hline \text{cent} \end{array}$$


$$\begin{array}{r} 10 \text{ cent} \\ + 5 \text{ cent} \\ \hline \text{cent} \end{array}$$

$$\begin{array}{r} 10 \text{ cent} \\ + 6 \text{ cent} \\ \hline \text{cent} \end{array}$$


$$\begin{array}{r} 10 \text{ cent} \\ + 10 \text{ cent} \\ \hline \text{cent} \end{array}$$




líreacán



uachtar reoite



oráiste




úll




banana



seacláid



reoiteog



sceallóga

3

Sceallóga agus reoiteog

cent 

4

Úll agus oráiste

cent 

5

2 (dhá) bhanana

cent 

6

Uachtar reoite agus líreacán

cent 

7

Reoiteog agus úll

cent 

8

Sceallóga agus seacláid


cent 

Airgead


1

Bhí agam	Chaith mé	Tá fágtha agam
18 cent	6 cent	

2


Bhí agam	Chaith mé	Tá fágtha agam
	7 cent	

3

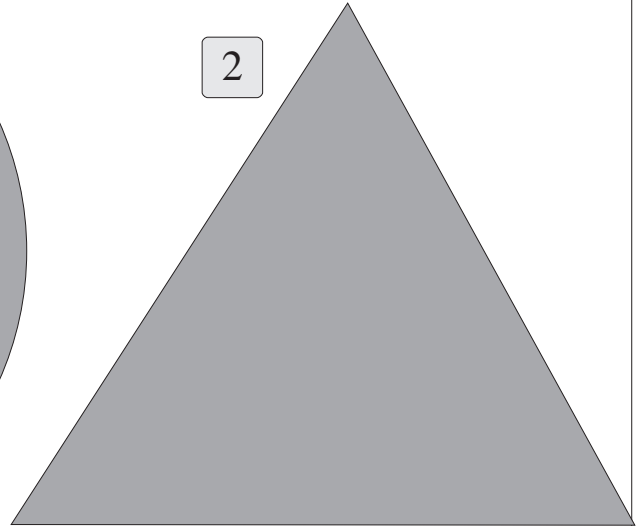
Bhí agam	Chaith mé	Tá fágtha agam
	9 cent	

Ainmnigh na cruthanna


1




2



3



4



Ainmnigh na cruthanna

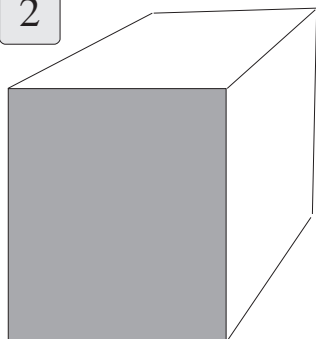
1



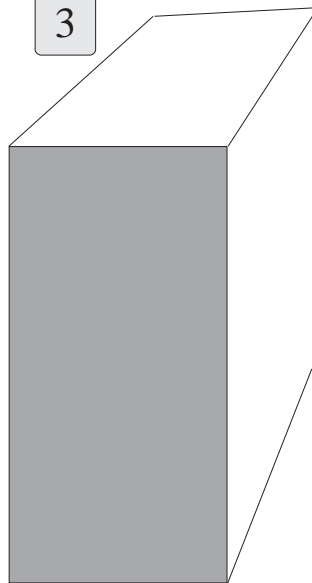
Cén cruth atá ar an liathróid?




2



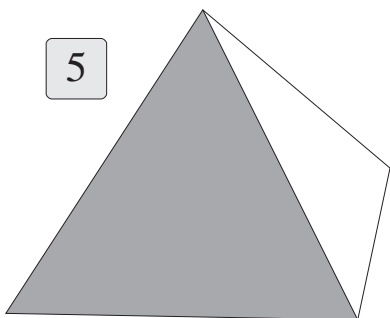
3



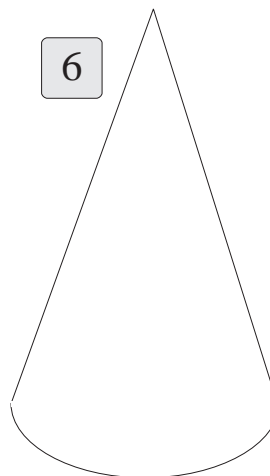
4



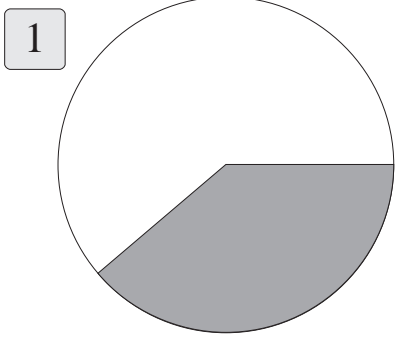
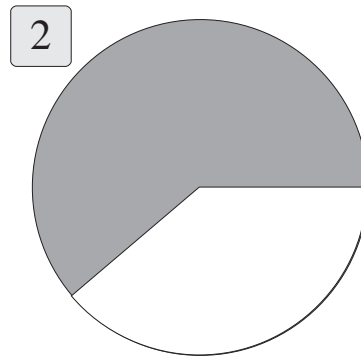
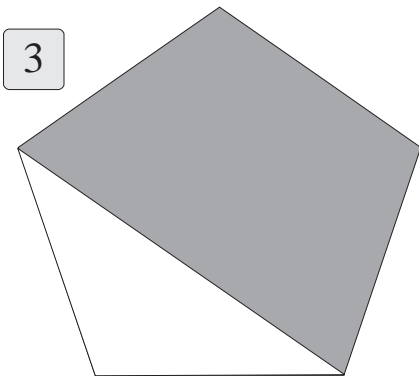
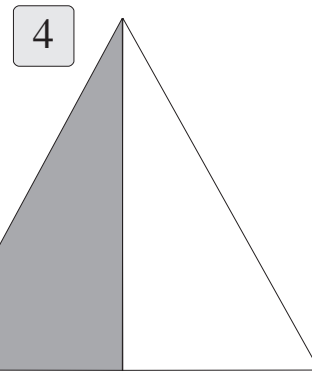
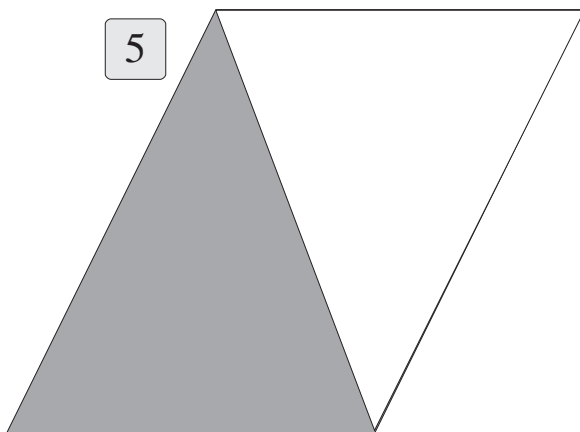
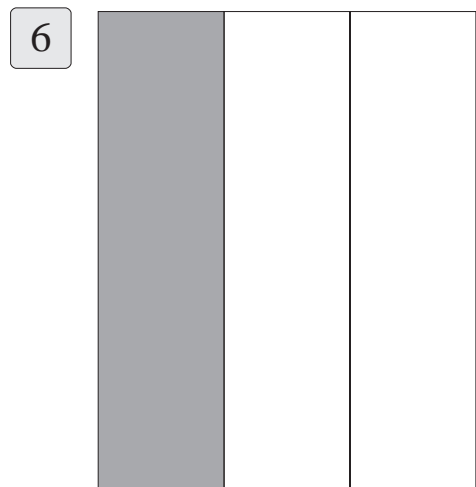
5



6

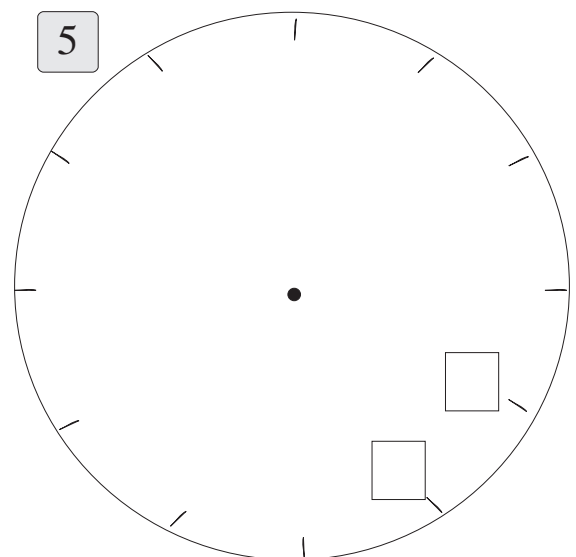
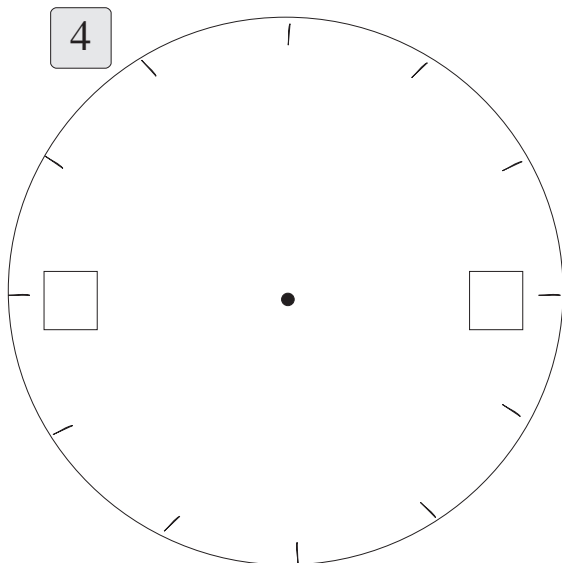
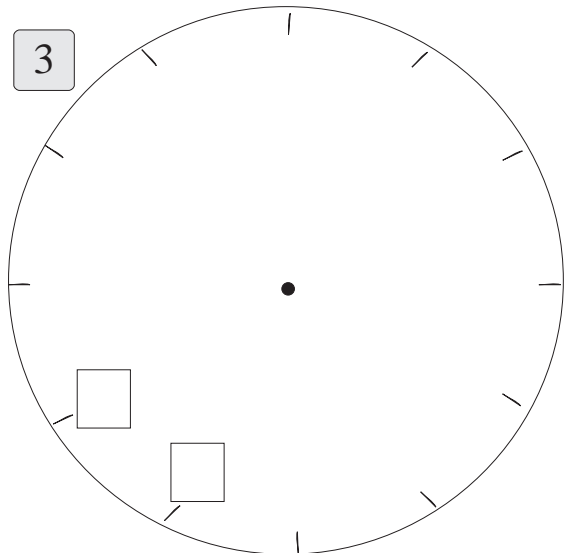
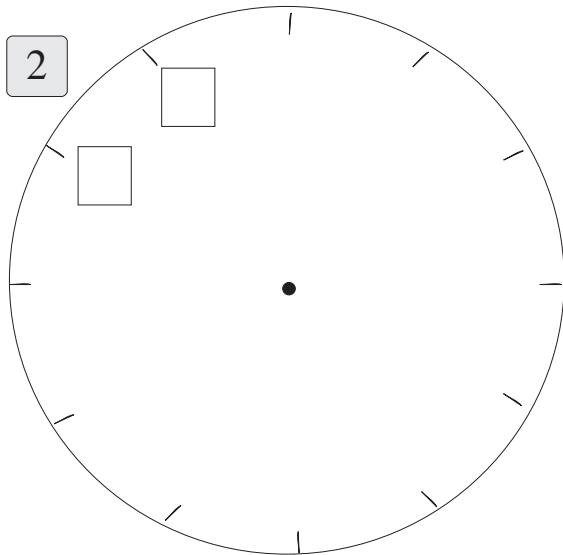
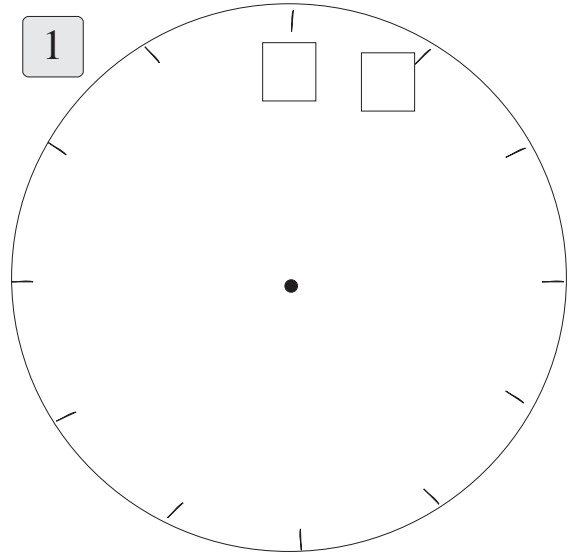
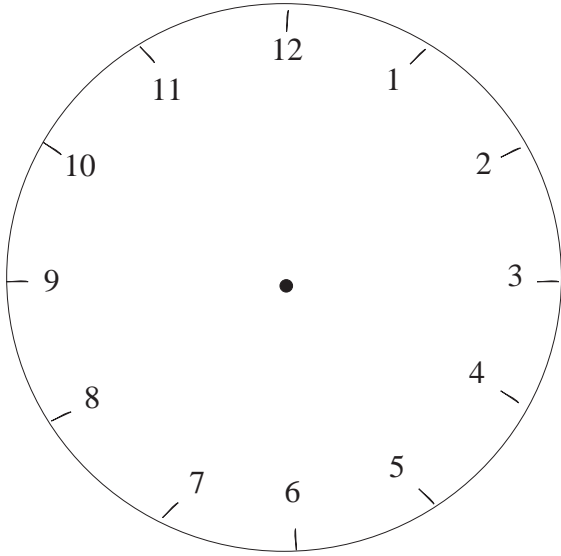


Cuir ✓ leis na cruthanna a bhfuil leath díobh scáthaithe.

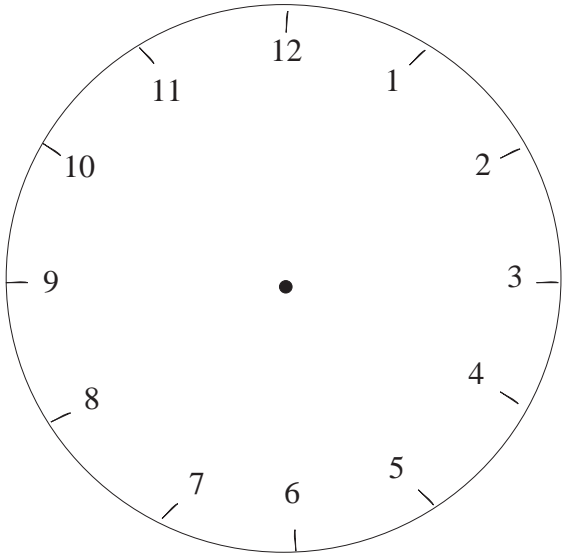
An tAm

Scríobh an uimhir cheart sa dá bhosca ar gach clog.

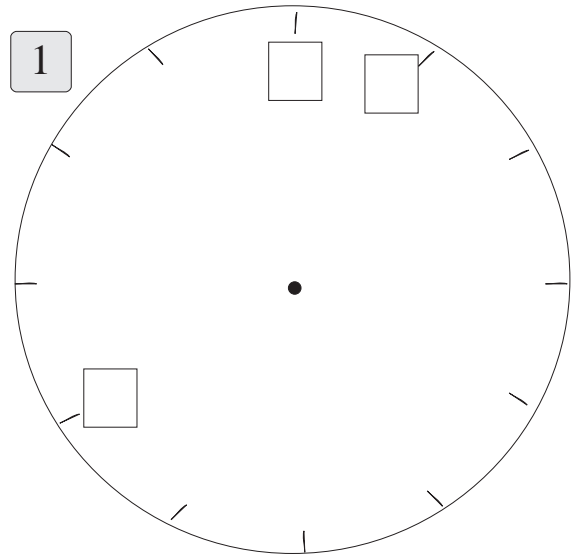


An tAm

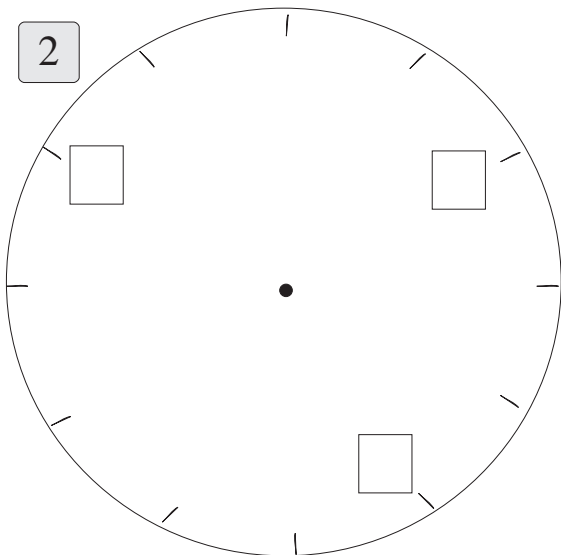
Scríobh an uimhir cheart sna trí bhosca ar gach clog.



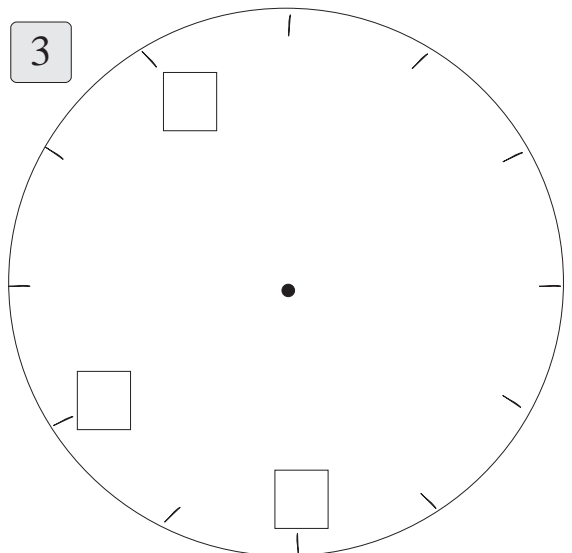
1



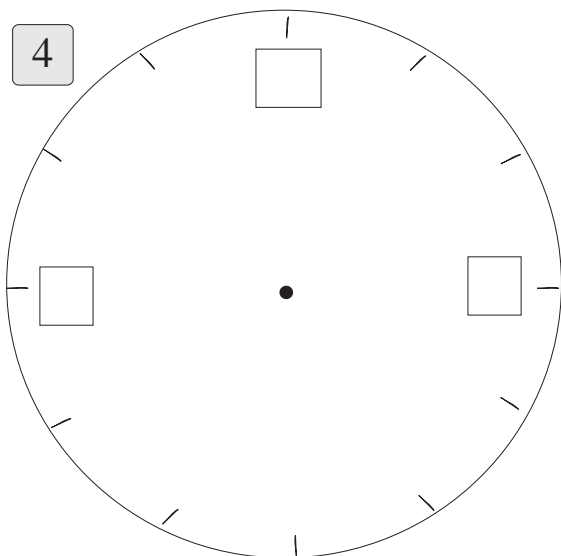
2



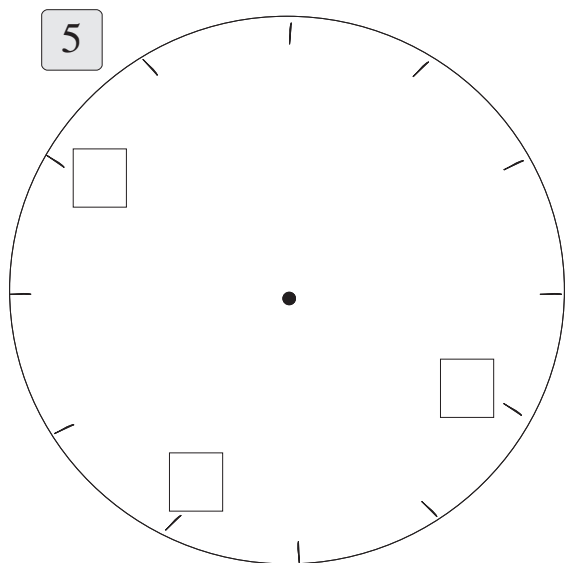
3



4



5



Comhair na spotaí ar gach dalmátach.

1



2



3



4



5



6



7




8



9




1	2	3	4	5	6	7	8	9	10
11	12	13	14	15	16	17	18	19	20
21	22	23	24	25	26	27	28	29	30
31	32	33	34	35	36	37	38	39	40
41	42	43	44	45	46	47	48	49	50
51	52	53	54	55	56	57	58	59	60
61	62	63	64	65	66	67	68	69	70
71	72	73	74	75	76	77	78	79	80
81	82	83	84	85	86	87	88	89	90
91	92	93	94	95	96	97	98	99	100



$10 + 10 + 10 = 30$

1	2	3	4	5	6	7	8	9	10
11	12	13	14	15	16	17	18	19	20
21	22	23	24	25	26	27	28	29	30
31	32	33	34	35	36	37	38	39	40
41	42	43	44	45	46	47	48	49	50
51	52	53	54	55	56	57	58	59	60
61	62	63	64	65	66	67	68	69	70
71	72	73	74	75	76	77	78	79	80
81	82	83	84	85	86	87	88	89	90
91	92	93	94	95	96	97	98	99	100



$10 + 10 + 10 + 10 = 40$

Scríobh an uimhir cheart i ngach bosca atá folamh ar an 100-chearnóg.

									10
									20
									30
									40
									50
51		53		55		57		59	60
61	62		64		66		68		70
71		73		75		77		79	80
81			84			87			90
91	92							99	100

2 dheich sin 20

3 dheich sin 30

4 dheich sin 40

1

Caith tomhas!

5 dheich sin

6 dheich sin

7 ndeich sin

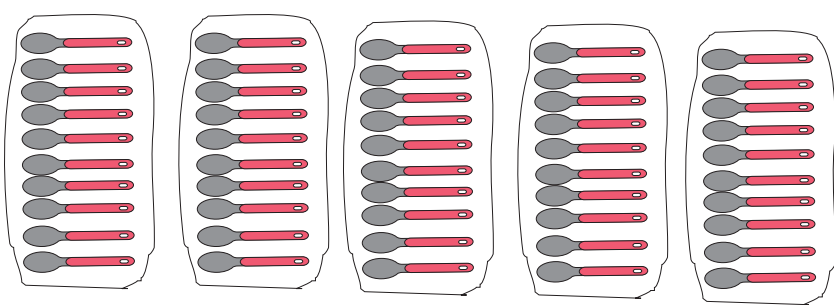
8 ndeich sin

9 ndeich sin

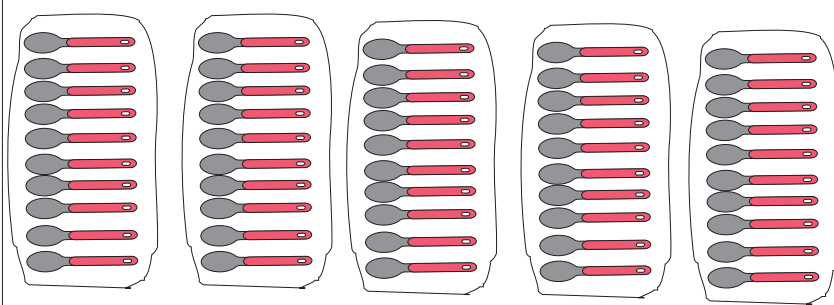
1



5 dheich




2



5 dheich agus
2 (dhá) aonad



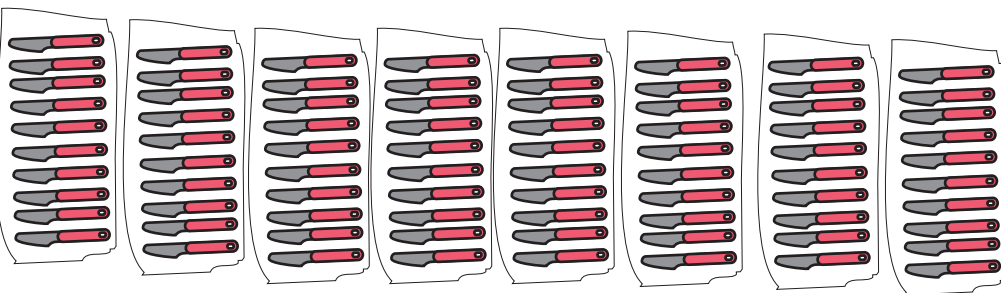
3



6 dheich




4



8 ndeich




5




9 ndeich



Ceangail na poncanna.











Airgead



Siopadóireacht



1	Bhí agam	Chaith mé	Tá fágtha agam
		5 cent	
2	Bhí agam	Chaith mé	Tá fágtha agam
		8 cent	
3	Bhí agam	Chaith mé	Tá fágtha agam
	 	3 cent	
4	Bhí agam	Chaith mé	Tá fágtha agam
	 	7 cent	
5	Bhí agam	Chaith mé	Tá fágtha agam
	 	6 cent	

1	2	3	4	5	6	7	8	9	10
11	12	13	14	15	16	17	18	19	20
21	22	23	24	25	26	27	28	29	30
31	32	33	34	35	36	37	38	39	40
41	42	43	44	45	46	47	48	49	50
51	52	53	54	55	56	57	58	59	60
61	62	63	64	65	66	67	68	69	70
71	72	73	74	75	76	77	78	79	80
81	82	83	84	85	86	87	88	89	90
91	92	93	94	95	96	97	98	99	100

1 Comhair siar ó 10.

<input type="text"/>	<input type="text"/>	<input type="text"/>	<input type="text"/>	<input type="text"/>	<input type="text"/>	<input type="text"/>	<input type="text"/>	<input type="text"/>	<input type="text"/>
----------------------	----------------------	----------------------	----------------------	----------------------	----------------------	----------------------	----------------------	----------------------	----------------------

2 Comhair siar ó 20.

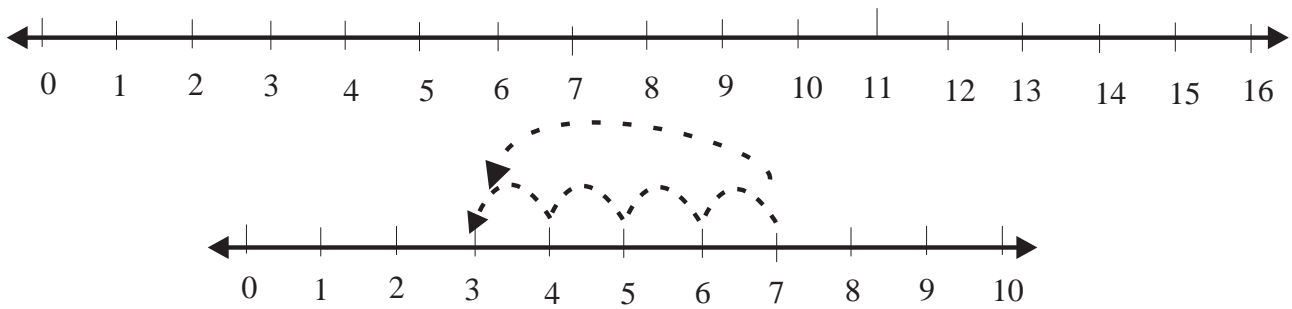
20	<input type="text"/>	<input type="text"/>	<input type="text"/>	<input type="text"/>	<input type="text"/>	<input type="text"/>	<input type="text"/>	<input type="text"/>	<input type="text"/>	<input type="text"/>	<input type="text"/>	<input type="text"/>	<input type="text"/>	<input type="text"/>	<input type="text"/>	<input type="text"/>	<input type="text"/>	<input type="text"/>	1
----	----------------------	----------------------	----------------------	----------------------	----------------------	----------------------	----------------------	----------------------	----------------------	----------------------	----------------------	----------------------	----------------------	----------------------	----------------------	----------------------	----------------------	----------------------	---

3 Féach ar an 100-chearnóg. Comhair ar aghaidh i ndeicheanna.

10	<input type="text"/>	<input type="text"/>	<input type="text"/>	<input type="text"/>	<input type="text"/>	<input type="text"/>	<input type="text"/>	<input type="text"/>	<input type="text"/>	100
----	----------------------	----------------------	----------------------	----------------------	----------------------	----------------------	----------------------	----------------------	----------------------	-----

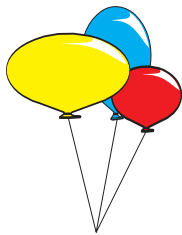
<input type="text"/>

Comhair siar.



$$7 - 4 = 3$$

1



Bhí 14 bhalún ag Colm. Phléasc sé 4 (ceithre) cinn.

Cé mhéad balún a bhí fágtha aige?



2




Bhí 6 ubh Chásca ag Máire. D'ith sí 3 cinn.

Cé mhéad ubh a bhí fágtha aici?



3




Bhí 20 duilleog ar chrann Eilíse.
D'imigh 10 gcinn le gaoth.

Cé mhéad duilleog a bhí fágtha?



4




Bhí 16 shliogán ag Cáit. Chaill sí 8 gcinn.

Cé mhéad sliogán a bhí fágtha aici?



Meán Fómhair 2002						
Dé Domhnaigh	Dé Luain	Dé Máirt	Dé Céadaoin	Déardaoin	Dé hAoine	Dé Sathairn
1	2	3	4	5	6	7
8	9	10	11	12	13	14
15	16	17	18	19	20	21
22	23	24	25	26	27	28
29	30					

1 Cé mhéad lá i Meán Fómhair? 

2 Cén lá an chéad lá den mhí? 

3 Cén lá an 4ú lá den mhí? 

4 Cén lá an 8ú lá den mhí? 

5 Cén lá an 10ú lá den mhí? 

6 Cé mhéad Aoine i Meán Fómhair 2002? 

7 Cé mhéad Luan i Meán Fómhair 2002? 

1	2	3	4	5	6	7	8	9	10
11	12	13	14	15	16	17	18	19	20
21	22	23	24	25	26	27	28	29	30
31	32	33	34	35	36	37	38	39	40
41	42	43	44	45	46	47	48	49	50
51	52	53	54	55	56	57	58	59	60
61	62	63	64	65	66	67	68	69	70
71	72	73	74	75	76	77	78	79	80
81	82	83	84	85	86	87	88	89	90
91	92	93	94	95	96	97	98	99	100

Scríobh na huimhreacha cuí sna boscaí folmha.

1

23	24	25											
----	----	----	--	--	--	--	--	--	--	--	--	--	--

2

31	32	33											
----	----	----	--	--	--	--	--	--	--	--	--	--	--

3

28	29												
----	----	--	--	--	--	--	--	--	--	--	--	--	--

Comhair siar.

4

39	38	37	36										
----	----	----	----	--	--	--	--	--	--	--	--	--	--

5

36	35	34	33										
----	----	----	----	--	--	--	--	--	--	--	--	--	--

6

29	28	27											
----	----	----	--	--	--	--	--	--	--	--	--	--	--

7



30	29												
----	----	--	--	--	--	--	--	--	--	--	--	--	--


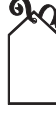
8



34	33												
----	----	--	--	--	--	--	--	--	--	--	--	--	--



--


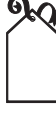
Scríobh na huimhreacha ar na lipéid.



1 ← 0 1 2 3 4 5 6   →


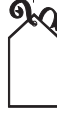
2 ← 10 11 12 13 14   →



3 ← 20 21 22 23   →



4 ← 25 26   →

5 ← 70 71   →

6 ← 49 51   →

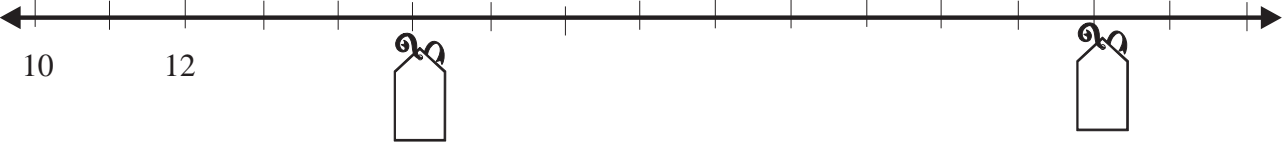
7 ← 31 35   →

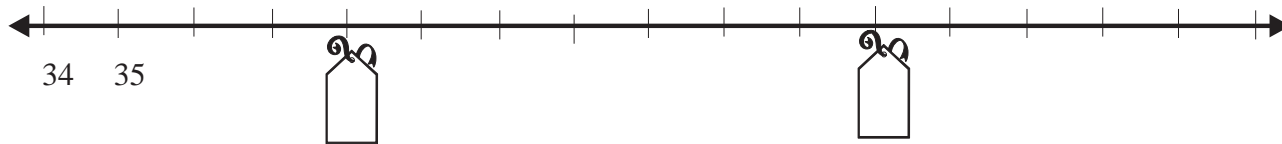
8 ← 82 88   →

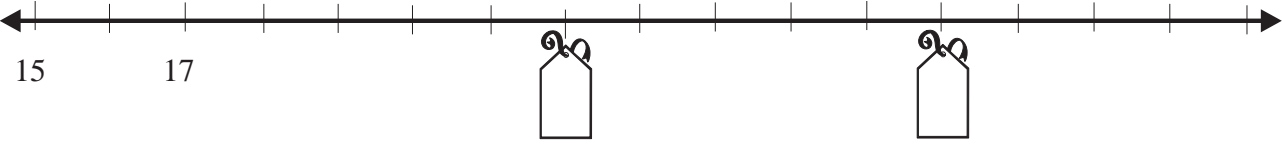
9 ← 77  88  →


1	2	3	4	5	6	7	8	9	10
11	12	13	14	15	16	17	18	19	20
21	22	23	24	25	26	27	28	29	30
31	32	33	34	35	36	37	38	39	40
41	42	43	44	45	46	47	48	49	50
51	52	53	54	55	56	57	58	59	60
61	62	63	64	65	66	67	68	69	70
71	72	73	74	75	76	77	78	79	80
81	82	83	84	85	86	87	88	89	90
91	92	93	94	95	96	97	98	99	100


Scríobh na huimhreacha ar na lipéid.

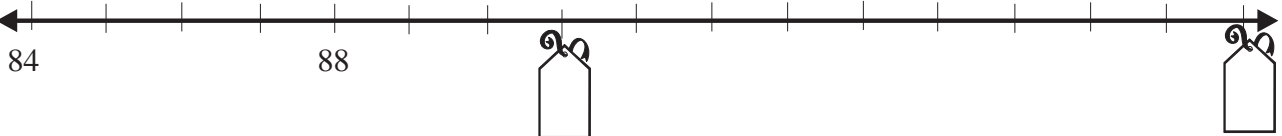
1 

2 

3 

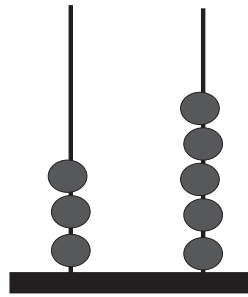
4 

5 

6 

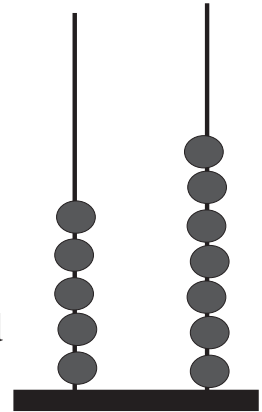
Deicheanna agus Aonaid

35 = 3 dheich agus 5 aonad



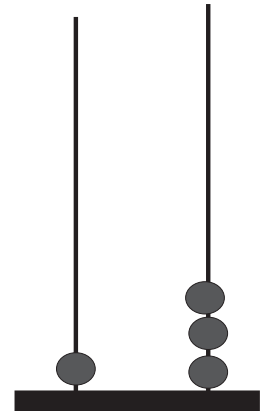
1

57 = dheich agus n-aonad




2

13 = deich agus aonad




3

26 = dheich agus aonad

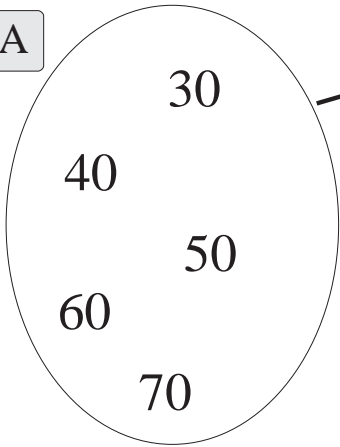


4

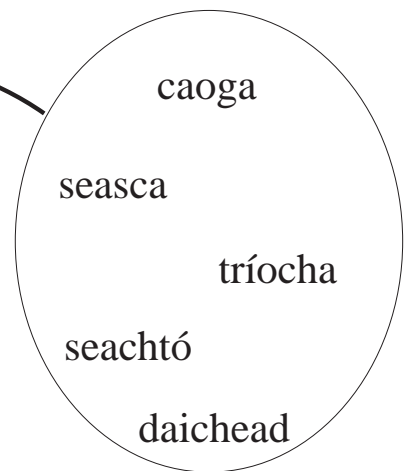
28 = dheich agus n-aonad



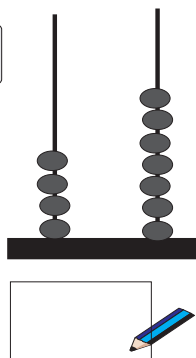
A



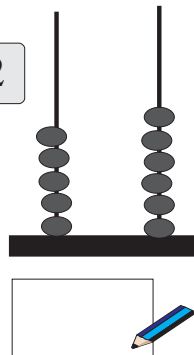
Meaitseáil na huimhreacha leis na focail.



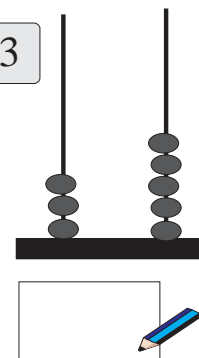
1



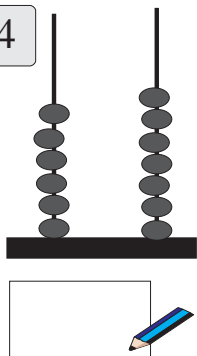
2



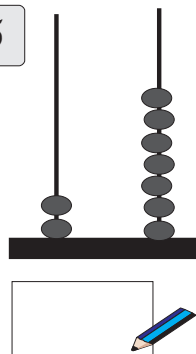
3



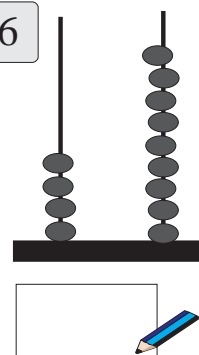
4



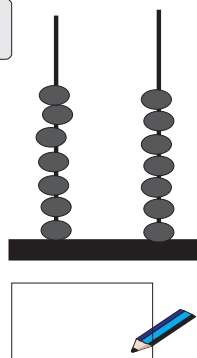
5



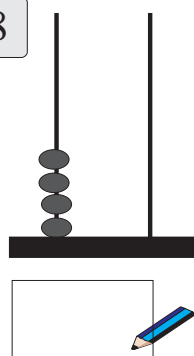
6



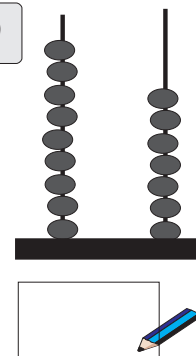
7



8



9



Laethanta

An Domhnach

Dé Domhnaigh

An Luan

Dé Luain

An Mháirt

Dé Máirt

An Chéadaoin

Dé Céadaoin

An Déardaoin

Déardaoin

An Aoine

Dé hAoine

An Satharn

Dé Sathairn

1

Inniu



2

Inné



3

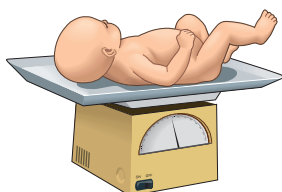
Amárach



4

Is é/í _____ an lá is fearr liom.

5



Rugadh ar an _____ mé.

Focail atá ar eolas agam

poncanna

ceangail

déan

an chéad cheann eile

a deich

níos mó ná

a haon

aonad

patrún

críochnaigh

cad?

dealaigh

níos lú ná

a chlog

am


suimigh

seas

tusa

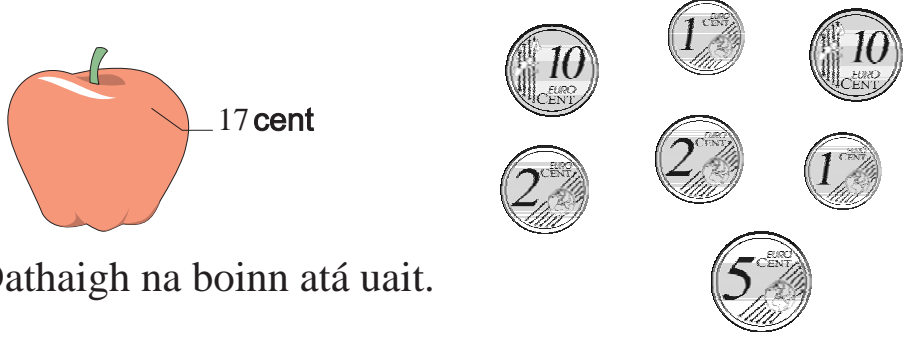
cá bhfuil?

1



Cé mhéad cent? cent 

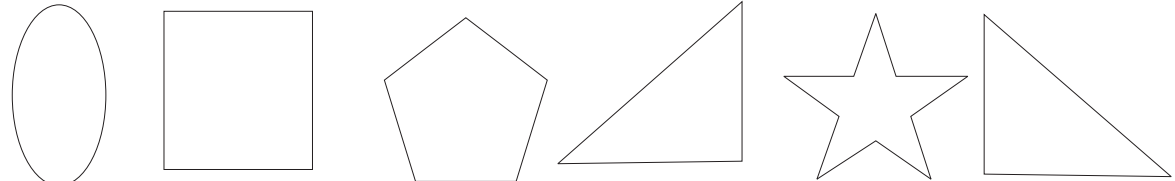
2




Dathaigh na boinn atá uait.

3

Dathaigh na triantáin.

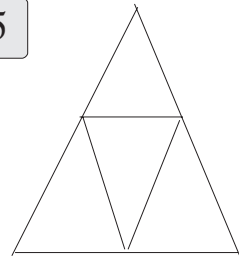



4




Dathaigh na boinn atá uait.


5



Cé mhéad triantán? 

6



Sríobh síos an uimhir. 

1	2	3	4	5	6	7	8	9	10
11	12	13	14	15	16	17	18	19	20
21	22	23	24	25	26	27	28	29	30
31	32	33	34	35	36	37	38	39	40
41	42	43	44	45	46	47	48	49	50
51	52	53	54	55	56	57	58	59	60
61	62	63	64	65	66	67	68	69	70
71	72	73	74	75	76	77	78	79	80
81	82	83	84	85	86	87	88	89	90
91	92	93	94	95	96	97	98	99	100


Comhair suas go dtí 100.


Dathaigh an freagra ar an 100-chearnóg.


1


$4 + 10 = 14$

$14 + 10 = 24$

$24 + 10 =$ 

$34 + 10 =$ 


$44 + 10 =$ 


$54 + 10 =$ 


2


$7 + 10 = 17$

$17 + 10 = 27$

$27 + 10 =$ 

$37 + 10 =$ 

$47 + 10 =$ 

$57 + 10 =$ 



ciallaíonn > níos mó ná

ciallaíonn < níos lú ná

An tAm Digiteach

1



leathuair tar éis 9

2



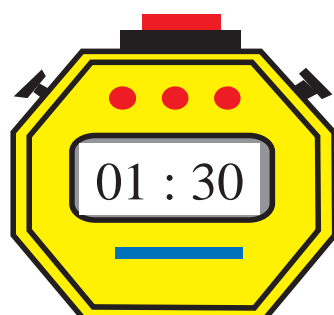
leathuair tar éis

3



leathuair tar éis

4



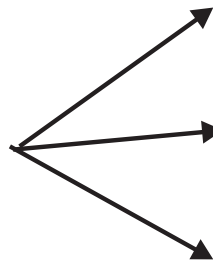
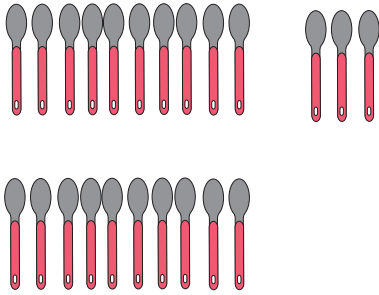
leathuair tar éis

5



a chlog

Athghrúpáil



$$10 + 10 + 3$$

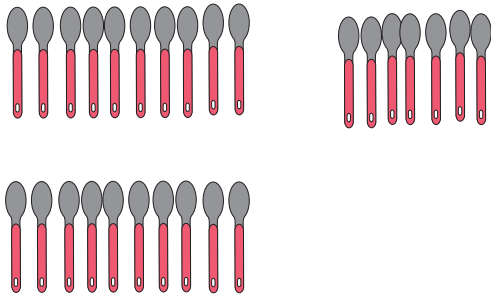
$$10 + (10 + 3)$$

$$10 + 13$$

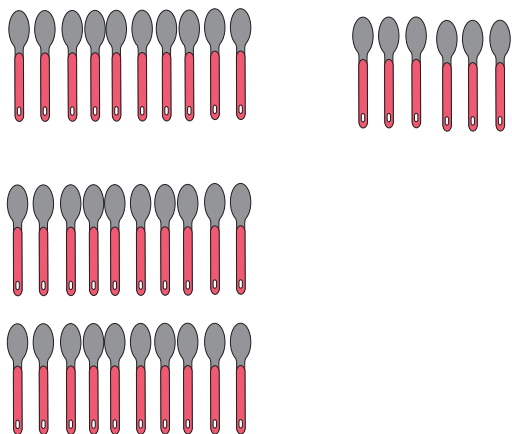
$$= 23$$

Déan na ceisteanna thíos ar an mbealach céanna.

1



2



Dealú

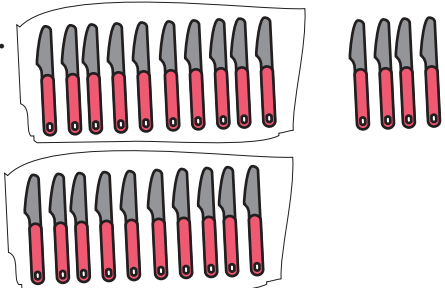
Sampla : Bain 6 ó 24.

$$\begin{array}{r} 24 \\ - 6 \\ \hline \end{array}$$

Ní féidir 6 a bhaint ó 4.

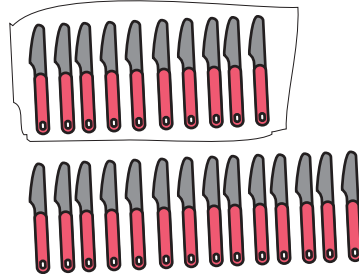
Is ionann 24 agus 2 (dhá) dheich agus 4 aonad.

$10 + 10 + 4$



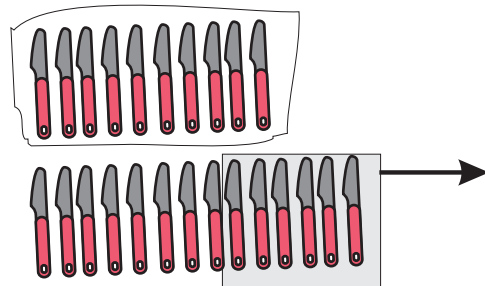
Déan athghrúpáil ar 24 mar 1 deich amháin agus 14 aonad.

$10 + 14$



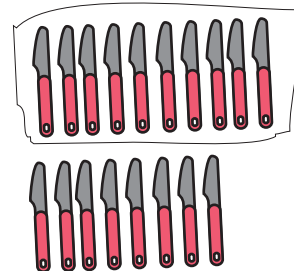
Bain 6 as 14 anois.

$10 + (14 - 6)$



Tá 1 deich amháin agus 8 n-aonad fágtha agat.

$10 + 8 = 18$



$$\begin{array}{r} 1 \ 14 \\ \cancel{24} \\ - 6 \\ \hline 18 \end{array}$$

Is é 18 (a hocht déag) an freagra.


1

$\begin{array}{r} 21 \\ - 5 \\ \hline \end{array}$	$\begin{array}{r} 21 \\ - 3 \\ \hline \end{array}$	$\begin{array}{r} 25 \\ - 7 \\ \hline \end{array}$	$\begin{array}{r} 23 \\ - 6 \\ \hline \end{array}$	$\begin{array}{r} 24 \\ - 8 \\ \hline \end{array}$	$\begin{array}{r} 23 \\ - 9 \\ \hline \end{array}$
--	--	--	--	--	--

2

$\begin{array}{r} 45 \\ - 17 \\ \hline \end{array}$	$\begin{array}{r} 66 \\ - 47 \\ \hline \end{array}$	$\begin{array}{r} 44 \\ - 7 \\ \hline \end{array}$	$\begin{array}{r} 30 \\ - 16 \\ \hline \end{array}$	$\begin{array}{r} 40 \\ - 26 \\ \hline \end{array}$	$\begin{array}{r} 62 \\ - 53 \\ \hline \end{array}$
---	---	--	---	---	---


3





Sceallóga prátaí
35 cent


Cén tsóinseáil a bheadh agam as 50 cent?


Cuir 4 leis an bhfreagra ceart.

5 cent 


25 cent 

85 cent 

15 cent 

10 cent 


4





28 cent


Cén tsóinseáil a bheadh agam as 50 cent?

Cuir 4 leis an bhfreagra ceart.

28 cent 

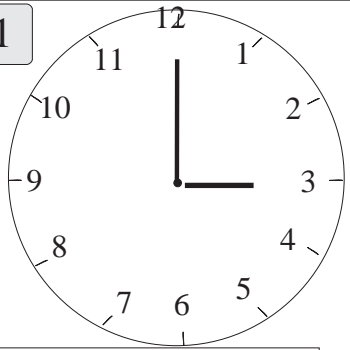
32 cent 

12 cent 

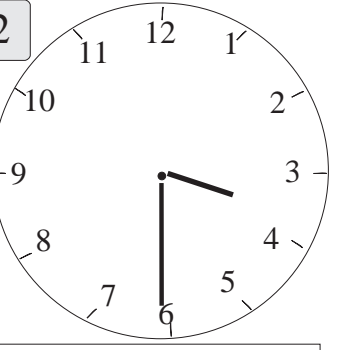
22 cent 

Scríobh síos an t-am.


1




2




3



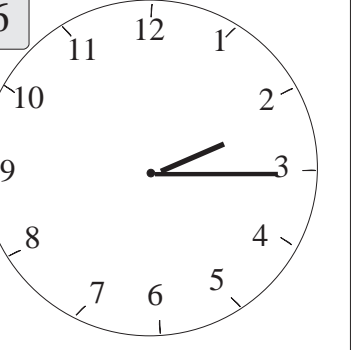
4




5




6



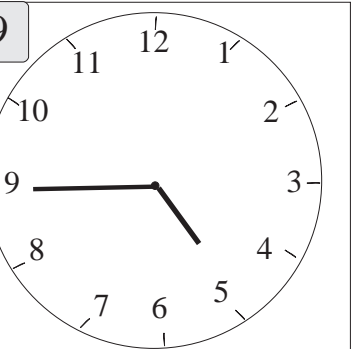
7



8



9



Cén fad ama eatarthu seo:

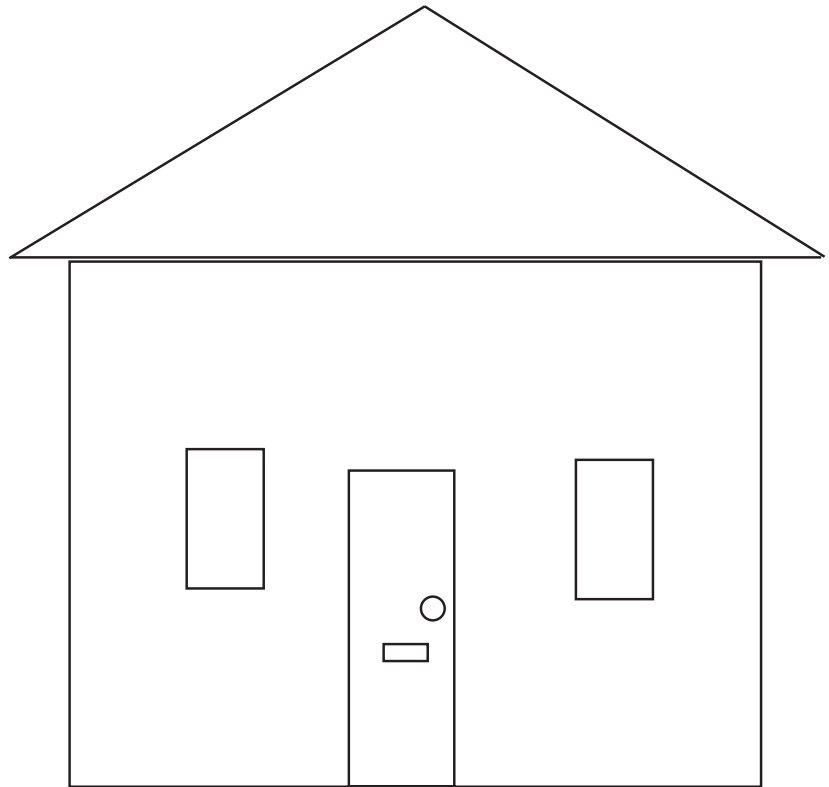
10 10 a chlog agus leathuair tar éis 10?

11 11 a chlog agus leathuair tar éis 11?

12 1 a chlog agus 2 a chlog?

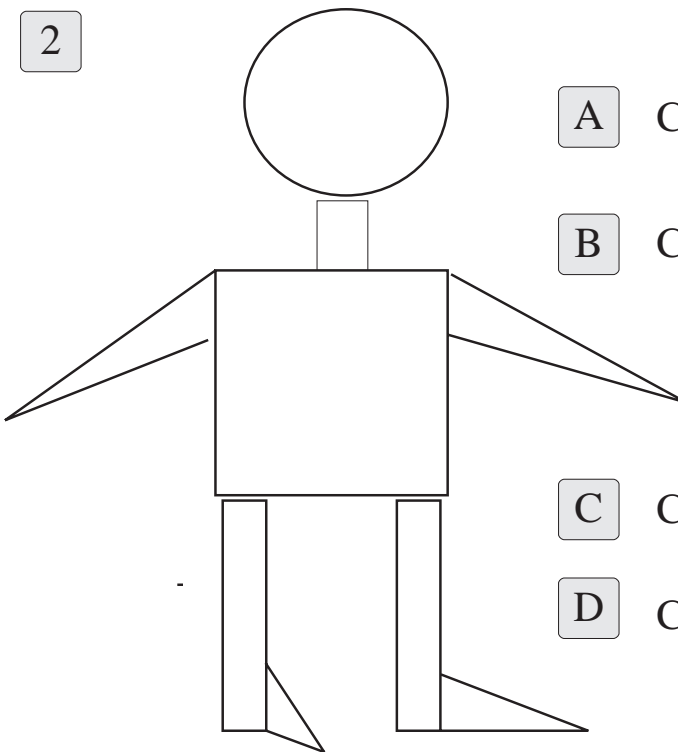
13 ceathrú tar éis 8 agus 9 a chlog?

1




- A Cé mhéad cearnóg?
- B Cé mhéad ciorcal?
- C Cé mhéad dronuilleog?
- D Cé mhéad triantán?

2



- A Cé mhéad cearnóg?
- B Cé mhéad dronuilleog?
- C Cé mhéad ciorcal?
- D Cé mhéad triantán?


1



A Cé mhéad cearnóg?




B Cé mhéad ciorcal?




C Cé mhéad dronuilleog?




D Cé mhéad triantán?




2



A Cé mhéad cearnóg?




B Cé mhéad ciorcal?



C Cé mhéad dronuilleog?

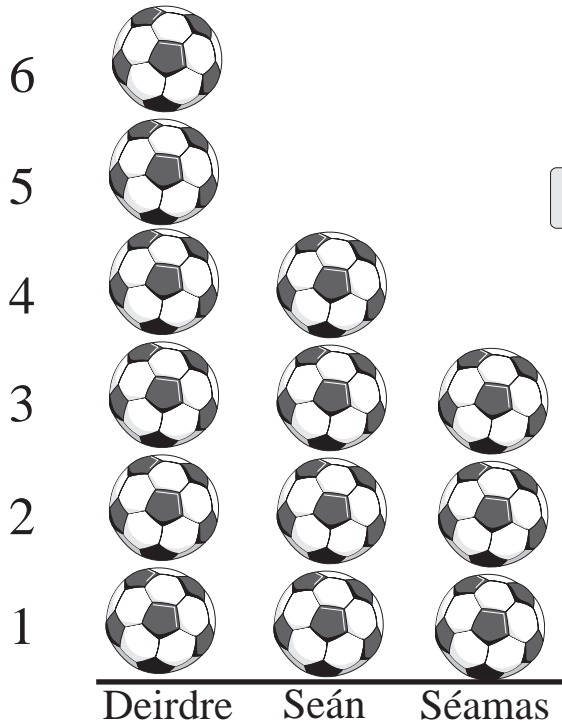


D Cé mhéad triantán?



1

An méid cúl a scóráil triúr imreoirí i 2003



A Cé mhéad cúl a scóráil Seán?



B Cé mhéad cúl a scóráil Séamas?

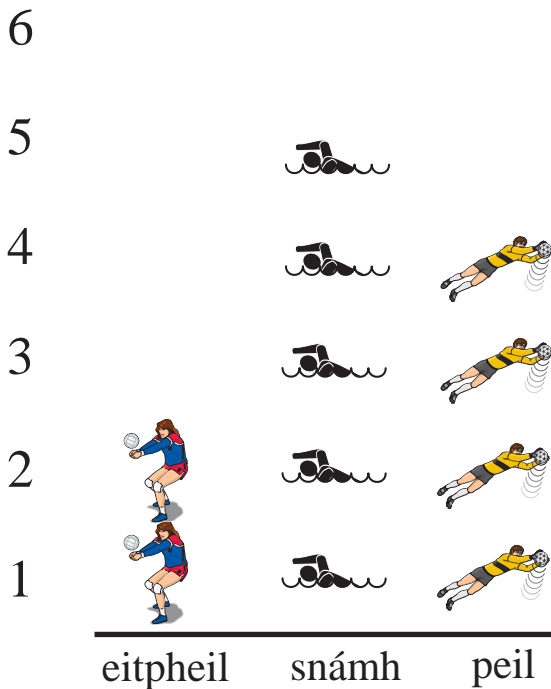


C Cé a fuair an méid is mó cúl?



2

Na spóirt is fearr le daltaí




A Cé mhéad dalta ar fearr leo an snámh?



B Cé mhéad dalta ar fearr leo an eitpheil?



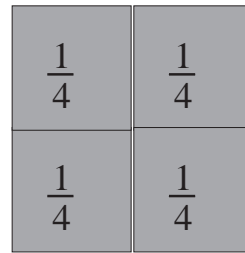
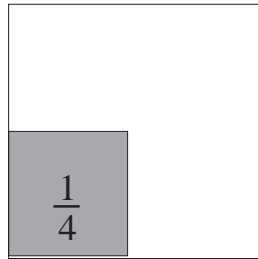
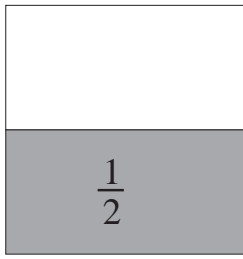
C Cé mhéad dalta ar fearr leo an pheil?



D Cén spórt is fearr leis an ngrúpa?

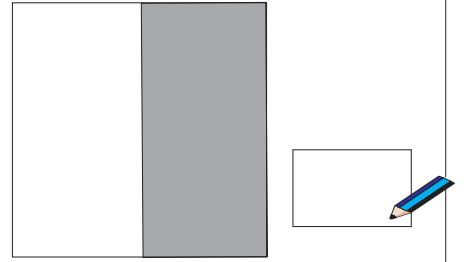
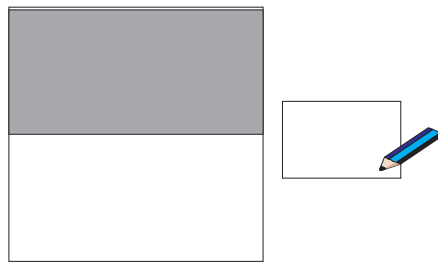
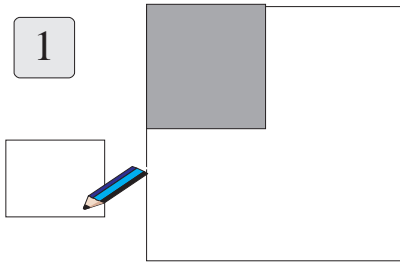


Codáin

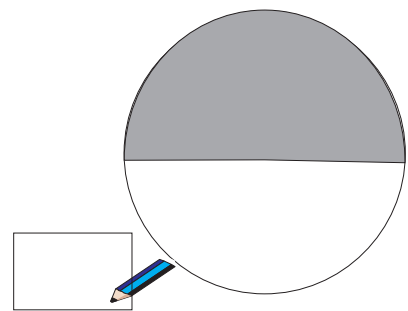
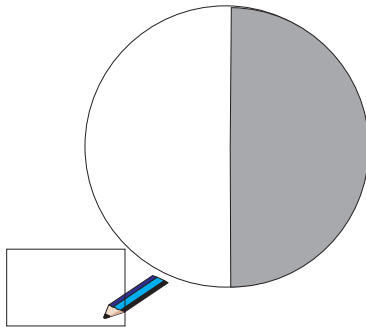
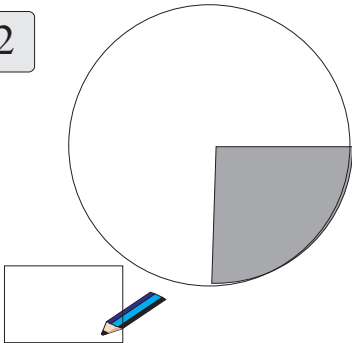


Cén codán atá scáthaithe?

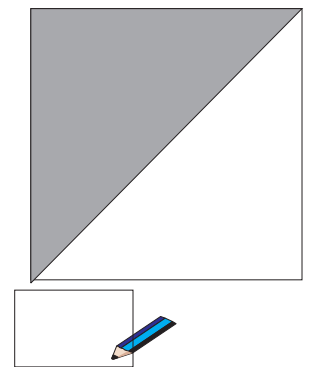
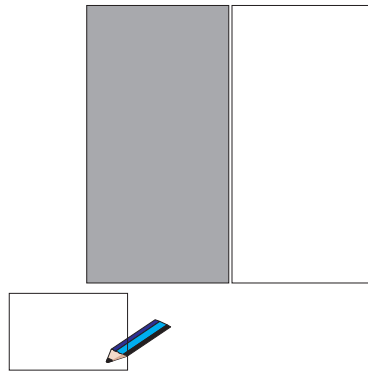
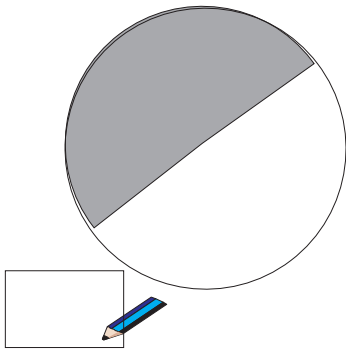
1



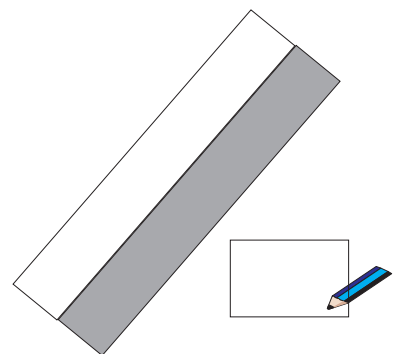
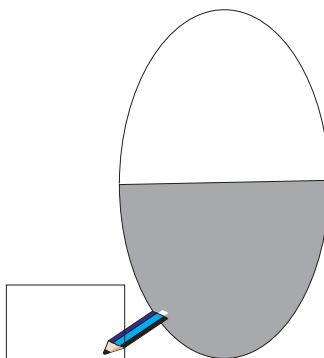
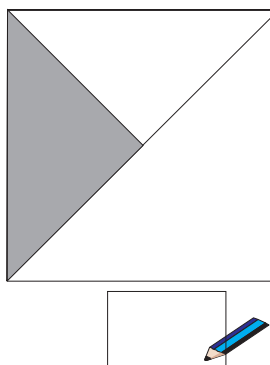
2




3





4





1


$23 - 9 =$ 


$28 - 8 =$ 

$20 - 10 =$ 


$24 - 7 =$ 


$21 - 4 =$ 


$30 - 6 =$ 


$42 - 7 =$ 


2


$41 - 10 =$ 


$28 - 9 =$ 

$43 - 8 =$ 

$36 - 0 =$ 

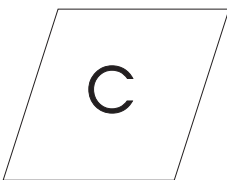
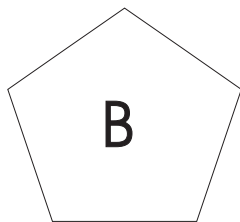

$46 - 0 =$ 

$53 - 3 =$ 

$21 - 1 =$ 

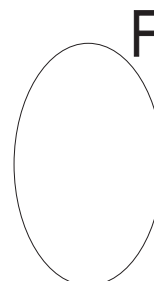
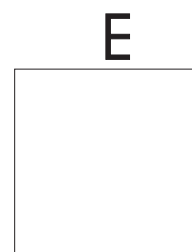
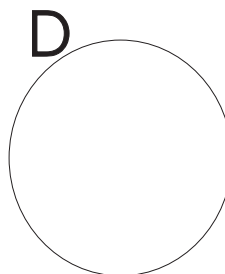
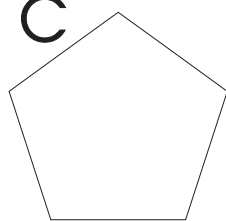

3

Dathaigh na cearnóga.




4

Dathaigh na cearnóga.

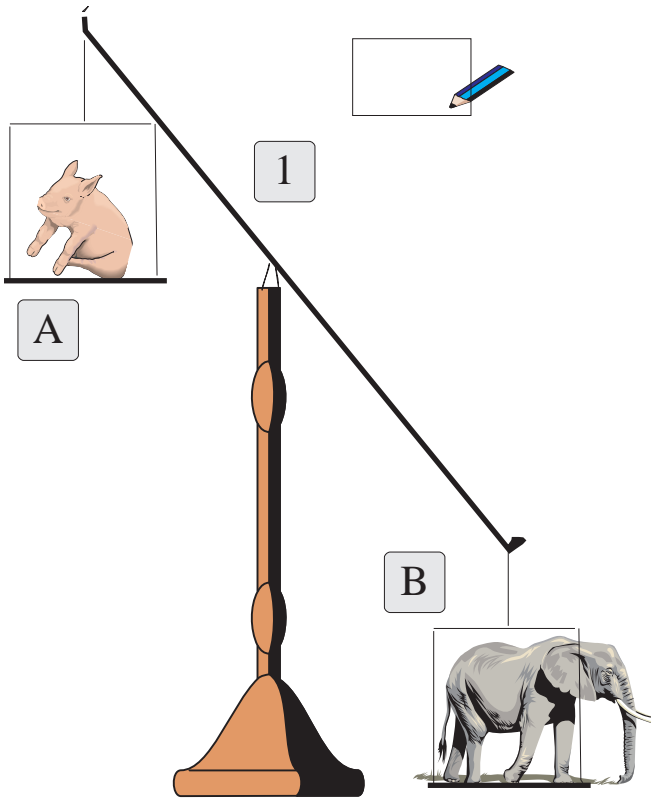


5

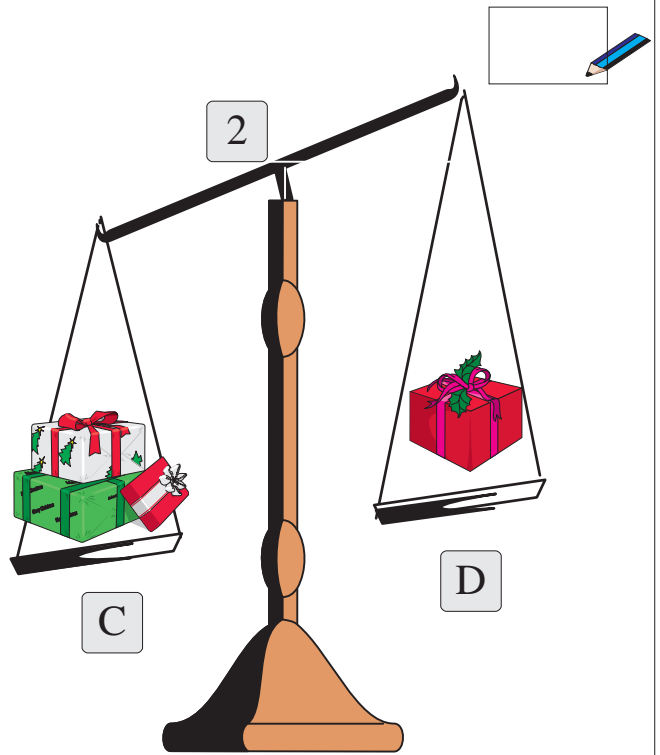
Bain 8 cent ó 17 cent.

$17\text{cent} - 8\text{cent} =$ cent 

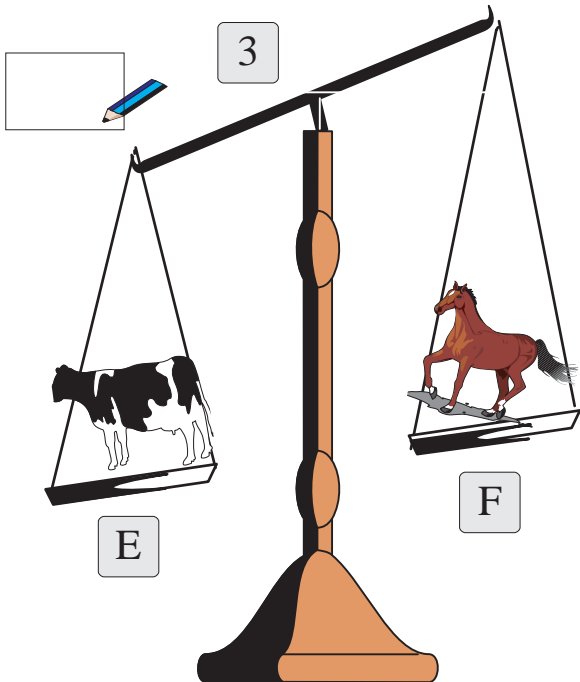
Cé acu is troime, A nó B?



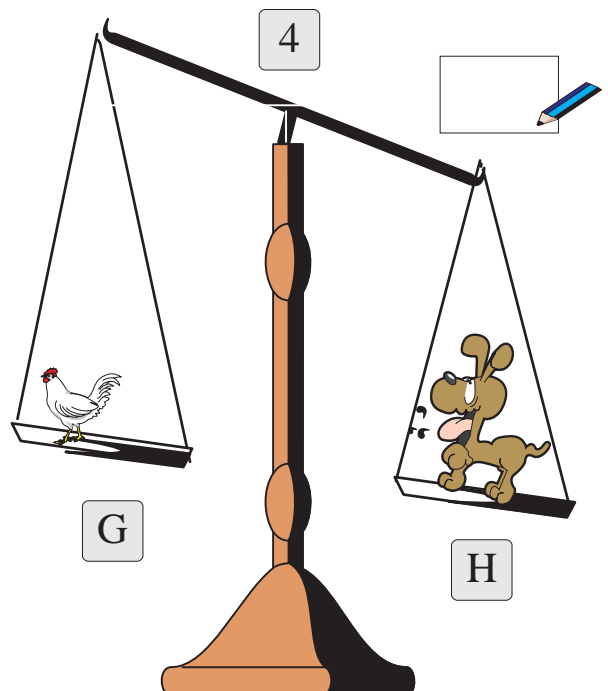
Cé acu is troime, C nó D?




Cé acu is troime, E nó F?



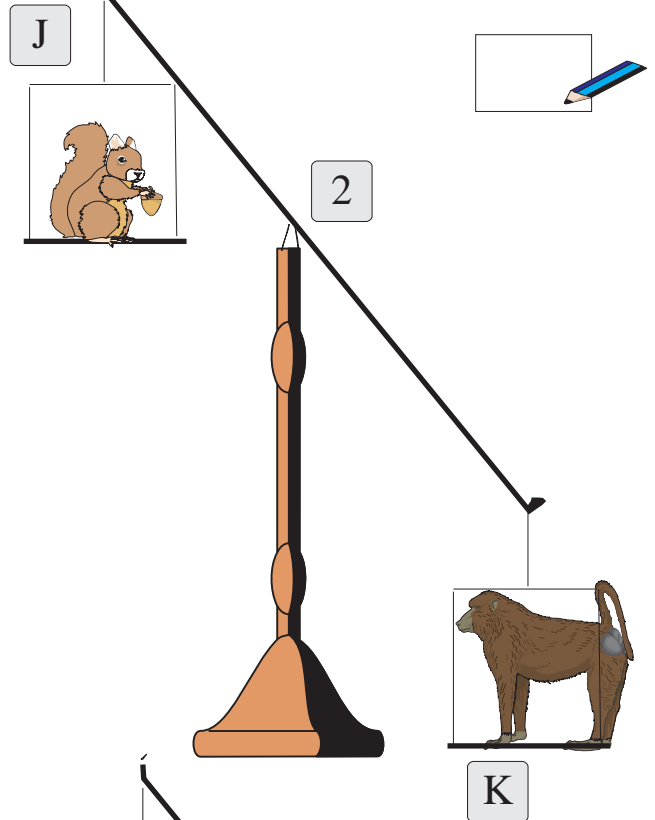
Cé acu is troime, G nó H?



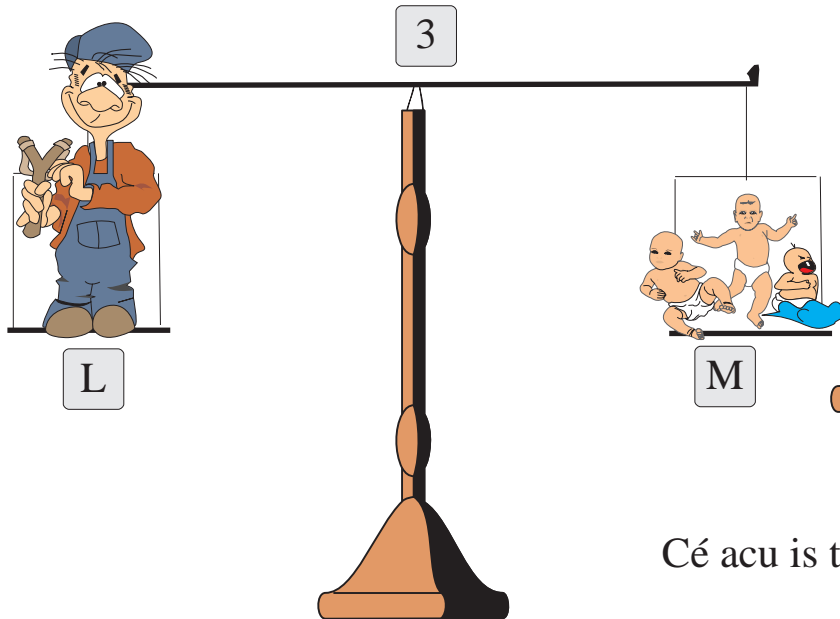
Cé acu is troime, H nó I?



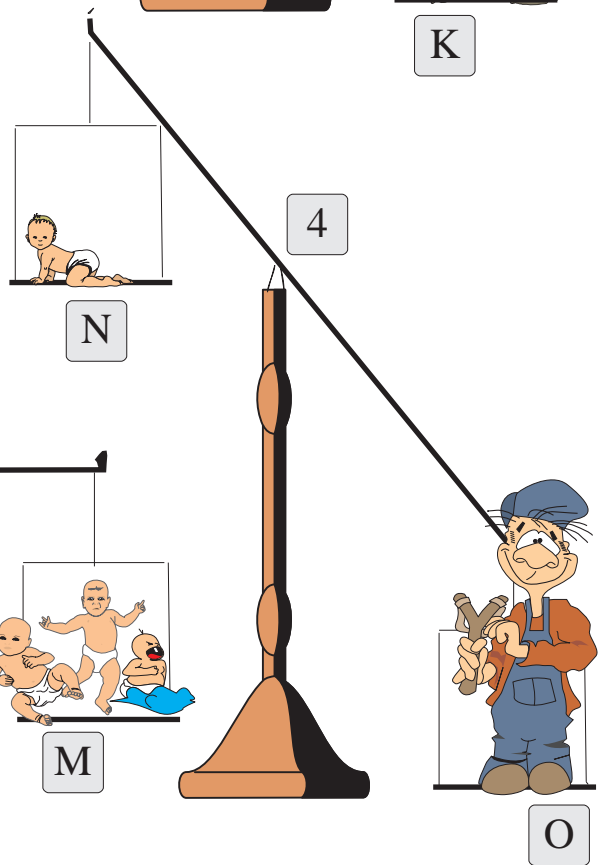
Cé acu is troime, J nó K?



Cé acu is troime, L nó M?




Cé acu is troime, N nó O?



Bhí 8 mbeach ar bhláth. D'eitil 5 cinn leo. Thuirling 7 mbeach eile ar an mbláth. Cé mhéad beach a bhí ar an mbláth ansin?

Cuir ✓ sa bhosca ceart.

1



- 15
- 13
- 10
- 20
- 12

2




Bhí 20 bóin Dé ar phlanda. D'eitil 6 cinn leo. Thuirling 8 mbóin Dé eile ar an bplanda. Cé mhéad bóin Dé a bhí air ansin?

Cuir ✓ sa bhosca ceart.

- 28
- 26
- 6
- 22
- 24


3



Bhí 17 n-eitleán ag an aerfort. Thuirling 6 cinn eile agus d'eitil 4 cinn leo. Cé mhéad eitleán a bhí ag an aerfort ansin?

Cuir ✓ sa bhosca ceart.

- 15
- 21
- 27
- 19



Tá 1 chileagram amháin meáchain i mála siúcra.

Tá ½ chileagram meáchain i bpaicéad de chalóga arbhair.

Tá 2 chileagram meáchain i mála plúir.

Féach ar bhianna eile sa chistin. Aimsigh meáchan an bhia ar an bpaicéad. Scríobh síos an meáchan.

1

$$\begin{array}{r} 5c \\ + 4c \\ \hline c \end{array}$$

$$\begin{array}{r} 7c \\ + 3c \\ \hline c \end{array}$$

$$\begin{array}{r} 6c \\ + 4c \\ \hline c \end{array}$$

$$\begin{array}{r} 8c \\ + 2c \\ \hline c \end{array}$$

$$\begin{array}{r} 9c \\ + 3c \\ \hline c \end{array}$$

$$\begin{array}{r} 3c \\ + 7c \\ \hline c \end{array}$$

2

$$\begin{array}{r} 17c \\ - 8c \\ \hline c \end{array}$$

$$\begin{array}{r} 14c \\ - 6c \\ \hline c \end{array}$$

$$\begin{array}{r} 16c \\ - 6c \\ \hline c \end{array}$$

$$\begin{array}{r} 15c \\ - 6c \\ \hline c \end{array}$$

$$\begin{array}{r} 11c \\ - 10c \\ \hline c \end{array}$$

$$\begin{array}{r} 18c \\ - 9c \\ \hline c \end{array}$$

3

$$\begin{array}{r} 16c \\ - 7c \\ \hline c \end{array}$$

$$\begin{array}{r} 18c \\ - 9c \\ \hline c \end{array}$$

$$\begin{array}{r} 14c \\ - 7c \\ \hline c \end{array}$$


$$\begin{array}{r} 15c \\ - 8c \\ \hline c \end{array}$$


$$\begin{array}{r} 12c \\ - 9c \\ \hline c \end{array}$$


$$\begin{array}{r} 10c \\ - 8c \\ \hline c \end{array}$$


Cleachtadh


1


$9 + 8 =$ 


$7 + 0 =$ 

$0 + 8 =$ 


$7 + 8 =$ 


$8 + 7 =$ 


$7 + 7 =$ 


$3 + 7 =$ 


2


$9 + 0 =$ 


$10 + 0 =$ 

$9 + 6 =$ 


$6 + 9 =$ 

$2 + 8 =$ 

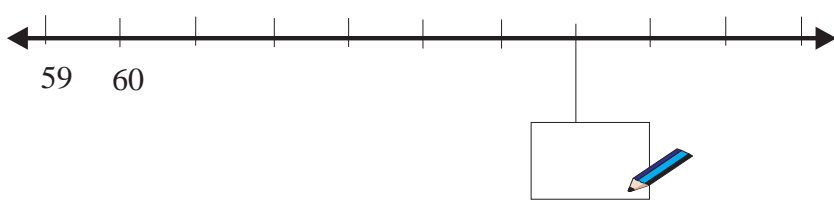
$9 + 2 =$ 

$1 + 8 =$ 

3



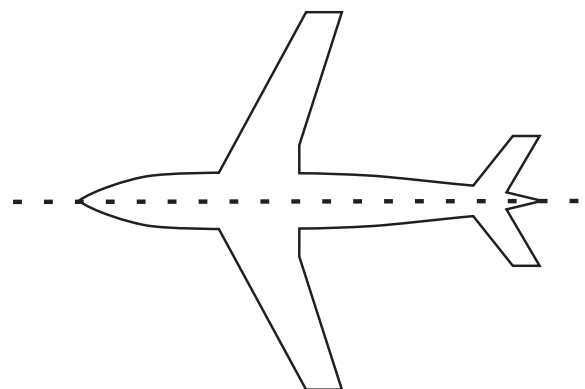
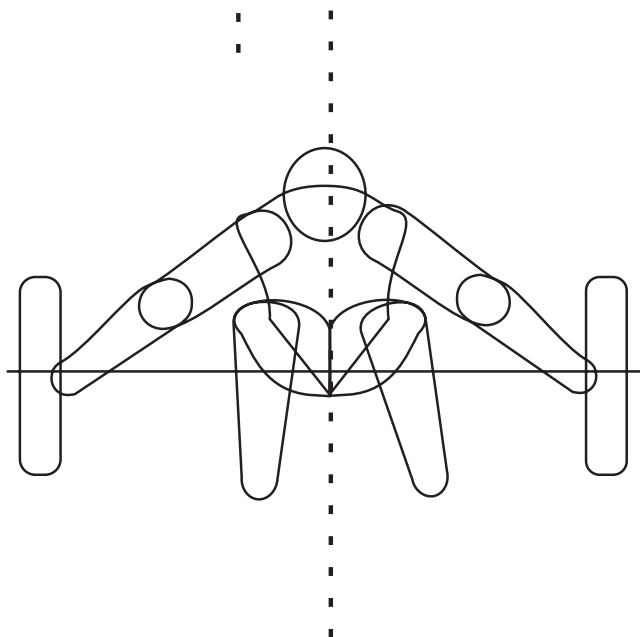
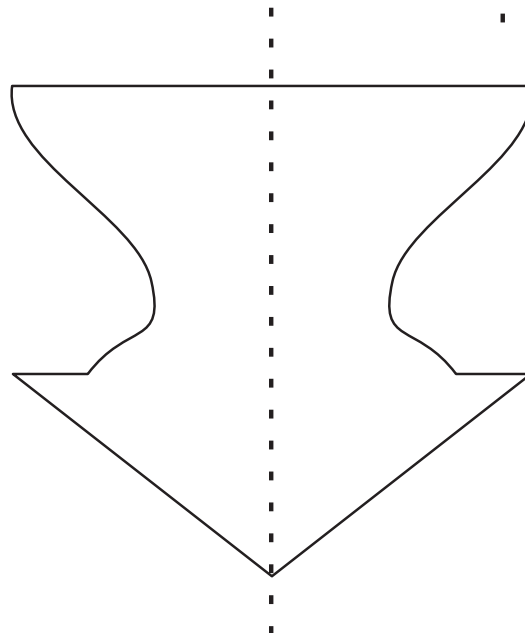
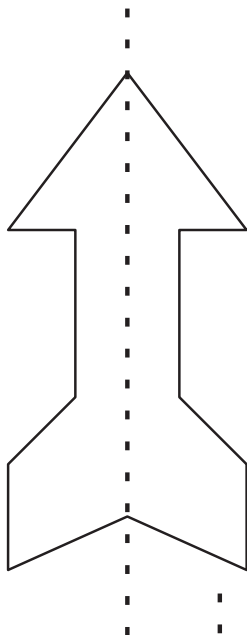
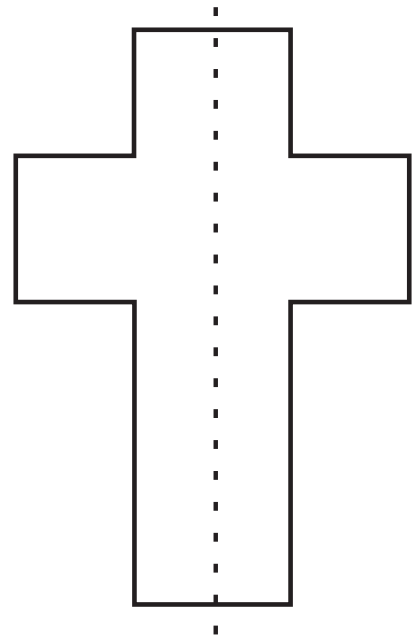
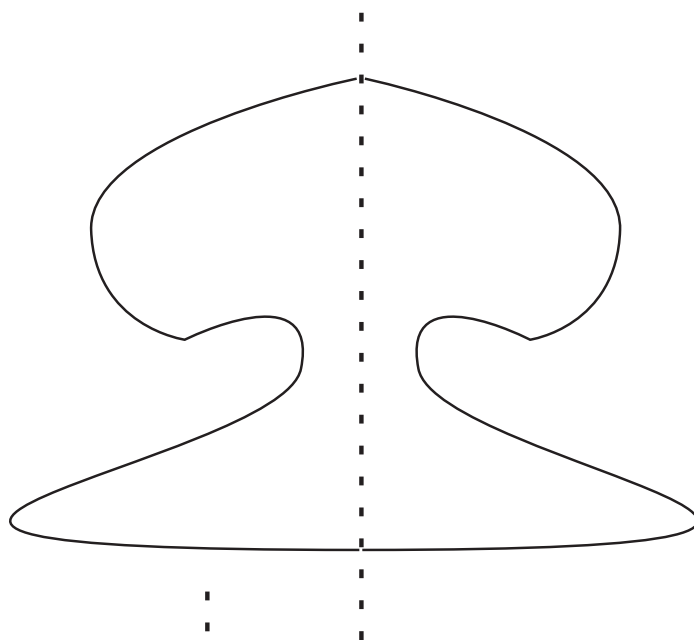
4



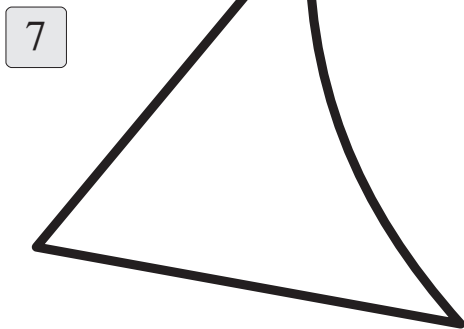
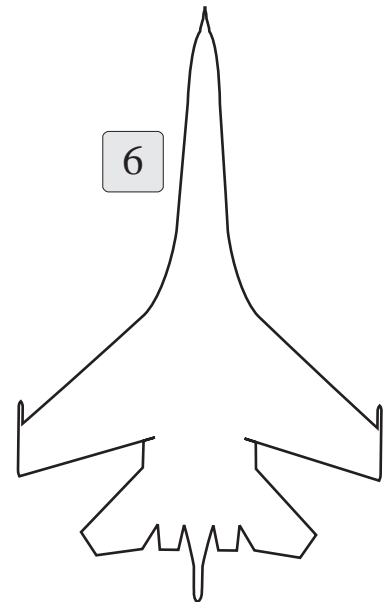

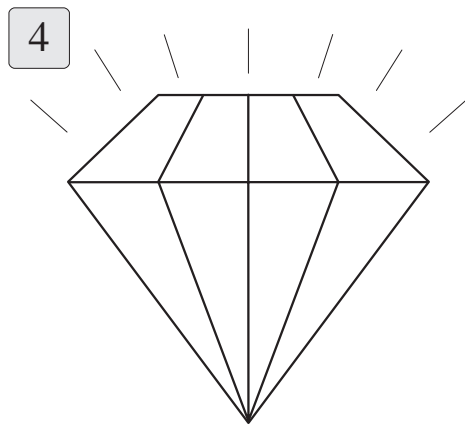
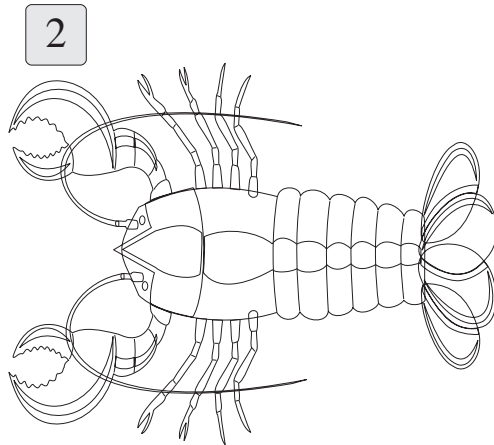
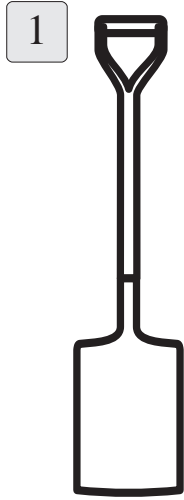
5



Siméadracht Luíonn leath amháin anuas go cruinn ar an leath eile.

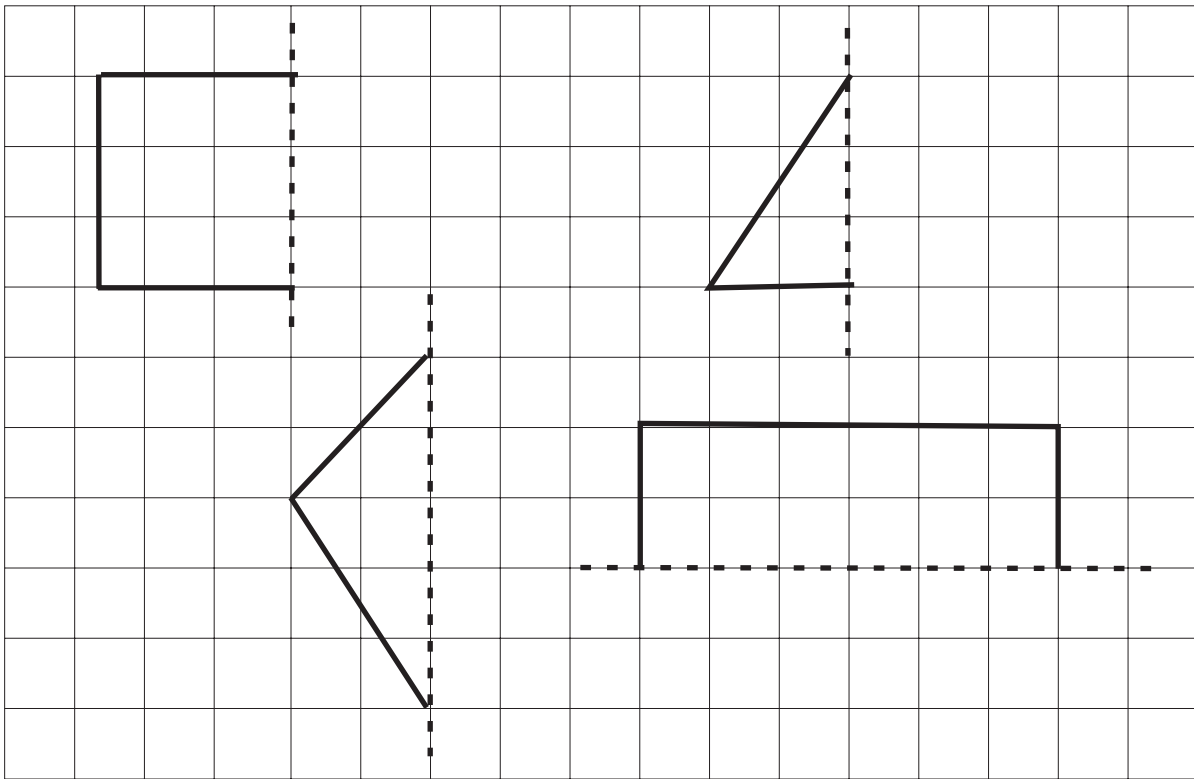


Tarraing na haiseanna siméadrachta.




Níl an cruth seo siméadrach.

Tarraing an leath eile.




Tarraing 3 chruth shiméadracha anseo thíos.



Airde

Fad



Cén airde tú?

An bhfuil tú > 1 mhéadar amháin ar airde?

An bhfuil tú níos airde ná 1 mhéadar amháin?

Tá

Níl

1

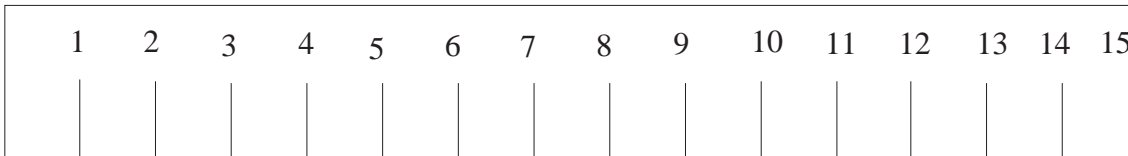
An bhfuil do theach níos airde ná 1 mhéadar amháin?

2

An bhfuil an scoil níos airde ná 1 mhéadar amháin?

3

An bhfuil cat níos airde ná 1 mhéadar amháin?



Tá an rialóir seo 15 cheintiméadar ar fad.

4

An bhfuil do mhéar láir < nó > 15 cheintiméadar?

5

An bhfuil an leathanach seo < nó > 15 cheintiméadar?

6

An bhfuil do pheann luaidhe < nó > 15 cheintiméadar?

7

An bhfuil do theilifíseán < nó > 15 cheintiméadar?

níos faide

níos giorra

1



Tá mo lámh _____ ná méadar.

2



Tá an crann úll _____ ná méadar.

3



Tá mo choinín _____ ná méadar.

4



Tá mo luchóg _____ ná méadar.

5



Bíonn capall _____ ná méadar.

6

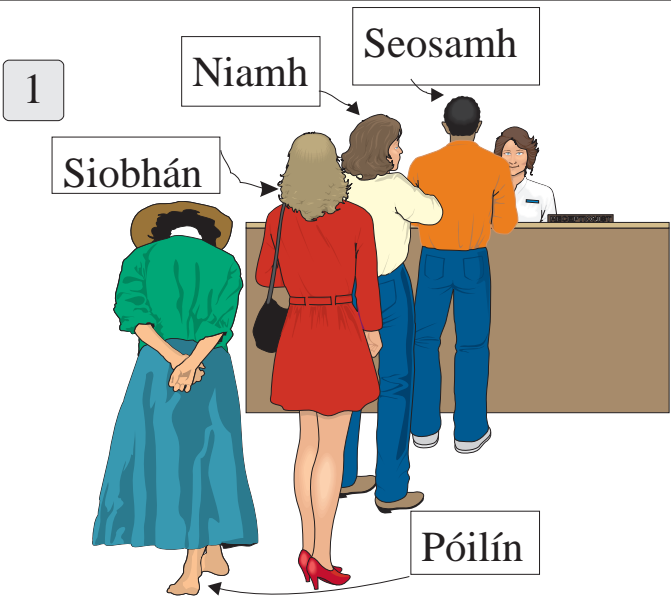


Bíonn sioráf _____ ná méadar.

7



Bíonn séipéal _____ ná méadar.



1

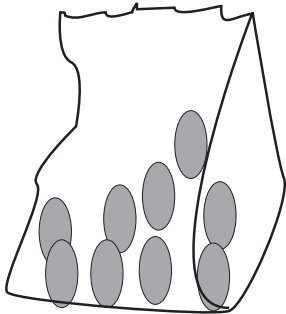
Tá Seosamh san ___ú háit sa líne.

Tá Niamh sa ___ú háit sa líne.

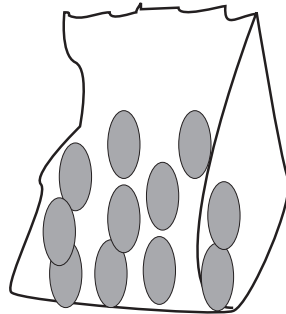
Tá Siobhán sa ___ú háit sa líne.

Tá Póilín sa ___ú háit sa líne.

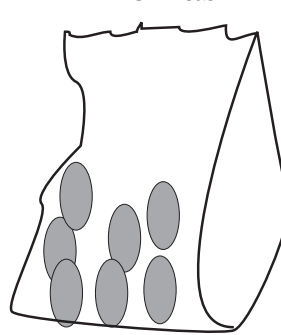
Maitiú



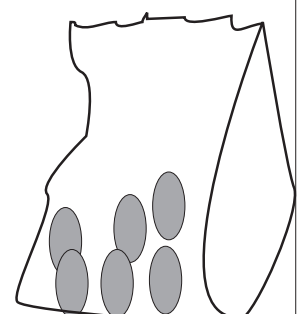
Liam



Tomás



Dónall



2 Cé aige a bhfuil an méid is mó? 

3

15cent	12cent	11cent	16cent	9cent	18cent
$- 8\text{cent}$	$- 4\text{cent}$	$- 8\text{cent}$	$- 6\text{cent}$	$- 8\text{cent}$	$- 8\text{cent}$
_____	_____	_____	_____	_____	_____
cent	cent	cent	cent	cent	cent

4

9cent	8cent	4cent	6cent	11cent	3cent
6cent	1cent	4cent	5cent	7cent	4cent
$+ 3\text{cent}$	$+ 5\text{cent}$	$+ 4\text{cent}$	$+ 4\text{cent}$	$+ 1\text{cent}$	$+ 12\text{cent}$
_____	_____	_____	_____	_____	_____
cent	cent	cent	cent	cent	cent

1

30	50	70	20	10	80
<u>+ 20</u>	<u>+ 20</u>	<u>+ 10</u>	<u>+ 30</u>	<u>+ 50</u>	<u>+ 10</u>

2

70	30	40	50	80	60
<u>+ 20</u>	<u>+ 50</u>	<u>+ 50</u>	<u>+ 40</u>	<u>+ 0</u>	<u>+ 30</u>

Cé mhéad a chosnaíonn 3 bharr seacláide?

Cuir ✓ sa bhosca ceart.

3



8 cent

16 cent

38 cent

24 cent

22 cent

4



Cé mhéad a chosnaíonn 4 líreacán?

Cuir ✓ sa bhosca ceart.

10 cent

46 cent

64 cent

24 cent

Toilleadh

Leachtanna



Leacht is ea uisce.

Leacht is ea an cógas atá á ghlacadh ag an mbuachaill.

_____ is ea bainne.

_____ is ea peitreal.

_____ is ea tae.

Chun méid mór de leacht a thomhas is é an lítear (l) an tomhas a úsáidimid.

Chun méid beag de leacht a thomhas is é an millilítear (ml) an tomhas a úsáidimid.

Tá 5 ml den chógas á ghlacadh ag an mbuachaill.

Ná
dearmad

Is ionann deich ndeich agus céad.

Cleachtadh

Tarraing ciorcal timpeall ar an 3ú capall.



1

$6 + 4 + 3 =$

$7 + 3 + 8 =$

$5 + 5 + 6 =$

$8 + 3 + 8 =$

$9 + 4 + 6 =$

2


$8 + 3 + 4 + 4 =$

$6 + 6 + 0 + 8 =$

$4 + 11 + 2 + 1 =$

$7 + 6 + 5 + 4 =$

$8 + 0 + 3 + 0 =$



Cén airde tú?

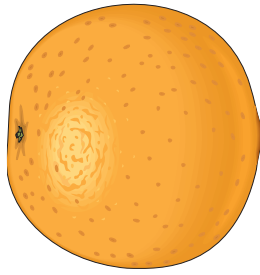
Cén meáchan tú?

Cén bhliain ar rugadh thú?

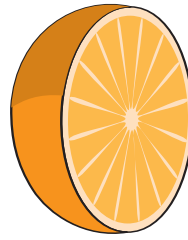
Cén mhí ina bhfuil do bhreithlá?

Cad é dáta do bhreithlae?


Codáin



Oráiste iomlán




leath




leath

Is mar a chéile an dá leath.

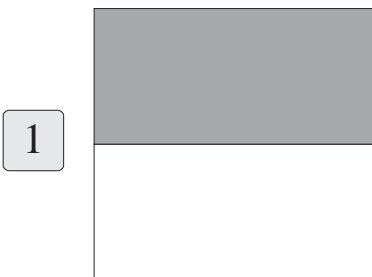
Scríobhaimid leath mar $\frac{1}{2}$ nó $\frac{1}{2}$.



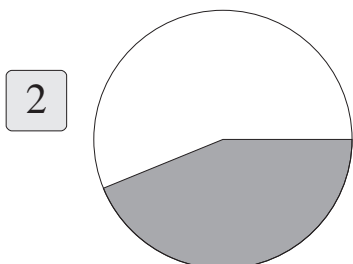
Gearradh an t-úll seo ina dhá chuid.
Ní mar a chéile an dá chuid.
Ní leath ceachtar den dá phíosá.



Gearradh an cúcumar seo ina dhá phíosá.
Ní mar a chéile an dá chuid.
Ní leath ceachtar den dá phíosá.

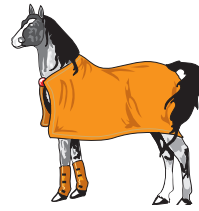


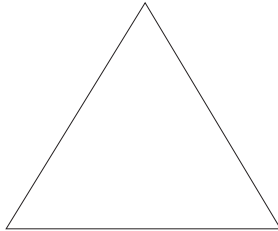



An bhfuil leath den chearnóg scáthaithe?



An bhfuil leath den chiorcal scáthaithe?

Dathaigh $\frac{1}{2}$ de gach cruth.



1 Cé mhéad capall a fheiceann tú?

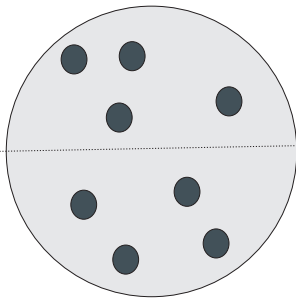


2 Cé mhéad capall a bhfuil marcach orthu?



Tá marcach ar $\frac{1}{2}$ de na capail. $\frac{1}{2}$ de 6 is ea 3.

3

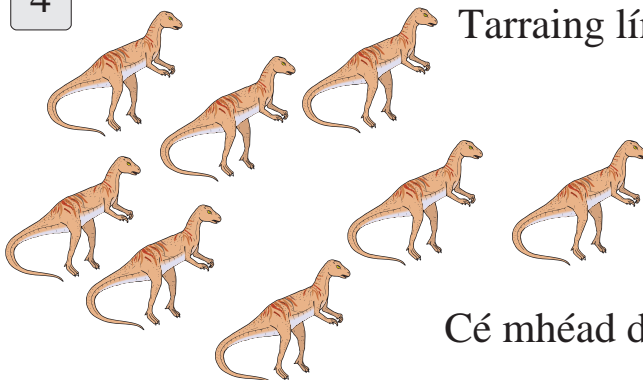


Cé mhéad ponc atá i $\frac{1}{2}$ an chiorcail?



_____ de 8 is ea 4.

4



Tarraing líne timpeall ar $\frac{1}{2}$ de na dineasáir.

Cé mhéad dineasár laistigh den líne?




Cleachtadh Breise

1

2	4	5	8	7	6
6	5	5	8	5	7
<u>+4</u>	<u>+3</u>	<u>+9</u>	<u>+3</u>	<u>+4</u>	<u>+6</u>

2

7	6	7	9	8	7
8	8	8	8	7	8
<u>+0</u>	<u>+8</u>	<u>+6</u>	<u>+6</u>	<u>+9</u>	<u>+2</u>




Tá an trucail roimh an gcapall agus carráiste.

Tá an bus roimh an trucail.

Tá an carr roimh an mbus.

3



Tá _____ sa chéad (1ú) háit.

Tá _____ sa dara (2ú) háit.


Tá _____ sa tríú (3ú) háit.

Tá _____ sa cheathrú (4ú) háit.

Cleachtadh breise

Suimigh agus Dealraig

1

$10 - 8 =$ 


$4 - 3 =$ 


$8 - 1 =$ 


$5 - 2 =$ 


$7 - 5 =$ 

2

$8 + 4 + 3 + 2 =$ 

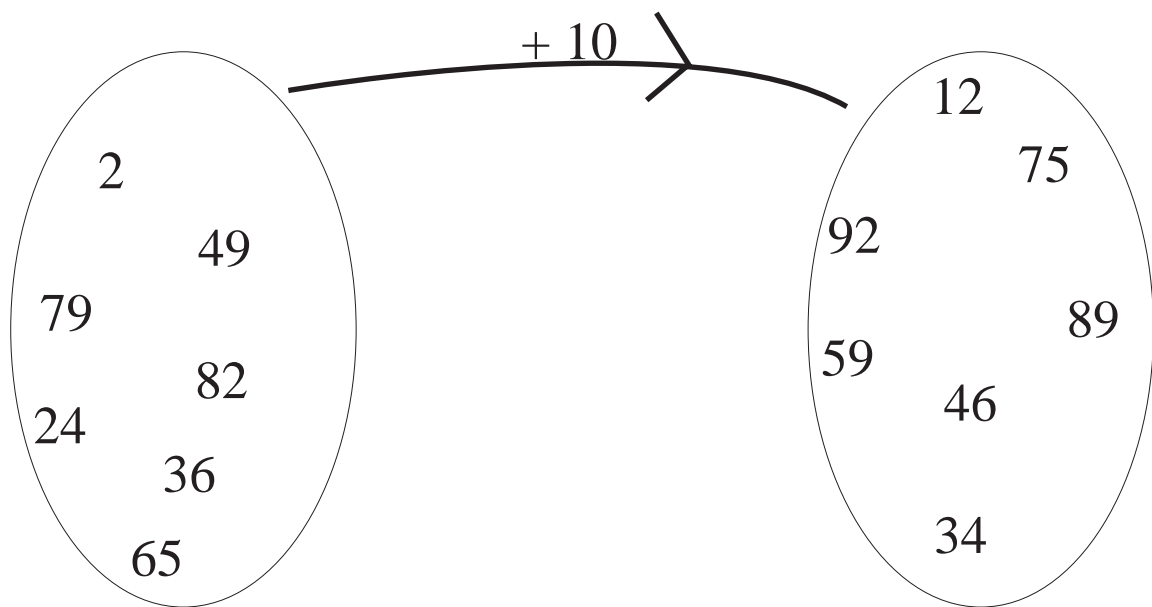
$7 + 6 + 9 + 0 =$ 

$6 + 8 + 8 + 3 =$ 

$4 + 9 + 8 + 5 =$ 

$5 + 5 + 10 + 10 =$ 


3



Suimiú

1

$$5 + \boxed{} \text{  = 9$$

$$2 + \boxed{} \text{  = 6$$

$$3 + \boxed{} \text{  = 7$$

$$8 + \boxed{} \text{  = 10$$

$$5 + \boxed{} \text{  = 10$$

$$7 + \boxed{} \text{  = 10$$

$$2 + \boxed{} \text{  = 7$$

2

$$11 + \boxed{} \text{  = 15$$

$$15 + \boxed{} \text{  = 20$$

$$12 + \boxed{} \text{  = 18$$

$$16 + \boxed{} \text{  = 20$$


$$13 + \boxed{} \text{  = 19$$

$$12 + \boxed{} \text{  = 13$$

$$14 + \boxed{} \text{  = 17$$


3



Tá 11 teach mór agus 12 theach bheaga ar an mbóthar.
Cé mhéad teach ar an mbóthar? 


4



Bhí 11 leabhar ag Niamh. Chaill sí 2 (dhá) leabhar.
Cé mhéad leabhar atá aici anois? 

5




Bhí 13 páiste ar an mbus. Thuirling 2 (beirt).
Cé mhéad páiste a bhí fós ar an mbus? 

6



Tá cónaí ar 6 (sheisear) páistí ar thaobh amháin den tsráid.

Tá cónaí ar 8 (ochtar) páistí ar an taobh eile. 

Leibhéal 2

Súil Siar

Scríobh an uimhir cheart sa bhosca agus bain úsáid as < nó > nó = .

Tá an chéad cheann déanta.

1

2 < 3

2

3

4

5

6

7

8

Cuir tic leis an uimhir is mó.

1

3 5	5 0	8 7	6 4
8 9	3 7	4 3	0 1

2 Scríobh an freagra ceart sa bhosca.

3

(a) $5 - 3 =$

(b) $8 - 5 =$

(c) $9 - 3 =$

(d) $8 - 4 =$

(e) $7 - 5 =$

(a) $3 - 0 =$

(b) $5 - 4 =$

(c) $6 - 0 =$

(d) $9 - 1 =$

(e) $8 - 7 =$

4

$\begin{array}{r} 7 \\ - 3 \\ \hline \end{array}$	$\begin{array}{r} 8 \\ - 5 \\ \hline \end{array}$	$\begin{array}{r} 7 \\ - 6 \\ \hline \end{array}$	$\begin{array}{r} 8 \\ - 2 \\ \hline \end{array}$	$\begin{array}{r} 6 \\ - 4 \\ \hline \end{array}$
---	---	---	---	---

5 Cad a thagann díreach roimh 7?

6 Cad a thagann díreach tar éis 5?

7 Cad a thagann díreach tar éis 8?

8 Cad a thagann díreach roimh 1?

Cé mhéad ar fad?

1



3 phiorra agus 2 phiorra

2



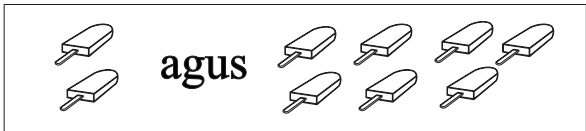
5 mhilseán agus 4 mhilseán

3



3 bhanana agus 6 bhanana

4



2 líreacán agus 7 líreacán

5



4 chlog agus 5 chlog

Scríobh < nó > nó = sna boscaí thíos.

6

(a) 5 4

(b) 7 8

(c) 0 3

(d) 4 4

(e) 8 0

(f) 9 8

(g) 4 8

(h) 6 9

(i) 6 3

(j) 8 7

(k) 3 4

(l) 1 9

1  agus 

$4 + 5 =$

2  agus 

$3 + 5 =$

3  agus 

$5 + 4 =$

4  agus 

$3 + 4 =$

5  agus 

$2 + 4 =$

6

(a) $8 + 3 =$

(b) $9 + 5 =$

(c) $4 + 8 =$

(d) $6 + 7 =$

(e) $6 + 9 =$

7

(a) $10 + 0 =$

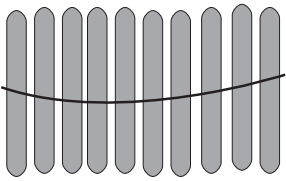
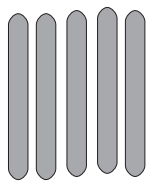
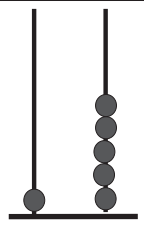
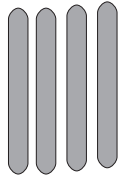
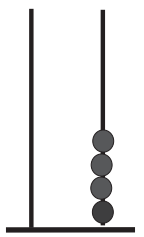
(b) $4 + 10 =$

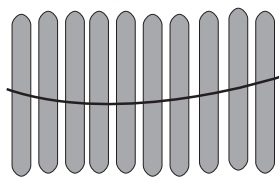
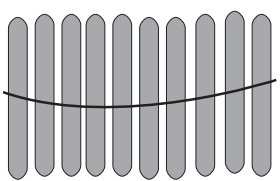
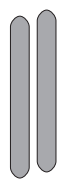
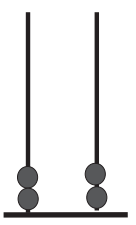
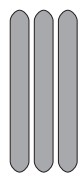
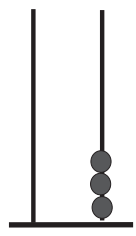
(c) $5 + 5 =$


(d) $5 + 8 =$

(e) $5 + 6 =$

Súil Siar

			15
+			+ 4
			= 19

				22
+			+ 3	
			= 25	



- 1 Céard atá sa chéad áit?
- 2 Céard atá ar deireadh?
- 3 Céard atá sa lár?
- 4 Céard atá sa dara háit?
- 5 Céard atá sa tríú háit?
- 6 Cá bhfuil an trucail?

7








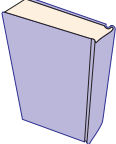

D A 1 7 + 2 <hr/>	D A 1 4 + 3 <hr/>	D A 1 3 + 5 <hr/>	D A 1 1 + 8 <hr/>
----------------------------	----------------------------	----------------------------	----------------------------

8

D A 2 7 + 2 <hr/>	D A 2 3 + 6 <hr/>	D A 2 1 + 7 <hr/>	D A 3 + 2 5 <hr/>
----------------------------	----------------------------	----------------------------	----------------------------

9

D A 2 7 + 2 2 <hr/>	D A 2 5 + 2 1 <hr/>	D A 2 3 + 3 5 <hr/>	D A 3 1 + 8 <hr/>
------------------------------	------------------------------	------------------------------	----------------------------

1		8 bpeann luaidhe agus 7 bpeann luaidhe. Cé mhéad peann luaidhe ar fad ann?	<input type="text"/>
2		18 n-úll agus 11 úll. Cé mhéad úll ar fad ann?	<input type="text"/>
3		26 tacóid agus 9 dtacóid. Cé mhéad tacóid ar fad ann?	<input type="text"/>
4		34 bláth agus 58 bláth. Cé mhéad bláth ar fad ann?	<input type="text"/>
5		Chaith mé 10 cent agus 5 cent. Cé mhéad ar fad a chaith mé?	<input type="text"/>
6		Chaith mé 15 cent agus 6 cent. Cé mhéad ar fad a chaith mé?	<input type="text"/>
7		6 iógart agus 4 iógart. Cé mhéad iógart ar fad ann?	<input type="text"/>
8		20 leabhar agus 10 leabhar. Cé mhéad leabhar ar fad ann?	<input type="text"/>
9		11 pheann luaidhe agus 14 pheann luaidhe. Cé mhéad peann luaidhe ar fad ann?	<input type="text"/>

1

(a) $8 + 4 + 3 =$

(b) $6 + 5 + 4 =$

(c) $9 + 3 + 6 =$

(d) $7 + 6 + 5 =$

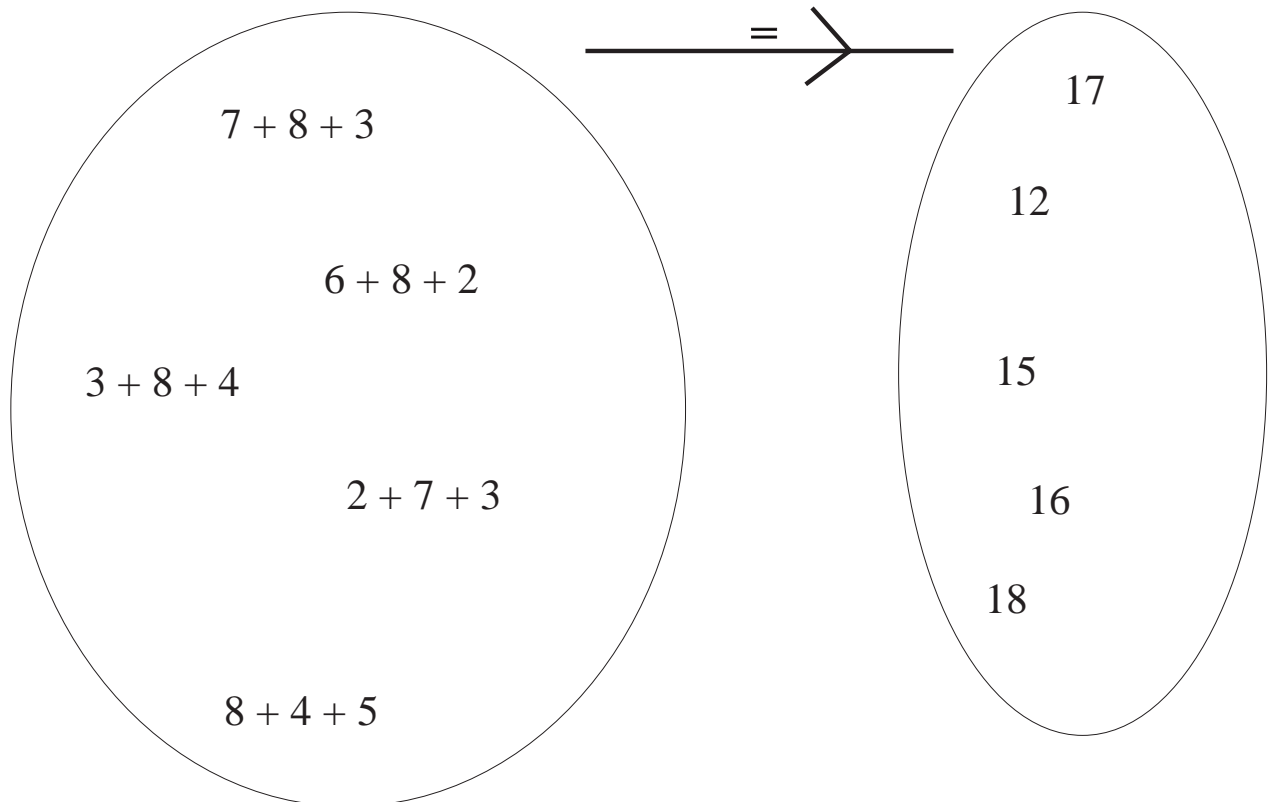
(e) $9 + 5 + 7 =$

(f) $4 + 5 + 8 =$

(g) $6 + 9 + 8 =$

(h) $5 + 8 + 0 =$

2



3

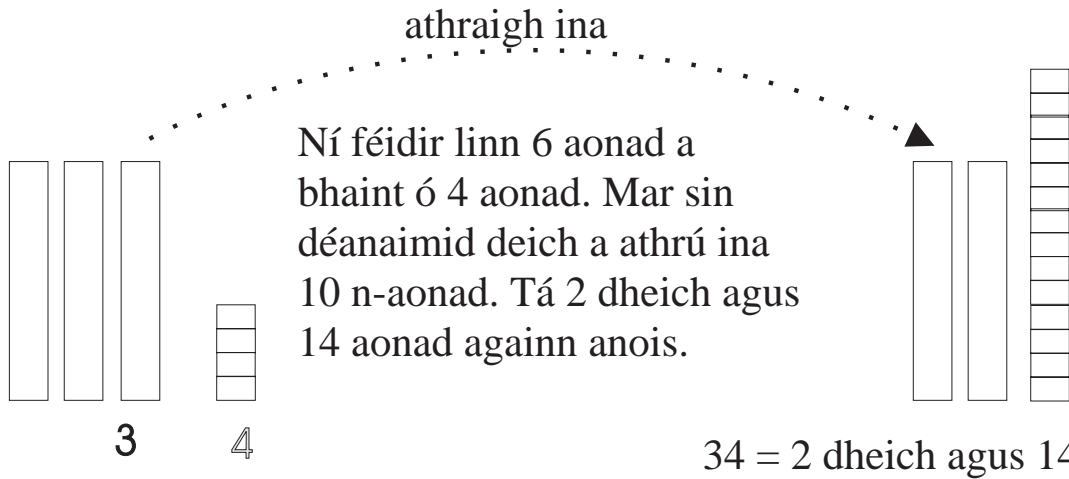


Bhí cailín ag scipeáil agus rinne sí 25 scip. Ansin rinne sí 34 scip eile. Cé mhéad scip ar fad a rinne sí?

Súil Siar

Dealú

Sampla: Dealaigh 16 ó 34.



Anois bainimid 1 deich amháin agus 6 aonad ó 2 dheich agus 14 aonad.

	D	A
	2	14
bain	1	6
freagra	1	8

Tá 1 deich amháin agus 8 n-aonad fágtha.

1 athraigh ina

$43 - 27$

D	A
3	13
- 2	7

2 athraigh ina

$35 - 18$

D	A
-	

3 athraigh ina

$56 - 39$

D	A
-	

4 athraigh ina

$60 - 24$

D	A
-	

--

Súil Siar

1

$$\begin{array}{r} \text{D A} \\ 57 \\ - 28 \\ \hline \end{array}$$

$$\begin{array}{r} \text{D A} \\ 45 \\ - 17 \\ \hline \end{array}$$

$$\begin{array}{r} \text{D A} \\ 62 \\ - 35 \\ \hline \end{array}$$

$$\begin{array}{r} \text{D A} \\ 51 \\ - 38 \\ \hline \end{array}$$

2




$$\begin{array}{r} \text{D A} \\ 86 \\ - 49 \\ \hline \end{array}$$

$$\begin{array}{r} \text{D A} \\ 76 \\ - 37 \\ \hline \end{array}$$

$$\begin{array}{r} \text{D A} \\ 70 \\ - 26 \\ \hline \end{array}$$

$$\begin{array}{r} \text{D A} \\ 45 \\ - 25 \\ \hline \end{array}$$

3



4

- (a) 2 cent + = 8 cent
- (b) 10 cent + = 30 cent
- (c) + 20 cent = 34 cent

- (d) 20 cent + 12 cent =
- (e) 17 cent + = 30 cent
- (f) + 9 cent = 24 cent

5

$$\begin{array}{r} 45 \text{ cent} \\ + 33 \text{ cent} \\ \hline \end{array}$$

$$\begin{array}{r} 28 \text{ cent} \\ + 49 \text{ cent} \\ \hline \end{array}$$

$$\begin{array}{r} 47 \text{ cent} \\ + 24 \text{ cent} \\ \hline \end{array}$$

$$\begin{array}{r} 18 \text{ cent} \\ + 16 \text{ cent} \\ \hline \end{array}$$

$$\begin{array}{r} 49 \text{ cent} \\ + 38 \text{ cent} \\ \hline \end{array}$$

6

$$\begin{array}{r} 85 \text{ cent} \\ + 13 \text{ cent} \\ \hline \end{array}$$

$$\begin{array}{r} 36 \text{ cent} \\ + 36 \text{ cent} \\ \hline \end{array}$$




$$\begin{array}{r} 61 \text{ cent} \\ + 29 \text{ cent} \\ \hline \end{array}$$

$$\begin{array}{r} 66 \text{ cent} \\ + 22 \text{ cent} \\ \hline \end{array}$$

$$\begin{array}{r} 48 \text{ cent} \\ + 7 \text{ cent} \\ \hline \end{array}$$

1 Cheannaigh Síle  ar 42 cent agus  ar 19 cent. Cé mhéad airgid a chaith sí?

2 Tá dhá bhonn  agus trí bhonn  ag Tomás. Cé mhéad airgid atá aige?

3    Choigil Seosamh 18 cent seachtain amháin agus 23 cent an tseachtain dár gcionn. Cé mhéad airgid ar fad a choigil sé?

4  Seosamh  Siobhán  Seán  Tadhg

(a) Cé aige a bhfuil an méid is lú bláthanna?

(b) Cé aige a bhfuil an méid is mó bláthanna?

(c) Cé mhéad bláth ar fad ann?

5

$\begin{array}{r} 45 \\ + 38 \\ \hline \end{array}$	$\begin{array}{r} 58 \\ + 33 \\ \hline \end{array}$	$\begin{array}{r} 34 \\ + 17 \\ \hline \end{array}$	$\begin{array}{r} 37 \\ + 46 \\ \hline \end{array}$	$\begin{array}{r} 26 \\ + 30 \\ \hline \end{array}$
---	---	---	---	---

Súil Siar

1

(a) $23 + \square = 30$

(b) $9 + \square = 48$

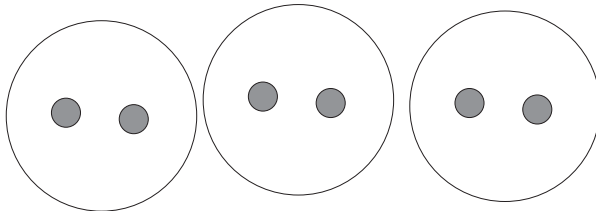
(c) $\square + 34 = 54$

(d) $39 + 12 = \square$

(e) $47 + \square = 80$

(f) $\square + 19 = 56$

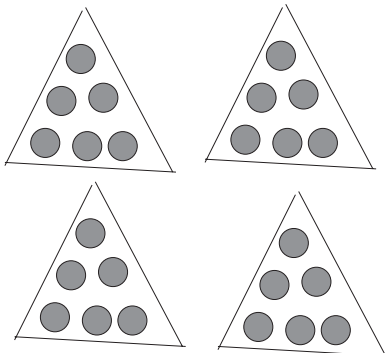
2



$2 + 2 + 2 = \square$

$3 \times 2 = \square$

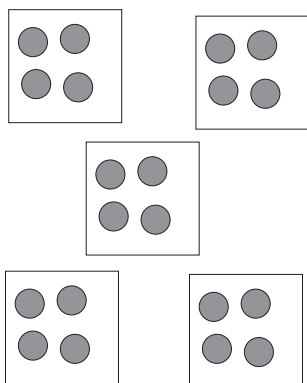
3



$6 + 6 + 6 + 6 = \square$

$4 \times 6 = \square$

4

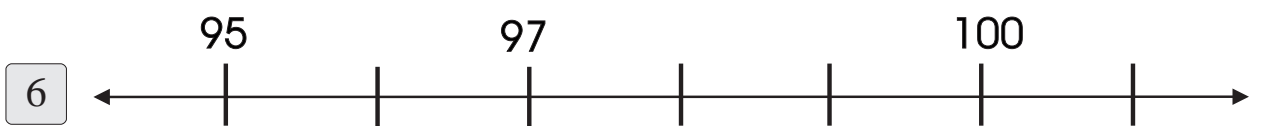
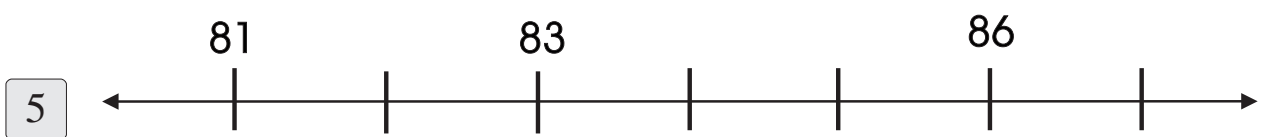
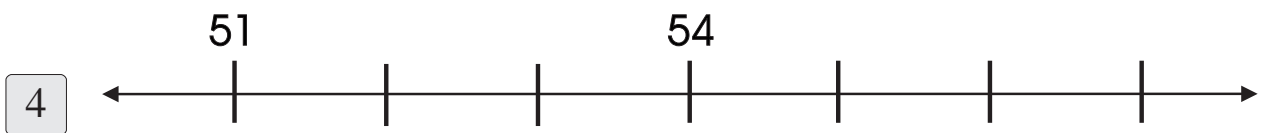
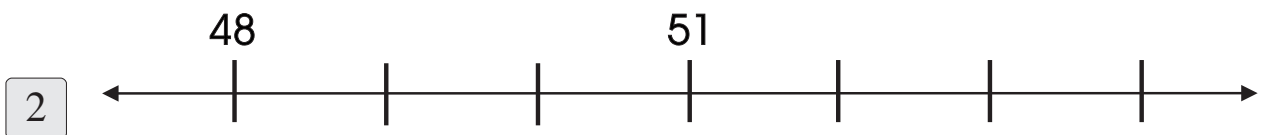
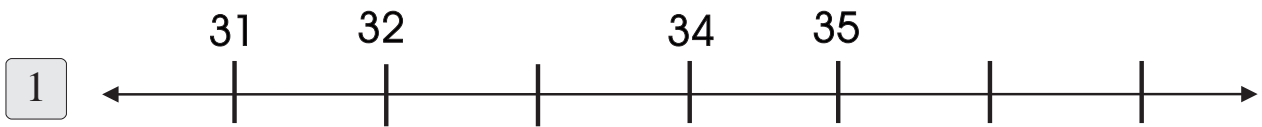


$4 + 4 + 4 + 4 + 4 = \square$

$5 \times 4 = \square$

Súil Siar

Scríobh síos na huimhreacha atá ar iarraidh.



Súil Siar

An 100-chearnóg

1	2	3	4	5	6	7	8	9	10
11	12	13	14	15	16	17	18	19	20
21	22	23	24	25	26	27	28	29	30
31	32	33	34	35	36	37	38	39	40
41	42	43	44	45	46	47	48	49	50
51	52	53	54	55	56	57	58	59	60
61	62	63	64	65	66	67	68	69	70
71	72	73	74	75	76	77	78	79	80
81	82	83	84	85	86	87	88	89	90
91	92	93	94	95	96	97	98	99	100

1 Comhair ar aghaidh i ndeiceanna.

10, 20, ____, ____, ____, ____, ____, ____, ____, ____, ____.

Cuir isteach na huimhreacha cearta:

2 1, 11, 21, ____, ____, ____, ____, ____, ____, ____.

3 5, 15, 25, ____, ____, ____, ____, ____, ____, ____, ____,
____, ____, ____, ____, ____, ____, ____.

4 8, 18, 28, ____, ____, ____, ____, ____, ____, ____.

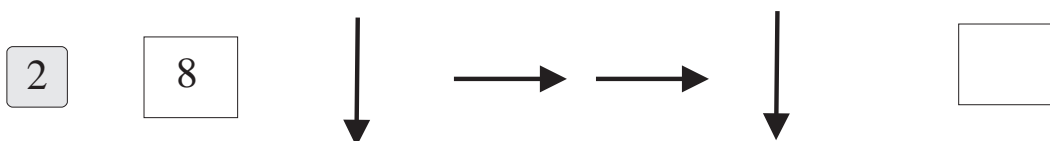
5 3, 13, 23, ____, ____, ____, ____, ____, ____, ____.

1				5					10
11					16				20
21			24						30
31					36				40
41			44						50
51					56				60
61			64						70
71					76				80
81								89	90
91	92								100

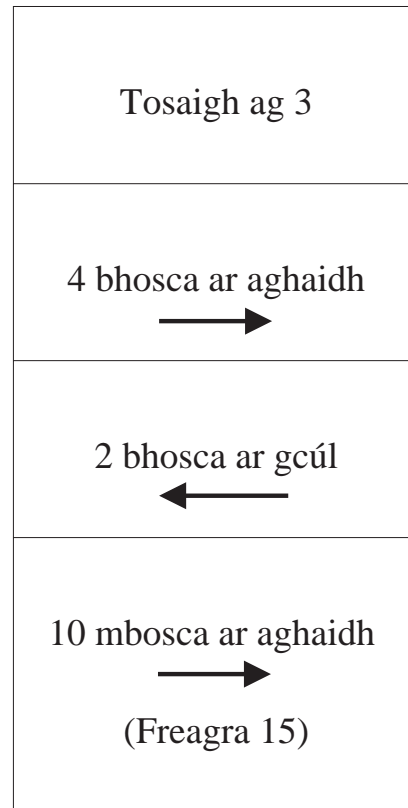
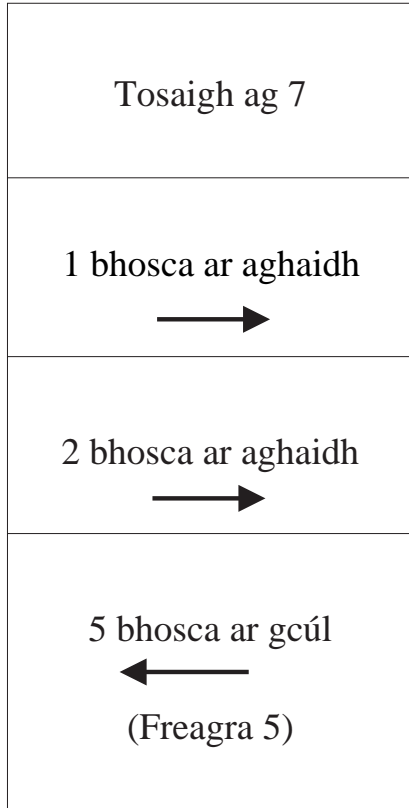
- 1 Scríobh síos na huimhreacha atá ar iarraidh.
- 2 Cén uimhir atá 2 níos mó ná 48?
- 3 Cén uimhir atá 2 níos mó ná 79?
- 4 Cén uimhir atá 2 níos lú ná 42?
- 5 Cén uimhir atá 2 níos lú ná 61?

1	2	3	4	5	6	7	8	9	10
11	12	13	14	15	16	17	18	19	20
21	22	23	24	25	26	27	28	29	30
31	32	33	34	35	36	37	38	39	40
41	42	43	44	45	46	47	48	49	50
51	52	53	54	55	56	57	58	59	60
61	62	63	64	65	66	67	68	69	70
71	72	73	74	75	76	77	78	79	80
81	82	83	84	85	86	87	88	89	90
91	92	93	94	95	96	97	98	99	100

Seasann gach saighead do bhosca amháin sna ceisteanna ina dhiaidh seo.

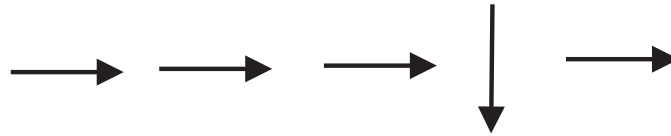


1	2	3	4	5	6	7	8	9	10	11	12	13	14	15	16	17	18	19	20
---	---	---	---	---	---	---	---	---	----	----	----	----	----	----	----	----	----	----	----



1

72




2

83



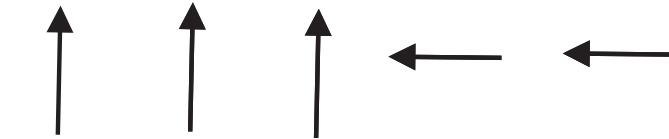
3

21



4

100



Cuir do chuid freagraí sa chearnóg seo.



1 Scríobh síos na huimhreacha atá ar iarraidh.

2 Cén t-éan a bhfuil rud ina ghob aige?

1	2								10
									a
				b					
c									
						d			
e								99	f

- 1 Cén uimhir a théann in áit a?
- 2 Cén uimhir a théann in áit b?
- 3 Cén uimhir a théann in áit c?
- 4 Cén uimhir a théann in áit d?
- 5 Cén uimhir a théann in áit e?
- 6 Cén uimhir a théann in áit f ?

1	2	3	4	5	6	7	8	9	10
11	12	13	14	15	16	17	18	19	20
21	22	23	24	25	26	27	28	29	30
31	32	33	34	35	36	37	38	39	40
41	42	43	44	45	46	47	48	49	50
51	52	53	54	55	56	57	58	59	60
61	62	63	64	65	66	67	68	69	70
71	72	73	74	75	76	77	78	79	80
81	82	83	84	85	86	87	88	89	90
91	92	93	94	95	96	97	98	99	100

Téigh go dtí 3 ar an 100-chearnóg. Comhair ar aghaidh 5 chearnóg. Tá tú ag 8.

$$3 + 5 = 8$$

Téigh go dtí 12 ar an 100-chearnóg. Comhair ar aghaidh 4 chearnóg. Tá tú ag 16.

$$12 + 4 = 16$$

Bain úsáid as an 100-chearnóg chun na ceisteanna thíos a dhéanamh.

1

(a) $32 + 6 =$

(b) $83 + 9 =$

(c) $78 + 5 =$

(d) $35 + 6 =$

(e) $48 + 8 =$

2

(a) $23 + 7 =$

(b) $36 + 8 =$

(c) $48 + 7 =$

(d) $30 + 9 =$

(e) $38 + 3 =$

1	2	3	4	5	6	7	8	9	10
11	12	13	14	15	16	17	18	19	20
21	22	23	24	25	26	27	28	29	30
31	32	33	34	35	36	37	38	39	40
41	42	43	44	45	46	47	48	49	50
51	52	53	54	55	56	57	58	59	60
61	62	63	64	65	66	67	68	69	70
71	72	73	74	75	76	77	78	79	80
81	82	83	84	85	86	87	88	89	90
91	92	93	94	95	96	97	98	99	100

Téigh go dtí 14 ar an 100-chearnóg. Comhair siar 6 chearnóg. Tá tú ag 8.

$$14 - 6 = 8$$

Téigh go dtí 34 ar an 100-chearnóg. Comhair siar 5 chearnóg. Tá tú ag 29.

$$34 - 5 = 29$$

Bain úsáid as an 100-chearnóg chun na ceisteanna thíos a dhéanamh.

1

(a) $32 - 6 =$

(b) $83 - 6 =$

(c) $78 - 6 =$

(d) $35 - 6 =$

(e) $48 - 6 =$

2

(a) $33 - 7 =$

(b) $36 - 7 =$

(c) $48 - 7 =$

(d) $30 - 7 =$

(e) $38 - 7 =$

1	2								10
									a
				b					
c									
						d			
e								99	f

Scríobh na freagraí sna boscaí.

1 $b + 3 \rightarrow \rightarrow$

2 $a + 4 \rightarrow \rightarrow \rightarrow$

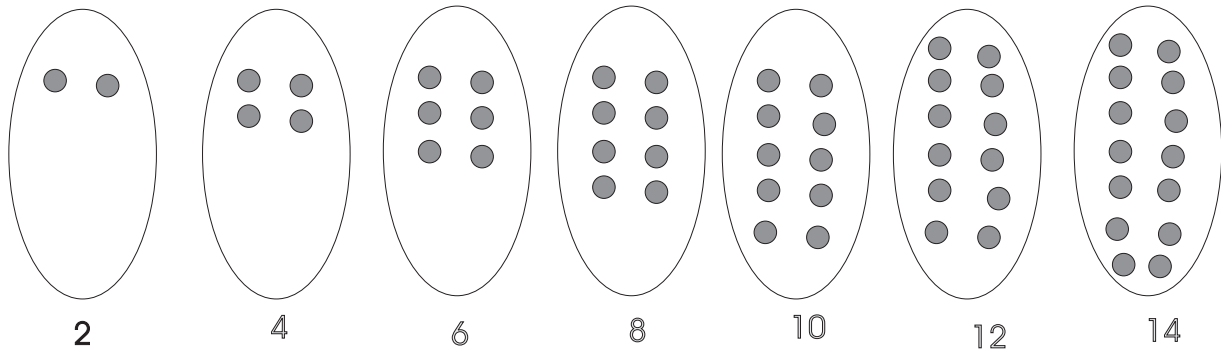
3 $d + 3$

4 $f - 2$

5 $f - 5$

6 $f - 10$

1	2	3	4	5	6	7	8	9	10
11	12	13	14	15	16	17	18	19	20
21	22	23	24	25	26	27	28	29	30
31	32	33	34	35	36	37	38	39	40
41	42	43	44	45	46	47	48	49	50
51	52	53	54	55	56	57	58	59	60
61	62	63	64	65	66	67	68	69	70
71	72	73	74	75	76	77	78	79	80
81	82	83	84	85	86	87	88	89	90
91	92	93	94	95	96	97	98	99	100







1 Comhair i ndónna go 30.

Dathaigh na huimhreacha sin ar an 100-chearnóg.




Foghlaim iad.

1





Scríobh na freagraí sna boscaí.

2



Scríobh na freagraí sna boscaí.

3


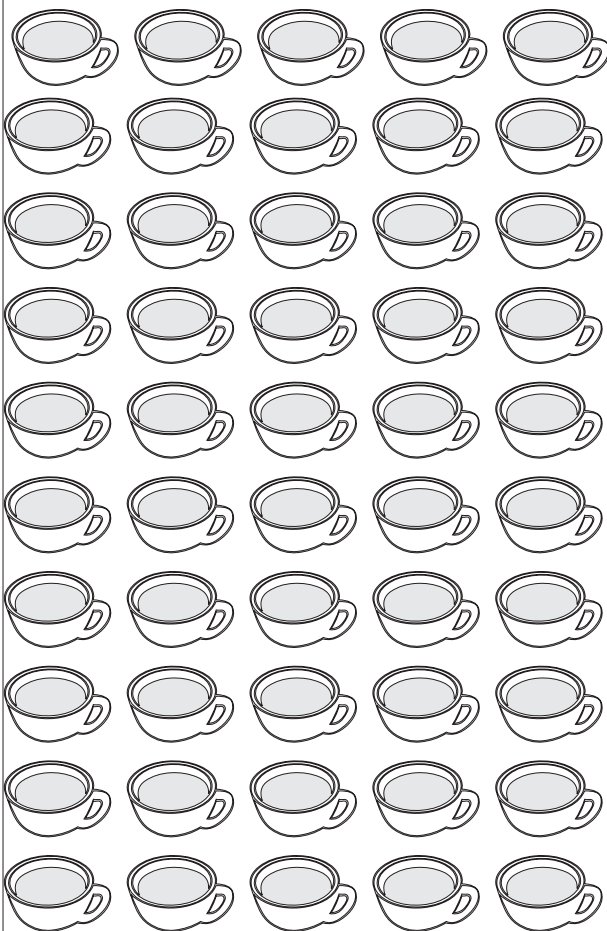
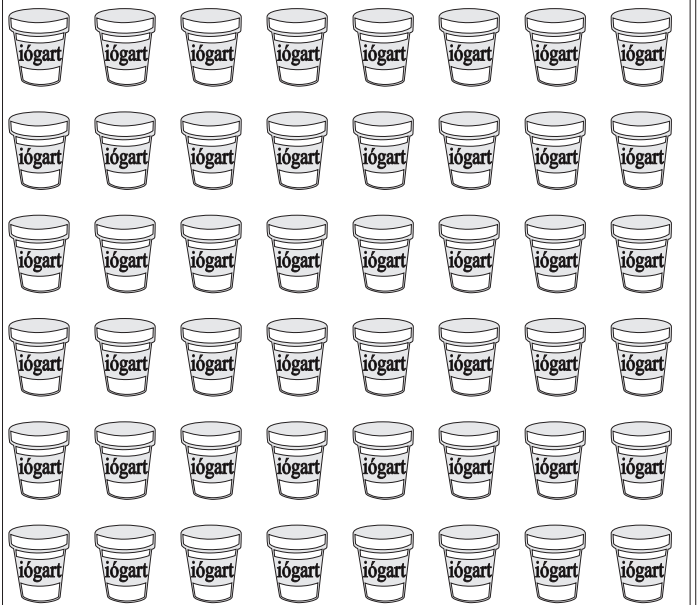





Scríobh na freagraí sna boscaí.

1	2	3	4	5	6	7	8	9	10
11	12	13	14	15	16	17	18	19	20
21	22	23	24	25	26	27	28	29	30
31	32	33	34	35	36	37	38	39	40
41	42	43	44	45	46	47	48	49	50
51	52	53	54	55	56	57	58	59	60
61	62	63	64	65	66	67	68	69	70
71	72	73	74	75	76	77	78	79	80
81	82	83	84	85	86	87	88	89	90
91	92	93	94	95	96	97	98	99	100

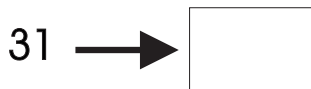
- 1 Comhair i dtríonna go 36. Dathaigh na huimhreacha sin. Foghlaim iad.
- 2 Scríobh na freagraí sna boscaí.

Comhair an uimhir i ngach grúpa agus scríobh an freagra sa bhosca.

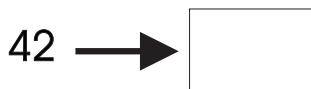




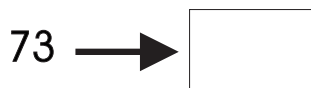
Comhair ar aghaidh 4 aonad.



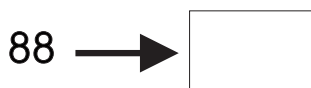
Comhair ar aghaidh 4 aonad.



Comhair ar aghaidh 4 aonad.



Comhair ar aghaidh 4 aonad.





Comhaireamh i gCeathaireanna


Dathaigh gach 4ú huimhir ar an 100-chearnóg.


1	2	3	4	5	6	7	8	9	10
11	12	13	14	15	16	17	18	19	20
21	22	23	24	25	26	27	28	29	30
31	32	33	34	35	36	37	38	39	40
41	42	43	44	45	46	47	48	49	50
51	52	53	54	55	56	57	58	59	60
61	62	63	64	65	66	67	68	69	70
71	72	73	74	75	76	77	78	79	80
81	82	83	84	85	86	87	88	89	90
91	92	93	94	95	96	97	98	99	100


1 Comhair na coiníní.
















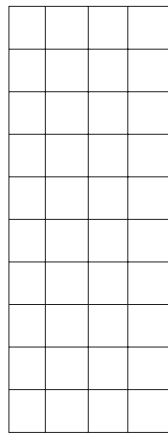


Céadta a Shuimiú



100

+



40

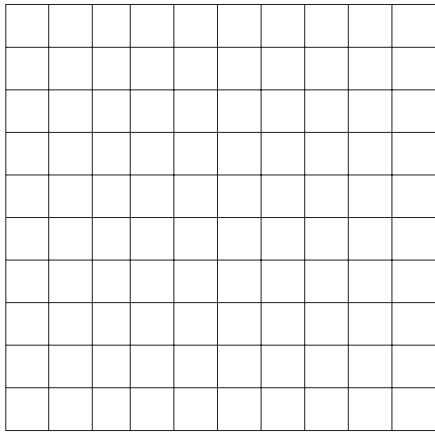
+



7


=

147



100

+



50


+



3

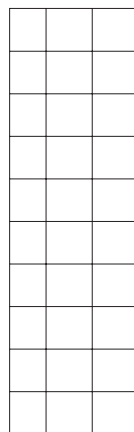
=

153



100

+



30

+



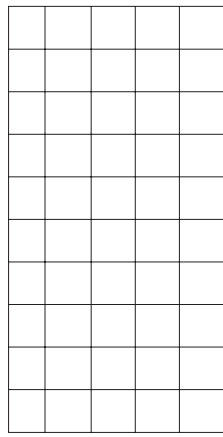

9

=

139

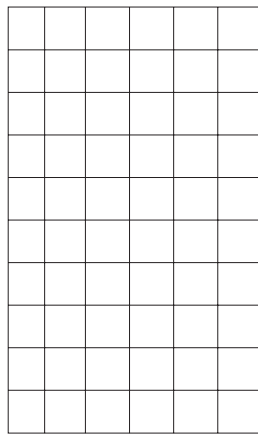

Comhair na boscaí.

1




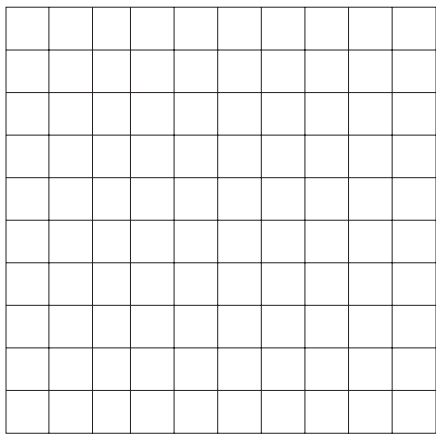
$$\square + \square + \square = \square$$

2



$$\square + \square + \square = \square$$

3



$$\square + \square + \square = \square$$

Scríobh an uimhir cheart sna boscaí faoi gach abacas.

1

C	D	A	C	D	A	C	D	A
●	●●●	●●●●●	●	●●	●●●●●	●	●	●●●●●
—————			—————			—————		
□			□			□		

2

C	D	A	C	D	A	C	D	A
●	●●●	●●●	●	●		●	●	●●●●●
—————			—————			—————		
□			□			□		

3

C	D	A	C	D	A	C	D	A
●	●	●●●	●	●●	●●●		●●●	●
—————			—————			—————		
□			□			□		

□

Tarraing an líon ceart coirníní ar gach abacas.

1

C	D	A	C	D	A	C	D	A
_____			_____			_____		
1	7	3	1	2	6	1	4	8

2

C	D	A	C	D	A	C	D	A
_____			_____			_____		
1	1	9	1	3	0	1	6	1

3

C	D	A	C	D	A	C	D	A
_____			_____			_____		
1	8	8	1	0	1	7	4	

1 Bain úsáid as an abacas chun na ceisteanna seo a dhéanamh.

$$\begin{array}{r} 43 \\ + 6 \\ \hline \end{array}$$

$$\begin{array}{r} 28 \\ + 3 \\ \hline \end{array}$$

$$\begin{array}{r} 77 \\ + 5 \\ \hline \end{array}$$

$$\begin{array}{r} 35 \\ + 8 \\ \hline \end{array}$$

$$\begin{array}{r} 16 \\ + 7 \\ \hline \end{array}$$

2 Bain úsáid as an abacas.

(a) $36 + 8 =$

(b) $75 + 5 =$

(c) $27 + 6 =$

(d) $48 + 6 =$

3 Bain úsáid as an abacas.

(a) $32 + 9 =$

(b) $57 + 8 =$

(c) $28 + 7 =$

(d) $65 + 5 =$

4 Bain úsáid as an abacas.

$$\begin{array}{r} 45 \\ 4 \\ + 3 \\ \hline \end{array}$$

$$\begin{array}{r} 89 \\ 1 \\ + 2 \\ \hline \end{array}$$

$$\begin{array}{r} 75 \\ 4 \\ + 5 \\ \hline \end{array}$$

$$\begin{array}{r} 67 \\ 5 \\ + 4 \\ \hline \end{array}$$

$$\begin{array}{r} 50 \\ 5 \\ + 5 \\ \hline \end{array}$$

Dealú

1 Bain 7 ó 154.

Ní féidir 7 a bhaint ó 4.

Tóg ceann de na deiceanna agus athraigh ina aonaid é.

Cé mhéad aonad atá anois ann?

Cé mhéad deich atá anois ann?

$$154 - 7 = 147$$

2

$$\begin{array}{r} 26 \\ - 9 \\ \hline \end{array}$$

$$\begin{array}{r} 38 \\ - 8 \\ \hline \end{array}$$

$$\begin{array}{r} 45 \\ - 7 \\ \hline \end{array}$$

$$\begin{array}{r} 53 \\ - 7 \\ \hline \end{array}$$

$$\begin{array}{r} 57 \\ - 7 \\ \hline \end{array}$$

3

$$\begin{array}{r} 34 \\ - 5 \\ \hline \end{array}$$

$$\begin{array}{r} 50 \\ - 3 \\ \hline \end{array}$$

$$\begin{array}{r} 58 \\ - 9 \\ \hline \end{array}$$

$$\begin{array}{r} 61 \\ - 2 \\ \hline \end{array}$$

$$\begin{array}{r} 82 \\ - 6 \\ \hline \end{array}$$

4 Bhí 24 caora ag feirmeoir. Dhíol sé 7 gcaora ag an aonach. Cé mhéad caora a choinnigh sé?

Bain úsáid as do chnaipí comhairimh.

Déan 53. (Cúig 10 + 3)

Déan 35. (Trí 10 + 5)

Déan 83. (Ocht 10 + 3)

Déan 64.

Déan 46.

Déan 57.

Déan 75.

1 Scríobh síos an comhartha < (níos lú ná) nó an comhartha > (níos mó ná).

53 35

38 83

64 46

75 57

2 Scríobh na huimhreacha seo in ord a méide.
Tosaigh leis an uimhir is lú.

25, 39, 17, 71, 97

31, 28, 53, 47, 61


1 Scríobh na huimhreacha seo in ord a méide. Tosaigh leis an uimhir is lú.

- (a) 89, 100, 94, 90, 98
- (b) 111, 109, 120, 132, 129
- (c) 97, 112, 89, 121, 90
- (d) 75, 97, 101, 66, 79
- (e) 131, 105, 123, 150, 130
- (f) 63, 48, 36, 64, 84
- (g) 155, 145, 140, 154, 165
- (h) 61, 93, 78, 86, 56



2 Scríobh na huimhreacha seo in ord a méide. Tosaigh leis an uimhir is mó.

- (a) 47, 39, 60, 16, 58.
- (b) 59, 80, 90, 63, 72.
- (c) 105, 110, 101, 118, 120.
- (d) 90, 102, 98, 110, 107.
- (e) 80, 78, 87, 96, 69.
- (f) 56, 75, 49, 65, 58.
- (g) 102, 97, 92, 87, 89.



Bain úsáid as cnaipí comhairimh más mian leat.

1

$$\begin{array}{r} 31 \\ + 24 \\ \hline \end{array}$$

$$\begin{array}{r} 25 \\ + 64 \\ \hline \end{array}$$

$$\begin{array}{r} 33 \\ + 15 \\ \hline \end{array}$$

$$\begin{array}{r} 51 \\ + 37 \\ \hline \end{array}$$

$$\begin{array}{r} 43 \\ + 42 \\ \hline \end{array}$$

2

$$\begin{array}{r} 43 \\ + 14 \\ \hline \end{array}$$

$$\begin{array}{r} 32 \\ + 47 \\ \hline \end{array}$$

$$\begin{array}{r} 60 \\ + 18 \\ \hline \end{array}$$

$$\begin{array}{r} 52 \\ + 26 \\ \hline \end{array}$$

$$\begin{array}{r} 43 \\ + 35 \\ \hline \end{array}$$

3

$$\begin{array}{r} 25 \\ + 61 \\ \hline \end{array}$$


$$\begin{array}{r} 31 \\ + 46 \\ \hline \end{array}$$

$$\begin{array}{r} 25 \\ + 52 \\ \hline \end{array}$$

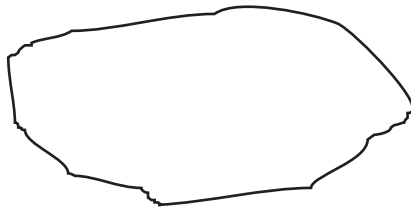
$$\begin{array}{r} 12 \\ + 56 \\ \hline \end{array}$$

$$\begin{array}{r} 22 \\ + 45 \\ \hline \end{array}$$

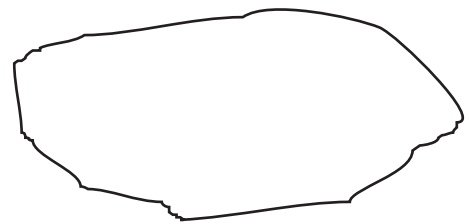
Tarraing na pictiúir.



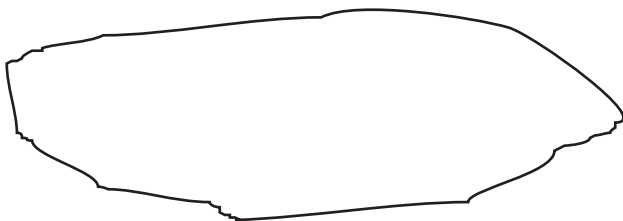
Paicéad 10 milseán



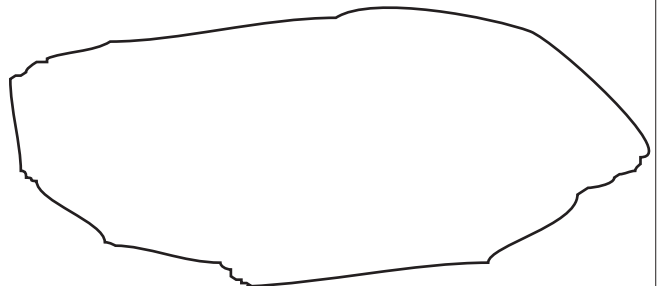
Paicéad 20 milseán



Paicéad 30 milseán



Paicéad 40 milseán



Paicéad 50 milseán

Bain úsáid as do chnaipí comhairimh.

1

(a) $22 + 37 = \square$

(b) $13 + 46 = \square$

(c) $69 + 30 = \square$

(d) $59 + 40 = \square$

2

(a) $56 + 32 = \square$

(b) $35 + 61 = \square$

(c) $27 + 11 = \square$

(d) $44 + 44 = \square$

3

(a) $24 + 41 = \square$

(b) $43 + 16 = \square$

(c) $52 + 27 = \square$

(d) $26 + 61 = \square$

4

(a) $27 + 12 = \square$

(b) $33 + 15 = \square$

(c) $60 + 24 = \square$

(d) $75 + 13 = \square$

5

(a) $81 + 12 = \square$

(b) $24 + 15 = \square$

(c) $18 + 11 = \square$

(d) $52 + 16 = \square$

6

(a) $47 + 12 = \square$

(b) $26 + 13 = \square$

(c) $15 + 63 = \square$

(d) $21 + 48 = \square$

Comhaireamh i gCúigeanna

1	2	3	4	5	6	7	8	9	10
11	12	13	14	15	16	17	18	19	20
21	22	23	24	25	26	27	28	29	30
31	32	33	34	35	36	37	38	39	40
41	42	43	44	45	46	47	48	49	50
51	52	53	54	55	56	57	58	59	60
61	62	63	64	65	66	67	68	69	70
71	72	73	74	75	76	77	78	79	80
81	82	83	84	85	86	87	88	89	90
91	92	93	94	95	96	97	98	99	100

Dathaigh gach 5ú huimhir ar an 100-chearnóg.

1 Scríobh síos na huimhreacha.

<u>5</u>	<u>10</u>	_____	_____	_____	_____	_____	_____	_____	_____
_____	_____	_____	_____	_____	_____	_____	_____	_____	<u>100</u>

Abair os ard iad.

Foghlaim iad.

--

Comhaireamh i Séanna

1	2	3	4	5	6	7	8	9	10
11	12	13	14	15	16	17	18	19	20
21	22	23	24	25	26	27	28	29	30
31	32	33	34	35	36	37	38	39	40
41	42	43	44	45	46	47	48	49	50
51	52	53	54	55	56	57	58	59	60
61	62	63	64	65	66	67	68	69	70
71	72	73	74	75	76	77	78	79	80
81	82	83	84	85	86	87	88	89	90
91	92	93	94	95	96	97	98	99	100

Dathaigh gach 6ú huimhir suas go 72.

1 Scríobh síos na huimhreacha.

6 12 _____

_____ 72

Abair os ard iad.

Foghlaim iad.

Comhaireamh i Seachtanna

1	2	3	4	5	6	7	8	9	10
11	12	13	14	15	16	17	18	19	20
21	22	23	24	25	26	27	28	29	30
31	32	33	34	35	36	37	38	39	40
41	42	43	44	45	46	47	48	49	50
51	52	53	54	55	56	57	58	59	60
61	62	63	64	65	66	67	68	69	70
71	72	73	74	75	76	77	78	79	80
81	82	83	84	85	86	87	88	89	90
91	92	93	94	95	96	97	98	99	100

Dathaigh gach 7ú huimhir suas go 84.

1 Scríobh síos na huimhreacha.

7 14 _____

_____ 84

Abair os ard iad.

Foghlaim iad.

Comhaireamh in Ochtanna

1	2	3	4	5	6	7	8	9	10
11	12	13	14	15	16	17	18	19	20
21	22	23	24	25	26	27	28	29	30
31	32	33	34	35	36	37	38	39	40
41	42	43	44	45	46	47	48	49	50
51	52	53	54	55	56	57	58	59	60
61	62	63	64	65	66	67	68	69	70
71	72	73	74	75	76	77	78	79	80
81	82	83	84	85	86	87	88	89	90
91	92	93	94	95	96	97	98	99	100

Dathaigh gach 8ú huimhir suas go 96.


1 Scríobh síos na huimhreacha.

8 16 _____

_____ 96

Abair os ard iad.

Foghlaim iad.



Táim i mo chónaí ar an 11ú hurlár.

Déan pictiúir de na daoine seo thíos agus iad ag féachaint amach trí na fuinneoga.



Táimse i mo chónaí ar an 10ú hurlár.



Táimse i mo chónaí ar an 19ú hurlár.




Táimse i mo chónaí ar an 16ú hurlár.



Táimse i mo chónaí ar an 3ú hurlár.

Táimse i mo chónaí ar an gcéad urlár.



Tús

Léim ar aghaidh

Críoch

1

21	→	2	→	23
----	---	---	---	----

33	→	3	→	
----	---	---	---	--

45	→	4	→	
----	---	---	---	--

63	→	5	→	
----	---	---	---	--

72	→	6	→	
----	---	---	---	--

81	→	27	→	
----	---	----	---	--

Comhaireamh i Naonna

1	2	3	4	5	6	7	8	9	10
11	12	13	14	15	16	17	18	19	20
21	22	23	24	25	26	27	28	29	30
31	32	33	34	35	36	37	38	39	40
41	42	43	44	45	46	47	48	49	50
51	52	53	54	55	56	57	58	59	60
61	62	63	64	65	66	67	68	69	70
71	72	73	74	75	76	77	78	79	80
81	82	83	84	85	86	87	88	89	90
91	92	93	94	95	96	97	98	99	100

Dathaigh gach 9ú huimhir suas go 99.

1 Scríobh na huimhreacha.

9 18 _____ 99

Abair os ard iad.

Foghlaim iad.

Comhaireamh i nDeiceanna

1	2	3	4	5	6	7	8	9	10
11	12	13	14	15	16	17	18	19	20
21	22	23	24	25	26	27	28	29	30
31	32	33	34	35	36	37	38	39	40
41	42	43	44	45	46	47	48	49	50
51	52	53	54	55	56	57	58	59	60
61	62	63	64	65	66	67	68	69	70
71	72	73	74	75	76	77	78	79	80
81	82	83	84	85	86	87	88	89	90
91	92	93	94	95	96	97	98	99	100

Dathaigh gach 10ú huimhir suas go 100.

1 Scríobh síos na huimhreacha.

10 20 — — — — — — — 100

Abair os ard iad.

Foghlaim iad.

1



14 phram agus 8 bpram.
Cé mhéad pram ar fad atá ann?



2



9 gcapaillín agus 16 chapaillín.
Cé mhéad capaillín ar fad atá ann?



3



19 muga agus 7 muga.
Cé mhéad muga ar fad atá ann?



4



Bhí 15 phlanda i dteach Shíle. Cheannaigh sí 7 bplanda eile. Cé mhéad planda atá ina teach anois?



5



Bhí 17 gcrann i ngairdín Liam. Chuir sé 9 gcrann eile. Cé mhéad crann atá ag fás ina ghairdín anois?



6



Bhí 18 milseán ag Seosamh. Thug Seán 7 milseán eile dó. Cé mhéad milseán atá aige anois?



1



Chaith Máire €36 san ollmhargadh an tseachtain seo caite. Chaith sí €10 níos mó ná sin an tseachtain seo. Cé mhéad a chaith sí an tseachtain seo?



2




Chaith Mamaí €100 agus chaith Daidí €110 aimsir na Nollag. Cé mhéad airgid ar fad a chaith siad beirt?



3

Bhí 16 chnó capaill ag Pól. Bhailigh sé 49 cnó eile. Cé mhéad cnó capaill atá aige anois?

4



Bhí 26 caora ag feirmeoir. Cheannaigh sé 21 caora eile. Cé mhéad caora atá aige anois?

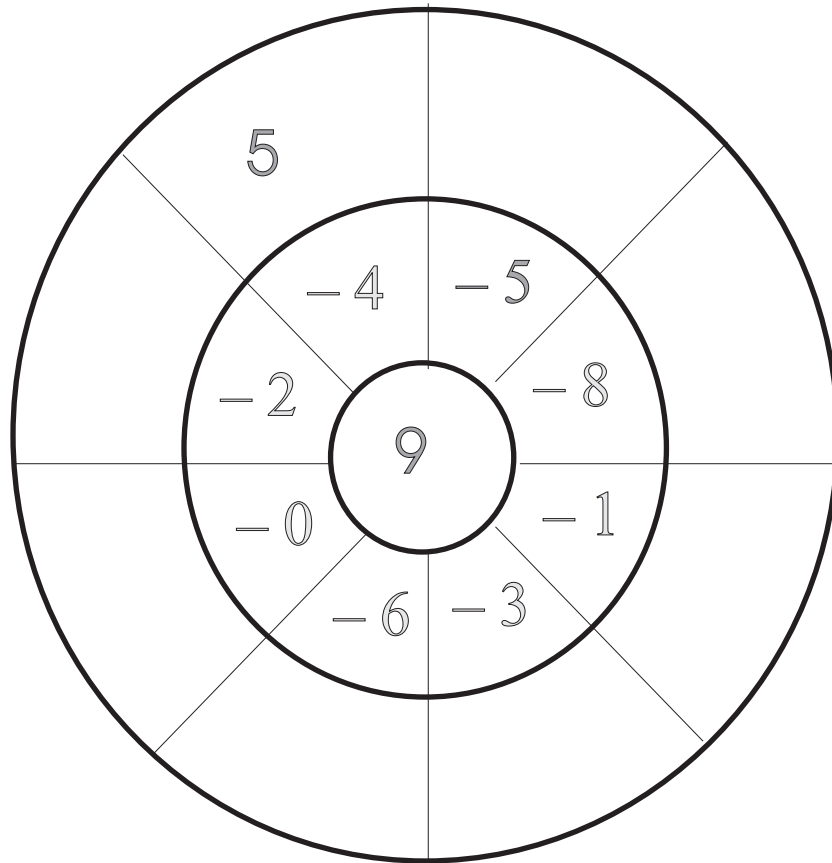
5



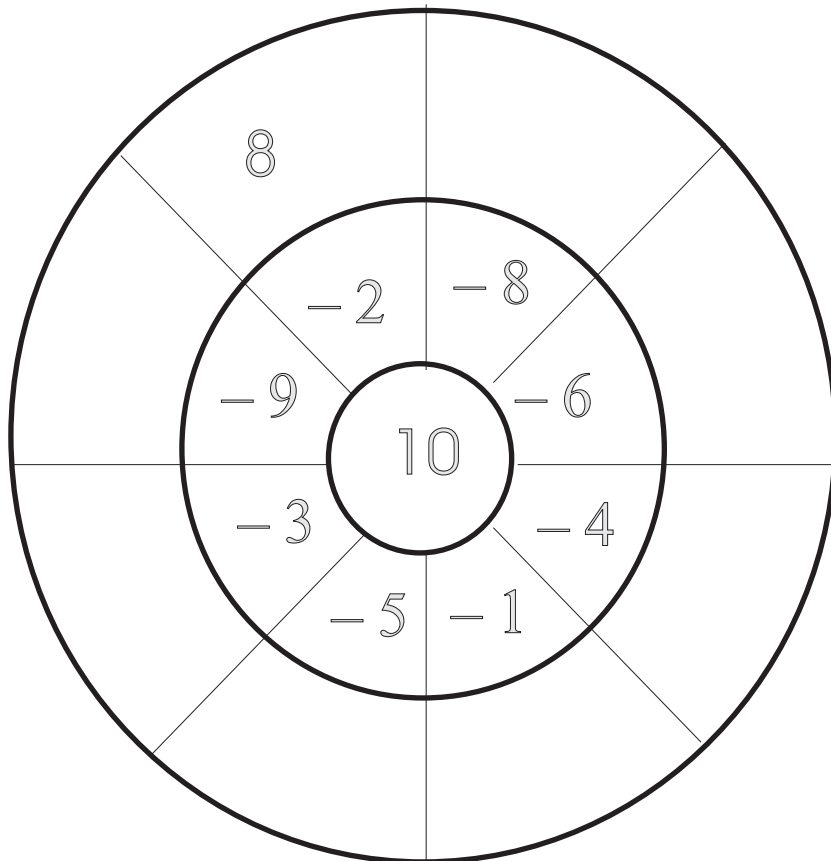
Chaith Brian coicís (dhá sheachtain) ar saoire cois trá agus seachtain amháin lena Mhamó. Cé mhéad lá a chaith sé as baile?

Dealú

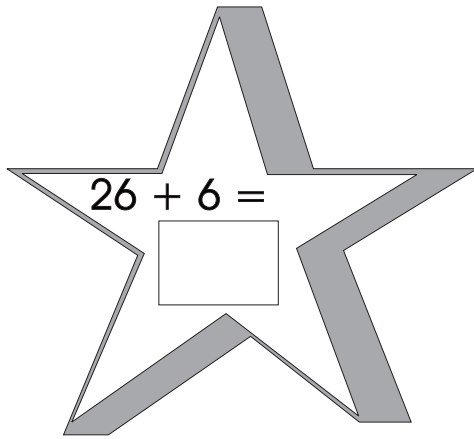
1



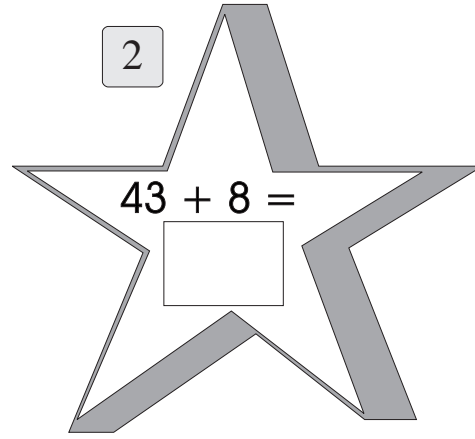
2



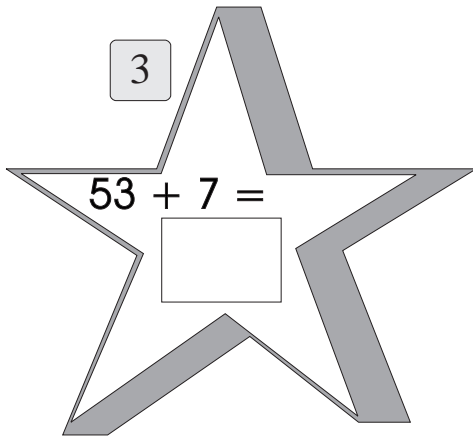
1



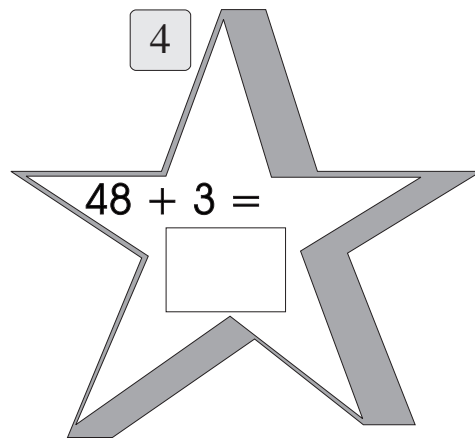
2



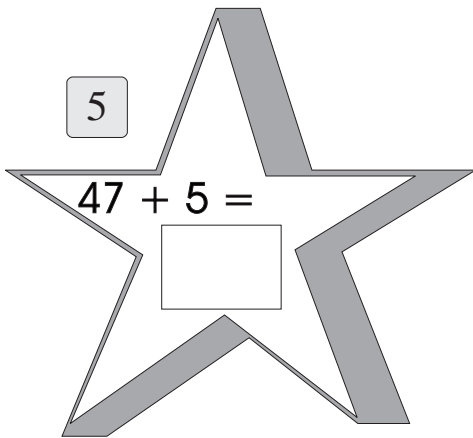
3



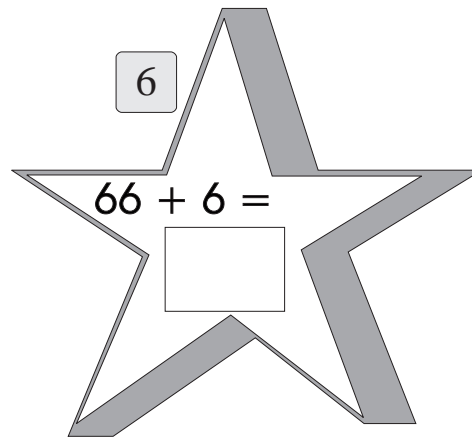
4



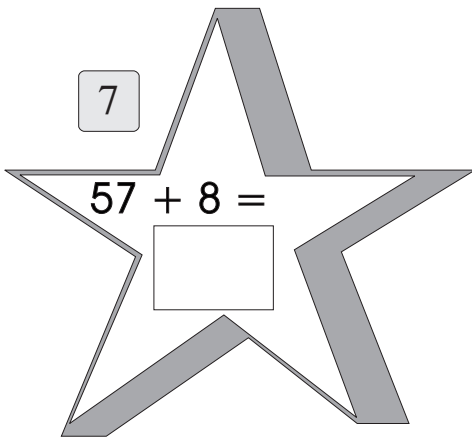
5



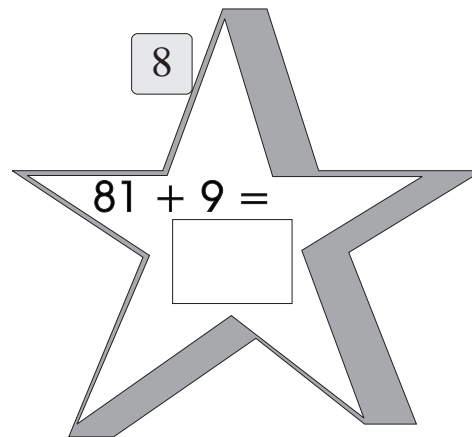
6



7



8

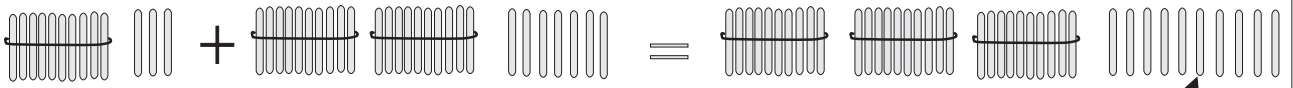


1 2

3 4

5 6

7 8



$$\begin{array}{r}
 13 \\
 + 27 \\
 \hline
 40
 \end{array}$$

Is féidir na 10 n-aonad seo a ghrúpáil le chéile chun beart amháin de 10 gcinn a dhéanamh.

1

23
+ 17

23
+ 17

2

35
+ 15

3

12
+ 28

4

19
+ 31

5

47
+ 23

6

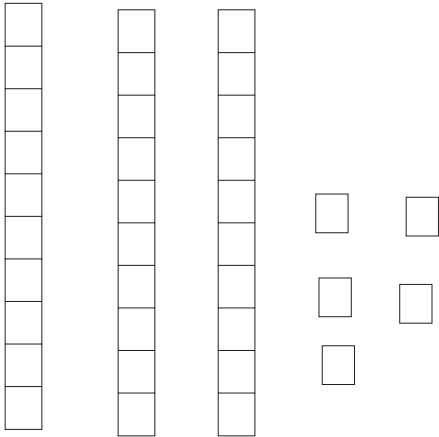
46
+ 34

7

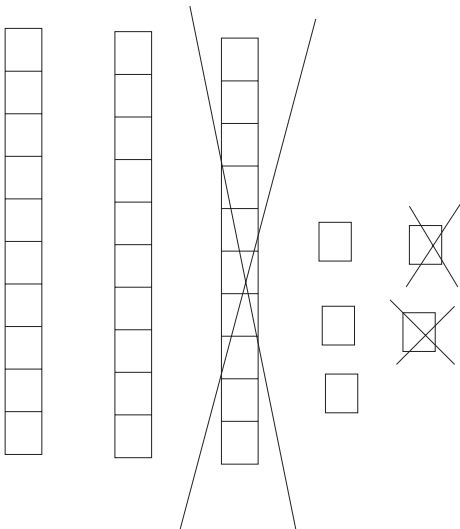
52
+ 28

Dealú

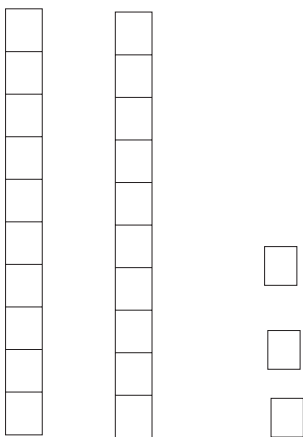
1



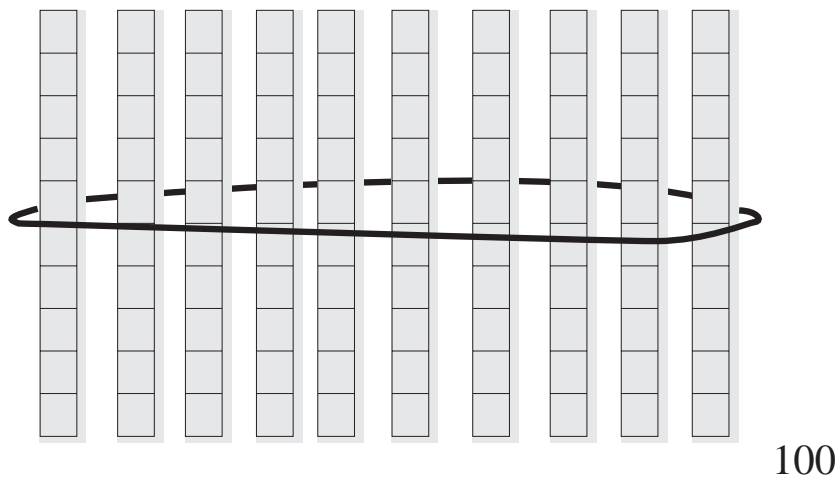
Tá 35 agam.



Bainim 12.



Tá $20 + 3$ fágtha = 23.



Déan na ceisteanna thíos mar a rinneadh an cheist shamplach ar an leathanach roimhe seo.

1

$\begin{array}{r} 54 \\ - 22 \\ \hline \end{array}$	$\begin{array}{r} 47 \\ - 24 \\ \hline \end{array}$	$\begin{array}{r} 59 \\ - 14 \\ \hline \end{array}$	$\begin{array}{r} 78 \\ - 25 \\ \hline \end{array}$	$\begin{array}{r} 84 \\ - 12 \\ \hline \end{array}$
---	---	---	---	---

2

$\begin{array}{r} 67 \\ - 56 \\ \hline \end{array}$	$\begin{array}{r} 27 \\ - 13 \\ \hline \end{array}$	$\begin{array}{r} 79 \\ - 56 \\ \hline \end{array}$	$\begin{array}{r} 86 \\ - 41 \\ \hline \end{array}$	$\begin{array}{r} 69 \\ - 56 \\ \hline \end{array}$
---	---	---	---	---

3

$\begin{array}{r} 58 \\ - 33 \\ \hline \end{array}$	$\begin{array}{r} 47 \\ - 17 \\ \hline \end{array}$	$\begin{array}{r} 68 \\ - 26 \\ \hline \end{array}$	$\begin{array}{r} 56 \\ - 24 \\ \hline \end{array}$	$\begin{array}{r} 49 \\ - 38 \\ \hline \end{array}$
---	---	---	---	---

Déan iad seo mar a rinneadh na ceisteanna ar na leathanaigh roimhe seo.

1

$$(a) \quad 89 - 23 = \square$$

$$(b) \quad 76 - 31 = \square$$

$$(c) \quad 85 - 40 = \square$$

$$(d) \quad 78 - 38 = \square$$

$$(e) \quad 97 - 12 = \square$$

$$(f) \quad 76 - 55 = \square$$

2

$$(a) \quad 67 - 33 = \square$$

$$(b) \quad 87 - 25 = \square$$

$$(c) \quad 68 - 54 = \square$$

$$(d) \quad 98 - 27 = \square$$

$$(e) \quad 79 - 36 = \square$$

$$(f) \quad 66 - 31 = \square$$

3

$$(a) \quad 75 - 39 = \square$$

$$(b) \quad 93 - 58 = \square$$

$$(c) \quad 41 - 23 = \square$$

4

$$(a) \quad 66 - 27 = \square$$

$$(b) \quad 35 - 19 = \square$$

$$(c) \quad 42 - 38 = \square$$

Cé mhéad airgid?

1

cent

A pink piggy bank with four coins: two 2-cent coins, one 1-cent coin, and one 5-cent coin.

2

cent

A pink piggy bank with five coins: one 2-cent coin, one 1-cent coin, one 10-cent coin, one 5-cent coin, and one 2-cent coin.

3

cent

A pink piggy bank with six coins: one 1-cent coin, two 5-cent coins, one 10-cent coin, one 5-cent coin, and one 2-cent coin.

4

cent

A pink piggy bank with five coins: one 10-cent coin, one 5-cent coin, one 5-cent coin, one 10-cent coin, and one 5-cent coin.

5

cent

A pink piggy bank with six coins: one 1-cent coin, one 10-cent coin, one 5-cent coin, one 10-cent coin, one 2-cent coin, and one 1-cent coin.

6

cent

A pink piggy bank with six coins: one 1-cent coin, one 10-cent coin, one 2-cent coin, one 5-cent coin, one 5-cent coin, and one 1-cent coin.

7


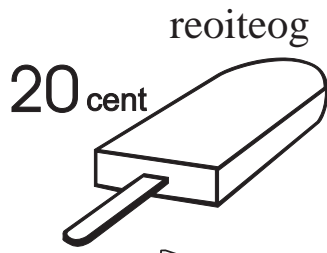
cent

A pink piggy bank with five coins: one 1-cent coin, one 5-cent coin, one 2-cent coin, one 2-cent coin, and one 1-cent coin.

8



cent

A pink piggy bank with five coins: one 1-cent coin, one 2-cent coin, one 5-cent coin, one 10-cent coin, and one 5-cent coin.



uachtar reoite

milseáin



bainne

burgar

creathán bainne

piorra

Cheannaigh mé:

Costas:

1 burgar agus creathán bainne

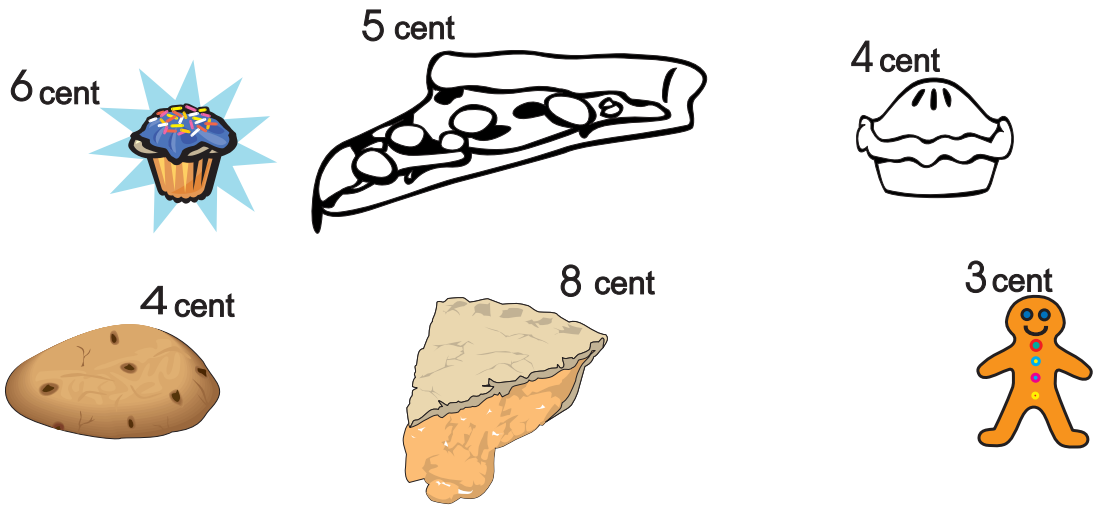
2 reoiteog agus milseáin

3 iógart agus piorra

4 bainne agus uachtar reoite

5 iógart agus burgar

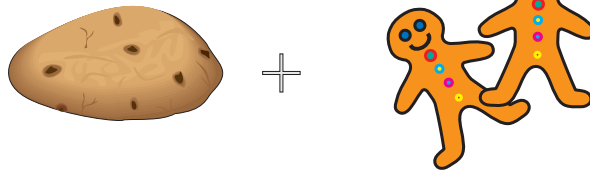
Cén tsóinseáil a fuair mé as 10 cent?



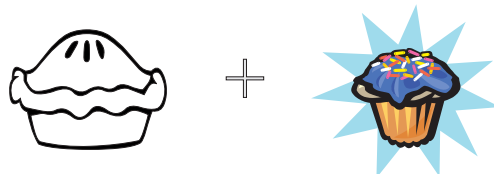
Cheannaigh mé:

Sóinseáil

1



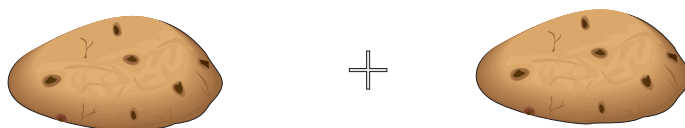
2



3



4



Cé mhéad bonn  iontu seo?

(tarraing pictiúir)

1 40 cent

2 60 cent

3 90 cent

4 70 cent

5 80 cent

6 €1

7 30 cent

8 20 cent

Cé mhéad bonn  iontu seo?

(tarraing pictiúir)

1 12 cent

2 10 cent

3 16 cent

4 20 cent

5 18 cent

6 6 cent

7 4 cent

8 2 cent

Cé mhéad bonn  iontu seo?

(tarraing pictiúir)

1 10 cent

2 20 cent

3 15 cent

4 30 cent

5 25 cent

6 5 cent

7 50 cent

8 45 cent

Suimiú Airgid

1

(a) $€0.41 + €0.48 =$

(b) $€0.26 + €0.53 =$

(c) $€0.50 + €0.28 =$

(d) $€0.36 + €0.45 =$

(e) $€0.24 + €0.78 =$

(f) $€0.76 + €0.18 =$

2

(a) $€1.43 + €0.24 =$

(b) $€0.25 + €1.71 =$

(c) $€0.63 + €1.25 =$

(d) $€0.49 + €1.35 =$

(e) $€1.30 + €0.30 =$

(f) $€1.63 + €0.28 =$

3

(a) $€2.13 + €0.48 =$

(b) $€1.65 + €0.12 =$

(c) $€0.50 + €0.50 =$

4

(a) $€3.75 + €1.10 =$

(b) $€2.02 + €3.10 =$

(c) $€1.49 + €1.22 =$

Dealú Airgid

1

(a) $€0.41 - €0.35 =$

(b) $€0.67 - €0.53 =$

(c) $€0.46 - €0.27 =$

(d) $€0.96 - €0.48 =$

(e) $€0.54 - €0.38 =$

(f) $€0.45 - €0.19 =$

2

(a) $€0.43 - €0.24 =$

(b) $€0.25 - €0.17 =$

(c) $€0.56 - €0.28 =$

(d) $€0.74 - €0.56 =$

(e) $€0.31 - €0.20 =$

(f) $€0.83 - €0.48 =$

3

(a) $€0.56 - €0.19 =$

(b) $€0.84 - €0.67 =$

(c) $€0.35 - €0.18 =$

4

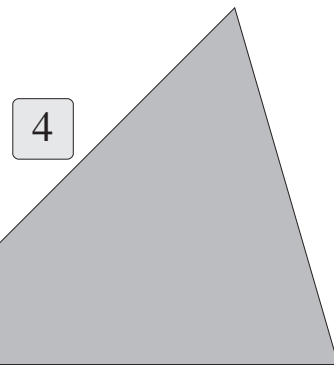
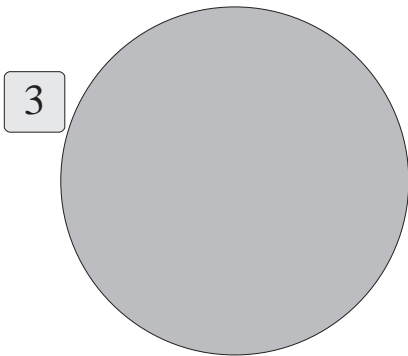

(a) $€0.50 - €0.22 =$

(b) $€0.30 - €0.18 =$

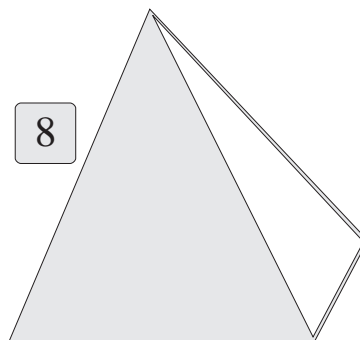
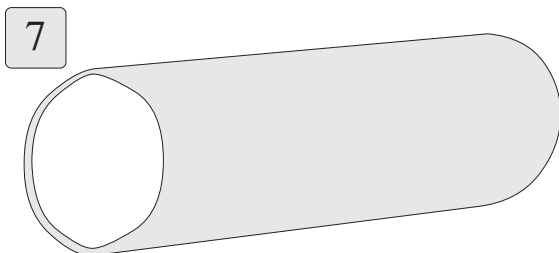
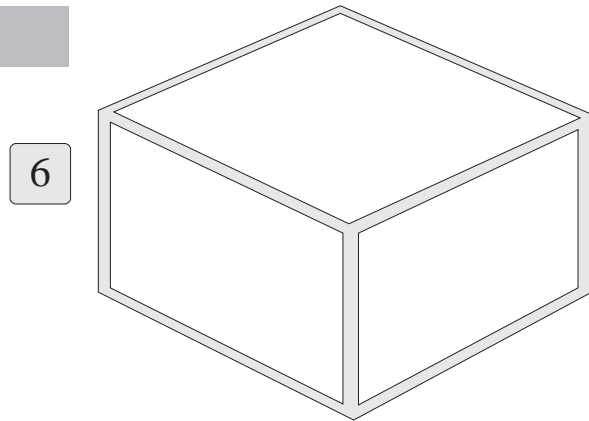
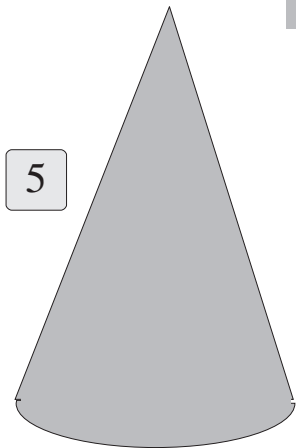
(c) $€0.27 + €0.19 =$

Cruthanna

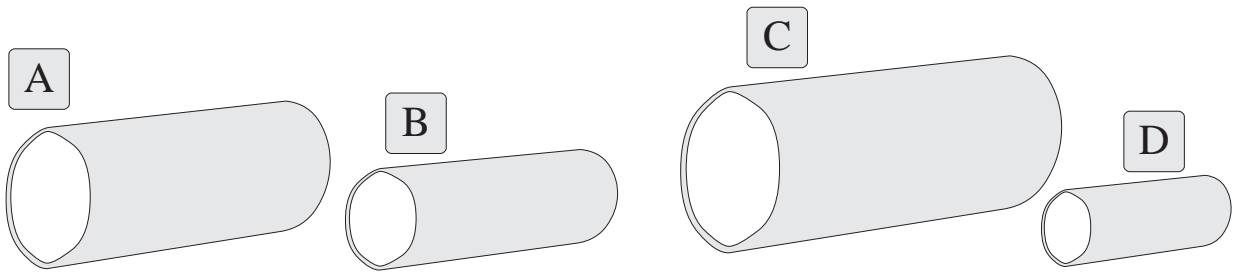
Cad a thugtar orthu seo?



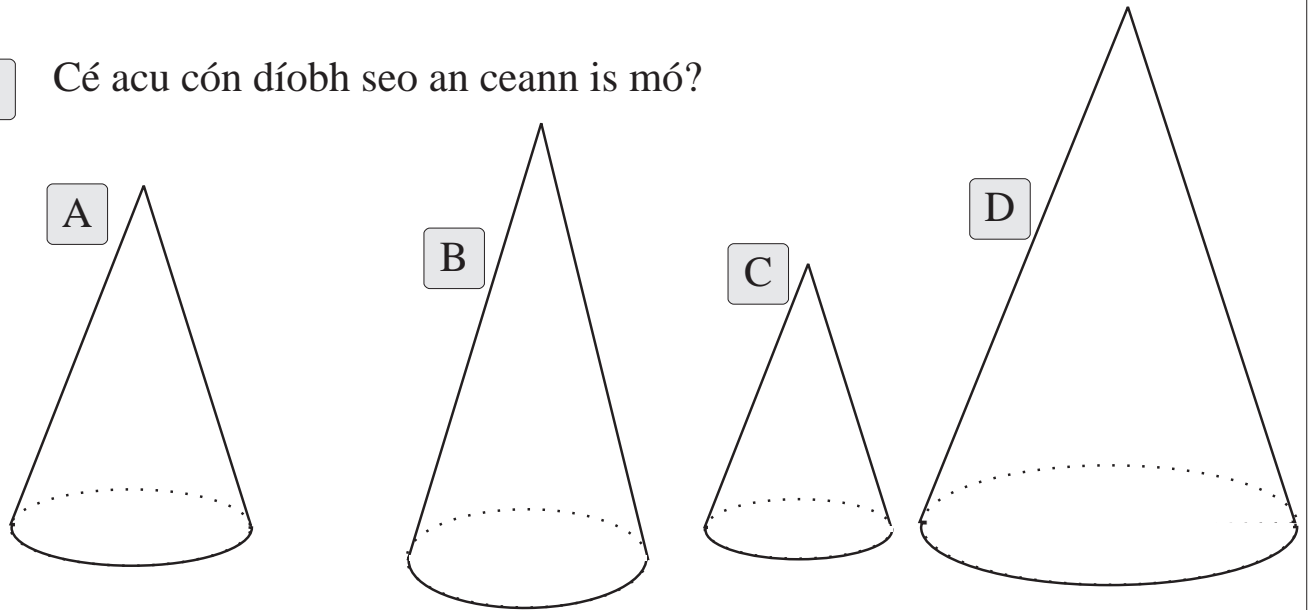
Solaid



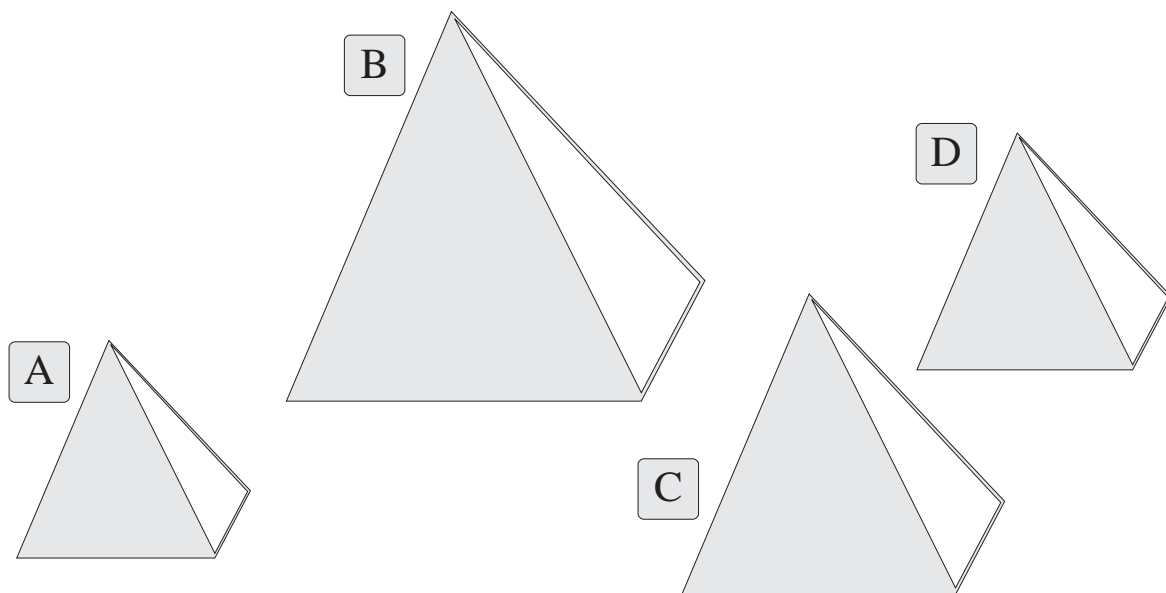
1 Cé acu sorcóir díobh seo an dara ceann is lú?



2 Cé acu cón díobh seo an ceann is mó?


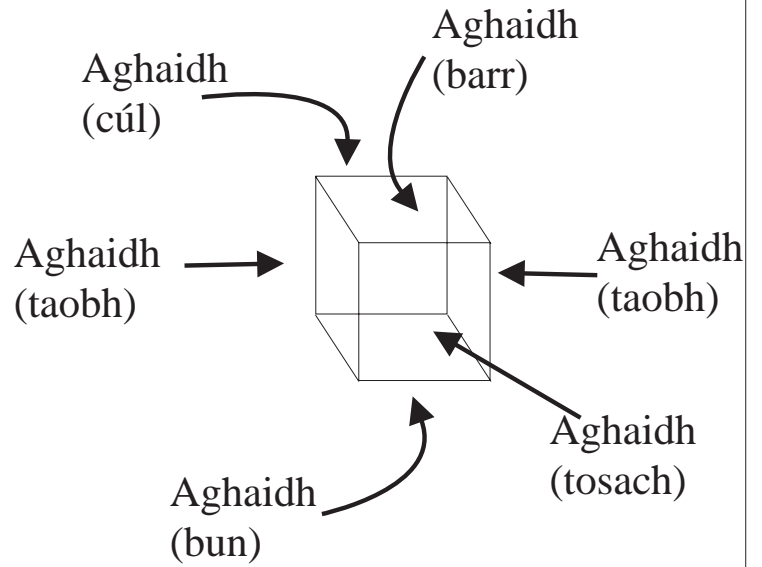


3 Cé acu pirimid díobh seo an dara ceann is mó?



An Ciúb

Bíonn 6 aghaidh ar gach ciúb.
Is cearnóg gach aghaidh.



Tá 6 aghaidh ar an gcruth seo, ach ní cearnóga iad. Ciúbóideach a thugtar air.


An Ciúbóideach

Bíonn 6 aghaidh ar gach ciúbóideach.
Is dronuilleog gach aghaidh.


Déan ciúb leis an eangach i gcúl an leabhair.

Cén codán de na cruthanna seo atá scáthaithe?


1




2



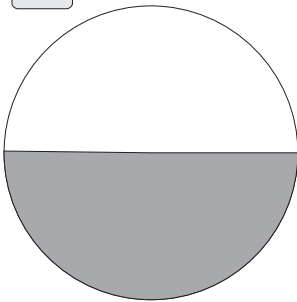
3



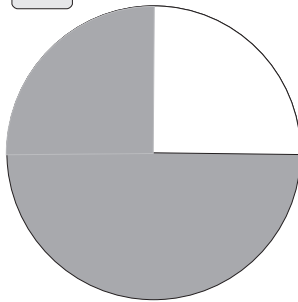
4



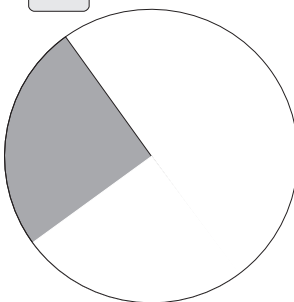
5



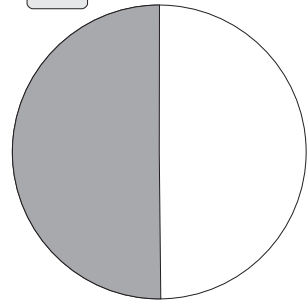
6



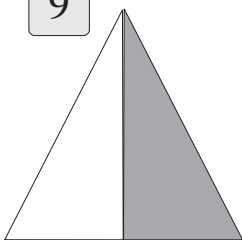
7



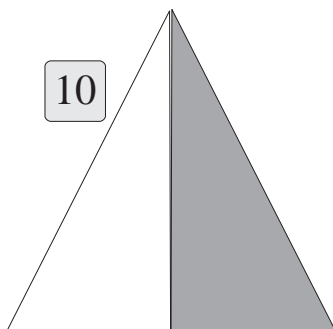
8



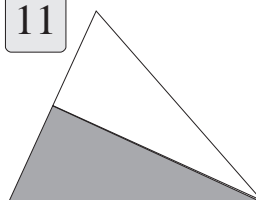
9



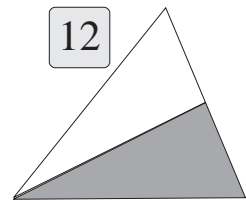
10



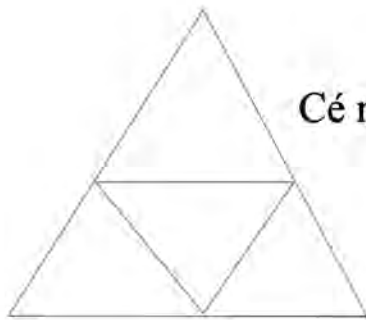
11



12



1



Cé mhéad triantán atá sa chruth seo?

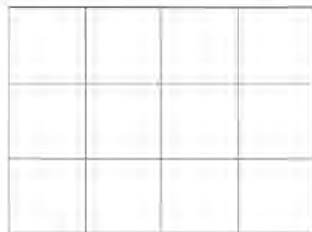
2



Cé mhéad cearnóg atá sa chruth seo?


3

Dathaigh $\frac{1}{4}$ de gach dronuilleog ar bhealaí difriúla.



4

Cé mhéad cearnóg bheag sa chearnóg mhór seo?




5

Cé mhéad cearnóg bheag i $\frac{1}{2}$ den chearnóg mhór?

6

Cé mhéad cearnóg bheag i $\frac{3}{4}$ den chearnóg mhór?

Fad



Tá an cailín sa phictiúr 172 cm ar airde.

Is ionann 172 cm agus 1 m 72 cm.

100 ceintiméadar = 1 mhéadar amháin.

Tabhair faoi deara:

Is féidir linn **cm** a scríobh in áit an fhocail ‘ceintiméadar’.

Nuair a bhíonn 172 cm á léamh agat abair ‘172 ceintiméadar’.


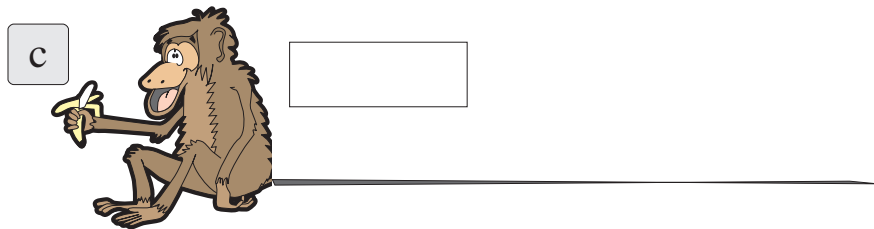


1 Cén airde tú?

2 An féidir leat an airde sin a scríobh ar bhealach eile?

3 Cén airde é doirteal do chistine?

4 Cé mhéad níos airde ná doirteal do chistine atá tú féin?

1 Tomhais fad an eireabaill ar gach moncaí le rialóir.



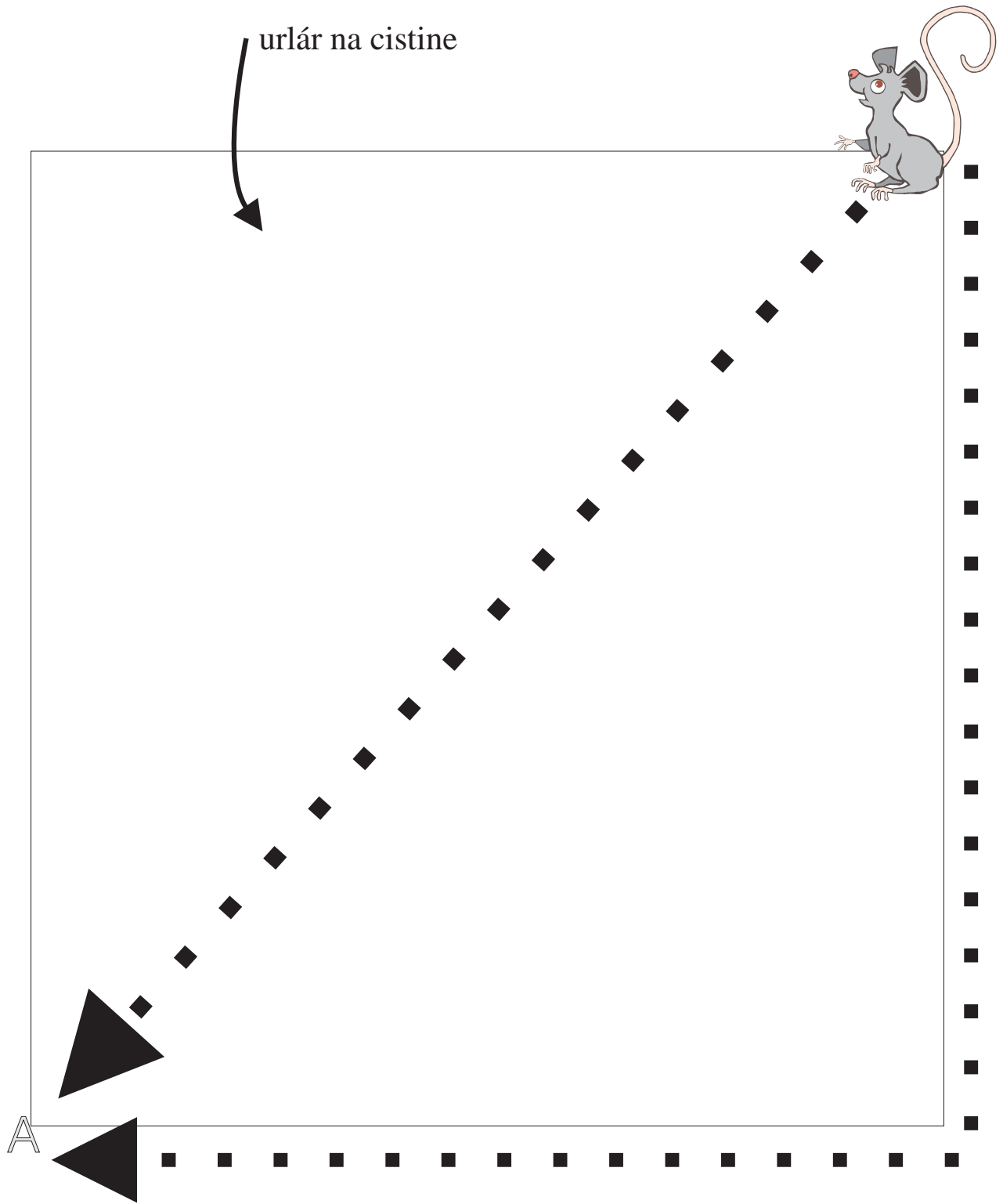
2 (i) Cé acu moncaí a bhfuil an t-eireaball is giorra air?

(ii) Na heireabaill a + b le chéile =

(iii) Na heireabaill b + c le chéile =

(iv) Na heireabaill c + d le chéile =

(v) Cé acu eireaball an dara ceann is giorra?



Tá cónaí ar an luchóg i bpoll ag A.

Dathaigh an bealach is giorra abhaile.

1 Bain úsáid as do rialóir chun na línte seo a thomhas. Tabhair buille faoi thuairim ar an bhfreagra ar dtús.

Fad

a 

b 

c 

d 

e 

f 

g 

2 Cé acu líne an dara líne is faide?

Fad

Suimiú

1

$$(a) \quad 14 \text{ cm} \quad + \quad 7 \text{ cm} \quad = \quad \boxed{}$$

$$(b) \quad 10 \text{ cm} \quad + \quad 22 \text{ cm} \quad = \quad \boxed{}$$

$$(c) \quad 13 \text{ cm} \quad + \quad 17 \text{ cm} \quad = \quad \boxed{}$$

$$(d) \quad 20 \text{ cm} \quad + \quad 23 \text{ cm} \quad = \quad \boxed{}$$

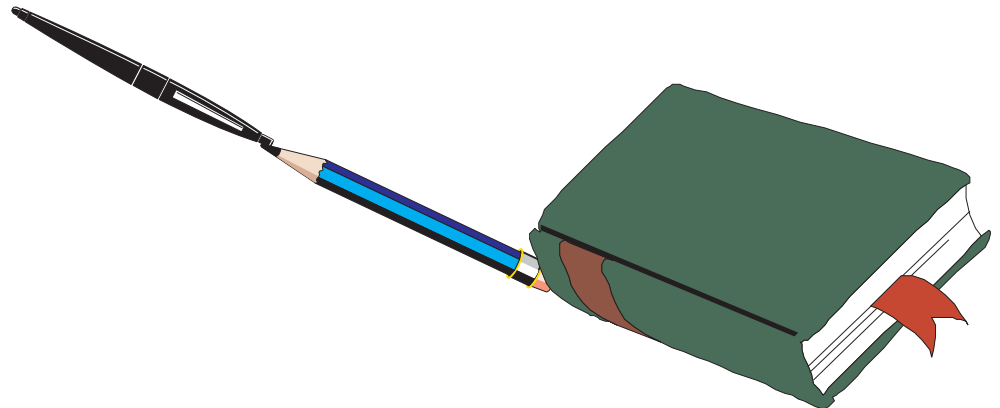
$$(e) \quad 4 \text{ cm} \quad + \quad 26 \text{ cm} \quad = \quad \boxed{}$$

- 2 Tá peann 14 cm ar fad, tá peann luaidhe 16 cm ar fad agus tá leabhar 25 cm ar fad.

Cé mhéad cm ar fad é sin?

Tabhair faoi deara

Ní féidir an fad ceart a thomhas sa phictiúr seo.



1



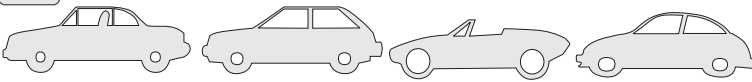
Rinne mé dhá leath de phíosá adhmaid a bhí 400 cm ar fad. Cén fad é gach leath?

2



Tá Peadar 172 cm ar airde. Tá Clár 6 cm níos airde. Cén airde í Clár?

3



Tá 4 charr bheaga ag Peadar. Tá gach carr díobh 10 cm ar fad. Cén fad iomlán atá iontu?


4



Bhí píosa de shreang ag Síle. Bhí sé 1 mhéadar amháin ar fad. Ghearr sí píosa de, a bhí 95 cm ar fad, agus cheangail sí dá báidín é. Cén fad a bhí sa phíosá a bhí fágtha?

5

Tá an iall ar mhadra Pheadair 120 cm ar fad. Tá an iall ar mhadra Chlár 119 cm ar fad.



Cé acu iall is faide?

Cén difríocht san fhad atá eatarthu?

Corruimhreacha agus Ré-uimhreacha

Tarraing ciorcal timpeall ar na dúradáin a bhfuil corruimhreacha orthu.

1

2

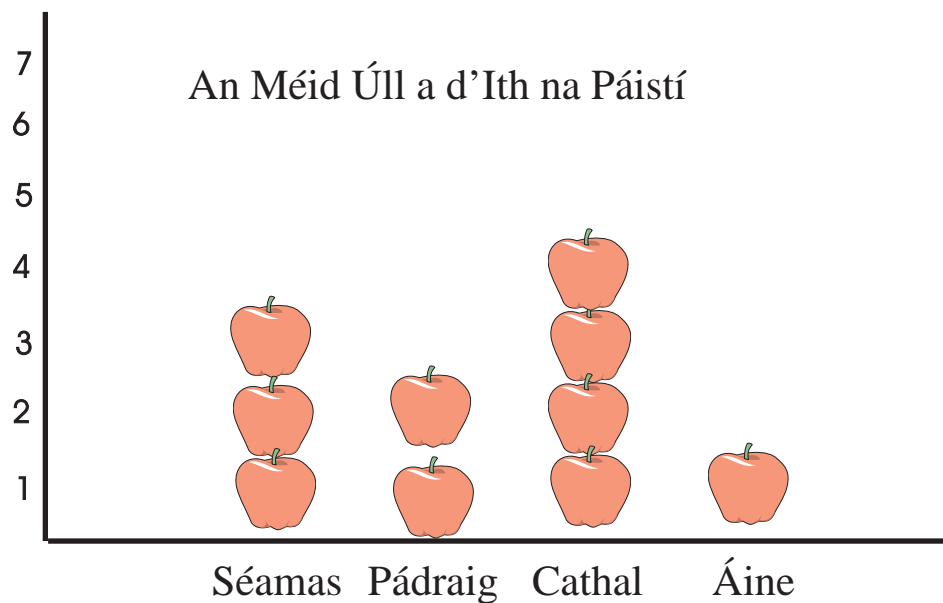
fíor nó bréagach

- Is corruimhir é 22.
- Is corruimhir é 13.
- Is corruimhir é 55.
- Is corruimhir é 44.
- Is corruimhir é 100.

3

fíor nó bréagach

- Is corruimhir é 17.
- Is corruimhir é 12.
- Is corruimhir é 19.
- Is corruimhir é 21.
- Is corruimhir é 24.



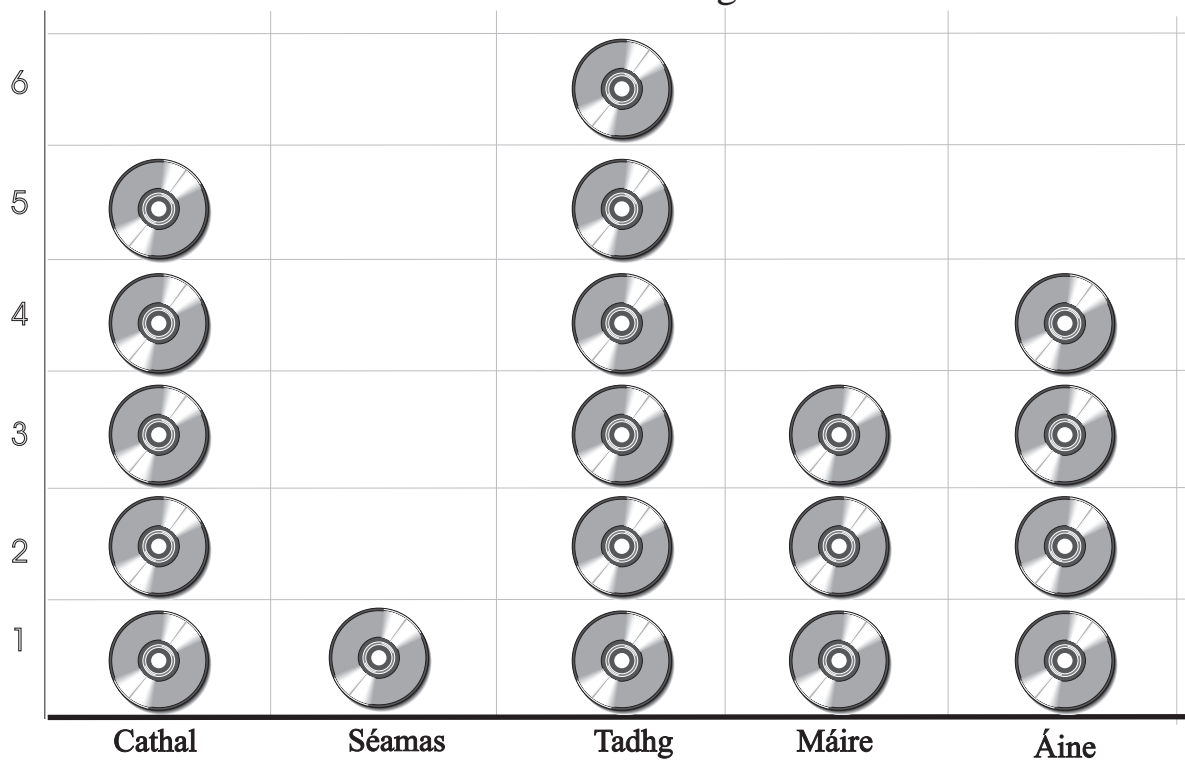
1 Cé mhéad úll a d'ith Séamas?

2 Cé mhéad úll a d'ith Cathal?

3 Cé a d'ith an méid is mó úll?

4 Cé mhéad úll ar fad a d'ith na páistí?

An Méid Dlúthdhioscaí atá ag na Daltaí




- 1 Cé mhéad dlúthdhiosca atá ag Cathal?

- 2 Cé mhéad dlúthdhiosca atá ag Áine?

- 3 Cén dalta a bhfuil an méid is mó dlúthdhioscaí aici/aige?

- 4 Cé mhéad dlúthdhiosca ar fad atá ag na daltaí?

An Méid Iasc a Cheannaigh na Daltaí



Cathal

Séamas

Tadhg

Máire

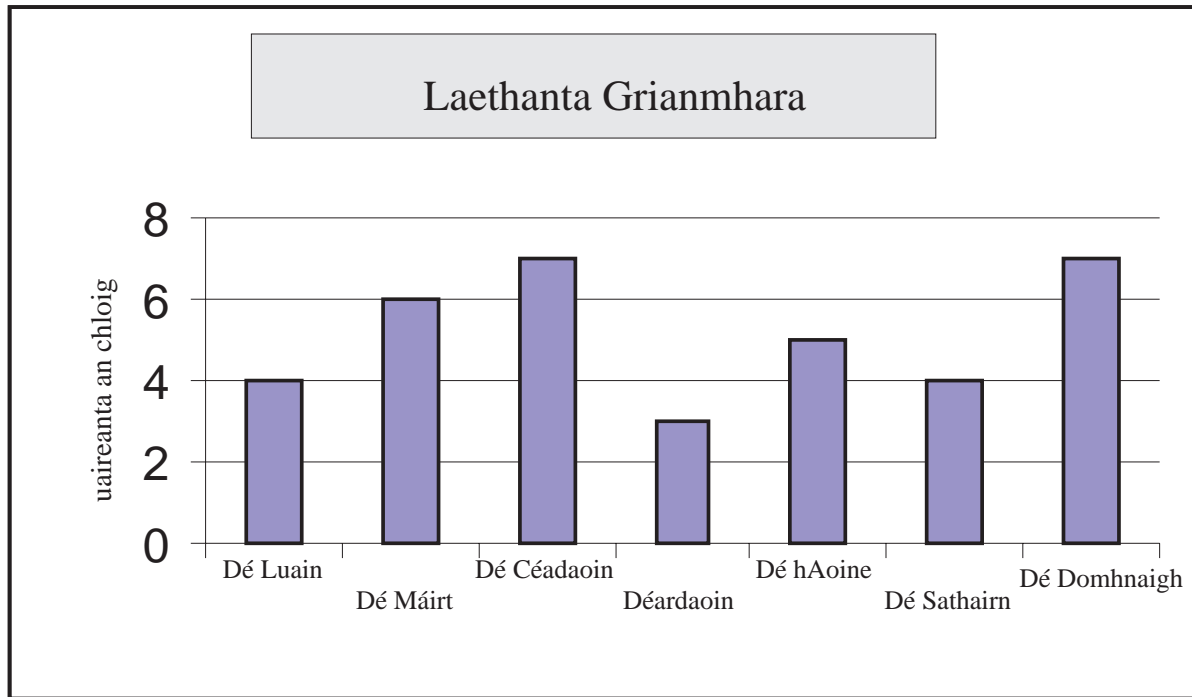
Áine

1 Cé mhéad iasc a cheannaigh Cathal?

2 Cé mhéad iasc a cheannaigh Áine?

3 Cén dalta a cheannaigh an méid is mó iasc?

4 Cé mhéad iasc ar fad a cheannaigh na daltaí?



Léiríonn an graf seo an méid uaireanta an chloig a bhí an ghrian ag taitneamh i rith aon seachtaine amháin. In áit pictiúir den ghrian a chur ar an ngraf (mar atá sna picteagraim ar na leathanaigh roimhe seo) tá barraí ingearacha ag seasamh do na huaircanta grianmhara.

Barra-chairt a thugtar ar an ngraf seo.

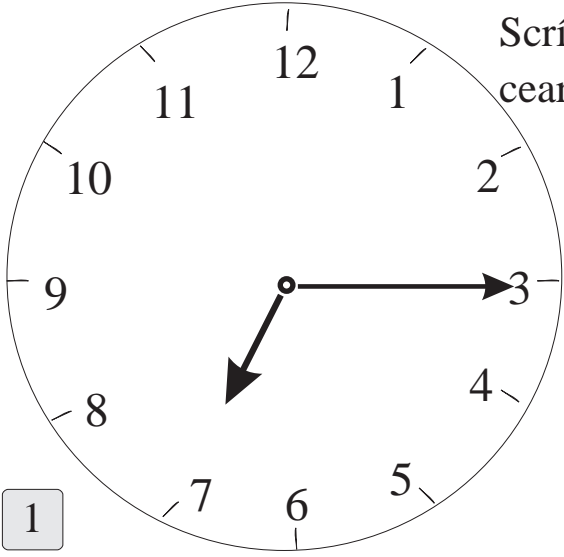
1 Cérbh iad na laethanta ba ghrianmhara?

2 Cérbh iad na laethanta nach raibh grianmhar?

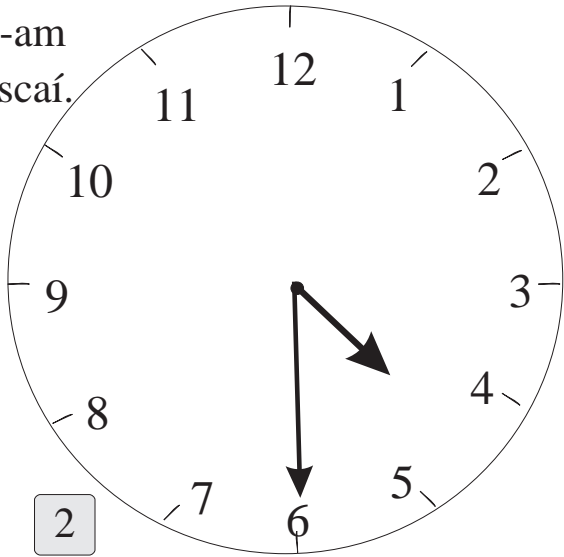
3 Cé acu lá ba ghrianmhara – Dé Luain nó Dé hAoine?

4 Cé mhéad uair an chloig gréine a bhí ann i rith na seachtaine?

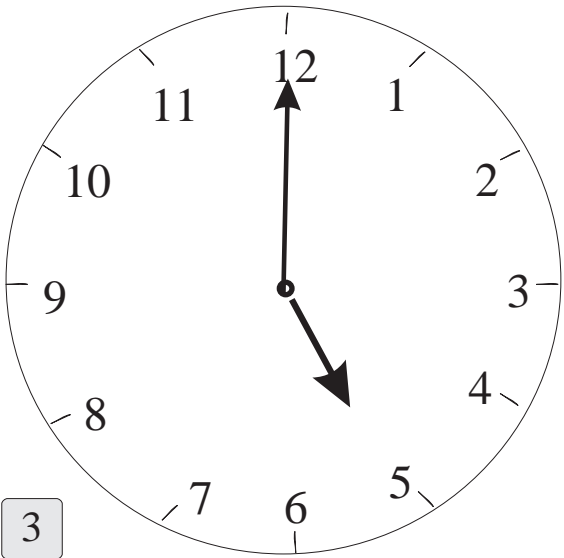
Scríobh an t-am ceart sna boscaí.



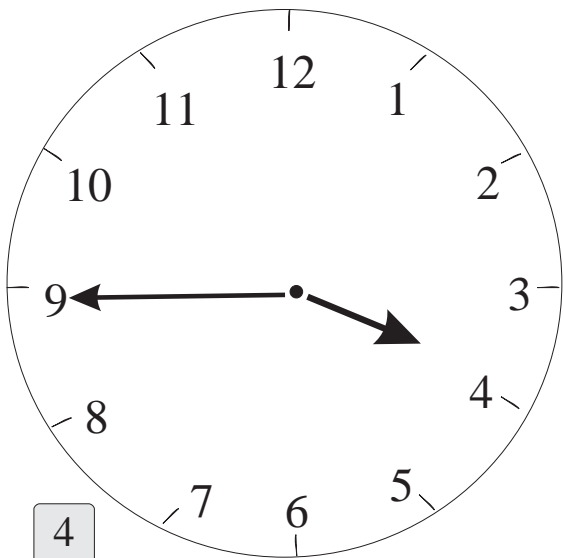
1



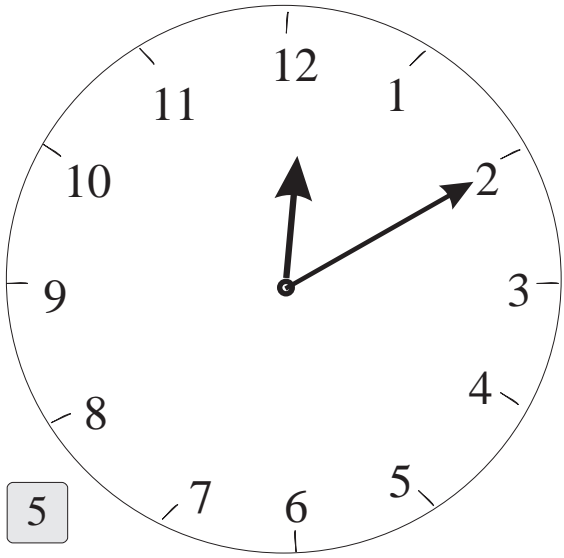
2



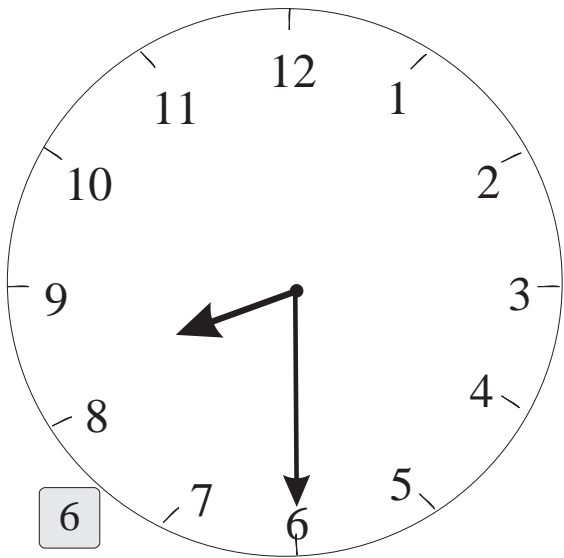
3



4



5



6

Dé Domhnaigh

Cad é an chéad lá den tseachtain?

Cad é an lá deireanach
den tseachtain?

Dé Luain

Cad é an tríú lá den tseachtain?

Dé Máirt

Cad é an séú lá den tseachtain?

Dé Céadaoin

Cad é an dara lá den tseachtain?

Déardaoin

Cad é an cúigiú lá den tseachtain?

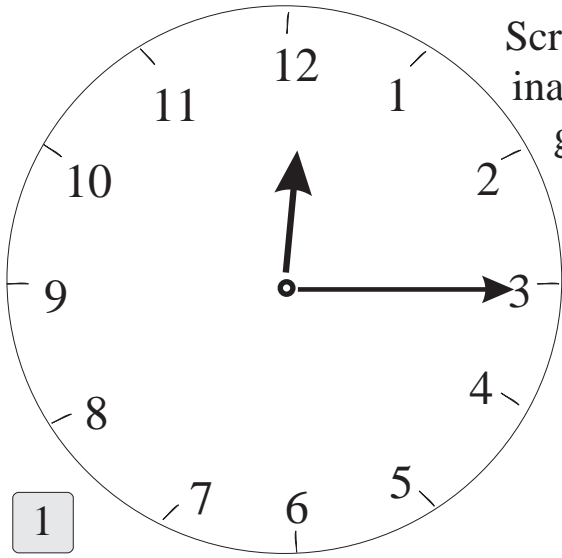
Dé hAoine

Dé Sathairn

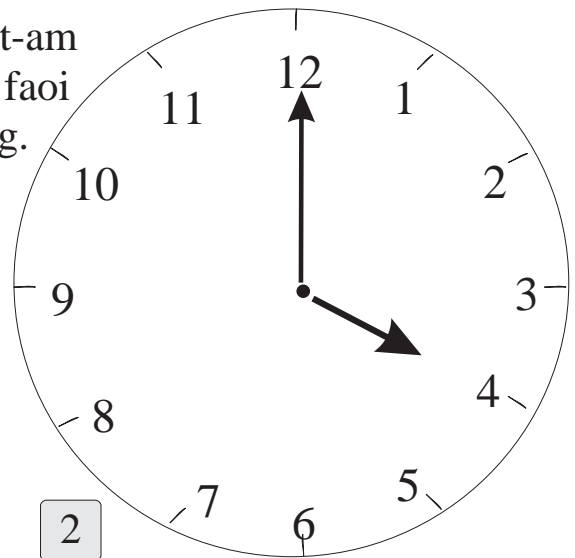
Cad é an ceathrú lá den tseachtain?

Cén lá den tseachtain is fearr leat?
Cén fáth?

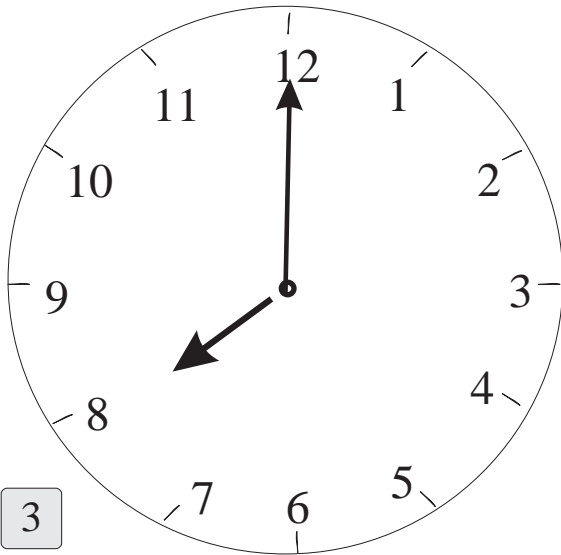
Scríobh an t-am
ina fhocail faoi
gach clog.



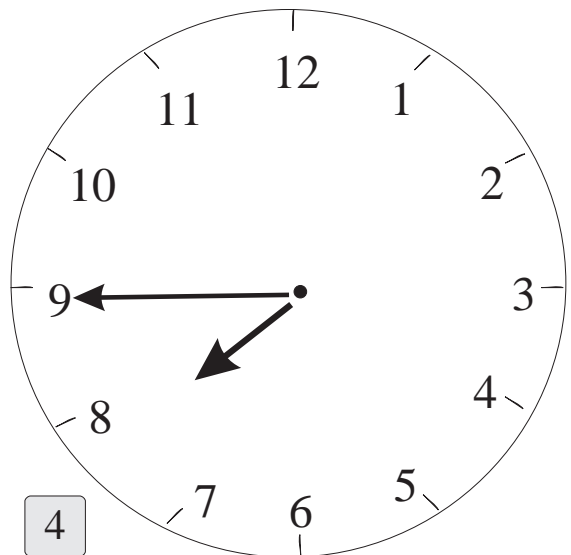
1



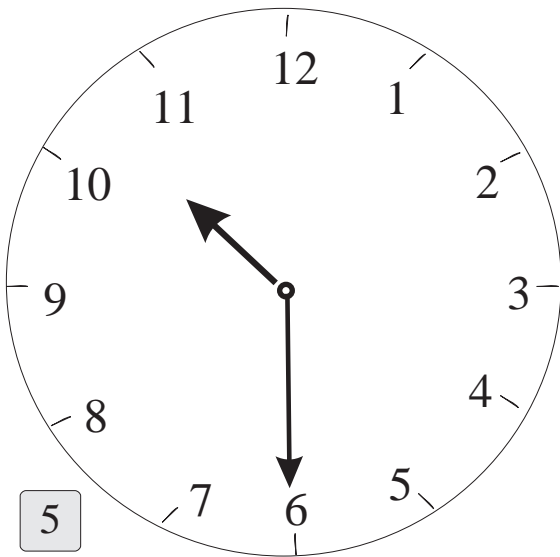
2



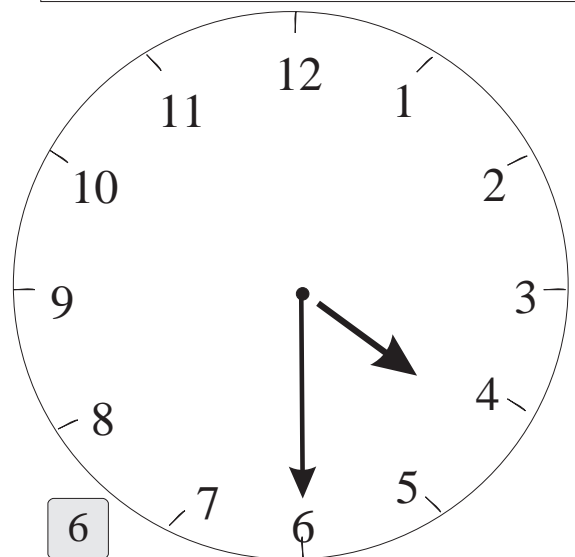
3



4



5



6

- Eanáir
- Feabhra
- Márta
- Aibreán
- Bealtaine
- Meitheamh
- Iúil
- Lúnasa
- Meán Fómhair
- Deireadh Fómhair
- Samhain
- Nollaig

Cén mhí a thagann ina ndiaidh seo?



Márta



Lúnasa



Deireadh Fómhair

Meitheamh 2004						
Dé Luain	Dé Máirt	Dé Céadaoin	Déardaoin	Dé hAoine	Dé Sathairn	Dé Domhnaigh
	1	2	3	4	5	6
7	8	9	10	11	12	13
14	15	16	17	18	19	20
21	22	23	24	25	26	27
28	29	30				

INNIU

Inniu an 7ú lá den mhí.



1 Cad é dáta bhreithlá an chailín?

2 Cad é dáta bhreithlá an bhuachalla?

An tAm

1

An Méid Seachtainí	1			4	5
An Méid Laethanta	7	14	21		

2

a

b

Suimigh
 6 lá
 6 lá
7 lá
 lá

Suimigh
 8 lá
 9 lá
7 lá
 lá

Athraigh na freagraí ina laethanta agus seachtainí.

Sampla: 10 lá = 1 seachtain amháin agus 3 lá

3

a

b

_____ seachtaine _____ lá

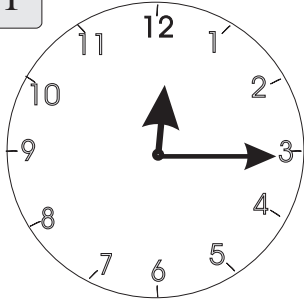
_____ seachtaine _____ lá



Scríobh an t-am san fhoirm dhigiteach.

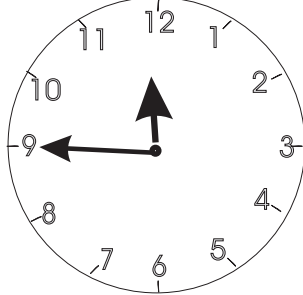
1

p.m.



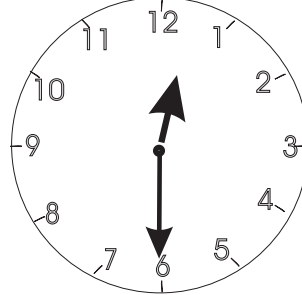
12 : 15

a.m.




:

a.m.



:

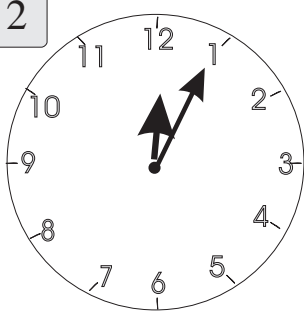
a.m.



:

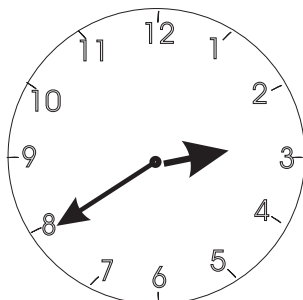
2

a.m.



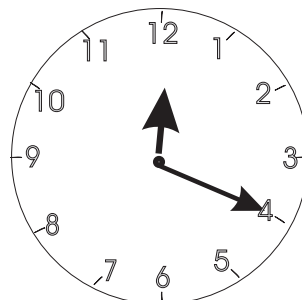
:

a.m.



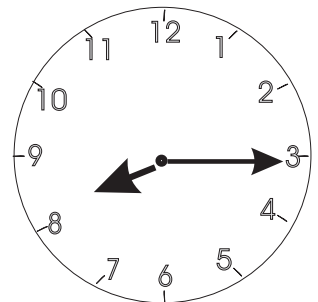
:

p.m.



:

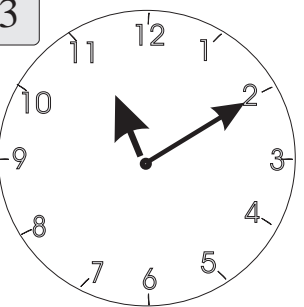
a.m.



:


3

a.m.



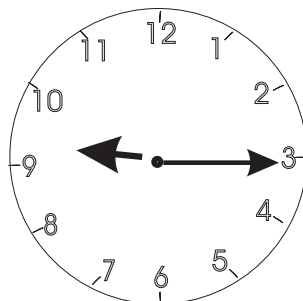
:

a.m.



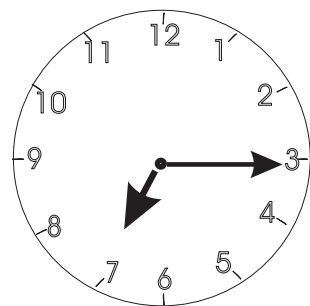
:

a.m.



:

a.m.




:

Score box

An tAm

Fadhbanna

1



Chuaigh Mamaí go dtí an baile mór ar 3 a chlog. Tháinig sí abhaile 2½ an chloig ina dhiaidh sin. Cén t-am a tháinig sí abhaile?

2



Tagann an bus gach 15 nóiméad. Tháinig an bus deireanach ar 3 a chlog. Cén t-am a thiocfaidh an chéad bhus eile?

3



Téimse a chodladh ar 9 a chlog. Tá leathuair an chloig spraoi fágtha agam.

Cén t-am anois é?

4



Tagann fear an phoist ar 10 a chlog gach lá. Tá sé 9.15 anois. Cé mhéad nóiméad go dtí go mbeidh sé anseo?

5

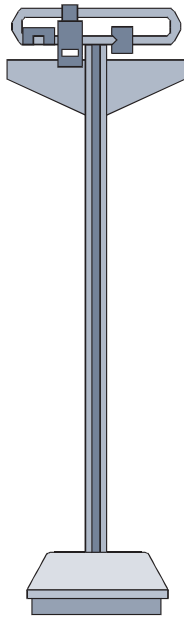


Fágann Deirdre an scoil ar 3.15. Tógann an turas abhaile leathuair an chloig. Cén t-am a bhíonn sí sa bhaile?

Meáchan agus Mais

Cileagram = kg

Gram = g



Cad é do mheáchan féin?



¼ kg



¼ kg



¼ kg



¼ kg

Scríobh síos an comhartha < nó = nó >

1

1 kg siúcra 4 bhosca tae

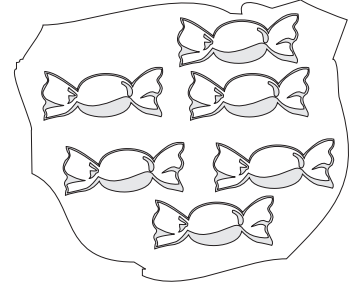
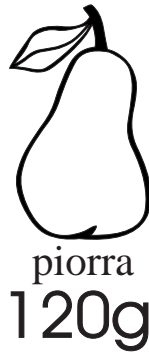
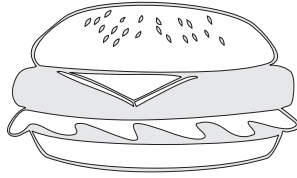
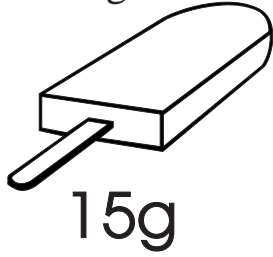
2

2 bhosca tae 1 kg siúcra

3

4 mhála siúcra 3 bhosca tae

reoiteog



Faigh meáchan na nithe seo a leanas:

1


(a) 1 reoiteog amháin agus 1 bhurgar amháin

(b) 1 phiorra amháin agus 5 mhilseán



(c) 2 bhurgar agus 1 reoiteog amháin

(d) 2 phiorra agus 10 milseán



(e) 3 reoiteog agus 2 phiorra





Faigh meáchan na nithe seo a leanas:

1  +  =



1 bhosca amháin + 2 channa =

2  +  =



2 bhosca + 8 gcanna =

3  +  =

2 bhosca + 2 channa =


4  +  =

3 bhosca + 2 channa =

5  +  =

3 bhosca + 1 channa amháin =

Toilleadh



Is féidir 6 ghloine bhainne a líonadh as an gcartán seo.



Scríobh síos na huimhreacha atá ar lár.

1	1	2	3	4	5	6	7	8	cartáin
	6								gloiní

2	As cartáin	1	2	3	4	5	6	7	8	cartáin
	Gheobhadh 6 páistí	1								gloine an duine

3 Tá toilleadh trí thanc, A, B, C, le feiceáil sa tábla thíos.

Cé acu tanc i ngach sraith is lú toilleadh?


Tanc A	Tanc B	Tanc C	Freagra
30 lítear	24 lítear	27 lítear	
43 lítear	66 lítear	34 lítear	
57 lítear	89 lítear	26 lítear	
21 lítear	24 lítear	87 lítear	
78 lítear	57 lítear	44 lítear	
67 lítear	78 lítear	73 lítear	
81 lítear	67 lítear	15 lítear	
90 lítear	56 lítear	60 lítear	

Aguisín


Eangacha
le haghaidh
Cruthanna 3-T

Ciúb

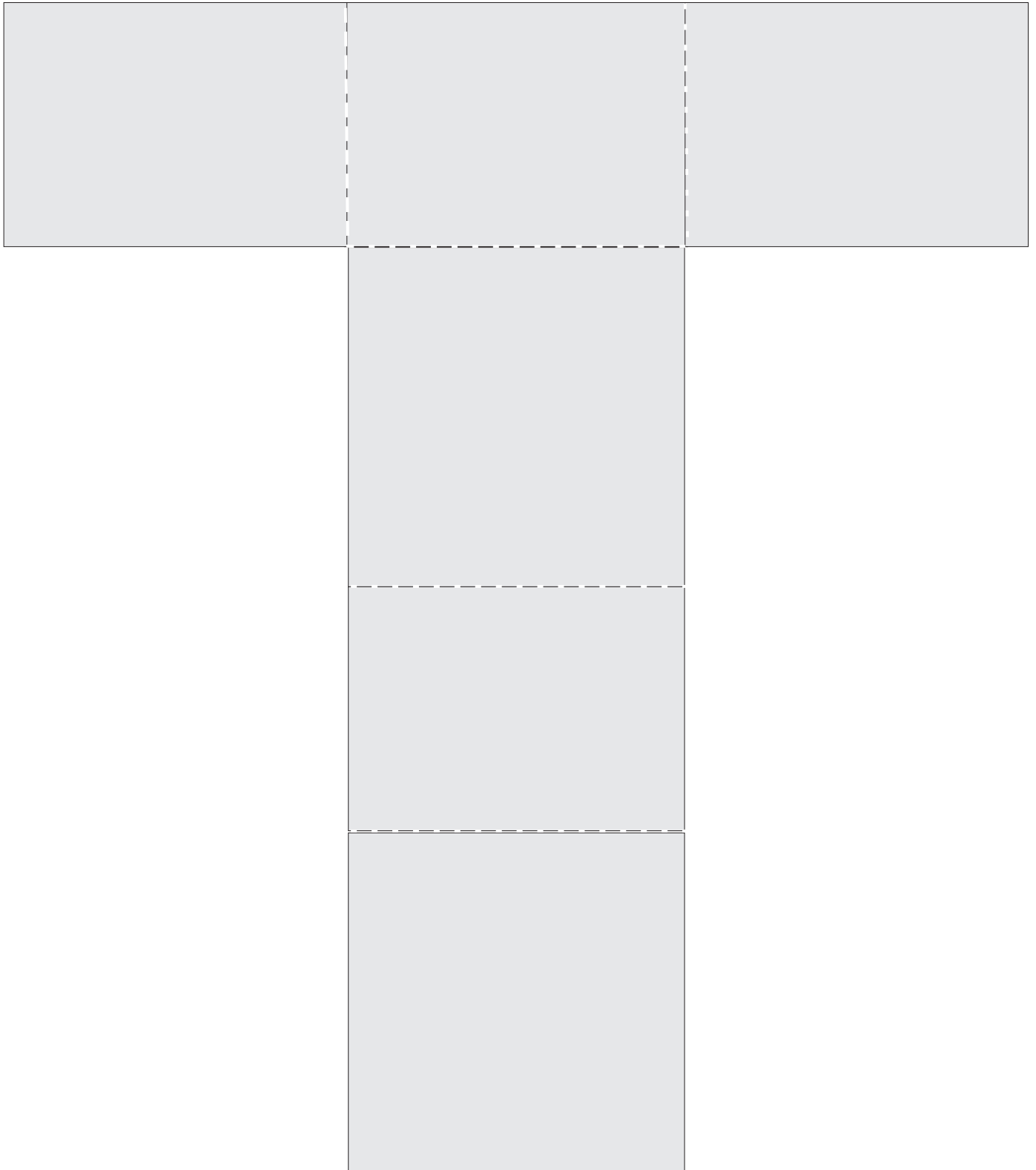
Déan cóip den chruth seo ar leathanach cairtchláir.



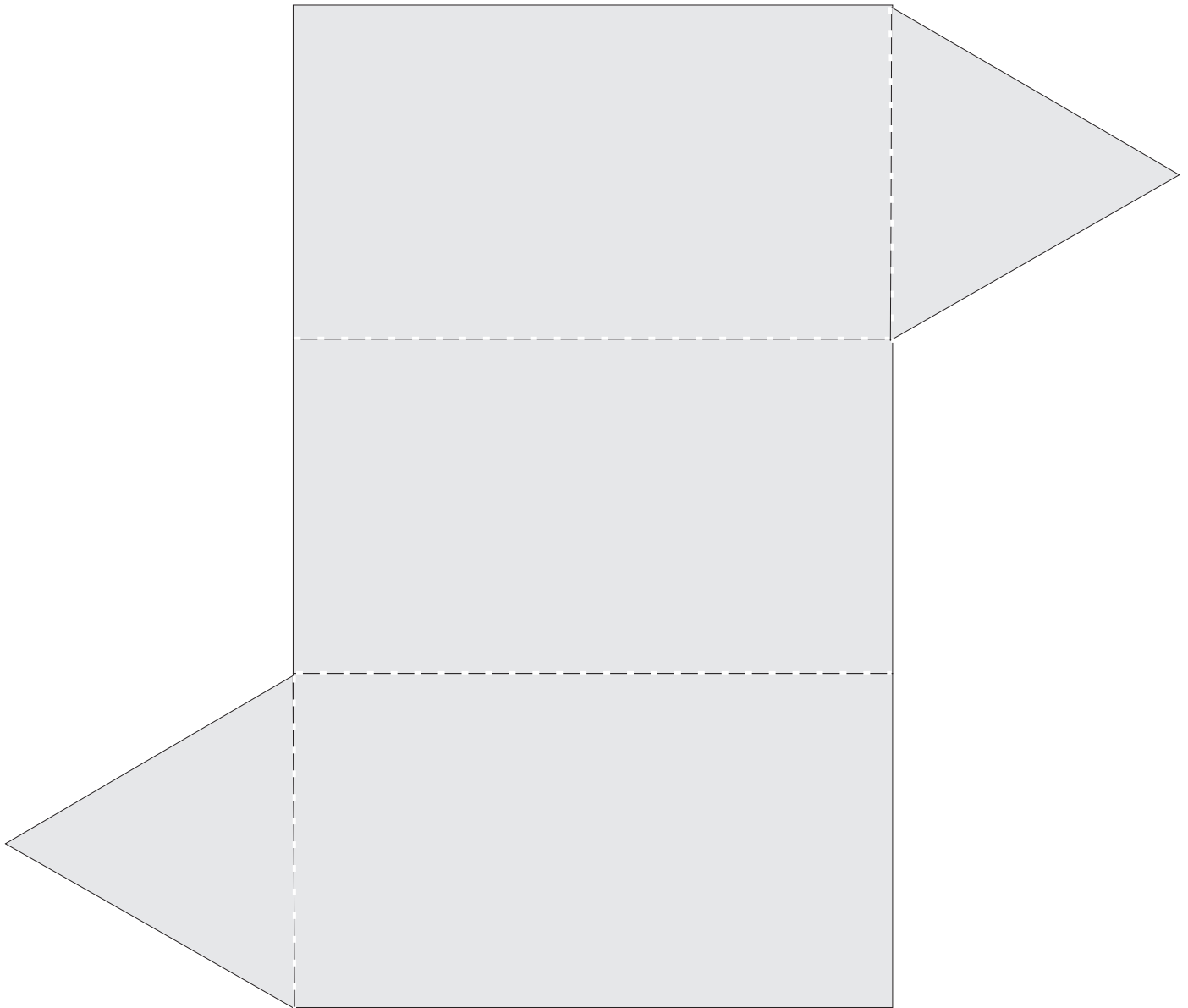
Ciúb



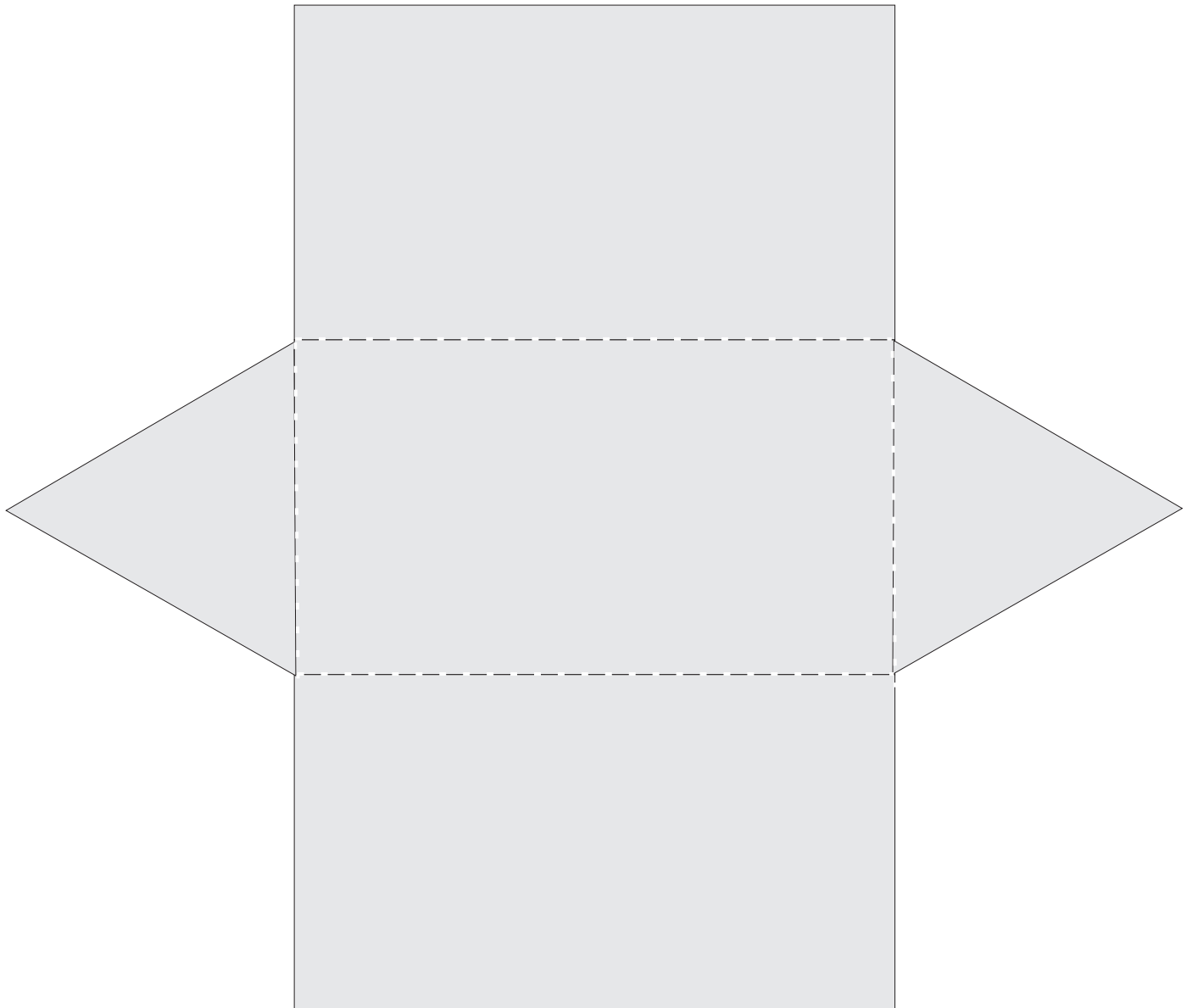
Ciúbóideach



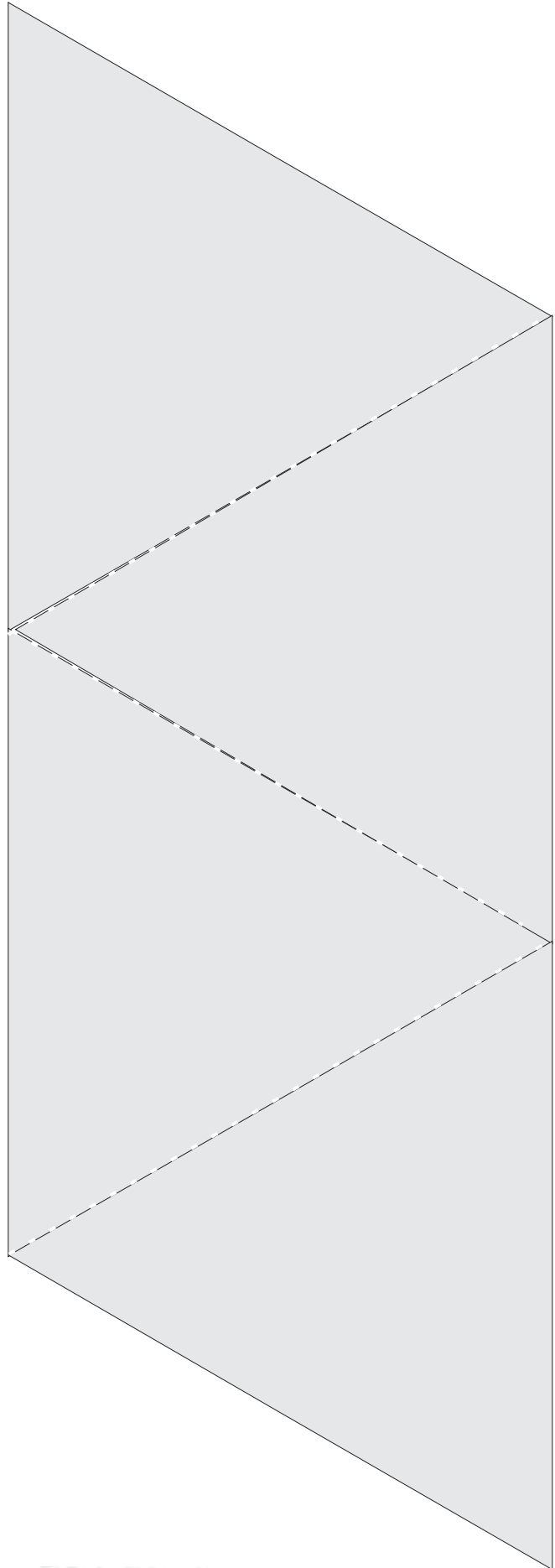
Priosma triantánach



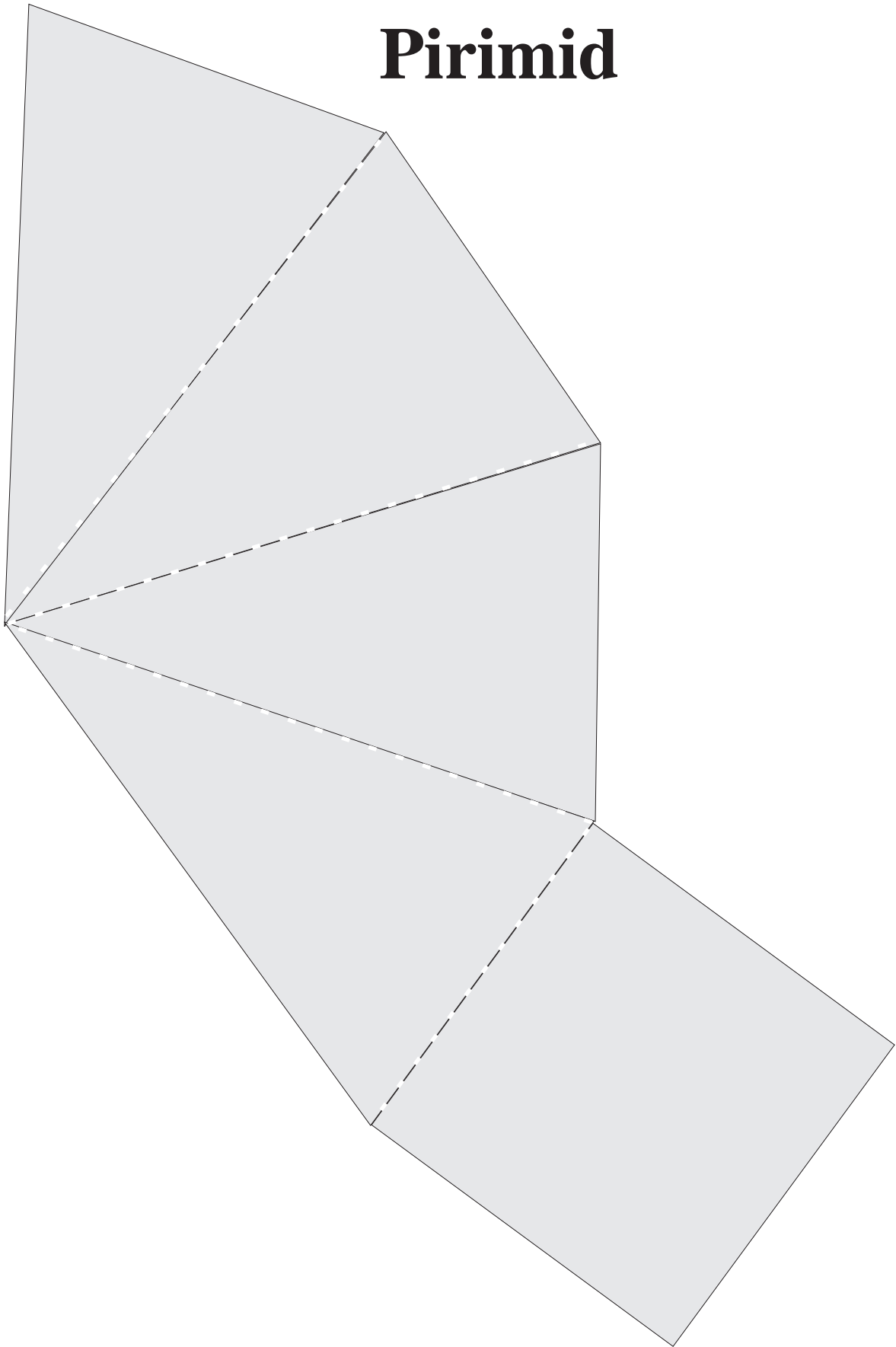
Priosma triantánach




Teitrihéadrán



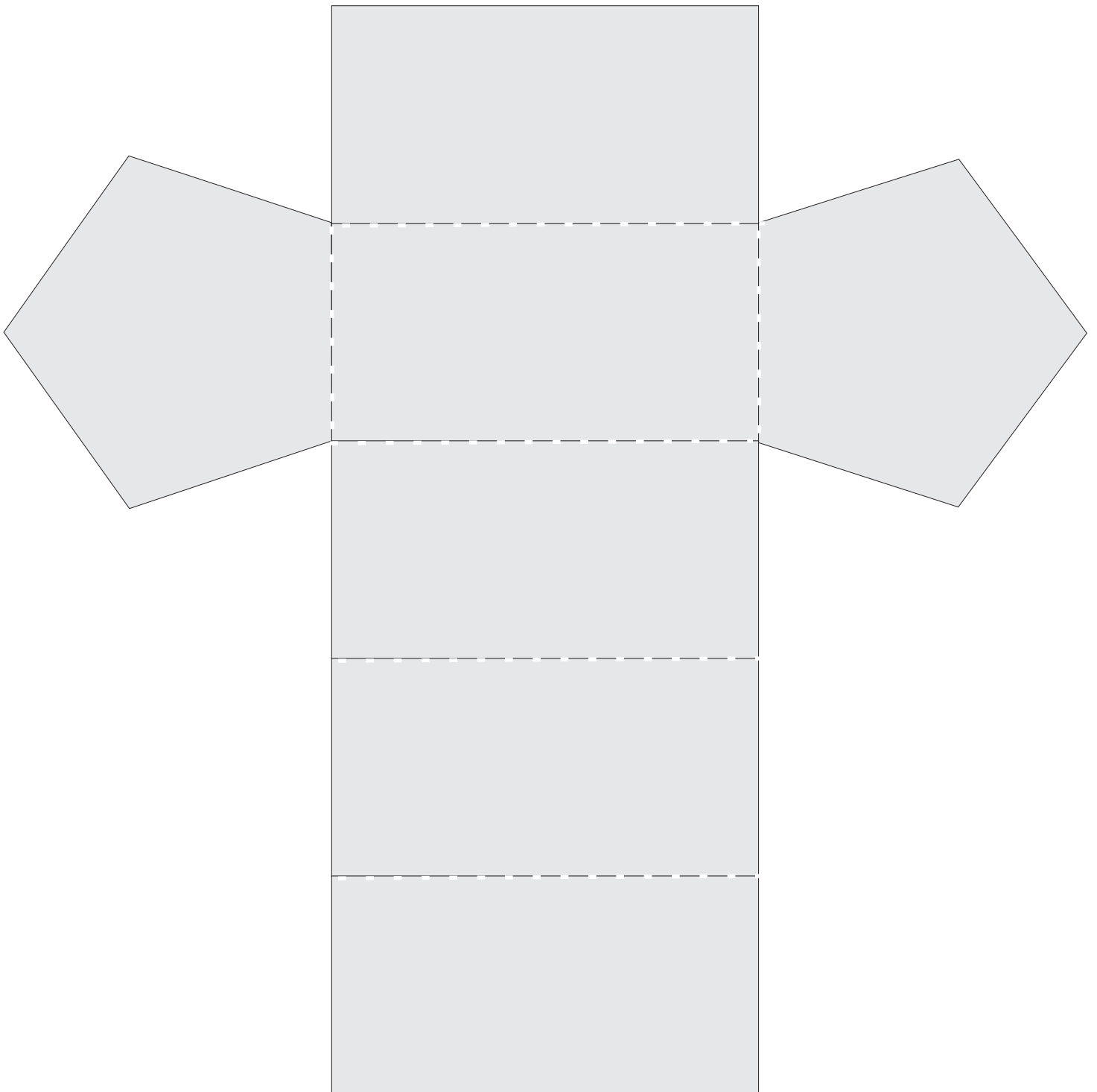
Pirimid



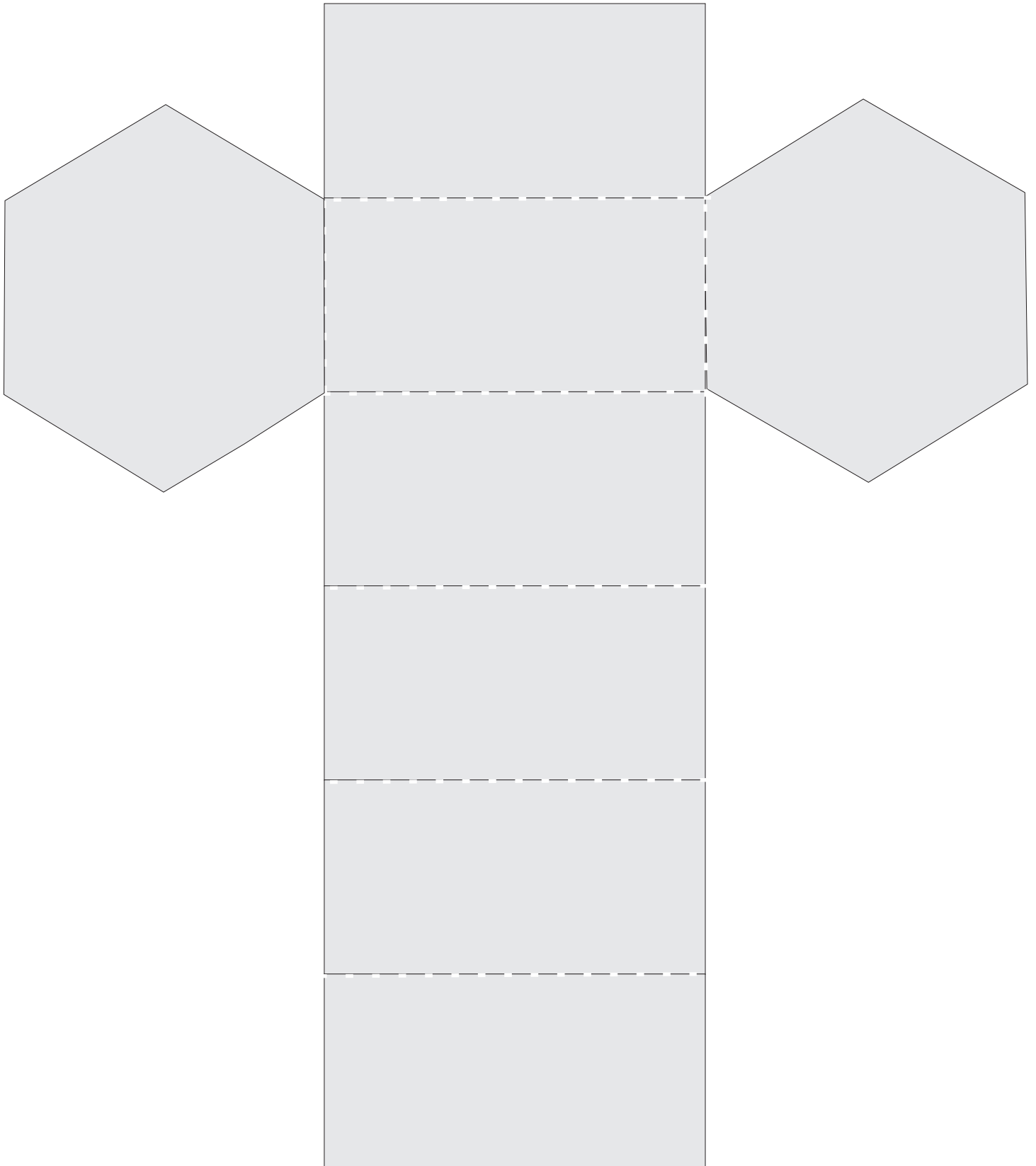
Pirimid




Priosma peinteagánach



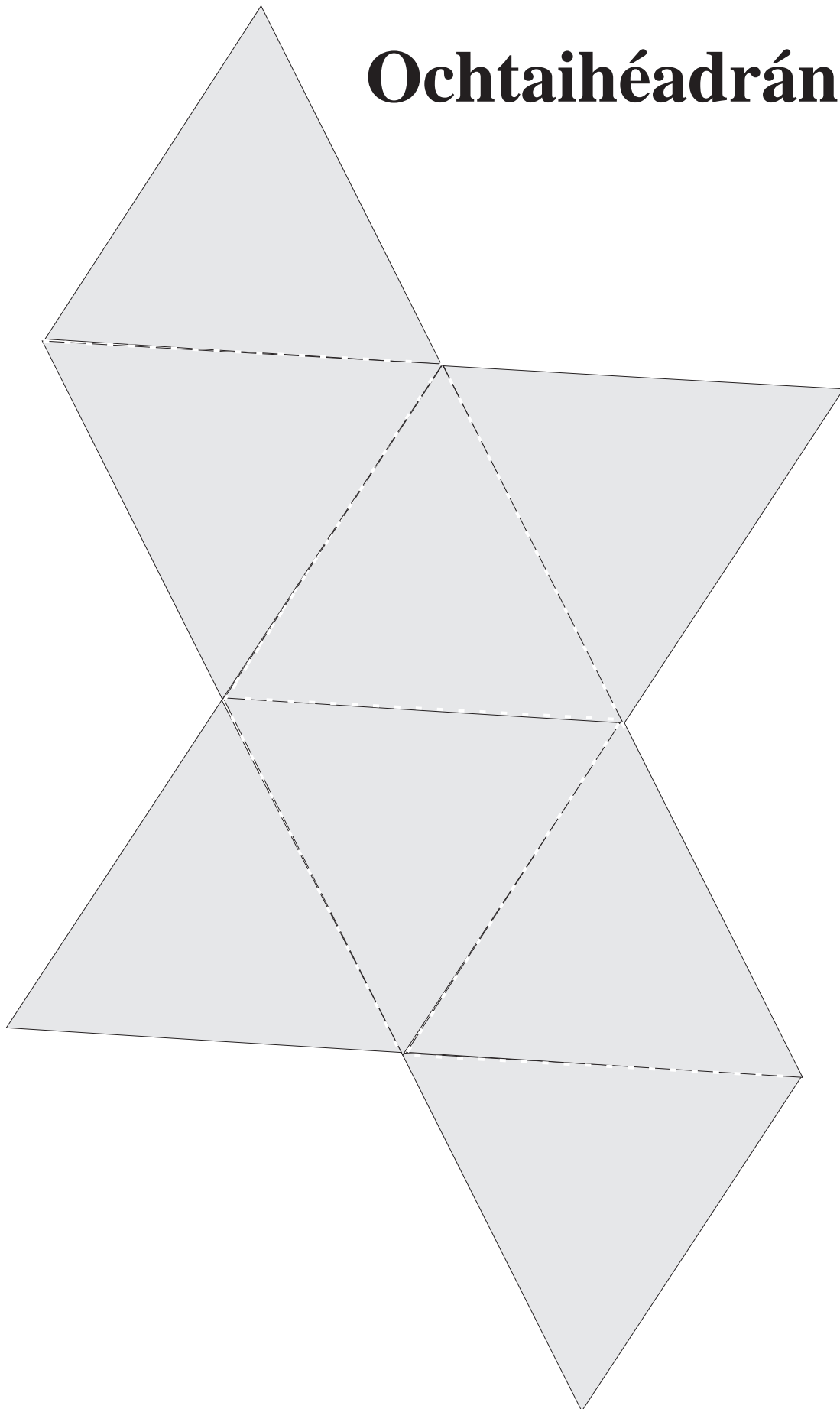
Priosma heicseagánach




Sorcóir



Ochtaihéadrán



Cón


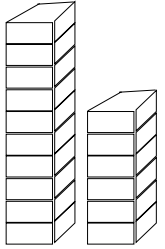


Trialacha


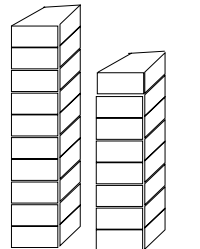
1

Scríobh síos an figiúr.


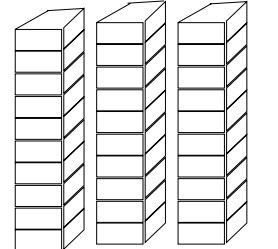
a



b


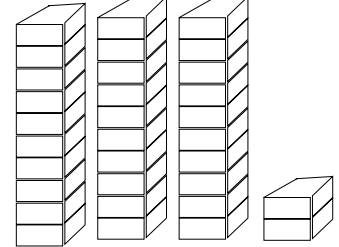


c


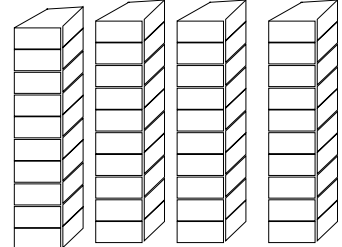


Obair gharbh


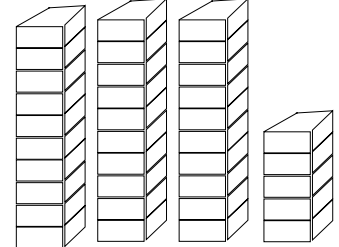
d




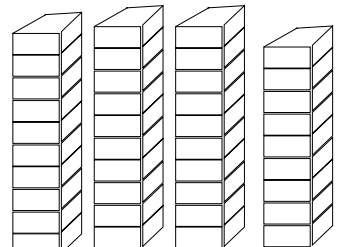
e



f




g




2

Scríobh síos an comhartha ceart, > nó <.


a $6 \square 16$




b $16 \square 18$




c $23 \square 20$




d $19 \square 29$




e $17 \square 0$




f $0 \square 2$




g $11 \square 9$




h $10 \square 0$



i $12 \square 9$



j $18 \square 21$

Obair gharbh

3

a $4 + 2 = \square$

$3 + \square = 6$

$\square + 5 = 6$

b $2 + 2 + \square = 8$

$6 + \square = 8$

$4 + 4 = \square$

c $5 + 5 = \square$

$6 + \square = 10$

$3 + \square = 10$

Obair gharbh

4

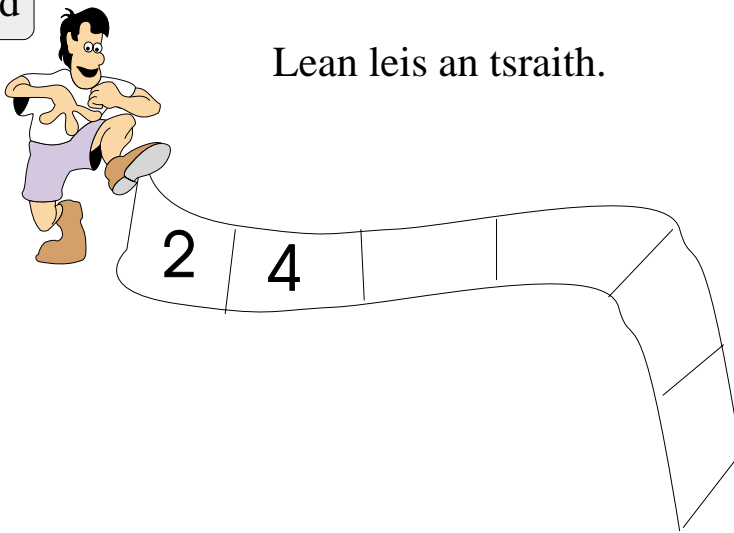
a $5 + 4 = 4 + \square$

b $6 + 2 = 2 + \square$

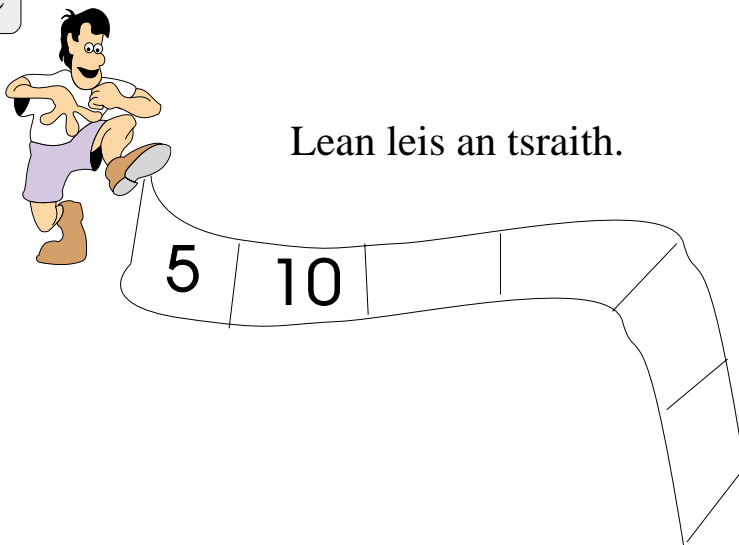
c $1 + 7 = \square + 1$

Obair gharbh

d Lean leis an tsraith.



e Lean leis an tsraith.



5

a $3 + 3 + \square = 9$

b $3 + 2 + 3 = \square$


c $3 + 2 + 2 = \square$

Obair gharbh

d




Bhí 6 phiscín ag Deirdre sa chistin. Rith 3 cinn amach an doras. Cé mhéad piscín a bhí fós sa teach?



e

Bhí 7 milseán ag Séamas. D'ith sé 5 cinn. Cé mhéad milseán a bhí fágtha aige?



f

$$\begin{array}{r} 5 \\ + 4 \\ \hline \end{array}$$

g

$$\begin{array}{r} 6 \\ + 4 \\ \hline \end{array}$$

h

$$\begin{array}{r} 8 \\ + 4 \\ \hline \end{array}$$

i

$$\begin{array}{r} 9 \\ + 4 \\ \hline \end{array}$$

6

a Scríobh 4 uimhirabairt sna boscaí thíos.

5	
3	2

b

10	
8	2

Obair gharbh

7

1	2	3	4	5	6	7	8	9	10	11	12	13	14	15	16	17	18	19	20
---	---	---	---	---	---	---	---	---	----	----	----	----	----	----	----	----	----	----	----

Obair gharbh

Bain úsáid as an uimhirlíne más mian leat.

a

$9 + 1 = \square$

$6 + 8 = \square$

$11 + 5 = \square$

b

$3 + (6 + 4) = 3 + \square = \square$

$4 + (8 + 2) = 4 + \square = \square$

c

$10 + 5 = \square$

$10 + 3 = \square$

$10 + 8 = \square$




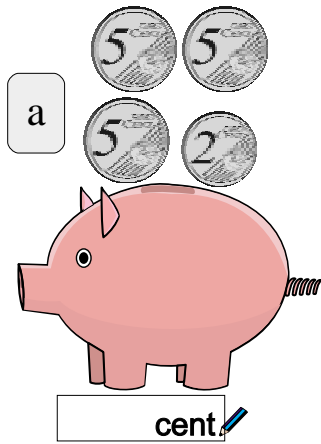
d

$11 = \square + \square$

$13 = \square + \square$

8

Cé mhéad?



Obair gharbh

e Bhí 16 cent ag Eoin. Chaith sé 12 cent.
Cé mhéad airgid a bhí fágtha aige?

cent

f Bhí 20 cent ag Liam. Chaith sé 18 cent.
Cé mhéad airgid a bhí fágtha aige?

cent

g Bhí 12 mhilseán ag Síle. D'ith sí 3 cinn.
Cé mhéad milseán a bhí fágtha aici?

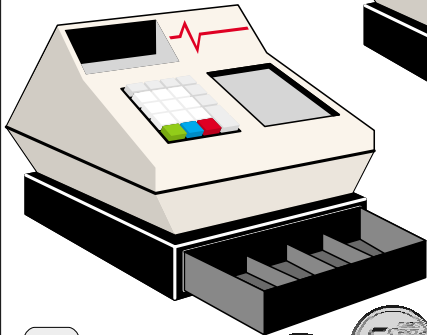
9

a $8 - \square = 6$

b $10 - \square = 6$

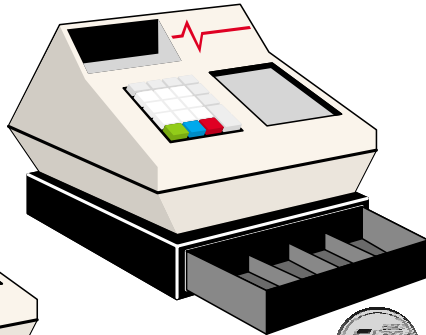
c $15 - \square = 6$

Cé mhéad?



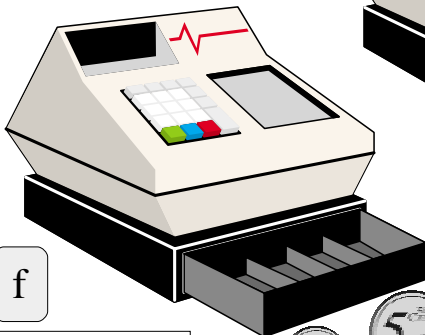
d

cent



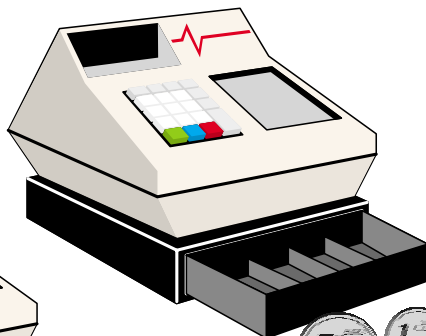
e

cent



f

cent



g

cent



Obair gharbh

10

a

$$\begin{array}{r} 6 \text{ cent} \\ + 3 \text{ cent} \\ \hline \end{array}$$

b

$$\begin{array}{r} 4 \text{ cent} \\ + 8 \text{ cent} \\ \hline \end{array}$$

c

$$\begin{array}{r} 5 \text{ cent} \\ + 9 \text{ cent} \\ \hline \end{array}$$

d

$$\begin{array}{r} 12 \text{ cent} \\ - 8 \text{ cent} \\ \hline \end{array}$$






e

$$\begin{array}{r} 13 \text{ cent} \\ - 7 \text{ cent} \\ \hline \end{array}$$







f

$$\begin{array}{r} 11 \text{ cent} \\ + 9 \text{ cent} \\ \hline \end{array}$$

g

Bhí agam	Chaith mé	Sóinseáil
22 cent	 	cent
11 cent		cent
19 cent	 	cent

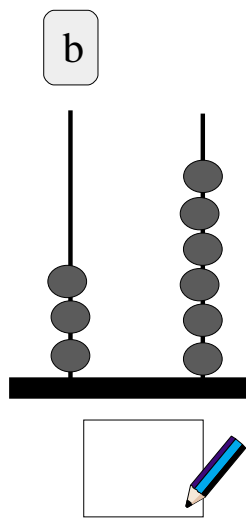
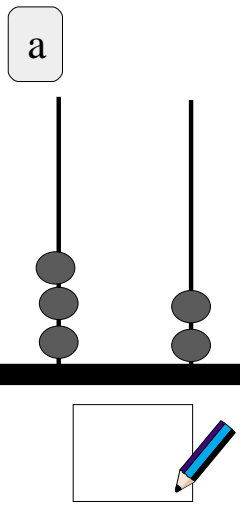
h

Bhí agam	Chaith mé	Sóinseáil
25 cent	 	cent
23 cent	 	cent
34 cent	 	cent

Obair gharbh

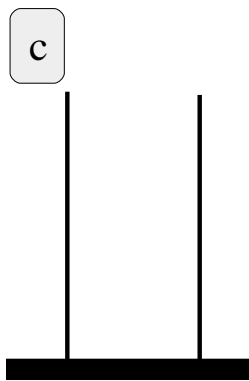
1

Scríobh síos an uimhir.

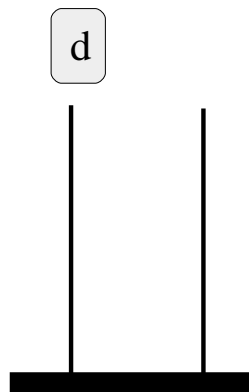


Obair gharbh

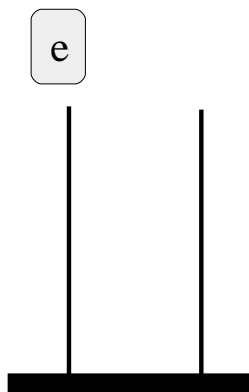
Cuir an méid ceart coirníní ar gach abacas thíos.



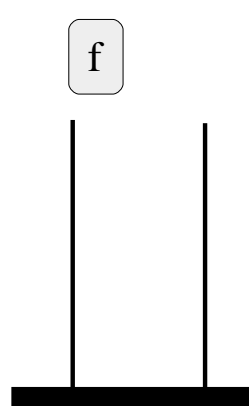
30



65



51



15

2

Scríobh an uimhir cheart sna boscaí folmha.

a

29, , 31

b

36, , 38

c

40, , 42

d

39, , 41

Cuir isteach > nó < nó =

e

23 19

f

31 35

g

52 25

h

100 99Obair gharbh

3

a Scríobh 4 uimhirabairt.

10	
9	1











b Scríobh 4 uimhirabairt.

12	
8	4









c Scríobh 4 uimhirabairt.

9	
7	2

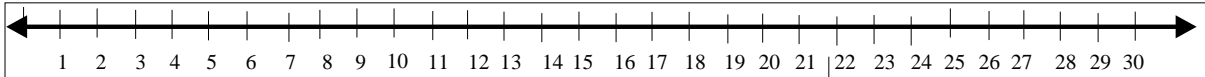







Obair gharbh

4

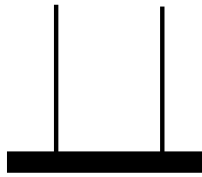
Obair gharbh

a $16 + 10 = \square$

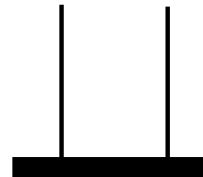
b $17 + 10 = \square$

c $21 + 5 = \square$

d Taispeáin
an freagra
ar an abacas.
25
5
+20



e Taispeáin
an freagra
ar an abacas.
30
23
+10



f $(4 + 6) + 5 = \square + 5 = \square$

g $(1 + 9) + 4 = \square + 4 = \square$

h $(8 + 2) + 3 = \square + 3 = \square$

i $(6 + 4) + 5 = \square + 5 = \square$

j $(2 + 8) + 4 = \square + 4 = \square$

k $(7 + 3) + 3 = \square + 3 = \square$

l $(5 + 5) + 5 = \square + 5 = \square$

5

1	2	3	4	5	6	7	8	9	10
11	12	13	14	15	16	17	18	19	20
21	22	23	24	25	26	27	28	29	30
31	32	33	34	35	36	37	38	39	40
41	42	43	44	45	46	47	48	49	50
51	52	53	54	55	56	57	58	59	60
61	62	63	64	65	66	67	68	69	70
71	72	73	74	75	76	77	78	79	80
81	82	83	84	85	86	87	88	89	90
91	92	93	94	95	96	97	98	99	100

Obair gharbh

a $16 - 5 =$

b $14 - 8 =$

c $24 - 8 =$

d $34 - 4 =$

e $44 - 5 =$

f $24 - 5 =$

g $65 - 3 =$

h $74 - 4 =$

i $53 - 5 =$

j $72 - 5 =$

6

Athghrúpáil.

a

$$\begin{array}{r} 15 \\ + 15 \\ \hline \end{array}$$

b

$$\begin{array}{r} 24 \\ + 18 \\ \hline \end{array}$$

c

$$\begin{array}{r} 35 \\ + 15 \\ \hline \end{array}$$

d

$$\begin{array}{r} 16 \\ 24 \\ + 25 \\ \hline \end{array}$$

e

$$\begin{array}{r} 15 \\ 13 \\ + 23 \\ \hline \end{array}$$

f

$$\begin{array}{r} 36 \\ 24 \\ + 32 \\ \hline \end{array}$$

g

$$\begin{array}{r} 24 \\ 24 \\ + 24 \\ \hline \end{array}$$

h

$$\begin{array}{r} 23 \\ 37 \\ + 25 \\ \hline \end{array}$$

i

$$\begin{array}{r} 31 \\ 28 \\ + 11 \\ \hline \end{array}$$

$$\text{j} \quad 28 + 36 = \square$$

$$\text{k} \quad 23 + 48 = \square$$

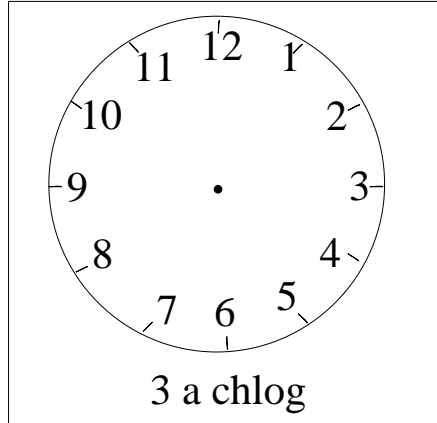
$$\text{l} \quad 29 + 18 = \square$$

Obair gharbh

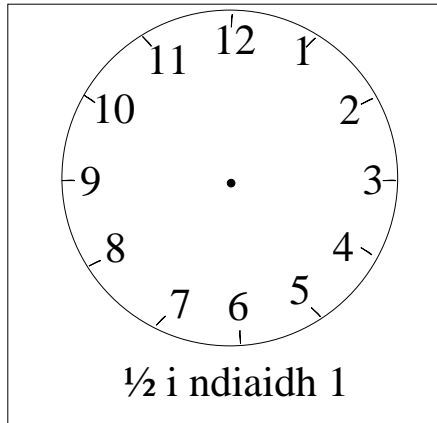
7

a

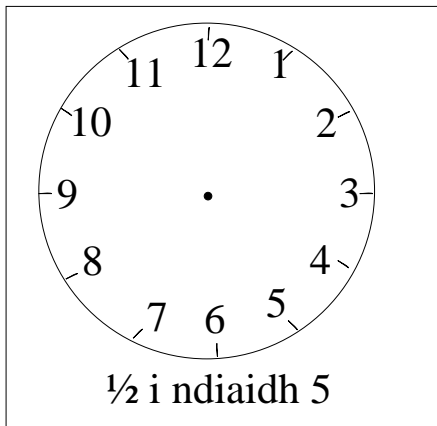
Taispeáin
an t-am
ar na cloig.



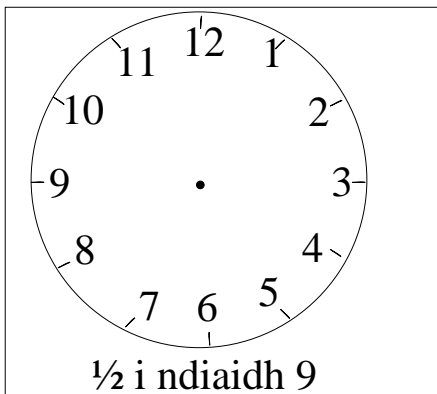
b



c



d




Obair gharbh

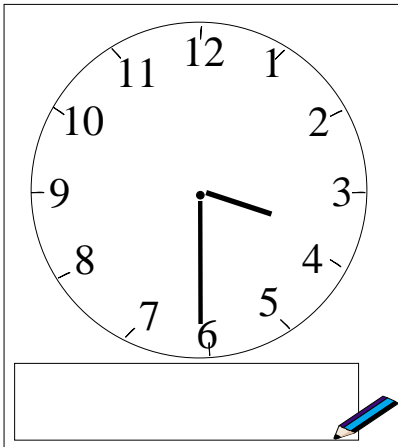
8

a

Scríobh síos
an t-am ceart.

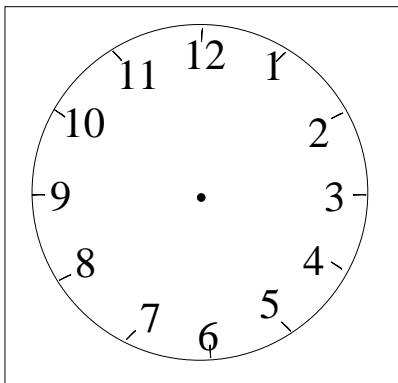


b



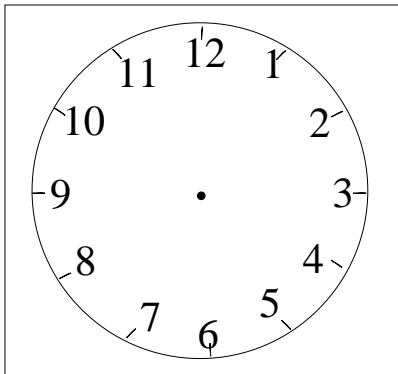
c

Uair an chloig
níos déanaí
ná 12 a chlog



d

Uair an chloig
níos luaithe
ná 4 a chlog.



Obair gharbh

9

Scríobh síos laethanta na seachtaine.

Obair gharbh

a

Is é _____ an chéad lá den tseachtain (1ú).

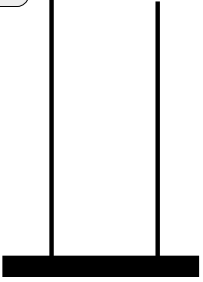

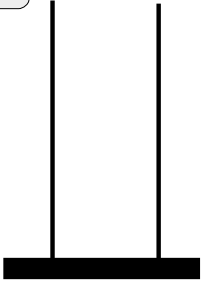

b

Is é _____ an dara lá den tseachtain (2ú).

c


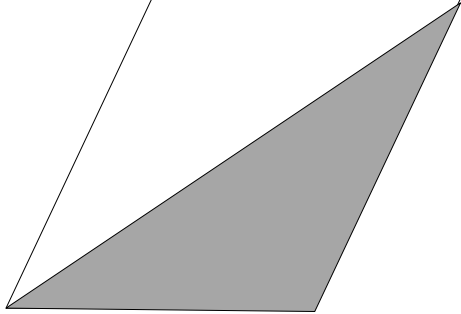
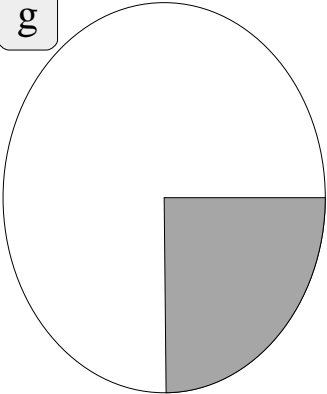
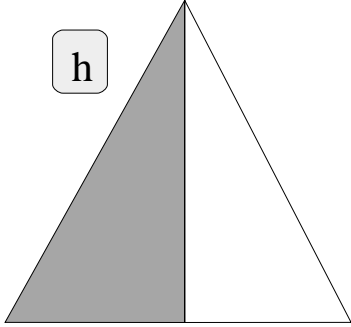
Is í _____ an séú lá den tseachtain (6ú).

10

<p>a</p> $\begin{array}{r} 23 \\ 5 \\ +14 \\ \hline \end{array}$ 	<p>b</p> $\begin{array}{r} 16 \\ 32 \\ +10 \\ \hline \end{array}$ 
<p>c</p> $\begin{array}{r} 22 \\ 16 \\ +20 \\ \hline \end{array}$ 	<p>d</p> $\begin{array}{r} 10 \\ 23 \\ +33 \\ \hline \end{array}$ 

Obair gharbh

Cén codán de gach cruth thíos atá scáthaithe?

<p>e</p> 	<p>f</p> 
<p>g</p> 	<p>h</p> 


11

Cén cruth?

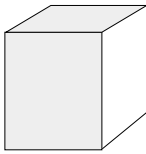
Cuir ✓ sa bhosca ceart.

Obair gharbh


a

sorcóir ciúb sféar ciúbóideach pirimid


b

sorcóir ciúb sféar ciúbóideach pirimid

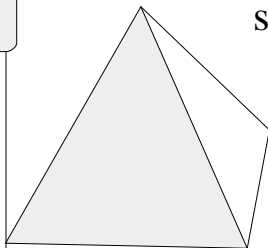
c

sorcóir ciúb sféar ciúbóideach pirimid

d

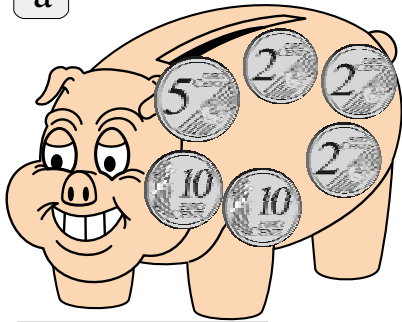
sorcóir ciúb sféar ciúbóideach pirimid

e

sorcóir ciúb sféar ciúbóideach pirimid

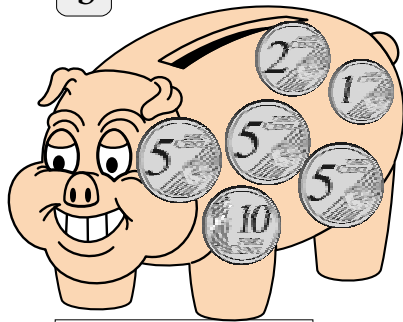
12

a



cent 

b



cent 

Obair gharbh

c Cén aois thú?



d Cén bhliain a rugadh thú?




e Cén airde atá ionat?



f Cén meáchan atá ionat?



g Cén mhí ina bhfuil do bhreithlá?



h Is é ___ an duine is airde.

i




ii



iii



iv



1

Scríobh > nó < nó = sna boscaí.

a 36 63

b 42 24

c 16 61

d 10 - 1 = 9

20 - 1 = 19

30 - 1 = 29

- 1 =

- 1 =

- 1 =

- 1 =

- 1 =

- 1 =

e 10 - 6 = 4

20 - 6 = 14

30 - 6 = 24

- 6 =

- 6 =

- 6 =

- 6 =

- 6 =

- 6 =

Obair gharbh

f Athghrúpáil

Is ionann 36 agus ____ dheich ____ aonad

nó

____ dheich ____ aonad

2

a Cén uimhir atá 2 níos lú ná 17? 

b Cén uimhir atá 5 níos mó ná 22? 

c Cén uimhir atá 7 níos mó ná 23? 

d Cén uimhir atá 4 níos lú ná 37? 


e Cén uimhir atá 6 níos mó ná 31? 

f Cén uimhir atá 8 níos mó ná 16? 


g Cén uimhir atá 6 níos lú ná 28? 

Scríobh iad seo ina bhfigiúirí.

h 3 dheich agus 4 aonad 

i 2 dheich agus 8 n-aonad 

j 5 dheich agus 5 aonad 

k 7 ndeich agus 1 aonad amháin 

l 1 deich amháin agus 7 n-aonad 

Obair gharbh

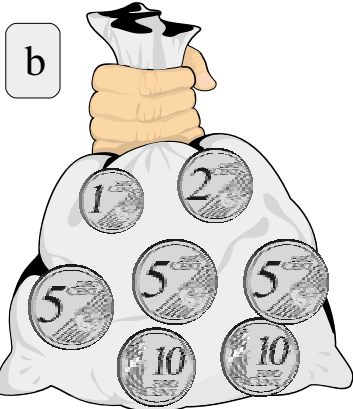

3

a Scríobh 4 uimhirabairt.

16	
10	6

Obair gharbh

Cé mhéad airgid?


 cent

 cent

d Scríobh na praghsanna seo in ord a méide. Tosaigh leis an gceann is lú.

€4.28 €2.84

€8.42 €3.47


84 cent €1.07

- 1
- 2
- 3
- 4
- 5
- 6


4

Cuir ✓ leis na cruthanna siméadracha.

A




B



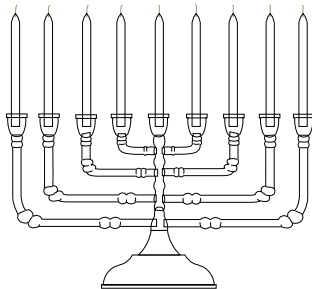
C




D



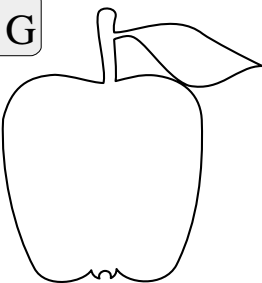
E




F



G



H





Obair gharbh


5

Cuir ✓ leis na rudaí atá níos troime ná 1 kg.

a

i 


ii 


iii 


Obair gharbh

b

Cuir ✓ leis na rudaí a ghlacann níos mó ná 1 lítear amháin.

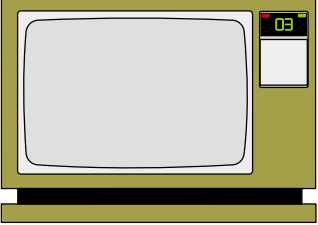
i 

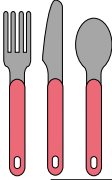
ii 

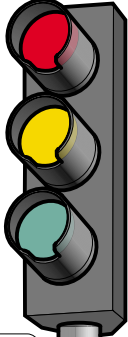
iii 

c

Cuir ✓ leis na rudaí atá níos airde ná 1 mhéadar amháin.

i 

ii 

iii 

6

a

Bhí 12 úll ag Deirdre. Thug sí 4 cinn dá cara.
Cé mhéad úll atá fágtha ag Deirdre?

b

Bhí 25 cent ag Síle. Chaith sí 6 cent.
Cé mhéad airgid a bhí fágtha ag Síle?

 cent 

c

Tá 5 chnó capaill ag Seosamh. Tá 8 gcnó
capaill ag Séamas. Tá 4 chnó capaill ag Pól.
Cé mhéad cnó capaill ar fad atá acu?

d

Tá 25 cent ag Síle. Tá 16 cent ag Séamas.
Cé mhéad airgid ar fad atá acu?

 cent 


e

Cheannaigh Liam úll ar 20 cent agus piorra ar
18 cent. Cén tsóinseáil a fuair sé as 50 cent?

 cent 

f

Cheannaigh Síle 2 (dhá) líreacán ar 12 cent
an ceann agus piorra ar 18 cent.
Cén tsóinseáil a fuair sí as 50 cent?


 cent 
Obair gharbh

7

10 mbeach, 6 bheach agus 12 bheach.
Cé mhéad beach ar fad?


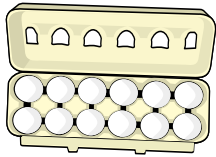
a





Obair gharbh


b



Cé mhéad ubh ar fad?



c



Tá 19 mborróg sa bhabhla. Má
itheann Síle 2 bhorróg agus
Seosamh 3 cinn cé mhéad
borróg a bheidh fágtha?



d

Cé mhéad deich sna huimhreacha seo?

i

$46 = \square \text{ deich}$

ii

$55 = \square \text{ deich}$

iii

$32 = \square \text{ deich}$

iv

$38 = \square \text{ deich}$

e

i



ii



iii



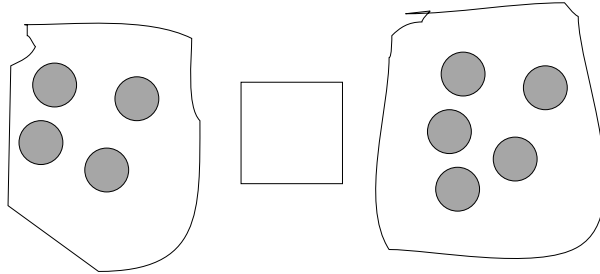
Cuir ✓ leis an bpeann luaidhe is faide.

1


Scríobh $<$, $>$, nó $=$ sna boscaí.

Obair gharbh

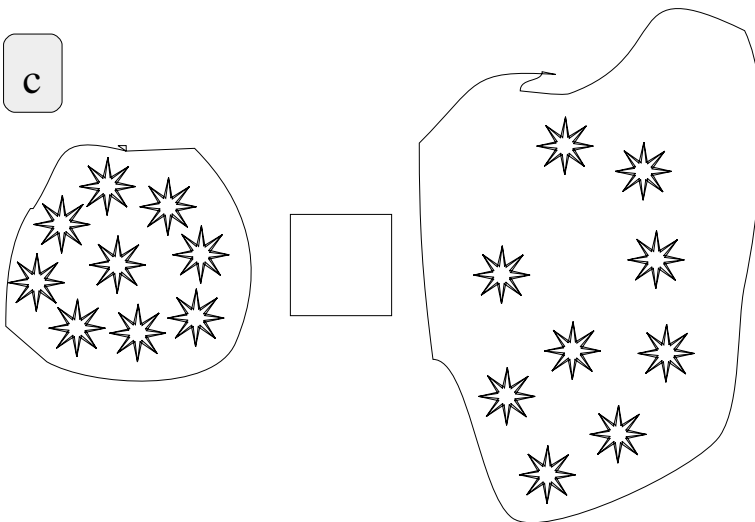
a



b



c



2


a Cé mhéad banana?

Obair gharbh

b Scríobh <, >, nó = sna boscaí.

5 416 1918 017 1812 1110 90 319 1912 1320 1814 1217 19

c

i Cé acu feithicil atá sa chéad áit? ii Cé acu feithicil atá san áit dheireanach? iii Cé acu feithicil atá sa lár? iv Cé acu feithicil atá sa dara háit? v Cén áit a bhfuil an trucail?

3

a

$$4 + 5 + 7 = \square$$

Obair gharbh

b

$$\begin{array}{r} 18 \text{ cent} \\ + 16 \text{ cent} \\ \hline \end{array} \quad \begin{array}{r} 62 \text{ cent} \\ - 35 \text{ cent} \\ \hline \end{array} \quad \begin{array}{r} 51 \text{ cent} \\ - 49 \text{ cent} \\ \hline \end{array}$$

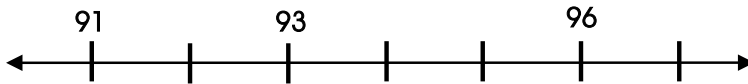
c

Cé mhéad airgid?

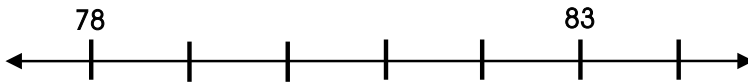
 cent


Críochnaigh na huimhirlíní seo.

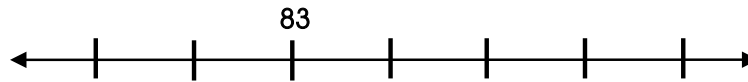
d



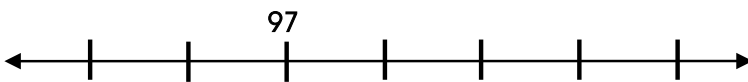
e



f



g



4

1	2								10
					a				
		b							
		c							
					d				
	e						f		
									99

Obair gharbh

Scríobh na freagraí sna boscaí.

a $b + 3 \rightarrow \rightarrow$

b $a + 4 \rightarrow \rightarrow \rightarrow$

c $d + 3$

d $f - 2$

e $f - 5$

f $f - 7$

5

a

27 →



Comhair ar aghaidh cúig chéim.

27 →

b

58



Comhair ar aghaidh ceithre chéim.

58 →

c

67



Comhair ar aghaidh sé chéim.

67 →

d

79



Comhair ar aghaidh cúig chéim.

79 →

Obair gharbh

1

1	2	3	4	5	6	7	8	9	10
11	12	13	14	15	16	17	18	19	20
21	22	23	24	25	26	27	28	29	30
31	32	33	34	35	36	37	38	39	40
41	42	43	44	45	46	47	48	49	50
51	52	53	54	55	56	57	58	59	60
61	62	63	64	65	66	67	68	69	70
71	72	73	74	75	76	77	78	79	80
81	82	83	84	85	86	87	88	89	90
91	92	93	94	95	96	97	98	99	100

Obair gharbh

a Dathaigh gach 4ú huimhir.

b Cad é an chéad uimhir eile?

4, ____

12, ____

44, ____

16, ____

2

Scríobh na figiúirí cearta sa bhosca faoi gach abacas.

Obair gharbh

a

C D A	C D A	C D A
<input style="width: 100px; height: 20px;" type="text"/>	<input style="width: 100px; height: 20px;" type="text"/>	<input style="width: 100px; height: 20px;" type="text"/>

b

Cuir an méid ceart coirníní ar gach abacas.

C D A	C D A	C D A
<input style="width: 100px; height: 20px;" type="text" value="1 3 0"/>	<input style="width: 100px; height: 20px;" type="text" value="1 4 6"/>	<input style="width: 100px; height: 20px;" type="text" value="1 6 1"/>

c

$$\begin{array}{r} 43 \\ + 6 \\ \hline \end{array}$$

d

$$\begin{array}{r} 45 \\ 4 \\ + 3 \\ \hline \end{array}$$

e

$$36 + 8 = \square$$

3

a

$$\begin{array}{r} 28 \\ - 8 \\ \hline \end{array}$$

$$\begin{array}{r} 37 \\ - 6 \\ \hline \end{array}$$

$$\begin{array}{r} 43 \\ - 7 \\ \hline \end{array}$$

$$\begin{array}{r} 56 \\ - 5 \\ \hline \end{array}$$

Obair gharbh

Cuir na huimhreacha in ord a méide.
Tosaigh leis an gceann is lú.

b 93, 39, 46, 64, 205, 502

c 49, 94, 37, 73, 102, 99

d

$$\begin{array}{r} 56 \\ + 7 \\ \hline \end{array}$$

e

$$\begin{array}{r} 48 \\ + 8 \\ \hline \end{array}$$

f

$24 + 41 = \square$

g

$35 + 63 = \square$

4

a

$$\begin{array}{r} 28 \\ - 19 \\ \hline \end{array}$$

$$\begin{array}{r} 37 \\ - 26 \\ \hline \end{array}$$

$$\begin{array}{r} 43 \\ - 37 \\ \hline \end{array}$$

$$\begin{array}{r} 56 \\ - 35 \\ \hline \end{array}$$

Obair gharbh

b

$$\begin{array}{r} 42 \\ - 8 \\ \hline \end{array}$$

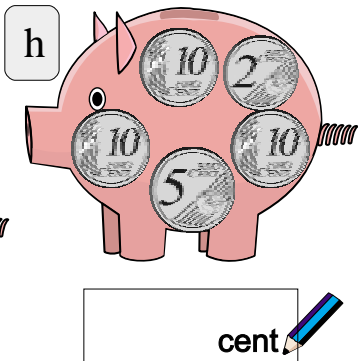
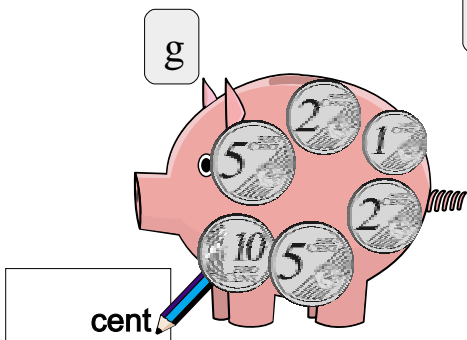
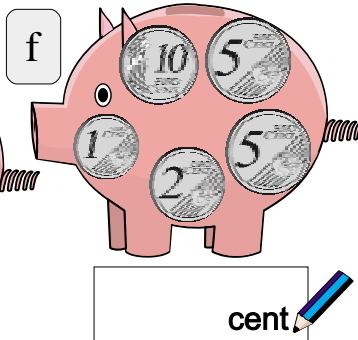

$$\begin{array}{r} 45 \\ - 6 \\ \hline \end{array}$$

$$\begin{array}{r} 78 \\ - 7 \\ \hline \end{array}$$

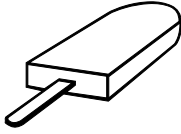
$$\begin{array}{r} 33 \\ - 5 \\ \hline \end{array}$$

c $89 - 23 = \square$

d $67 - 33 = \square$



5

22cent
reoiteog

27cent




iógart

46cent



uachtar reoite

24cent



milseáin



37cent

80cent



burgar

75cent



creathán bainne

26cent



piorra

Obair gharbh

Scríobh na freagraí sna boscaí.

Ceannaigh

Costas

a burgar agus creathán bainne

b reoiteog agus milseáin

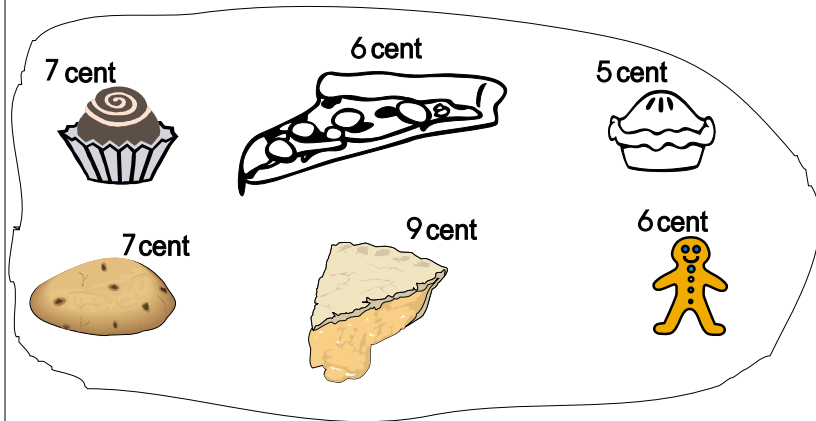
c iógart agus piorra

d bainne agus uachtar reoite

e iógart agus burgar

6


Obair gharbh





Tá 50 cent agat.




Ceannaigh

Sóinseáil

a  agus  cent

b  agus  cent

c  agus  cent

d  agus  agus  cent

7

Obair gharbh

a

$$€0.35 + €0.38 =$$

€

b

$$€0.57 + €0.24 =$$

c

$$€0.40 + €0.49 =$$

d

$$€0.45 + €0.46 =$$

e

$$€0.22 + €0.76 =$$

f

$$€0.57 + €0.33 =$$

g

$$€0.28 + €0.27 =$$

h

$$€0.21 + €0.56 =$$

1

a

$$3 + 3 + 3 + 3 = 12$$

$$4 \times \square = 12$$

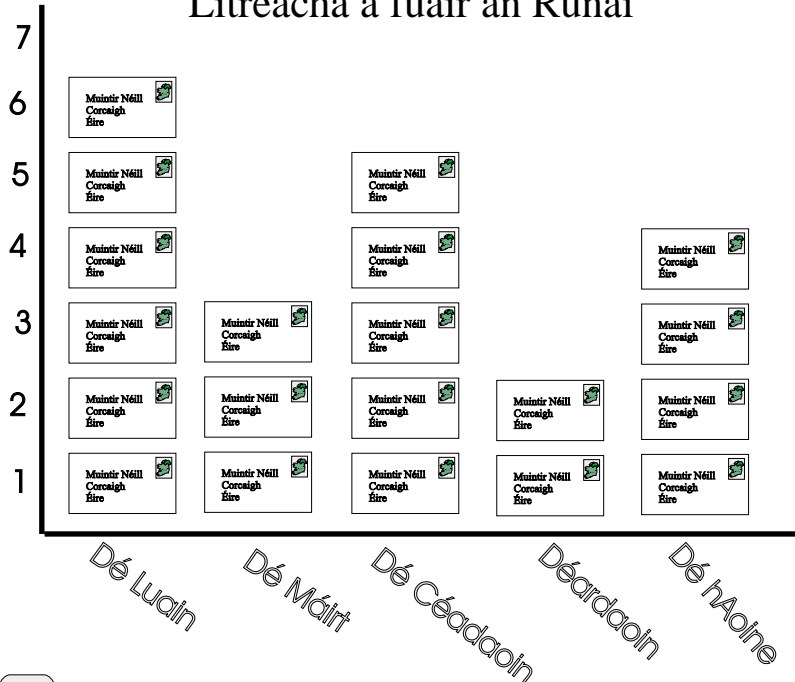
b

$$5 + 5 + 5 = 15$$

$$3 \times \square = 15$$

Obair gharbh

Litreacha a fuair an Rúnaí



c

Cén lá a fuair an rúnaí an méid is mó litreacha?

d

Cé mhéad litir a fuair an rúnaí Dé Céadaoin?

e

Cé mhéad litir sa bhreis a tháinig Dé Luain seachas ar an Déardaoin?

f

Cé mhéad litir ar fad a fuair an rúnaí?

2

a $€0.40 - €0.37 = €$ _____

b $€0.30 - €0.25 =$ _____

c $€0.65 - €0.35 =$ _____

d $€0.70 - €0.40 =$ _____

e $€0.10 - €0.09 =$ _____

f $€0.25 - €0.20 =$ _____

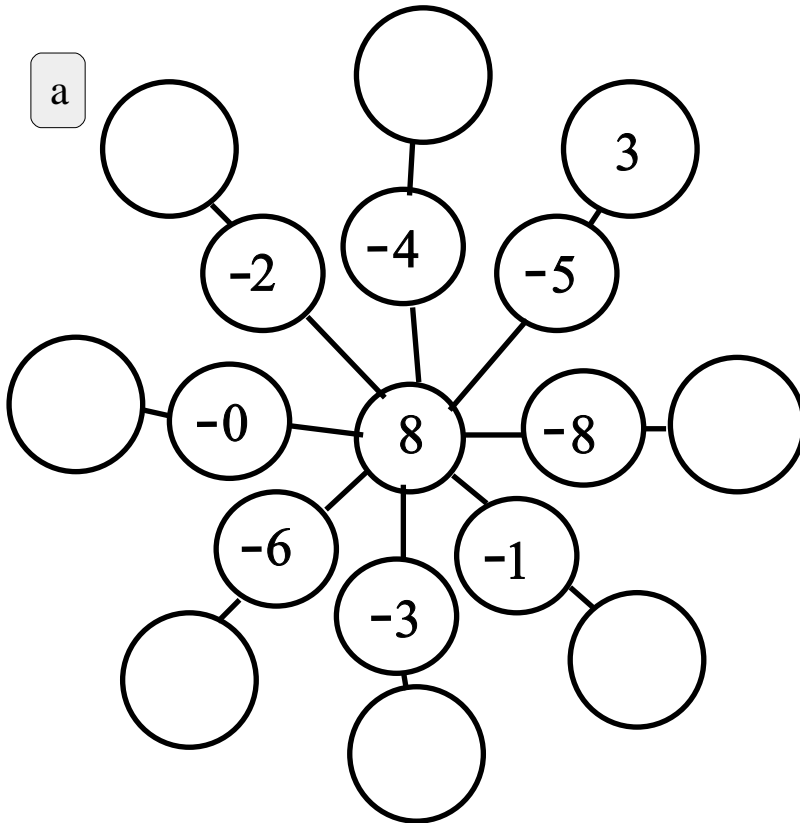
g $€3.00 - 85 \text{ cent} =$ _____

h Bhí €1 agam.
Chaith mé 40 cent.
Tá _____ fágtha agam.

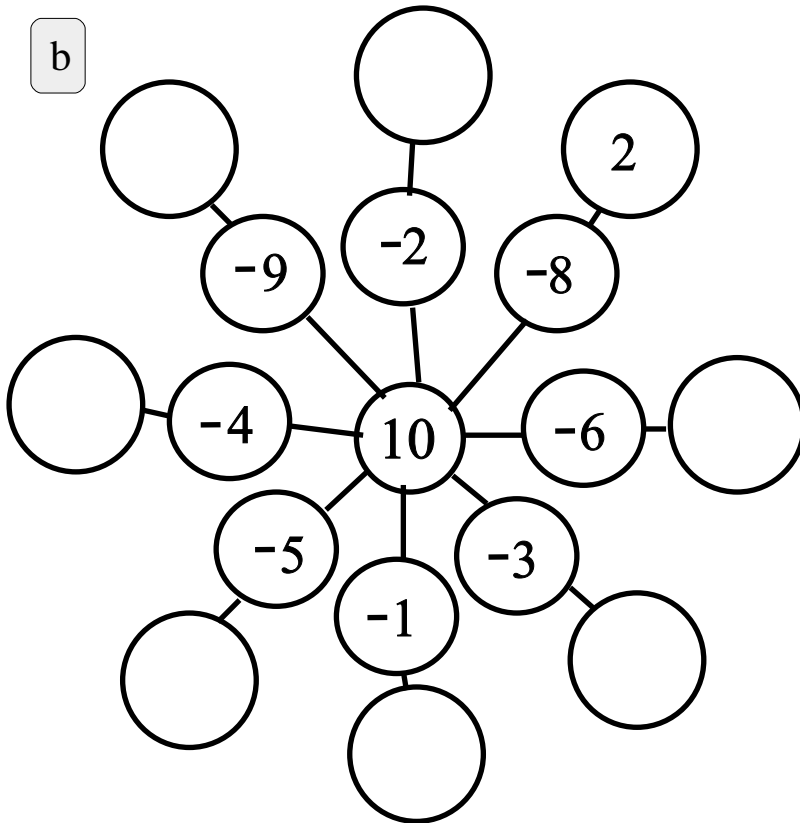
Obair gharbh

3

a



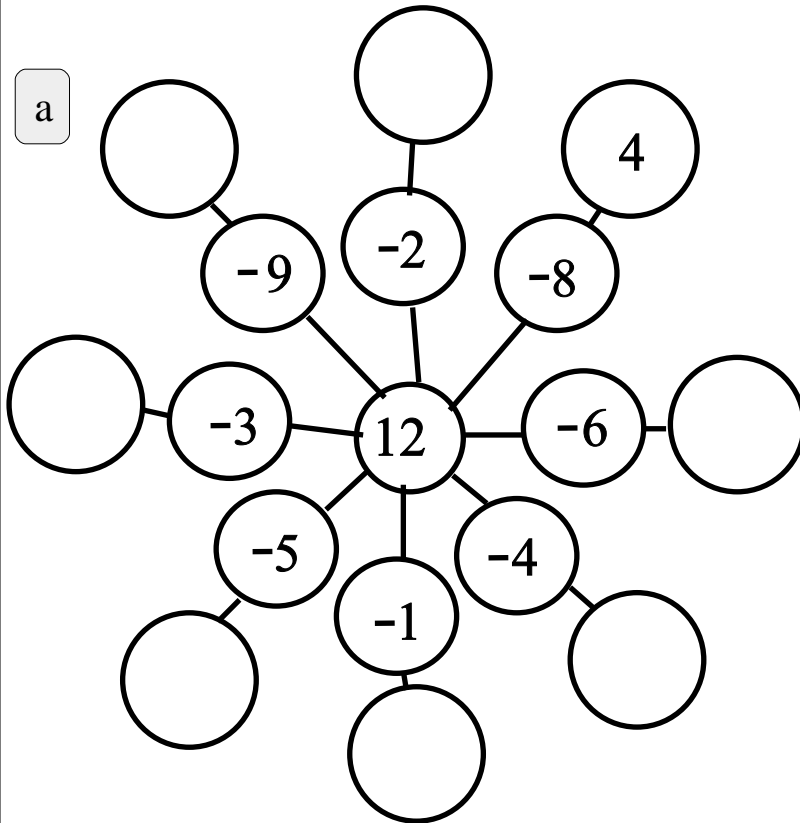
b



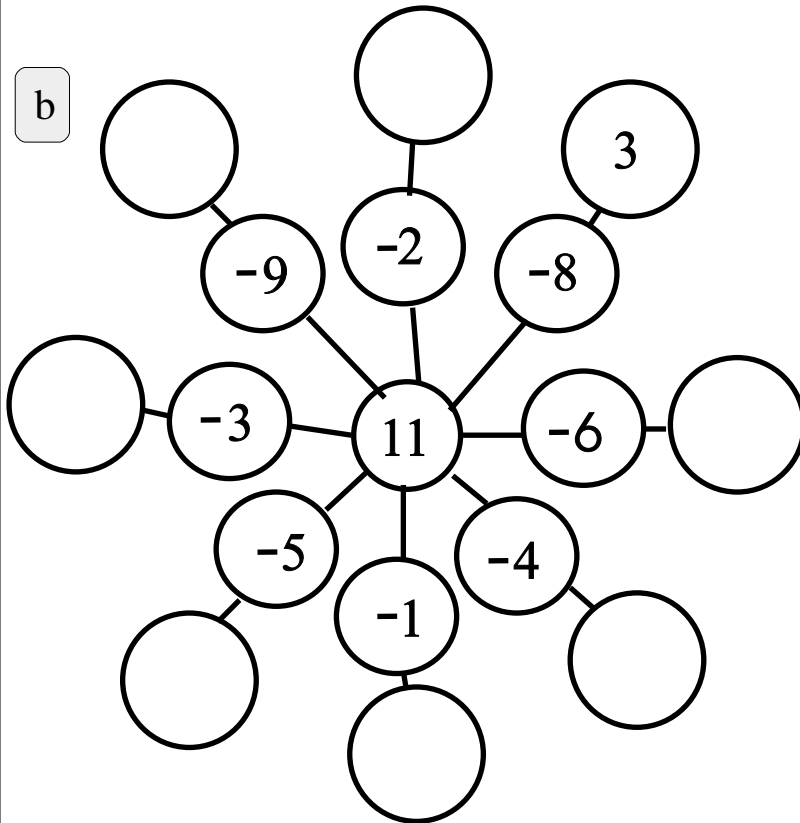
Obair gharbh

4

a



b



Obair gharbh

5

a

Téann Eoin ar scoil ar an mbus gach maidin agus tagann sé abhaile ar an mbus gach tráthnóna, 5 lá sa tseachtain. Cé mhéad turas a dhéanann sé gach seachtain? Íocann sé táille €5 gach seachtain. Cé mhéad a chosnaíonn gach turas?

Obair gharbh

b

Suimigh:
ceithre chéad seacht déag,
trí chéad agus a dó,
seacht déag.

c

Tá costas €2 ar thicéad pictiúrlainne do pháiste. Cén costas a bheadh ar thicéid do 5 (chúigear) páistí?

d

Tá 48 mirlín ag Bríd. Tá dath dearg ar $\frac{1}{2}$ díobh. Cé mhéad mirlín dearg atá aici?

e

Bhí €36 coigilte ag Síle nuair a tháinig an Nollaig. Cé mhéad airgid a choigil sí gach seachtain má bhí sí ag coigilt ar feadh 9 seachtaine roimhe sin?

Freagraí

Leibhéal 1

Caibidil 1

Lch 1-3

1. 5 2. 4, 7 3. 6, 8 4. 9, 9

Lch 1-4

1. 9 2. 4, 7 3. 8, 7 4. 8, 9

Lch 1-5

1. 7 2. 7 3. 9 4. 7

Lch 1-6

1. 6 2. 6 3. 6 4. 7 5. 5 6. 9

Lch 1-7

1. 7, 5, 4, 7, 8, 6, 8

2. 9, 8, 9, 6, 9, 9, 6

3. (5 + 2, 7), (2 + 6, 8), (3 + 1, 4), (2 + 3, 5),
(4 + 5, 9), (1 + 2, 3)

4. (4 + 3, 7), (3 + 6, 9), (7 + 1, 8), (6 + 2, 8),
(3 + 5, 8), (2 + 2, 4)

Lch 1-8

1. 11 2. 6 3. 5 4. 7

Lch 1-9

1. 3 2. 2 3. 4 4. 3

Lch 1-10

1. 5, 8, 7, 10, 8 2. 5, 9 3. 8, 8, 8, 8 4. 8, 9, 8, 9

Lch 1-11

1. 5, 9, 5 2. 6, 3, 5 3. 3, 5, 9

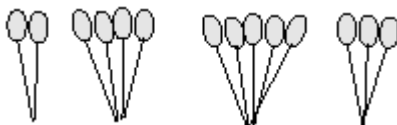
Lch 1-12

1. 7, 8, 7 2. 6, 6, 6 3. 5, 5, 8

Lch 1-13

1. 9, 9, 7, 9 2. 7, 8, 9, 8 3. 7, 9, 5, 6 4. 6, 8, 4, 7

Lch 1-15



Lch 1-16

1. $5 > 3$ 2. $9 > 6$

Lch 1-17

1. $4 > 3$ 2. $8 > 4$ 3. $7 > 6$

Lch 1-18

1. 5 2. 6 3. 10 4. 8 5. 9 6. 7

Lch 1-19

1. 4 2. 4

Lch 1-20

1. $2 < 4$ 2. $3 < 5$ 3. $5 < 6$ 4. $2 < 3$

Lch 1-21

Samplaí de na freagraí cearta:

1. 5, 3, 4, 6, 7, 8 2. 7, 9, 10, 11, 5, 4, 2

Lch 1-22

1. $>$ 2. $<$ 3. $>$ 4. $>$ 5. $<$ 6. $>$ 7. $>$

Lch 1-23

1. 5, 8, 8, 8, 10, 9, 7, 6, 9, 8

2. 2, 7, 3, 6, 1, 9, 4, 8, 5, 10

Lch 1-24

1. Liam, $7 > 6$ 2. Bríd, $6 > 5$

3. Máire, $3 < 4$ 4. Seán, $5 < 6$

Caibidil 2

Lch 2-1

1. 12 2. 4

Lch 2-2

1. 8, 14 2. 12, 21 3. 16, 28 4. 20, 35 5. 40, 70

Lch 2-3

1. 5 2. 7 3. 7 4. 10 5. 8

Lch 2-4

1. 10 2. 7 3. 10 4. 10

Lch 2-5

1. 9 2. 10 3. 5 4. 10

Lch 2-6

1. 3 2. 6 3. 9 4. 10 5. 9

Lch 2-7

1. 8 2. 3 3. 7 4. 3 5. 1

Lch 2-8

1. $4 + 1, 3 + 2, 1 + 4, 5 + 0$


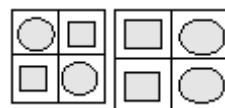
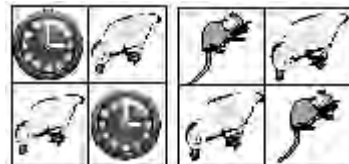
Lch 2-9

1. 8, 7, 11, 10, 6 2. 10, 8, 8, 9, 8 3. 9, 9, 10, 10, 9

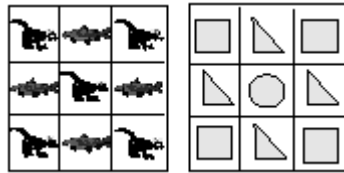
Lch 2-10

1. 9 2. 12 3. 6

Lch 2-11



Lch 2-12



Lch 2-13

3. ○ ○ □ □ 4. ○ ○ △ 5. △ ○ △
6. ○ ○ 7. △ △

Lch 2-14

1. ○ □ △ 2. □ □ □ 3. □ △ □ 4. ○ ○ ○
5. △ ○ △ 6. □ □ □ 7. ○ □

Lch 2-15

1. 3 2. 4 3. 2 4. 2

Lch 2-16

1. 2 2. 8 3. 2 4. 2

Lch 2-18

1. 1, 2, 12 2. 1, 6, 16 3. 1, 9, 19

Lch 2-19

1. 1, 1, 11 2. 1, 7, 17 3. 2, 0, 20

Lch 2-20

1. 1, 3, 13 2. 1, 5, 15 3. 1, 8, 18

Lch 2-21

1. 7 2. 1, 2 3. 1, 4

Lch 2-22

1. 2, 6 2. 2, 4

Lch 2-23

1. 2, 0 2. 2, 2 3. 2, 9 4. 2, 7

Lch 2-25

1. 26, 27, 26, 26 2. 27, 31, 28, 28
3. 24, 28, 29, 28 4. 29, 29, 18, 29
5. 27, 28, 28, 27

Lch 2-26

1. (11, a haon déag), (18, a hocht déag),
(14, a ceathair déag), (13, a trí déag),
(12, a dó dhéag), (20, fiche), (16, a sé déag),
(17, a seacht déag), (19, a naoi déag),
(15, a cúig déag)
2. (3, 5), (7, 9), (4, 6), (6, 8), (8, 10), (5, 7)

Lch 2-28

1. (1d, 7a), (1d, 3a), (17 + 13 = 30)
2. (1d, 2a), (1d, 8a), (12 + 18 = 30)

Lch 2-29

1. (1d, 6a), (1d, 6a), (16 + 16 = 32)
2. (1d, 5a), (1d, 8a), (15 + 18 = 33)

Caibidil 3

Lch 3-1

1. 4 2. 1 3. 3 4. 16

Lch 3-2

- (0 + 2 + 2, 4), (5 + 2 + 1, 8), (4 + 1 + 1, 6),
(6 + 2 + 2, 10), (6 + 1 + 2, 9) (7 + 1 + 1, 9)

Mata Le Chéile: Leibhéal 1 & 2
Florence Gavin

Lch 3-3

1. 25 2. 26 3. 29 4. 24 5. 27
6. 28 7. 19 8. 27 9. 25

Lch 3-4

2. (3 + 5 = 8) (5 + 3 + 8) (8 - 3 = 5) (8 - 5 = 3)
3. (1 + 5 = 6) (5 + 1 = 6) (6 - 1 = 5) (6 - 5 = 1)
4. (7 + 2 = 9) (2 + 7 = 9) (9 - 2 = 7) (9 - 7 = 2)
5. (6 + 4 = 10) (4 + 6 = 10) (10 - 6 = 4) (10 - 4 = 6)
6. (2 + 3 = 5) (3 + 2 = 5) (5 - 2 = 3) (5 - 3 = 2)

Lch 3-5

- 11, 12, 12, 12, 10, 12, 10, 13

Lch 3-6

1. 7 cent 2. 17 cent 3. 13 cent 4. 8 cent
5. 16 cent 6. 7 cent 7. 19 cent

Lch 3-7

1. 4 cent, 11 cent, 8 cent, 10 cent
2. 10 cent, 15 cent, 16 cent, 20 cent
3. 45 cent 4. 30 cent 5. 20 cent
6. 45 cent 7. 25 cent 8. 60 cent

Lch 3-8

1. 12 cent 2. 4 cent 3. 13 cent

Lch 3-9

1. ciorcal 2. triantán 3. cearnóg 4. dronuilleog

Lch 3-10

1. sféar 2. ciúb 3. ciúbóideach
4. sorcóir 5. pirimid 6. cón

Lch 3-11

Tic le 4 agus 5

Lch 3-12

1. 12, 1 2. 10, 11 3. 7, 8 4. 3, 9 5. 4, 5

Lch 3-13

1. 12, 1, 8 2. 2, 5, 10 3. 6, 8, 11
4. 3, 9, 12 5. 4, 7, 10

Lch 3-14

1. 10 2. 13 3. 12 4. 16 5. 11
6. 16 7. 20 8. 16 9. 13

Lch 3-16

1. 50, 60, 70, 80, 90

Lch 3-17

1. 50 2. 52 3. 60 4. 80 5. 90

Lch 3-19

1. 5 cent 2. 2 cent 3. 9 cent 4. 13 cent 5. 9 cent

Lch 3-20

1. 10, 9, 8, 7, 6, 5, 4, 3, 2, 1
2. 20, 19, 18, 17, 16, 15, 14, 13, 12, 11,
10, 9, 8, 7, 6, 5, 4, 3, 2, 1
3. 10, 20, 30, 40, 50, 60, 70, 80, 90, 100

Lch 3-21

1. 10 2. 3 3. 10 4. 8

Lch 3-22

1. 30 2. Dé Domhnaigh 3. Dé Céadaoin
4. Dé Domhnaigh 5. Dé Máirt 6. 4 7. 5

Lch 3-23

1. 26, 27, 28, 29, 30, 31, 32, 33, 34, 35
2. 34, 35, 36, 37, 38, 39, 40, 41, 42, 43
3. 30, 31, 32, 33, 34, 35, 36, 37, 38, 39, 40
4. 35, 34, 33, 32, 31, 30, 29, 28, 27

5. 32, 31, 30, 29, 28, 27, 26, 25, 24
 6. 26, 25, 24, 23, 22, 21, 20, 19, 18, 17
 7. 28, 27, 26, 25, 24, 23, 22, 21, 20, 19, 18
 8. 32, 31, 30, 29, 28, 27, 26, 25, 24, 23, 22

Lch 3-24

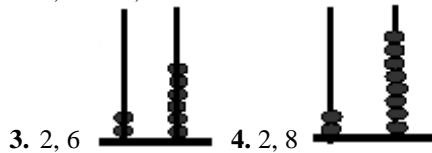
2. 16, 21 3. 27, 32 4. 29, 34 5. 76, 81
 6. 54, 59 7. 39, 46 8. 94, 98 9. 84, 93

Lch 3-25

1. 15, 24 2. 38, 45 3. 22, 27
 4. 33, 40 5. 61, 65 6. 91, 100

Lch 3-26

1. 5, 7 2. 1, 3



Caibidil 4

Lch 4-1

(A) (30, tríocha), (40, daichead), (50, caoga),
 (60, seasca), (70, seachtó)

1. 47 2. 56 3. 35 4. 67 5. 27
 6. 49 7. 77 8. 40 9. 97

Lch 4-4

1. 14 cent 2. (10 cent, 5 cent, 2 cent)
 3. An ceathrú agus an séú cruth
 4. Dathaigh gach bonn cé is moite de 10 cent amháin
 5. 5 – agus an imlíne san áireamh
 6. 30

Lch 4-5

1. 34, 44, 54, 64 2. 37, 47, 57, 67

Lch 4-6

2. 6 3. 11 4. 1 5. 10

Lch 4-7

1. 27 2. 36

Lch 4-9

1. 16, 18, 18, 17, 16, 14 2. 28, 19, 37, 14, 14, 9
 3. 15 cent 4. 22 cent

Lch 4-10

1. 3 a chlog 2. leathuair tar éis 3 3. ceathrú chun 3
 4. 6 a chlog 5. 10 a chlog 6. ceathrú tar éis 2
 7. leathuair tar éis a 1 8. 3 a chlog 9. ceathrú chun 5
 10. 30 nóiméad nó leathuair an chloig
 11. 30 nóiméad nó leathuair an chloig
 12. uair an chloig
 13. trí cheathrú d'uair an chloig nó 45 nóiméad

Lch 4-11

1. (A) 0 (B) 1 (C) 5 (D) 1
 2. (A) 1 (B) 3 (C) 1 (D) 4

Lch 4-12

1. (A) 2 (B) 2 (C) 4 (D) 2
 2. (A) 1 (B) 3 (C) 4 (D) 3

Lch 4-13

1. (A) 4 (B) 3 (C) Deirdre
 2. (A) 5 (B) 2 (C) 4 (D) snámh

Lch 4-14

1. $\frac{1}{4}$, $\frac{1}{2}$, $\frac{1}{2}$ 2. $\frac{1}{4}$, $\frac{1}{2}$, $\frac{1}{2}$ 3. $\frac{1}{2}$, $\frac{1}{2}$, $\frac{1}{2}$ 4. $\frac{1}{4}$, $\frac{1}{2}$, $\frac{1}{2}$

Lch 4-15

1. 14, 20, 10, 17, 17, 24, 35
 2. 31, 19, 35, 36, 46, 50, 20
 3. Dathaigh A agus F 4. Dathaigh B agus E 5. 9 cent

Lch 4-16

1. B 2. C 3. E 4. H

Lch 4-17

H, K, ar cóimheáchan, O

Lch 4-18

1. 10 2. 22 3. 19

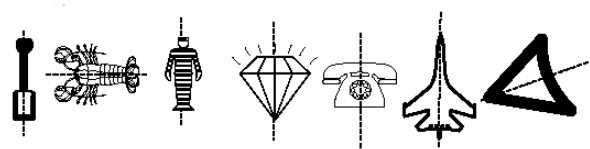
Lch 4-19

1. 9 cent, 10 cent, 10 cent, 10 cent, 12 cent, 10 cent
 2. 9 cent, 8 cent, 10 cent, 9 cent, 1 cent, 9 cent
 3. 9 cent, 9 cent, 7 cent, 7 cent, 3 cent, 2 cent

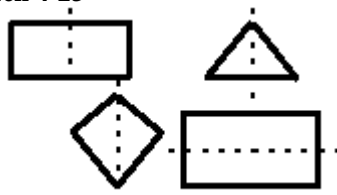
Lch 4-20

1. 17, 7, 8, 15, 15, 14, 10
 2. 9, 10, 15, 15, 10, 11, 9
 3. 41 4. 66 5. 99

Lch 4-22



Lch 4-23



Lch 4-24

1. Tá 2. Tá 3. Níl 4. < 5. > 7. >

Lch 4-25

1. níos giorra 2. níos faide 3. níos giorra
 4. níos giorra 5. níos faide 6. níos faide
 7. níos faide

Lch 4-26

1. 1ú, 2ú, 3ú, 4ú 2. Liam
 3. 7 cent, 8 cent, 3 cent, 10 cent, 1 cent, 10 cent
 4. 18 cent, 14 cent, 12 cent, 15 cent, 19 cent, 19 cent

Caibidil 5

Lch 5-1

1. 50, 70, 80, 50, 60, 90 2. 90, 80, 90, 90, 80, 90
 3. 24 cent 4. 24 cent

Lch 5-2

Leacht; Leacht; Leacht

Lch 5-3

1. 13, 18, 16, 19, 19 2. 19, 20, 18, 22, 11

Lch 5-4

1. Tá 2. Níl

Lch 5-5

1. 6 2. 3 3. 4, ½ 4. 4

Lch 5-6

1. 12, 12, 19, 19, 16, 19 2. 15, 22, 21, 23, 24, 17

3. 1ú: Seosamh, 2ú: Séamas, 3ú: Pól, 4ú: Tadhg

Lch 5-7

1. 2, 1, 7, 3, 2 2. 17, 22, 25, 26, 30

3. (2, 12), (49, 59), (79, 89), (82, 92), (24, 34),
(36, 46), (65, 75)

Lch 5-8

1. 4, 4, 4, 2, 5, 3, 5 2. 4, 5, 6, 4, 6, 1, 3

3. 23 4. 9 5. 11 6. 14

Leibhéal 2

Caibidil 6

Lch 6-1

2. $6 < 7$ 3. $5 < 7$ 4. $6 = 6$ 5. $9 = 9$

6. $3 > 1$ 7. $6 > 4$ 8. $4 = 4$

Lch 6-2

1. 5, 5, 8, 6, 9, 7, 4, 1 2. 2, 3, 6, 4, 2

3. 3, 1, 6, 8, 1 4. 4, 3, 1, 6, 2

5. 6 6. 6 7. 9 8. 0

Lch 6-3

1. 5 2. 9 3. 9 4. 9 5. 9

6. (a) > (b) < (c) < (d) = (e) > (f) >
(g) < (h) < (i) > (j) > (k) < (l) <

Lch 6-4

1. 9 2. 8 3. 9 4. 7 5. 6

6. (a) 11 (b) 14 (c) 12 (d) 13 (e) 15

7. (a) 10 (b) 14 (c) 10 (d) 13 (e) 11

Lch 6-6

1. carr 2. leoraí 3. bus 4. veain 5. bus 6. 4ú

7. 19, 17, 18, 19 8. 29, 29, 28, 28 9. 49, 46, 58, 39

Lch 6-7

1. 15 2. 29 3. 35 4. 92 5. 15 cent 6. 21 cent

7. 10 8. 30 9. 25

Lch 6-8

1. (a) 15 (b) 15 (c) 18 (d) 18

(e) 21 (f) 17 (g) 23 (h) 13

2. (7 + 8 + 3, 18); (6 + 8 + 2, 16); (3 + 8 + 4, 15);
(2 + 7 + 3, 12); (8 + 4 + 5, 17)

3. 59

Lch 6-9

1. 16 2. 17 3. 17 4. 36

Lch 6-10

1. 29, 28, 27, 13 2. 37, 39, 44, 20

3. 23 cent, 28 cent, 19 cent

4. (a) 6 cent (b) 20 cent (c) 14 cent (d) 32 cent
(e) 13 cent (f) 15 cent

5. 78 cent, 77 cent, 71 cent, 34 cent, 87 cent

6. 98 cent, 72 cent, 90 cent, 88 cent, 55 cent

Lch 6-11

1. 61 cent 2. 40 cent 3. 65 cent

4. (a) Tadhg (b) Siobhán (c) 21 5. 83, 91, 51, 83, 56

Lch 6-12

1. (a) 7 (b) 39 (c) 20 (d) 51 (e) 33 (f) 37

2. 6, 6 3. 24, 24 4. 20, 20

Lch 6-13

1. 33, 36, 37 2. 49, 50, 52, 53, 54

3. 79, 80, 81, 82, 83 4. 52, 53, 55, 56, 57

5. 82, 84, 85, 87 6. 96, 98, 99, 101

Lch 6-14

1. 30, 40, 50, 60, 70, 80, 90, 100

2. 31, 41, 51, 61, 71, 81, 91

3. 30, 35, 40, 45, 50, 55, 60, 65, 70, 75, 80, 85, 90, 95,
100

4. 38, 48, 58, 68, 78, 88, 98

5. 33, 43, 53, 63, 73, 83, 93

Lch 6-15

2. 50 3. 81 4. 40 5. 59

Lch 6-16

2. 30 3. 64 4. 98

Lch 6-17

1. 100 2. 56 3. 32

Lch 6-18

1. 86 2. 51 3. 26 4. 68

Lch 6-19

1. 3, 7, 14, 15, 30, 31, 40, 59, 71, 77, 99, 100 2. 77

Lch 6-20

1. 30 2. 45 3. 61 4. 87 5. 91 6. 100

Lch 6-21

1. (a) 38 (b) 92 (c) 83 (d) 41 (e) 56

2. (a) 30 (b) 44 (c) 55 (d) 39 (e) 41

Lch 6-22

1. (a) 26 (b) 77 (c) 72 (d) 29 (e) 42

2. (a) 26 (b) 29 (c) 41 (d) 23 (e) 31

Lch 6-23

1. 50 2. 37 3. 90 4. 98 5. 95 6. 90

Lch 6-24

1. 2, 4, 6, 8, 10, 12, 14, 16, 18, 20, 22, 24, 26, 28, 30

Lch 6-25

1. 2, 4, 6, 8 2. 12, 14, 16 3. 18, 20

Lch 6-26

1. 3, 6, 9, 12, 15, 18, 21, 24, 27, 30, 33, 36

2. 3, 6, 9, 12, 15, 18

Caibidil 7

Lch 7-1

20 uachtar reoite, 70 reoiteog, 40 milseán, 48 iógart, 50 cupán, 26 cat

Lch 7-2

1. 35 2. 46 3. 77 4. 92

Lch 7-3

1. 4 2. 8 3. 12 4. 16 5. 20 6. 24 7. 28

Lch 7-5

1. $100 + 50 + 8 = 158$

2. $100 + 60 + 9 = 169$

3. $100 + 10 + 1 = 111$

Lch 7-6

1. 146, 135, 115

2. 144, 120, 116

3. 114, 123, 31

Lch 7-7



Lch 7-8

1. 49, 31, 82, 43, 23

2. (a) 44 (b) 80 (c) 33 (d) 54

3. (a) 41 (b) 65 (c) 35 (d) 70

4. 52, 92, 84, 76, 60

Lch 7-9

1. 14, 4 2. 17, 30, 38, 46, 50

3. 29, 47, 49, 59, 76 4. 17

Lch 7-10

1. $>$, $<$, $>$, $>$

2. 17, 25, 28, 31, 39, 47, 53, 61, 71, 97

Lch 7-11

1. (a) 89, 90, 94, 98, 100

(b) 109, 111, 120, 129, 132

(c) 89, 90, 97, 112, 121

(d) 66, 75, 79, 97, 101

(e) 105, 123, 130, 131, 150

(f) 36, 48, 63, 64, 84

(g) 140, 145, 154, 155, 165

(h) 56, 61, 78, 86, 93

2. (a) 60, 58, 47, 39, 16

(b) 90, 80, 72, 63, 59

(c) 120, 118, 110, 105, 101

(d) 110, 107, 102, 98, 90

(e) 96, 87, 80, 78, 69

(f) 75, 65, 58, 56, 49

(g) 102, 97, 92, 89, 87

Lch 7-12

1. 55, 89, 48, 88, 85 2. 8 57, 79, 78, 78, 78

3. 86, 77, 77, 68, 67

Lch 7-13

1. (a) 59 (b) 59 (c) 99 (d) 99

2. (a) 88 (b) 96 (c) 38 (d) 88

3. (a) 65 (b) 59 (c) 79 (d) 87

4. (a) 39 (b) 48 (c) 84 (d) 88

5. (a) 93 (b) 39 (c) 29 (d) 68

6. (a) 59 (b) 39 (c) 78 (d) 69

Lch 7-14

1. 15, 20, 25, 30, 35, 40, 45, 50, 55, 60, 65, 70, 75, 80, 85, 90, 95, 100

Lch 7-15

1. 6, 12, 18, 24, 30, 36, 42, 48, 54, 60, 66, 72

Lch 7-16

1. 7, 14, 21, 28, 35, 42, 49, 56, 63, 70, 77, 84

Lch 7-17

1. 8, 16, 24, 32, 40, 48, 56, 64, 72, 80, 88, 96

Lch 7-19

1. 36, 49, 68, 78, 108

Lch 7-20

1. 9, 18, 27, 36, 45, 54, 63 0 10, 20, 30, 40, 50, 60, 72, 81, 90, 99

Lch 7-21

1. 10, 30, 30, 40, 50, 60, 70, 80, 90, 100

Lch 7-22

1. 22 pram 2. 25 capaillín 3. 26 muga

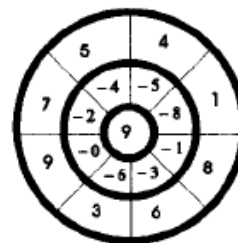
4. 22 planda 5. 26 crann 6. 25 milseán

Lch 7-23

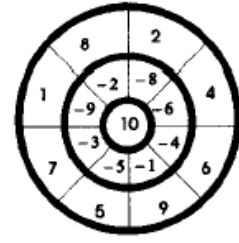
1. €46 2. €60 3. €65 4. €47 5. €1

Lch 7-24

1.



2.



Lch 7-25

1. 32 2. 51 3. 60 4. 51 5. 52 6. 72 7. 65 8. 90

Lch 7-26

1. 35 2. 51 3. 40 4. 31 5. 80 6. 61 7. 56 8. 71

Caibidil 8

Lch 8-1

1. 40 2. 50 3. 40 4. 50 5. 70 6. 80 7. 80,

Lch 8-3

1. 32, 23, 45, 53, 72 2. 8 11, 14, 23, 45, 13

3. 25, 30, 42, 32, 11

Lch 8-4

- (a) 66 (b) 45 (c) 45 (d) 40 (e) 85 (f) 21
- (a) 34 (b) 62 (c) 14 (d) 71 (e) 43 (f) 35
- (a) 36 (b) 35 (c) 18
- (a) 39 (b) 16 (c) 4

Lch 8-5

- 10 cent 2. 20 cent 3. 28 cent 4. 35 cent
- 29 cent 6. 24 cent 7. 11 cent 8. 23 cent

Lch 8-6

- 135 cent 2. 43 cent 3. 46 cent
- 81 cent 5. 95 cent

Lch 8-7

- 0 2. 0 3. 2 cent 4. 2 cent

Lch 8-8

- 4 2. 6 3. 9 4. 7 5. 8 6. 10 7. 3 6. 2

Lch 8-9

- 6 2. 5 3. 8 4. 10 5. 9 6. 3 7. 2 8. 1

Lch 8-10

- 2 2. 4 3. 3 4. 6 5. 5 6. 1 7. 10 8. 9

Lch 8-11

- (a) €0.89 (b) €0.79 (c) €0.78 (d) €0.81
(e) €1.02 (f) €0.94
- (a) €1.67 (b) €1.96 (c) €1.88 (d) €1.84
(e) €1.60 (f) €1.91
- (a) €2.61 (b) €1.77 (c) €1.00
- (a) €4.85 (b) €5.12 (c) €2.71

Lch 8-12

- (a) €0.06 (b) €0.14 (c) €0.19 (d) €0.48
(e) €0.16 (f) €0.26
- (a) €0.19 (b) €0.08 (c) €0.28 (d) €0.18
(e) €0.11 (f) €0.35
- (a) €0.37 (b) €0.17 (c) €0.17
- (a) €0.28 (b) €0.12 (c) €0.08

Lch 8-13

- cearnóg 2. dronuilleog 3. ciorcal 4. triantán
- cón 6. ciúbóideach 7. sorcóir 8. pirimid

Lch 8-14

- B 2. D 3. C

Lch 8-16

- $\frac{1}{2}$ 2. $\frac{1}{2}$ 3. $\frac{1}{4}$ 4. $\frac{1}{2}$ 5. $\frac{1}{2}$ 6. $\frac{3}{4}$ 7. $\frac{1}{4}$
- $\frac{1}{2}$ 9. $\frac{1}{2}$ 10. $\frac{1}{2}$ 11. $\frac{1}{2}$ 12. $\frac{1}{2}$

Lch 8-17

- 4 – nó 5 agus an imlíne san áireamh 2. 15
- 3 chearnóg 4. 16 5. 8 6. 12

Lch 8-19

- (a) 4 cm (b) 3 cm (c) 8 cm (d) 6 cm
- (i) b (ii) 7 cm (iii) 11 cm (iv) 14 cm (v) a

Lch 8-20

Is é an fiarthrasnán an bealach is giorra

Lch 8-21

- (a) 10 cm (b) 7 cm (c) 8 cm (d) 14 cm
(e) 12 cm (f) 13 cm (g) 10 cm

Lch 8-22

- (a) 21 cm (b) 32 cm (c) 30 cm (d) 43 cm (e) 30 cm
- 55 cm

Lch 8-23

- 200 cm 2. 178 cm 3. 40 cm 4. 5 cm
- Iall Pheadair 6. 1 cm

Lch 8-24

- 5, 3, 1 2. bréagach, fíor, fíor, bréagach, bréagach
- fíor, bréagach, fíor, fíor, bréagach

Caibidil 9**Lch 9-1**

- 3 2. 4 3. Cathal 4. 10

Lch 9-2

- 5 2. 4 3. Tadhg 4. 19

Lch 9-3

- 4 2. 2 3. Séamas 4. 20

Lch 9-4

- Dé Céadaoin agus Dé Domhnaigh 2. Déardaoin
- Dé hAoine 4. 36

Lch 9-5

- ceathrú tar éis 7 2. leathuair tar éis 4
- 5 a chlog 4. ceathrú chun 4
- deich tar éis 12 6. leathuair tar éis 8

Lch 9-6

Dé Domhnaigh, Dé Sathairn, Dé Máirt, Dé hAoine,
Dé Luain, Déardaoin, Dé Céadaoin

Lch 9-7

- ceathrú tar éis 12 2. 4 a chlog
- 8 a chlog 4. ceathrú chun 8
- leathuair tar éis 10 6. leathuair tar éis 4

Lch 9-8

Aibreán, Meán Fómhair, Samhain

Lch 9-9

- 14 Meitheamh 2. 29 Meitheamh

Lch 9-10

- Seachtainí: 2, 3; Laethanta: 28, 35 2. (a) 19 (b) 24
- (a) 2 sheachtain agus 5 lá (b) 3 seachtaine agus 3 lá

Lch 9-11

- 11:45, 00:30, 10:00 2. 12:05, 02:40, 12:20, 08:15
- 11:10, 01:50, 09:15, 07:15

Lch 9-12

- leathuair tar éis 5 2. ceathrú tar éis 3
- leathuair tar éis 8 4. 45 nóiméad 5. ceathrú chun 4

Lch 9-13

- = 2. < 3. >

Lch 9-14

- (a) 215 g (b) 160 g (c) 415 g (d) 320 g (e) 285 g

Lch 9-15

- $2\frac{1}{2}$ kg 2. 9 kg 3. 3 kg 4. $3\frac{1}{2}$ kg 5. $2\frac{1}{2}$ kg

Lch 9-16

- gloiní: 12, 18, 24, 30, 36, 42, 48
- gloiní an duine: 2, 3, 4, 5, 6, 7, 8

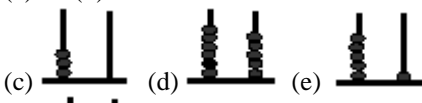



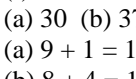
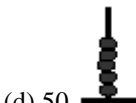


Trialacha

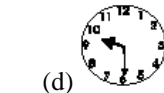
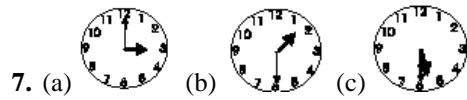
Leibhéal 1

Triail 1

- (a) 16 (b) 18 (c) 30 (d) 32 (e) 40 (f) 35 (g) 39
- (a) < (b) < (c) > (d) < (e) > (f) < (g) > (h) > (i) > (j) <
- (a) 6, 3, 1 (b) 4, 2, 8 (c) 10, 4, 7
- (a) 5 (b) 6 (c) 7 (d) 6, 8, 10, 12 (e) 15, 20, 25, 30
- (a) 3 (b) 8 (c) 7 (d) 3 (e) 2 (f) 9 (g) 10 (h) 12 (i) 13
- (a) $3 + 2 = 5$; $2 + 3 = 5$; $5 - 2 = 3$; $5 - 3 = 2$
(b) $8 + 2 = 10$; $2 + 8 = 10$; $10 - 2 = 8$; $10 - 8 = 2$
- (a) 10, 14, 16 (b) 10, 13; 10, 14 (c) 15, 13, 18 (d) $6 + 5$, $6 + 78$.
- (a) 17 cent (b) 9 cent (c) 29 cent (d) 22 cent (e) 4 cent (f) 2 cent (g) cent
- (a) 2 (b) 4 (c) 9 (d) 30 cent (e) 23 cent (f) 17 cent (g) 13 cent
- (a) 9 cent (b) 12 cent (c) 14 cent (d) 4 cent (e) 6 cent (f) 2 cent (g) 11 cent, 9 cent, 9 cent (h) 23 cent, 13 cent, 27 cent

Triail 2

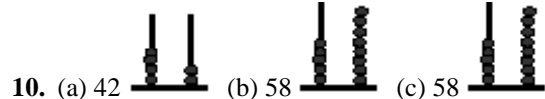
- (a) 32 (b) 36

 (c)  (d)  (e) 
 (f) 
- (a) 30 (b) 37 (c) 41 (d) 40 (e) > (f) < (g) > (h) >
- (a) $9 + 1 = 10$; $1 + 9 = 10$; $10 - 1 = 9$; $10 - 9 = 1$
(b) $8 + 4 = 12$; $4 + 8 = 12$; $12 - 4 = 8$; $12 - 8 = 4$
(c) $7 + 2 = 9$; $2 + 7 = 9$; $9 - 2 = 7$; $9 - 7 = 2$
- (a) 26 (b) 27 (c) 26
 (d) 50  (e) 63  (f) 10, 15
 (g) 10, 14 (h) 10, 13 (i) 10, 15 (j) 10, 14
 (k) 10, 13 (l) 10, 15
- (a) 11 (b) 6 (c) 16 (d) 30 (e) 39 (f) 19 (g) 62 (h) 70 (i) 48 (j) 67
- (a) 30 (b) 42 (c) 50 (d) 65 (e) 51 (f) 92 (g) 72 (h) 85 (i) 70 (j) 64 (k) 71 (l) 47




7. (a) 3 a chlog (b) leathuair tar éis 3



8. (a) Dé Domhnaigh (b) Dé Luain (c) Dé hAoine



9. (a) 42 (b) 58 (c) 58
 (d) 66 (e) $\frac{1}{2}$ (f) $\frac{1}{2}$ (g) $\frac{1}{4}$ (h) $\frac{1}{2}$

10. (a) ciúbóideach (b) ciúb (c) sorcóir (d) sféar (e) pirimid

11. (a) 31 cent (b) 28 cent (h) (ii) is airde

Triail 3


- (a) < (b) > (c) <
 (d) $40 - 1 = 39$; $50 - 1 = 49$; $60 - 1 = 59$;
 $70 - 1 = 69$; $80 - 1 = 79$; $90 - 1 = 89$
 (e) $40 - 6 = 34$; $50 - 6 = 44$; $60 - 6 = 54$;
 $70 - 6 = 64$; $80 - 6 = 74$; $90 - 6 = 84$
 (f) 3, 6; 2 dheich 16 aonad
- (a) 15 (b) 27 (c) 30 (d) 33 (e) 37 (f) 24 (g) 22 (h) 34 (i) 28 (j) 55 (k) 71 (l) 17
- (a) $10 + 6 = 16$; $6 + 10 = 16$;
 $16 - 6 = 10$; $16 - 10 = 6$
 (b) 38 cent (c) 37 cent
 (d) 84 cent, €1.07, €2.84, €3.47, €4.28, €8.42
- a, b, d, e, h
- (a) (ii) (b) (i), (iii) (c) (iii)
- (a) 8 (b) 19 (c) 17 (d) 41 cent (e) 12 cent (f) 44 cent
- (a) 28 (b) 21 (c) 14 (d) (i) 4 (ii) 5 (iii) 3 (iv) 3 (e) (ii)

Leibhéal 2

Triail 1

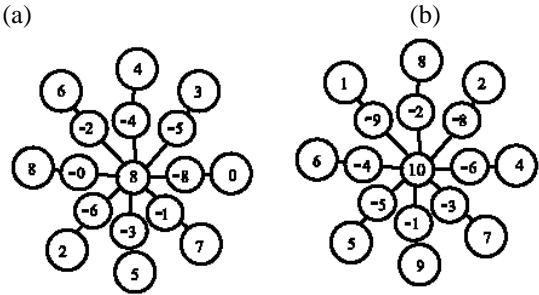
- (a) $<$ (b) $>$ (c) $=$
- (a) 9 (b) $>$, $<$, $>$; $<$, $>$, $>$; $<$, $=$, $<$; $>$, $>$, $<$
(c) (1) bus (2) carr (3) leoraí (4) trucail (5) leoraí (6) 2ú
- (a) 16 (b) 34 cent, 27 cent, 2 cent (c) 27 cent
(d) 92, 94, 95, 97 (e) 79, 80, 81, 82, 84
(f) 81, 82, 84, 85, 86, 87
(g) 95, 96, 98, 99, 100, 101
- (a) 29 (b) 23 (c) 70 (d) 86 (e) 83 (f) 81
- (a) 32 (b) 62 (c) 73 (d) 84

Triail 2

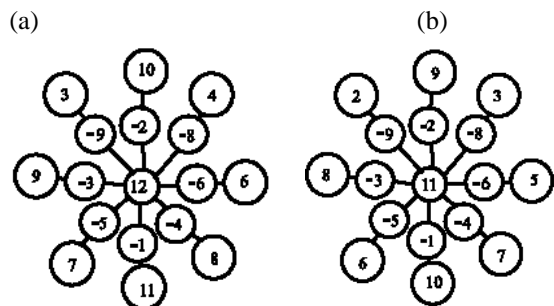
- (b) 5, 13, 45, 17
- (a) 238, 329, 105

- (c) 49 (d) 52 (e) 44
- (a) 20, 31, 36, 51 (b) 39, 46, 64, 93, 205, 502
(c) 37, 49, 73, 94, 99, 102 (d) 63 (e) 56 (f) 65 (g) 98
- (a) 9, 11, 6, 21 (b) 34, 39, 71, 28 (c) 66 (d) 34
(e) 18 cent (f) 23 cent (g) 25 cent (h) 37 cent
- (a) €1.55 (b) 46 cent (c) 53 cent (d) 83 cent
(e) €1.07
- (a) 31 cent (b) 38 cent (c) 32 cent (d) 24 cent
- (a) €0.73 (b) €0.81 (c) €0.89 (d) €0.91 (e) €0.98
(f) €0.90 (g) €0.55 (h) €0.77

Triail 3

- (a) 3 (b) 5 (c) Dé Luain (d) 5 (e) 4 (f) 20
- (a) €0.03 (b) €0.05 (c) €0.30 (d) €0.30 (e) €0.01
(f) €0.05 (g) €2.15 (h) 60 cent
- (a)



- (a)



- (a) 10 dturas; 50 cent (b) 736 (c) €10 (d) 24 (e) €4